

Sujal Patel (~~8121564132~~)
(9574234622).


ECE

PM 1(B)

ACE Academy

Signals & Systems → Part - 2

All the Best
OK / on



Ch - 4 :- Fourier Transform (F.T.)

⇒ Transformation is the process in which one domain is converted to another domain such that signal analysis becomes easy.

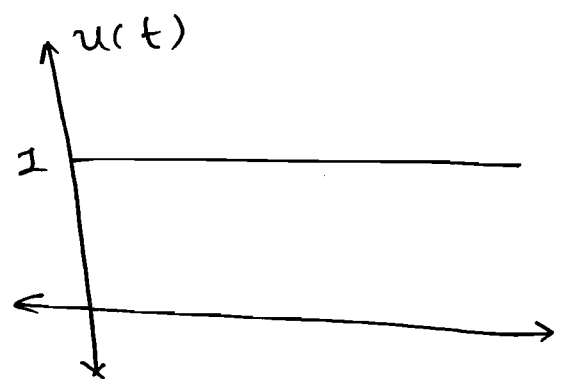
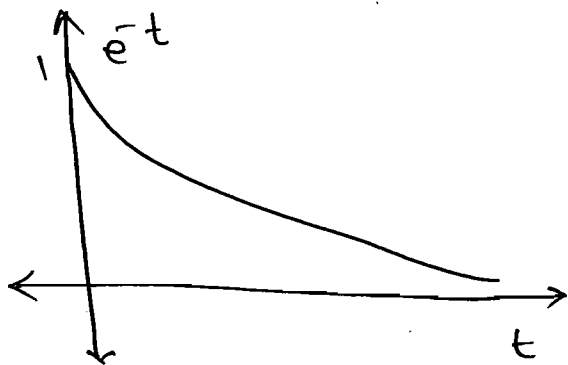
⇒ For any Non Periodic signal as $T \rightarrow \infty$ implies $\omega_0 \rightarrow 0$.

⇒ The discrete spectrum of Fourier Series is converted to continuous spectrum in Fourier Transform.

⇒ Extension of F.S. is F.T.

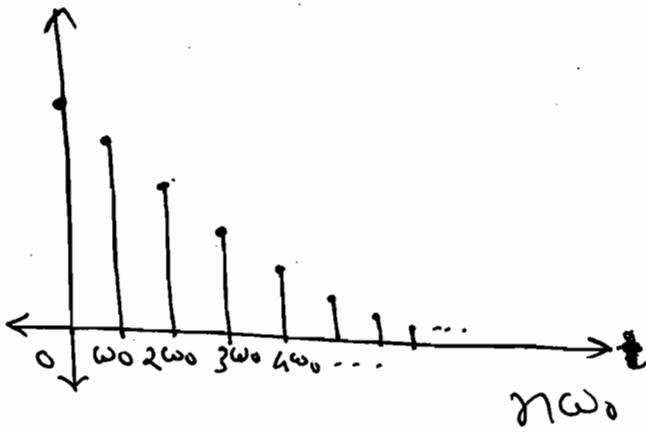
⇒ F.T. is extension of F.S. to non-periodic signal.

$$\Rightarrow x(t) = e^{-t} \cdot u(t), \quad u(t)$$



$T \rightarrow \infty$, Non-periodic.

⇒

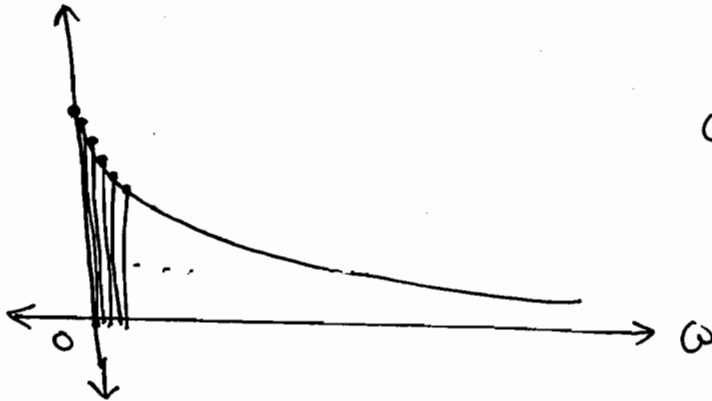


$$T \rightarrow \infty$$

$$\omega \rightarrow 0$$

i.e. $n\omega_0 \rightarrow \omega$.

⇓



$$\omega = n\omega_0$$

⇒

From F.S.

$$x(t) = \sum_{n=-\infty}^{\infty} c_n \cdot e^{j\omega_0 n t}$$

&

$$c_n = \frac{1}{T} \int_{-T/2}^{+T/2} x(t) \cdot e^{-j\omega_0 n t} dt$$

$$\boxed{T \rightarrow \infty}$$

lim
 $T \rightarrow \infty$

$$T c_n = \int_{-\infty}^{+\infty} x(t) \cdot e^{-j\omega t} dt$$

⇒

$$X(\omega) = \int_{-\infty}^{+\infty} x(t) \cdot e^{-j\omega t} dt$$

⇓

F.T. of $x(t)$.

kernel.

⇒ I.F.T.

$$\therefore x(t) = \frac{1}{2\pi} \int_{-\infty}^{\infty} X(\omega) \cdot e^{j\omega t} \cdot d\omega.$$

$$\omega = 2\pi f$$

$$\therefore d\omega = 2\pi df.$$

I.F.T.

$$\therefore x(t) = \int_{-\infty}^{\infty} X(f) \cdot e^{j2\pi ft} \cdot df.$$

⇒ F.T.

$$X(f) = \int_{-\infty}^{+\infty} x(t) \cdot e^{-j2\pi ft} \cdot dt$$

$$\Rightarrow 2\pi \delta(\omega) = \delta(f).$$

Proof: $2\pi \delta(\omega) = 2\pi \delta(2\pi f).$

$$= \frac{2\pi}{|2\pi|} \cdot \delta(f)$$

$$2\pi \delta(\omega) = \delta(f).$$

* Convergence of F.T.:

$$\Rightarrow X(\omega) < \infty.$$

⇒ Fourier transform is defined for
stable and energy signals. ✓

Soln:

$$\textcircled{a} \quad X(\omega) = \int_{-\infty}^{\infty} x(t) \cdot e^{-j\omega t} \cdot dt.$$

make $\omega = 0$.

$$\therefore X(0) = \int_{-\infty}^{+\infty} x(t) \cdot dt = \text{Area under the curve.}$$

$$\therefore X(0) = (4 \times 2) - \left(\frac{1}{2} \times 1 \times 2\right)$$

$$\boxed{X(0) = 7}$$

(b)

$$x(t) = \frac{1}{2\pi} \int_{-\infty}^{+\infty} X(\omega) \cdot e^{j\omega t} \cdot d\omega.$$

make $t = 0$.

$$\therefore x(0) = \frac{1}{2\pi} \int_{-\infty}^{+\infty} X(\omega) \cdot e^0 \cdot d\omega.$$

$$\Rightarrow \int_{-\infty}^{+\infty} X(\omega) \cdot d\omega = 2\pi x(0).$$

$$= 2\pi \times 2$$

$$= 4\pi.$$

Note:

→ Area under one domain corresponds to observing the other domain at origin.

P 4.1.3. Consider the signal $x(t) = \begin{cases} e^{-t} & ; t > 0 \\ 0 & ; t < 0 \end{cases}$

and $X(\omega)$ is the F.T. of this signal.

Then the value of $\frac{1}{2\pi} \int_{-\infty}^{+\infty} X(\omega) d\omega$ is _____.

Soln.

$$x(t) = \frac{1}{2\pi} \int_{-\infty}^{+\infty} X(\omega) \cdot e^{j\omega t} \cdot d\omega$$

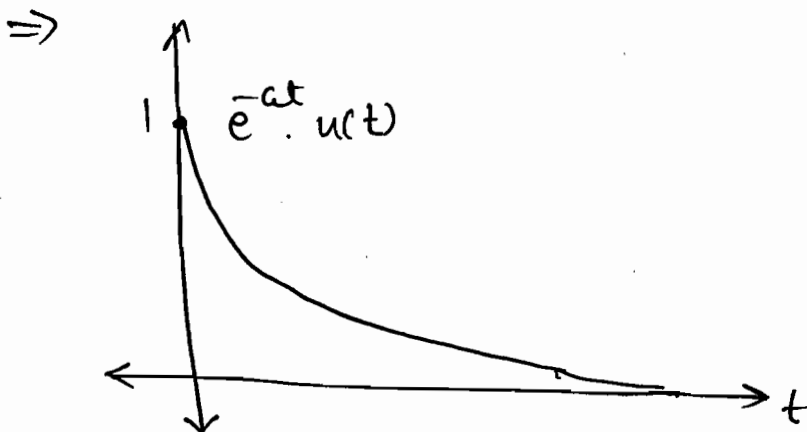
$$\text{So, } x(0) = \frac{1}{2\pi} \int_{-\infty}^{+\infty} X(\omega) d\omega = e^{-0} = 1.$$

$$\text{So, } \frac{1}{2\pi} \int_{-\infty}^{+\infty} X(\omega) \cdot d\omega = 1.$$

* F.T. of Standard signals:

1) Decaying exponential

$$x_1(t) = e^{-at} \cdot u(t), \quad a > 0.$$



$$X(\omega) = \int_{-\infty}^{\infty} x(t) \cdot e^{-j\omega t} dt.$$

$$= \int_{-\infty}^{+\infty} e^{-at} \cdot e^{-j\omega t} dt.$$

$$\therefore X(\omega) = \int_{+\infty}^{\infty} e^{-(a+j\omega)t} dt.$$

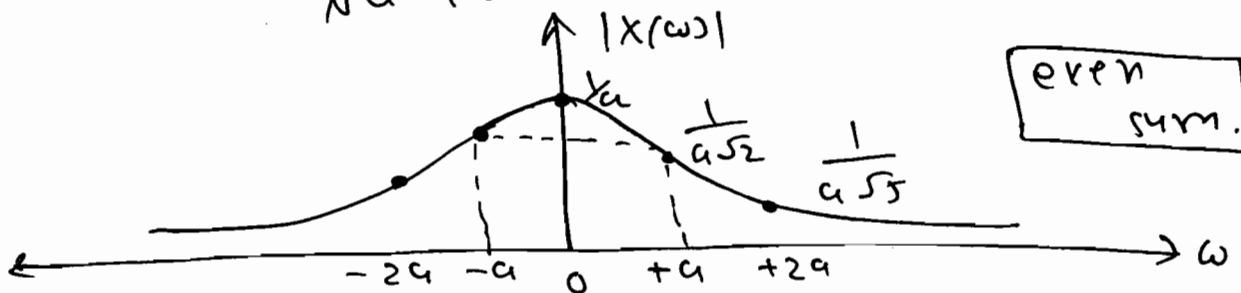
$$= \left[\frac{e^{-(a+j\omega)t}}{-(a+j\omega)} \right]_0^{\infty}$$

$$X(\omega) = 0 + \frac{1}{a+j\omega}.$$

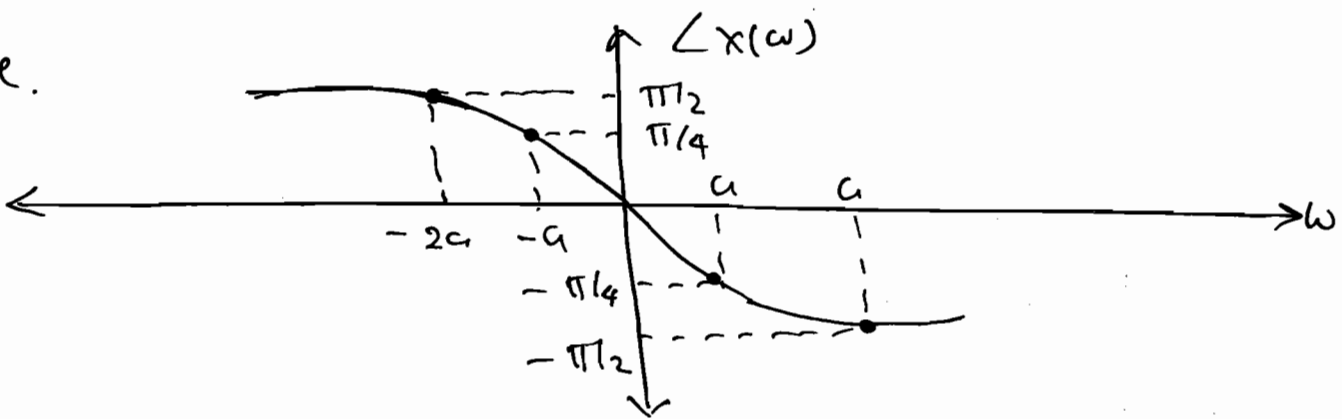
$$\therefore \boxed{e^{-at} \cdot u(t) \xleftrightarrow{\text{F.T.}} \frac{1}{a+j\omega}}$$

$$\Rightarrow |X(\omega)| = \frac{1}{\sqrt{a^2 + \omega^2}}, \quad \angle X(\omega) = -\tan^{-1}\left(\frac{\omega}{a}\right).$$

Mag.

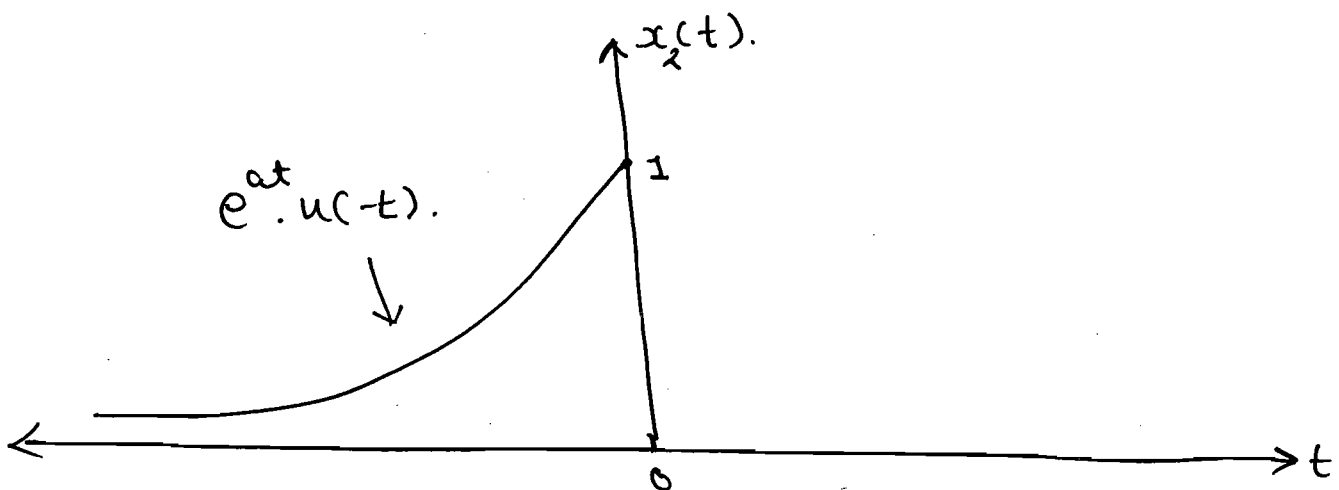


Phase.



2) $e^{at} \cdot u(-t), \quad a > 0.$

\Rightarrow



$\therefore x_2(t) = x_1(-t)$

\Rightarrow using time reversal property,

$$x(t) \xleftrightarrow{\text{F.T.}} X(\omega)$$

$$x(-t) \xleftrightarrow{\text{F.T.}} X(-\omega)$$

$$\therefore X(-\omega) = \frac{1}{a - j\omega}$$

$$\therefore \boxed{e^{at} u(-t) \xleftrightarrow{\text{F.T.}} \frac{1}{a - j\omega}}$$

3) $x(t) = \delta(t).$

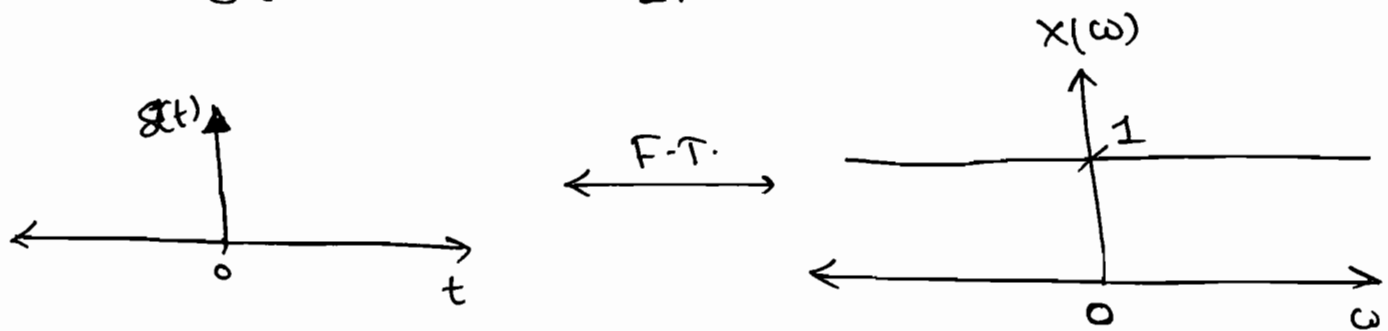
\Rightarrow

$$X(\omega) = \int_{-\infty}^{\infty} \delta(t) \cdot e^{-j\omega t} dt$$

$$X(\omega) = e^{-j\omega(0)} \quad (\because t_0 = 0 \text{ shifting property of impulse})$$

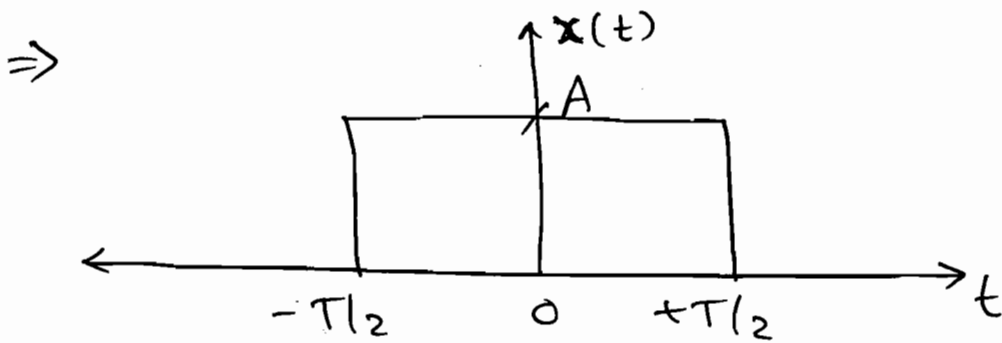
$$\boxed{X(\omega) = 1}$$

$$\therefore \delta(t) \xleftrightarrow{F.T.} 1.$$



\Rightarrow Spectrum of impulse is constant for all the frequencies.

$$\textcircled{4} \quad X(t) = A \text{rect}(t/T) \quad (\text{or}) \quad A \Pi(t/T).$$



$$\Rightarrow X(\omega) = \int_{-\infty}^{+\infty} x(t) \cdot e^{-j\omega t} dt.$$

$$\therefore X(\omega) = \int_{-T/2}^{+T/2} A \cdot e^{-j\omega t} dt.$$

$$= A \left[\frac{e^{-j\omega t}}{-j\omega} \right]_{-T/2}^{+T/2}$$

$$\therefore X(\omega) = \frac{A}{j\omega} \left[e^{j\frac{\omega T}{2}} - e^{-j\frac{\omega T}{2}} \right].$$

$$= \frac{A}{j\omega} \times 2j \left[\frac{e^{j\frac{\omega T}{2}} - e^{-j\frac{\omega T}{2}}}{2j} \right]$$

$$= \frac{2A}{\omega} \times \sin \frac{\omega T}{2}$$

$$= \frac{2A}{\omega} \times \frac{1}{\frac{\omega T}{2}} \times \frac{\omega T}{2} \sin \frac{\omega T}{2}$$

$$= \frac{2A}{\omega} \times \frac{\omega T}{2} \times \frac{\sin \frac{\omega T}{2}}{\frac{\omega T}{2}}$$

$$\therefore X(\omega) = AT \operatorname{sinc} \left(\frac{\omega T}{2} \right) \quad \checkmark$$

\Rightarrow

$$\operatorname{sinc}(x) = \frac{\sin(x)}{x}$$

$$\operatorname{sinc}(x) = \frac{\sin(\pi x)}{x} = \frac{\sin \pi x}{\pi x}$$

$$\begin{aligned} \Rightarrow \operatorname{sinc} \left(\frac{x}{\pi} \right) &= \frac{\sin \left(\frac{\pi x}{\pi} \right)}{\frac{\pi x}{\pi}} \\ &= \frac{\sin x}{x} = \operatorname{sinc}(x) \end{aligned}$$

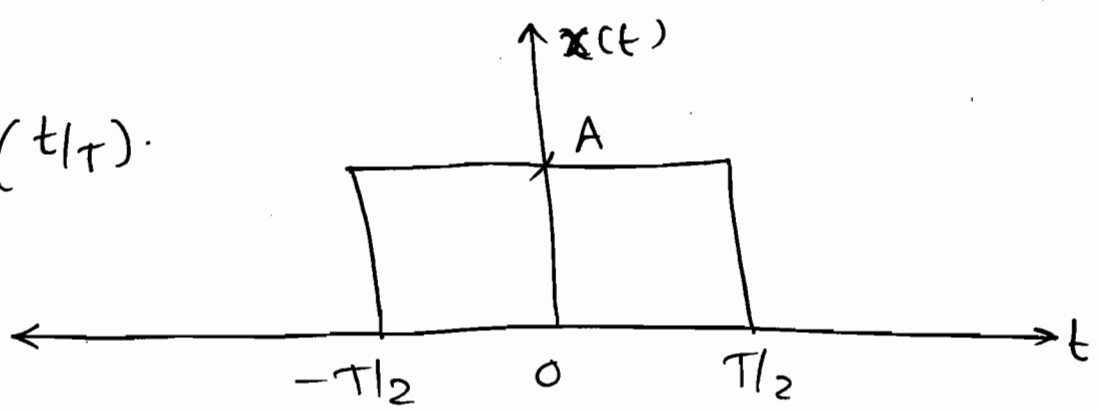
$$\Rightarrow \operatorname{sinc} \left(\frac{x}{\pi} \right) = \operatorname{sinc}(x)$$

$$\therefore X(\omega) = AT \operatorname{sinc} \left(\frac{\omega T}{2\pi} \right) \quad \checkmark$$

$$= AT \operatorname{sinc}(fT) \quad (\because \omega = \frac{2\pi}{T})$$

⇒

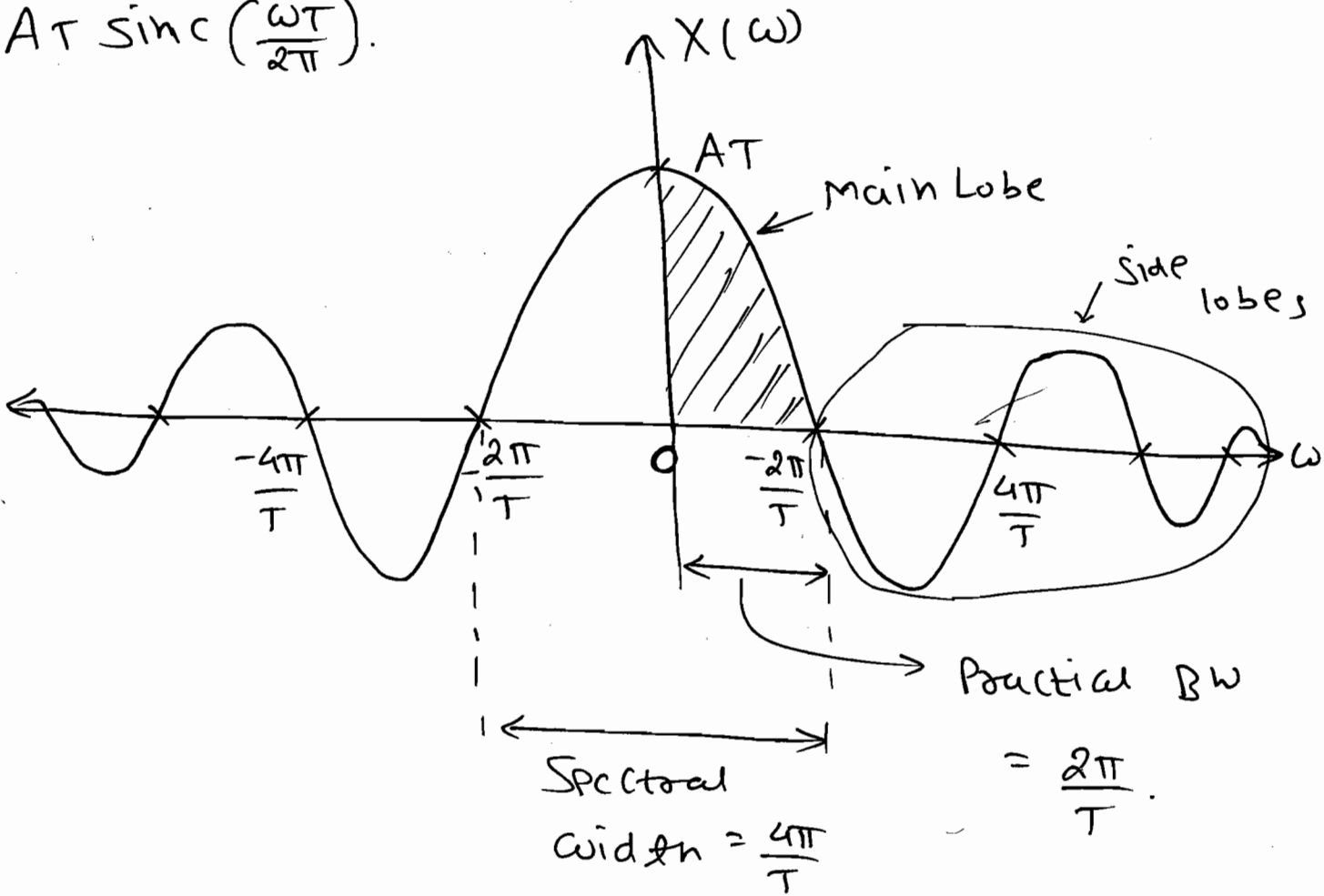
$A \text{rect}(t/\tau)$



F.T.

F.T.

$AT \text{sinc}(\frac{\omega T}{2\pi})$



⇒ Area under spectrum is

⇒ Value (Amp) of signal at $t=0$.

⇒ Area under signal ⇒ Value (Amp) of spectrum at $t=0$ $\omega=0$.

$$\Rightarrow \text{Practical BW} = \frac{2\pi}{T}$$

$$\text{Spectral width} = \frac{4\pi}{T}$$

\Rightarrow Signal is zero at multiple of $\frac{2\pi}{T}$ of ω .

$$\Rightarrow \text{Null to Null BW} = \text{Zero crossing BW} = \frac{2\pi}{T}$$

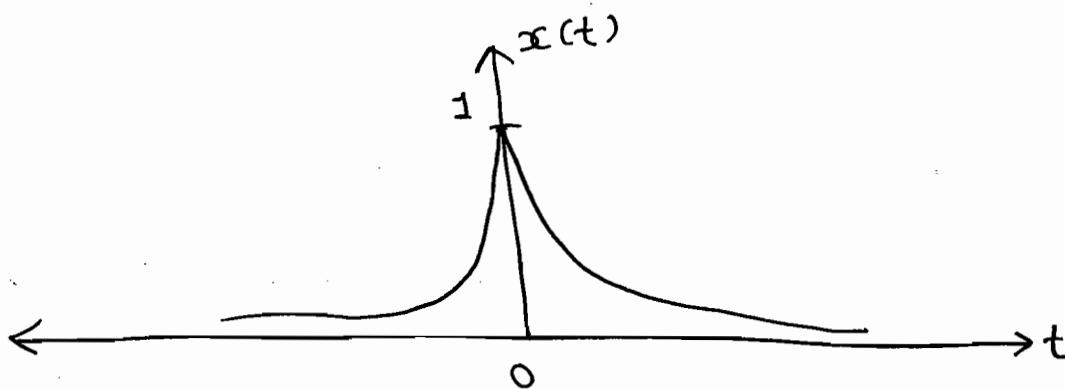
\Rightarrow A signal can not be time limited and Band limited simultaneously.

\Rightarrow Narrow Band in one domain becomes wideband in other domain.

$$(5) \quad x(t) = e^{-\alpha|t|}$$

$$\Rightarrow x(t) = e^{-\alpha t}; \quad t > 0$$

$$= e^{\alpha t}; \quad t < 0.$$



$$\therefore y(t) = e^{-\alpha t} \cdot u(t) + e^{\alpha t} \cdot u(-t).$$

$$= \frac{1}{\alpha + j\omega} + \frac{1}{\alpha - j\omega}.$$

$$y(t) = \frac{2\alpha}{\alpha^2 + \omega^2}.$$

$$\therefore \boxed{e^{-\alpha|t|} \xleftrightarrow{\text{F.T.}} \frac{2\alpha}{\alpha^2 + \omega^2}}$$

Method - II:

$$\Rightarrow \text{secu} \longleftrightarrow \text{even.}$$

$$\text{e.g. } x(t) = e^{-\alpha t} \cdot u(t).$$

$$X(\omega) = \frac{1}{\alpha + j\omega} \times \frac{\alpha - j\omega}{\alpha - j\omega}.$$

$$X(\omega) = \frac{\alpha - j\omega}{\alpha^2 + \omega^2}.$$

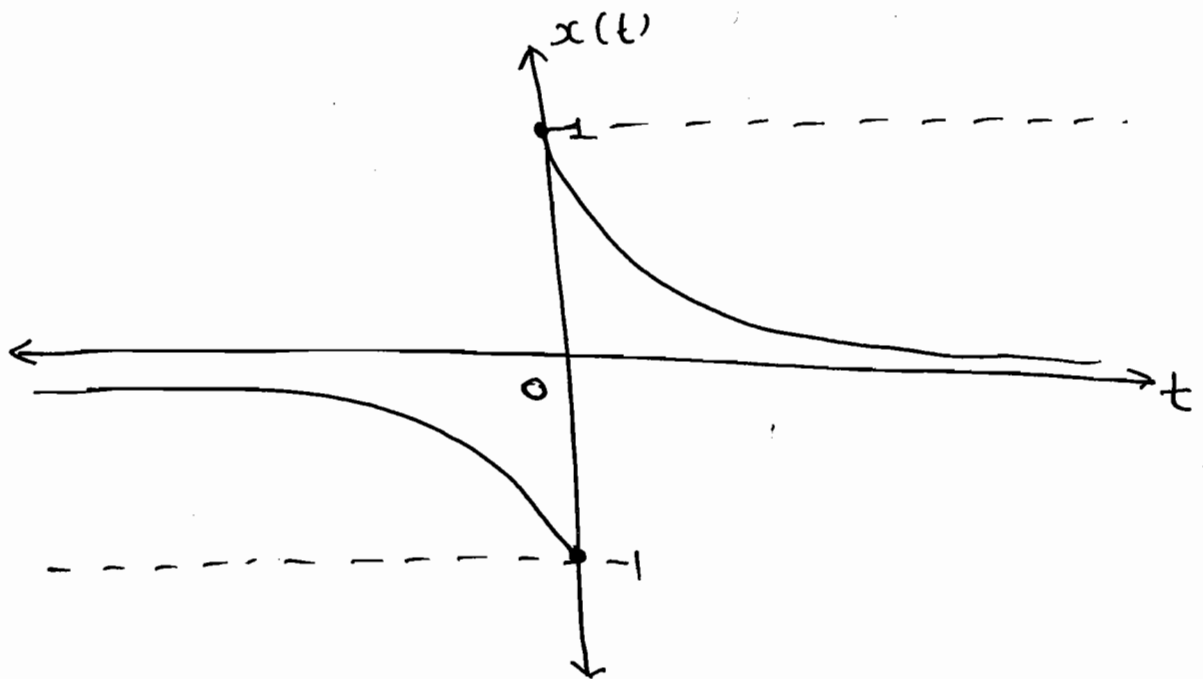
$$\Rightarrow x_{\text{even}}(t) = \frac{x(t) + x(-t)}{2}$$

$$= \frac{X(\omega) + X(-\omega)}{2}$$

$$\boxed{x_{\text{even}}(t) = \frac{2\alpha}{\alpha^2 + \omega^2}}$$

$$\textcircled{6} \quad x(t) = e^{-\alpha t} u(t) - e^{\alpha t} u(-t).$$

\Rightarrow



$$\Rightarrow \quad X(\omega) = \frac{\alpha - j\omega}{\alpha^2 + \omega^2} - \frac{\alpha + j\omega}{\alpha^2 + \omega^2}.$$

$$\boxed{X(\omega) = \frac{-2j\omega}{\alpha^2 + \omega^2}} \quad \Rightarrow \quad \text{Real} \leftrightarrow \text{odd}.$$

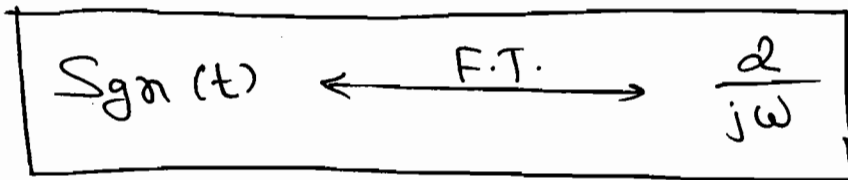
Now, say $\alpha \rightarrow 0$

$$\lim_{\alpha \rightarrow 0} X(\omega) = \lim_{\alpha \rightarrow 0} \frac{-2j\omega}{\alpha^2 + \omega^2} = \frac{-2j\omega}{\omega^2}$$

$$= \frac{2}{j\omega}.$$

$$\text{Now, } \lim_{\alpha \rightarrow 0} y(t) = \lim_{\alpha \rightarrow 0} e^{-\alpha t} u(t) - e^{\alpha t} u(-t). \\ = u(t) - u(-t) = \text{sgn}(t).$$

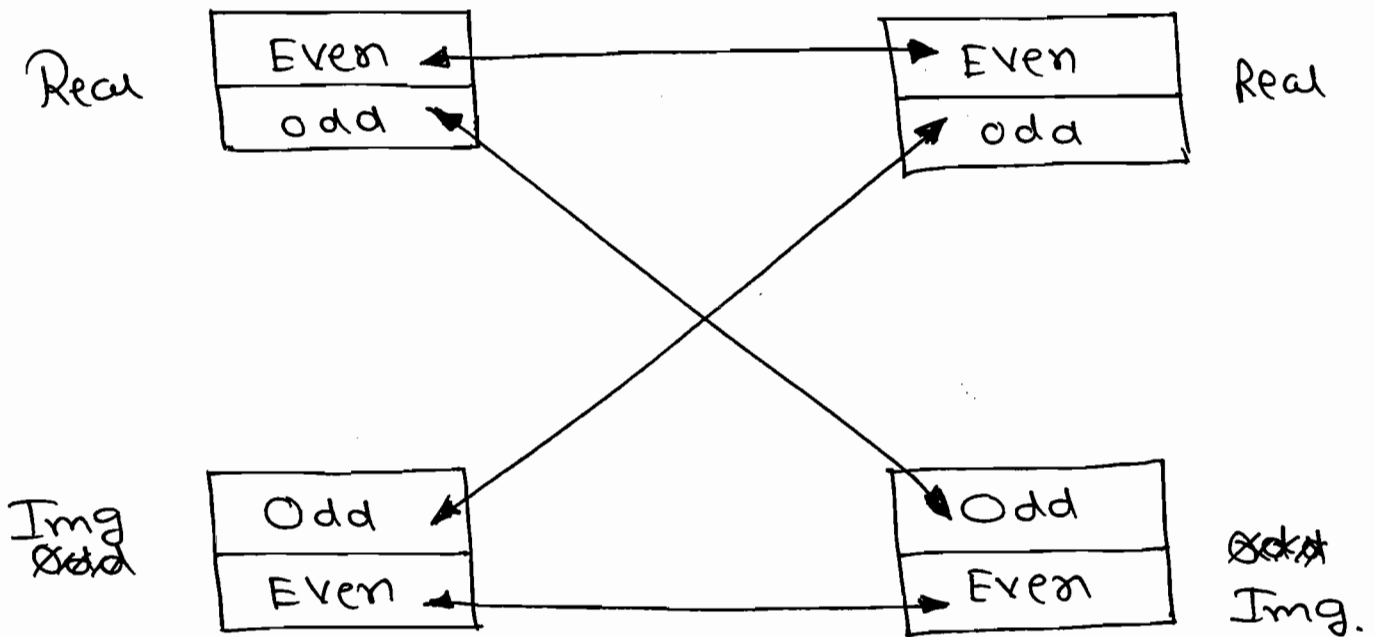
⇒



Real & odd

Imag & odd.

*



* Properties of F.T.:

① Duality:

⇒ $x(t) \longleftrightarrow X(\omega)$.

$X(t) \longleftrightarrow 2\pi x(-\omega)$.

⇒ $x(t) = \frac{1}{2\pi} \int_{-\infty}^{\infty} X(\omega) \cdot e^{j\omega t} \cdot d\omega$.

replace 't' by '-t'.

∴ $x(-t) = \frac{1}{2\pi} \int_{-\infty}^{\infty} X(\omega) \cdot e^{-j\omega t} \cdot d\omega$.

$$\therefore 2\pi x(-t) = \int_{-\infty}^{+\infty} X(\omega) \cdot e^{-j\omega t} \cdot d\omega.$$

$$t \leftrightarrow \omega$$

$$\therefore 2\pi x(-\omega) = \int_{-\infty}^{\infty} X(t) \cdot e^{-j\omega t} \cdot dt.$$

$$\boxed{2\pi x(-\omega) = X(t).}$$

egs:

i) $e^{3t} u(-t) \longleftrightarrow \frac{1}{3-j\omega}$

$$\frac{1}{3-jt} \xleftarrow{t=-\omega} 2\pi e^{3(-\omega)} \cdot u(\omega).$$

ii)

$$e^{-|t|} \longleftrightarrow \frac{2}{t^2+1}$$

$$\frac{2}{t^2+1} \longleftrightarrow 2\pi e^{-|\omega|}$$

$$\Rightarrow 2\pi e^{-|\omega|} //$$

iii)

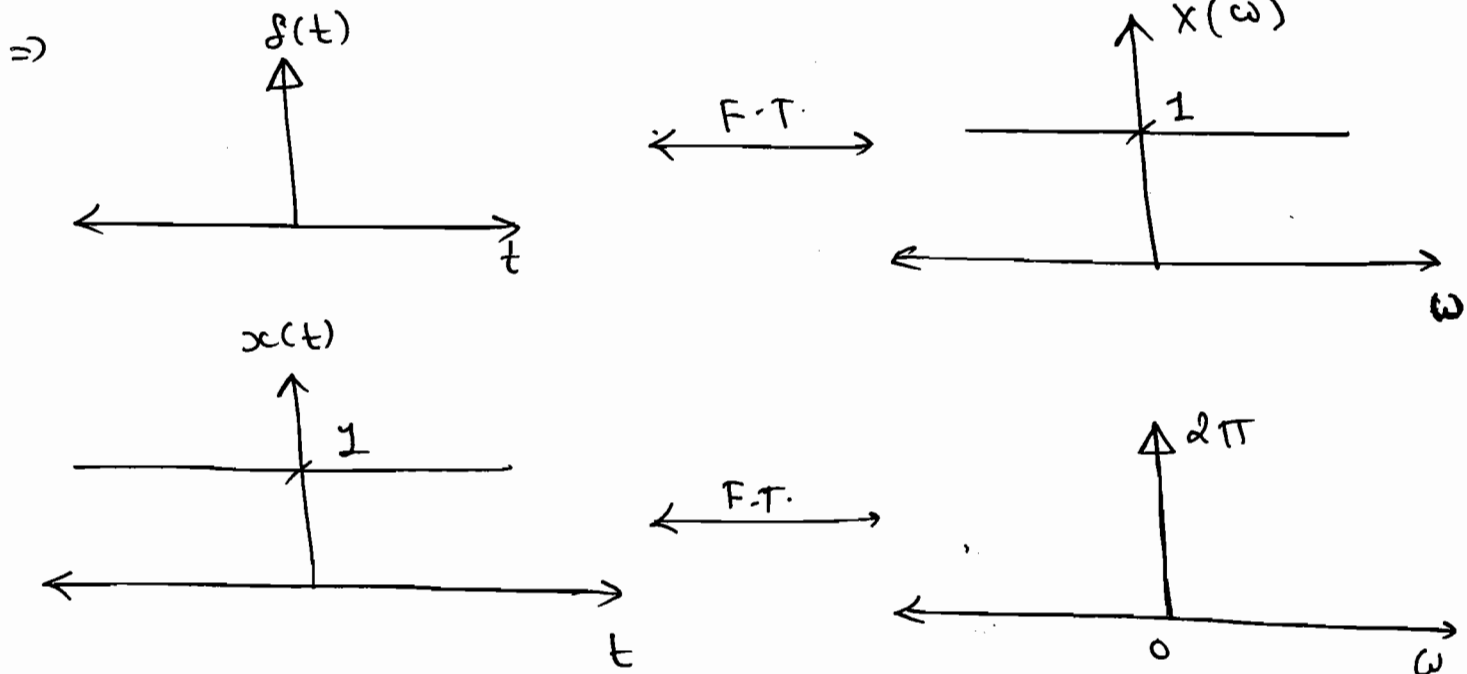
$$\delta(t) \longleftrightarrow 1$$

$$1 \longleftrightarrow 2\pi \delta(-\omega)$$

$$= \frac{2\pi}{|-1|} \cdot \delta(\omega)$$

$$= 2\pi \cdot \delta(\omega).$$

$$= \delta(f).$$



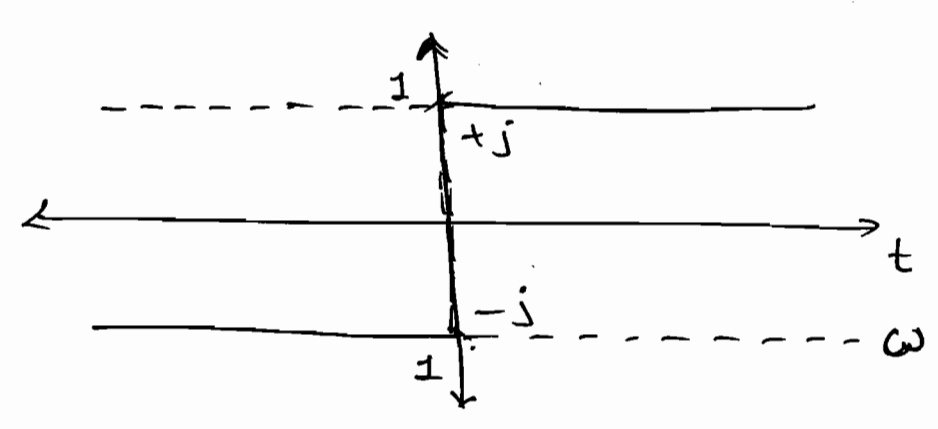
(iv)

$$\text{Sgn}(t) \xleftrightarrow{\text{F.T.}} \frac{2}{j\omega}$$

$$\frac{2}{jt} \xleftrightarrow{\text{F.T.}} 2\pi \text{Sgn}(-\omega)$$

$$\frac{1}{jt} \xleftrightarrow{\text{F.T.}} -\pi \text{Sgn}(\omega)$$

$$\therefore \boxed{\frac{1}{\pi t} \xleftrightarrow{\text{F.T.}} -j \text{Sgn}(\omega)}$$



⇒ Impulse response of Hilbert Transform.

⇒ To set the additional $\pi/2$ phase angle we have to design $\frac{1}{\pi t}$ system in time domain.

$$\Rightarrow \text{Sgn}(t) = 2u(t) - 1.$$

$$\therefore u(t) = \frac{1 + \text{Sgn}(t)}{2}$$

$$\therefore u(t) \xleftrightarrow{\text{F.T.}} \frac{2\pi\delta(\omega) + \frac{2}{j\omega}}{2}$$

$$\Rightarrow u(t) \xleftrightarrow{\text{F.T.}} \frac{1}{j\omega} + \pi\delta(\omega). \quad \checkmark$$

\Rightarrow rect in time domain \longleftrightarrow Sa in freq.

$$\text{rect}\left(\frac{t}{2a}\right) \longleftrightarrow \int_{-a}^a \text{Sa}\left(\frac{\omega a}{2}\right)$$

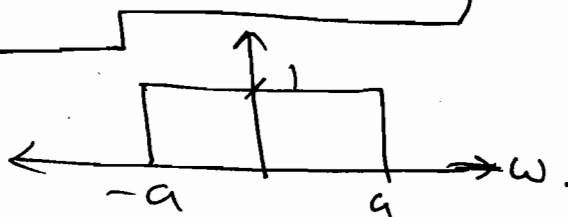
$$\text{rect}\left(\frac{t}{2a}\right) \longleftrightarrow 2a \cdot \text{Sa}(\omega a).$$

Duality

$$2a \cdot \text{Sa}(at) \longleftrightarrow 2\pi \cdot \text{rect}\left(-\frac{\omega}{2a}\right).$$

$$a \cdot \frac{\sin(at)}{at} \longleftrightarrow \pi \cdot \text{rect}\left(\frac{\omega}{2a}\right). \quad (\text{even})$$

$$\therefore \frac{\sin(at)}{\pi t} \longleftrightarrow \text{rect}\left(\frac{\omega}{2a}\right). \quad \checkmark$$



② Time Scaling:-

$$\Rightarrow \text{If } x(t) \longleftrightarrow X(\omega).$$

$$x(\alpha t) \longleftrightarrow \frac{1}{|\alpha|} X(\omega/\alpha).$$

Compression \longleftrightarrow Expansion.

e.g.

$$\text{let, } x(t) = A \text{rect}(t/T).$$

$$\therefore A \text{rect}(t/T) \longleftrightarrow AT \text{sinc}\left(\frac{\omega T}{2}\right).$$

$$\text{Now, } y(t) = A \text{rect}\left(\frac{2t}{T}\right).$$

$$y(t) = X(2t).$$

$$\therefore Y(\omega) = \frac{1}{2} X(\omega/2).$$

$$= \frac{AT}{2} \text{sinc}\left(\frac{\omega/2 \cdot T}{2}\right).$$

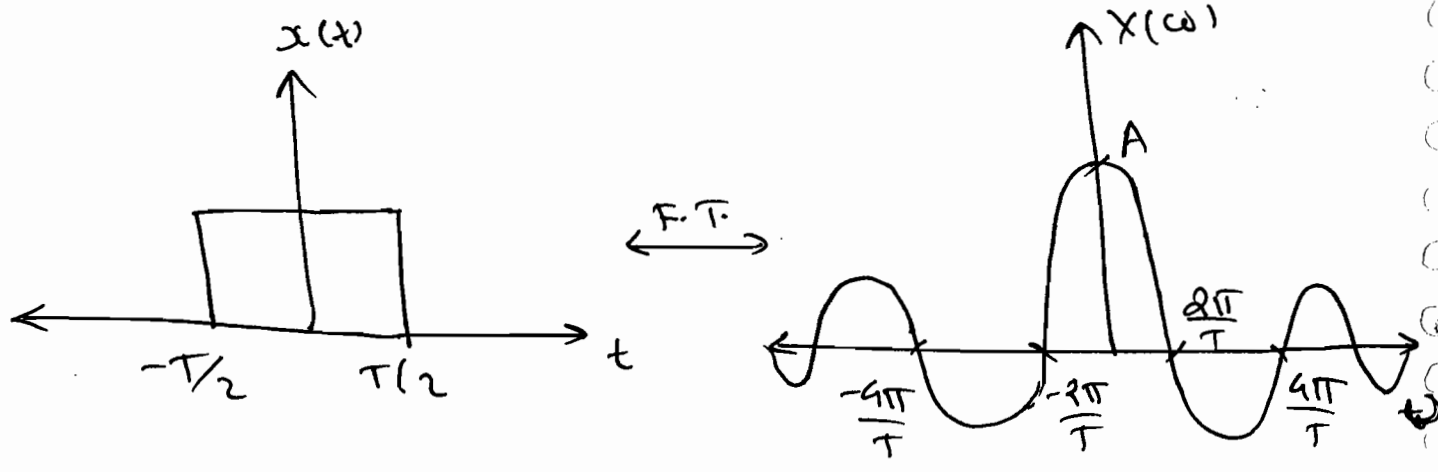
$$Y(\omega) = \frac{AT}{2} \text{sinc}\left(\frac{\omega T}{4}\right).$$

$$\therefore \frac{\omega T}{4} = \pm n\pi \Rightarrow \omega = \pm \frac{4n\pi}{T}.$$

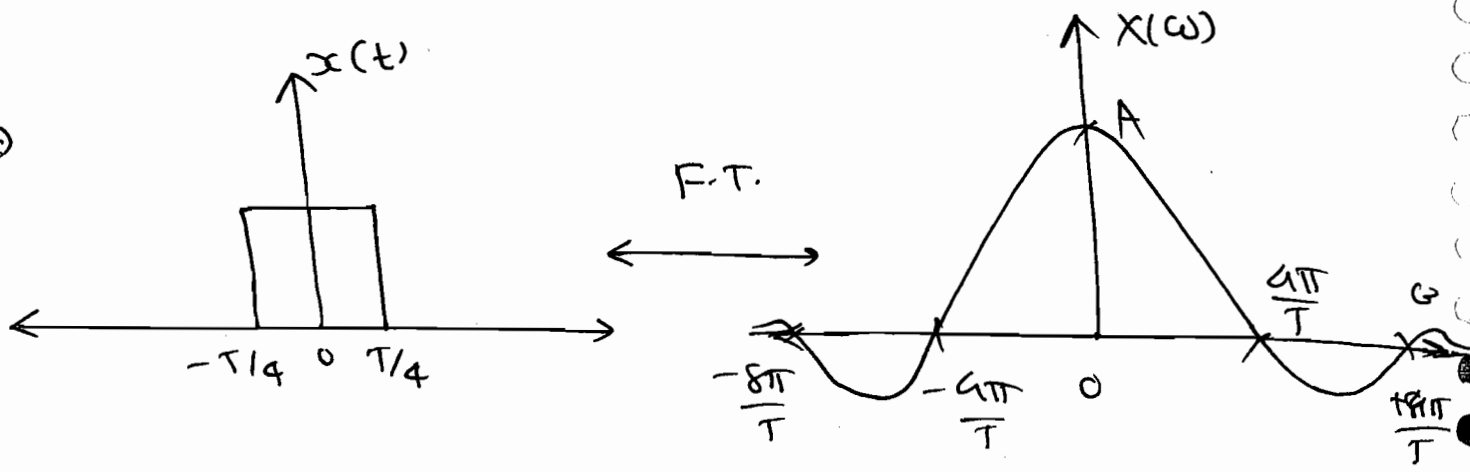
$$\therefore Y(\omega) = \frac{AT}{2} \text{sinc}\left(\frac{\omega T}{4\pi}\right).$$

$$\omega = \pm \frac{4n\pi}{T}.$$

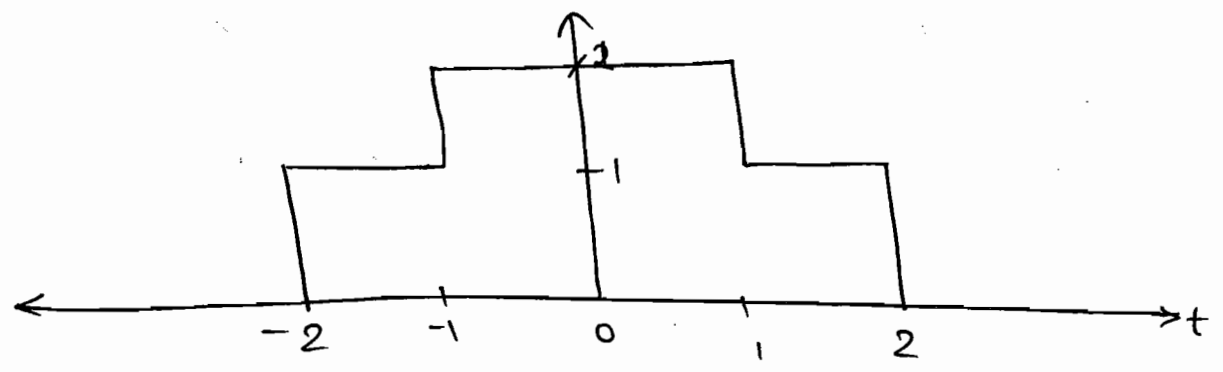
⇒



⇒

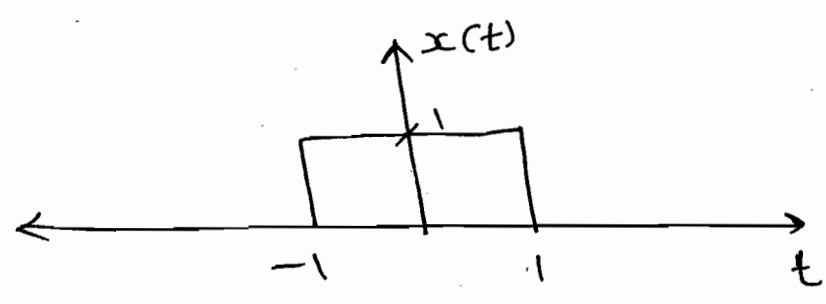


P4.2.4. Find the F.T. of the signal shown in fig?



solⁿ:

let, $x(t) = 1 \cdot \text{rect}(t/2)$.



∴ $y(t) = 2x(t) + x(t/2)$.

$$\therefore 1. \text{rect}(t/2) \longleftrightarrow 2 \text{sinc}\left(\frac{\omega}{2}\right)$$

$$\Rightarrow 2 \text{sinc}(\omega).$$

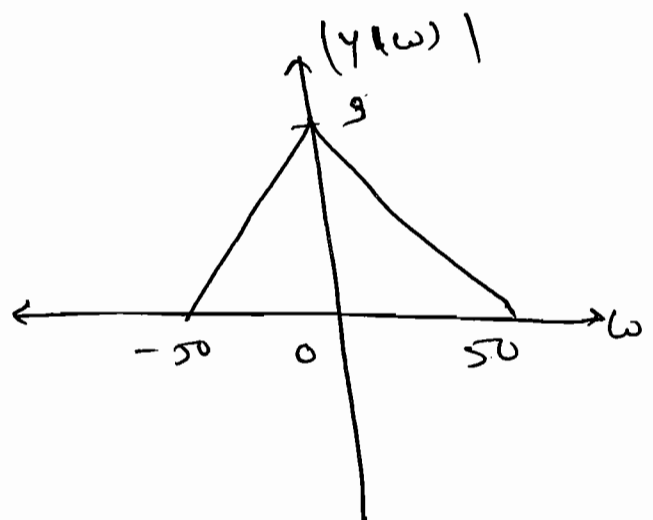
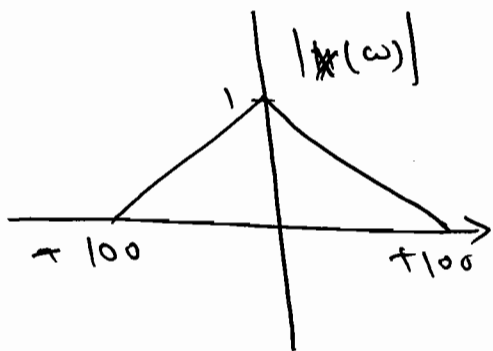
$$\therefore y(t) = x(t) + x(t/2).$$

$$\therefore Y(\omega) = 2 \text{sinc}(\omega) + \frac{1}{|1/2|} \cdot X(2\omega/2).$$

$$\therefore Y(\omega) = 2 \text{sinc}(\omega) + 2 \text{sinc}(\omega).$$

$$\therefore Y(\omega) = 2 \text{sinc}(\omega) + 4 \text{sinc}(2\omega).$$

P4.2.5 The magnitude of F.T. $X(\omega)$ of a function in fig (a) the magnitude of F.T. $Y(\omega)$ of other function $y(t)$ is shown below in fig (b). The phases $X(\omega)$ and $Y(\omega)$ are zero for all ω . The magnitude and frequency units are identical in both the figures. The fn $y(t)$ can be expressed in terms of $x(t)$ as _____



Solⁿ:

$$|Y(\omega)| = 3|x(2\omega)|$$

$$= 3 \cdot x(\omega/2)$$

$$= 3 \cdot \frac{1}{2} \times \frac{1}{\frac{1}{2}} x(\omega/2)$$

$$\therefore \boxed{y(t) = \frac{3}{2} x(t/2)}$$

③

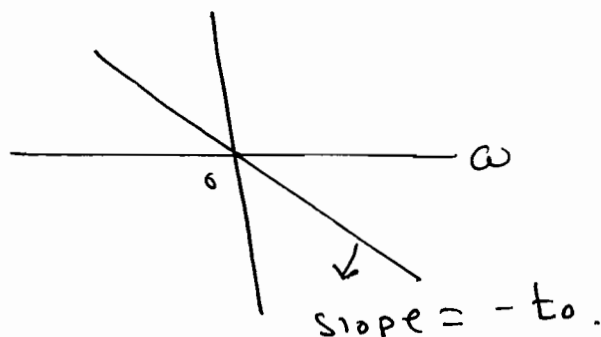
Time - Shifting:

$$\Rightarrow \text{If } x(t) \xleftrightarrow{\text{F.T.}} X(\omega)$$

$$\text{then } \boxed{x(t-t_0) \xleftrightarrow{\text{F.T.}} e^{-j\omega t_0} X(\omega)}$$

\Rightarrow Time-delay in a signal causes a linear phase shift in its spectrum. Shifting in time doesn't alter the amplitude spectrum of signal.

$$\therefore \theta(\omega) = -\omega t_0$$



e.g.

$$\textcircled{1} \quad y(t) = e^{2t} \cdot u(-t+3)$$

$$\text{Solⁿ: } \quad y(t) = e^{2(t-3)+6} \cdot u(-(t-3))$$

$$\therefore Y(\omega) = e^{\sigma} \left[\frac{e^{-j\omega(3)}}{2 - j\omega} \right]$$

$$(2) \quad y(t) = \text{rect} \left(\frac{t+1}{4} \right)$$

Sum:

$$\text{let, } \text{rect}(t) = \text{rect} \left(\frac{t}{4} \right), \quad A=1, \quad T=4.$$

$$\therefore y(t) = \text{rect}(t+1). \quad \text{where,}$$

$$\downarrow \quad t_0 = -1.$$

$$\text{F.T.} \quad Y(\omega) = e^{j\omega} \cdot X(\omega).$$

$$\& \quad X(\omega) = 4 \cdot \text{sinc} \left(\frac{4\omega}{2} \right).$$

$$\therefore \boxed{Y(\omega) = 4 e^{j\omega} \cdot \text{sinc}(2\omega)}$$

✓ *
Q

$$\text{given } H(\omega) = \frac{4 \sin 2\omega \cdot \cos \omega}{\omega}, \quad \text{find } h(\omega).$$

Sum:

$$H(\omega) = \frac{4 \sin 2\omega \cdot \cos \omega}{\omega}$$

$$= 2 \left[\frac{2 \sin 2\omega}{\omega} \right] \cdot \cos \omega \times 2$$

$$= 2 \left[\frac{2 \sin \omega \cdot \cos \omega \cdot \cos \omega}{\omega} \right] \times 2$$

$$= 2 \left[\frac{2 \sin \omega}{\omega} \right] \cos^2 \omega \times 2$$

$$= 2 \left[\frac{2 \sin \omega}{\omega} \right] \cdot \left[\frac{1 + \cos 2\omega}{2} \right] \times 2$$

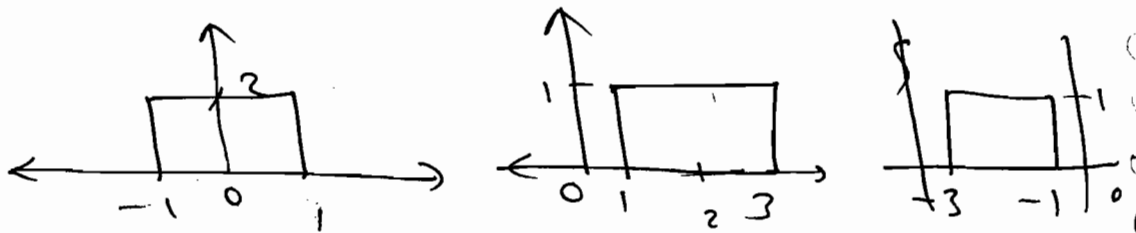
$$= \frac{2 \sin \omega}{\omega} \times 2 + 2 \left[\frac{2 \sin \omega}{\omega} \right] \times \left[\frac{e^{-j2\omega} + e^{j2\omega}}{2} \right]$$

let, $x(t) = \text{rect}(t/2)$

$\Rightarrow X(\omega) = \frac{2 \sin \omega}{\omega}$

$\therefore H(\omega) = 2X(\omega) + \frac{1}{2} X(\omega) e^{-j\omega 2} + \frac{1}{2} X(\omega) e^{j\omega 2}$

$\therefore h(t) = 2x(t) + x(t-2) + x(t+2)$

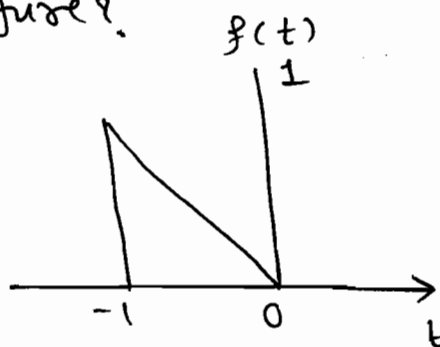


$\therefore h(0) = 2$

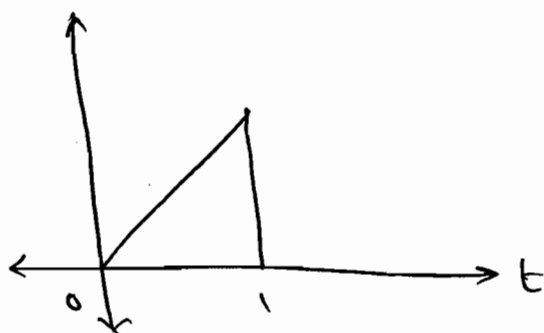
P4.2.11 : The F.T. of a triangular pulse $f(t)$ shown in figure

$F(\omega) = \frac{e^{j\omega} - j\omega e^{-1} - 1}{\omega^2}$

using this find the F.T. of the signals shown in figure.



Solⁿ: ① $f_1(t)$



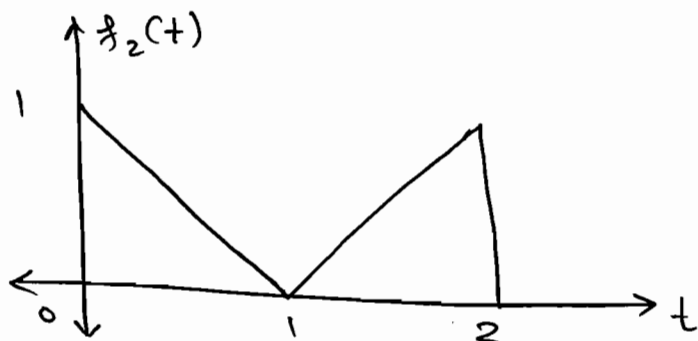
⇒

$$f_1(t) = f(-t).$$

↓

$$F_1(\omega) = F(-\omega) = \frac{e^{-j\omega} + j\omega e^{-j\omega} - 1}{\omega^2}.$$

②



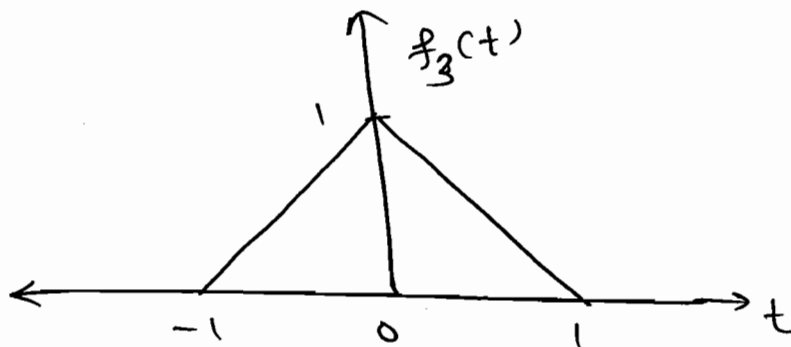
Soit:

$$f_2(t) = f_1(t-1) + f(t-1).$$

↓ F.T.

$$\therefore F_2(\omega) = e^{-j\omega} F_1(\omega) + e^{-j\omega} F_2(\omega).$$

③

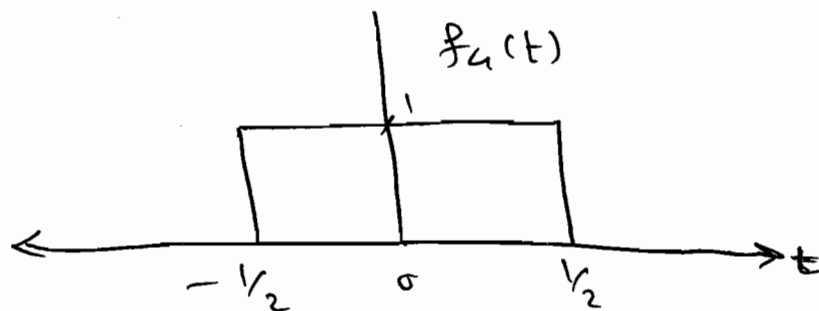


Soit:

$$f_3(t) = f_1(t+1) + f(t-1).$$

$$F_3(\omega) = e^{j\omega} F_1(\omega) + e^{-j\omega} F(\omega).$$

④

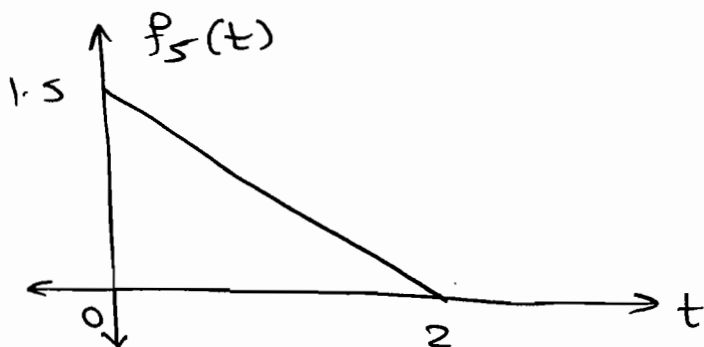


Soln:

$$f_4(t) = f(t - \frac{1}{2}) + f_1(t + \frac{1}{2}).$$

$$\therefore F_4(\omega) = e^{-j\frac{1}{2}\omega} \cdot F(\omega) + e^{+j\frac{1}{2}\omega} \cdot F_1(\omega).$$

⑤



Soln:

$$f_5(t) = 1.5 f\left(\frac{t}{2} - 1\right).$$

$$= 1.5 f\left(\frac{t-2}{2}\right). \quad t_0 = 2.$$

$$\alpha = \frac{1}{2}$$

$$\therefore F_5(\omega) = \frac{1.5}{\frac{1}{2}} \cdot e^{-j2\omega} \cdot F(\omega/\frac{1}{2}).$$

$$\therefore F_5(\omega) = 3 \cdot e^{-j2\omega} \cdot F(2\omega).$$

④ Frequency Shifting:

$$\Rightarrow \text{If } x(t) \longleftrightarrow X(\omega).$$

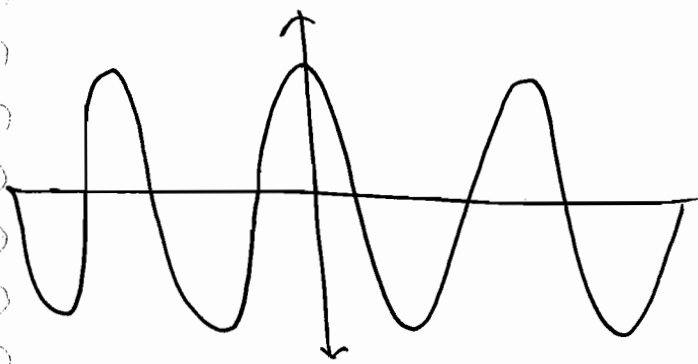
$$\text{then } x(t) \cdot e^{j\omega_c t} \xrightarrow{\text{F.T.}} X(\omega - \omega_c).$$

e.g.

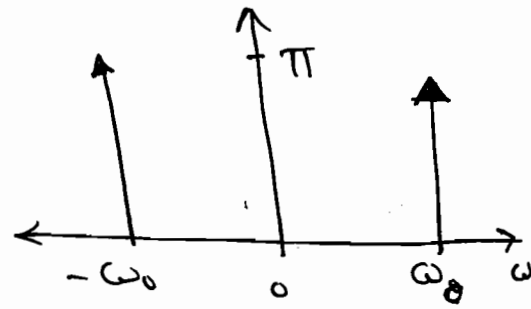
$$\cos \omega_0 t = \frac{1 \cdot e^{+j\omega_0 t} + 1 \cdot e^{-j\omega_0 t}}{2}.$$

$$\xrightarrow{\text{F.T.}} = \frac{2\pi \delta(\omega - \omega_0) + 2\pi \delta(\omega + \omega_0)}{2}.$$

$$\therefore \cos \omega_0 t \xrightarrow{\text{F.T.}} \frac{\delta(f - f_c) + \delta(f + f_c)}{2}$$



$\xrightarrow{\text{F.T.}}$



$\Rightarrow e^{-3t} \cdot \sin 6t \cdot u(t) \Rightarrow$ damped oscillation.
reference signal.

$\Rightarrow \text{rect}(t/4) \cdot \cos 6t \leftarrow$ reference pulse.

Q F.T. of $y(t) = \text{sinc}(t) \cdot \cos 10\pi t$.

Soln:

$$y(t) = \text{sinc}(t) \cdot \left[\frac{e^{j10\pi t} + e^{-j10\pi t}}{2} \right]$$

$\downarrow \text{F.T.}$ $\downarrow x(t)$

$$Y(\omega) = \frac{X(\omega - 10\pi) + X(\omega + 10\pi)}{2}$$

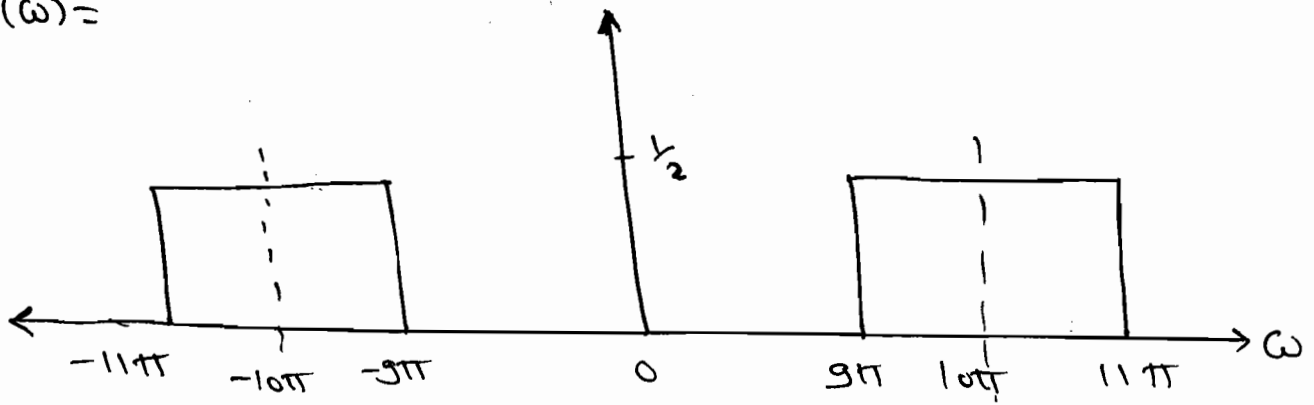
$$x(t) = \text{sinc}(t) = \frac{\sin \pi t}{\pi t} \quad (a = \pi)$$

$$\Rightarrow X(\omega) = \text{rect}(\omega/2\pi)$$

$$X(\omega) = \text{rect}(\omega/2\pi)$$



$$\therefore Y(\omega) =$$



④ I.F.T. of $X(4\omega + 3)$.

Soln:
=

$$Y(\omega) = X(4(\omega + 3/4))$$

$$= \frac{1}{4} \cdot \frac{1}{|3/4|} \cdot X(\omega/1/4)$$

$$Y(t) = \frac{1}{4} \cdot X(t/4) \cdot e^{-j(3/4)t}$$

Note:

⇒ When we perform time differentiation $S(\omega)$ component is lost since $j\omega S(\omega) = 0$ and the original spectrum magnitudes are increased by the factor $|\omega|$ i.e. high freq. components are more amplified.

⑤ Differentiation in time:

$$\Rightarrow \text{If } x(t) \xleftrightarrow{\text{F.T.}} X(\omega)$$

$$\text{then } \frac{d}{dt} x(t) \xleftrightarrow{\text{F.T.}} (j\omega) X(\omega)$$

but, $X(\omega) \neq \frac{F.T. \left\{ \frac{d}{dt} x(t) \right\}}{j\omega}$.

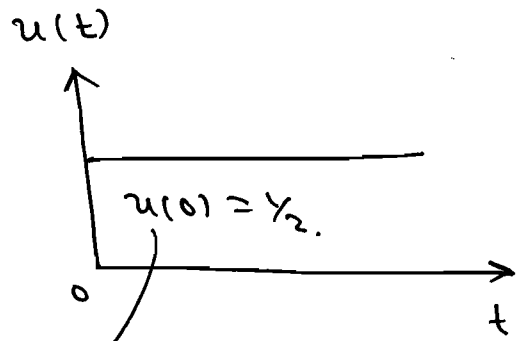
e.g. ① $x(t) = u(t)$.

$$\frac{d}{dt} x(t) = \delta(t).$$

$$\therefore j\omega X(\omega) = 1.$$

$$X(\omega) = \frac{1}{j\omega} + \pi \delta(\omega).$$

(missed by differentiation)



$$\Rightarrow j\omega \delta(\omega) = j(0). \delta(\omega) = 0.$$

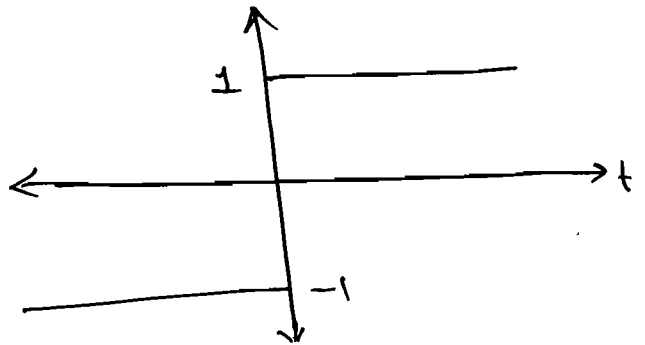
② $x(t) = \text{Sgn}(t)$

$$x(t) = 2u(t) - 1$$

$$\therefore \frac{d}{dt} x(t) = 2\delta(t)$$

$$\therefore j\omega X(\omega) = 2.$$

$$X(\omega) = 2/j\omega.$$



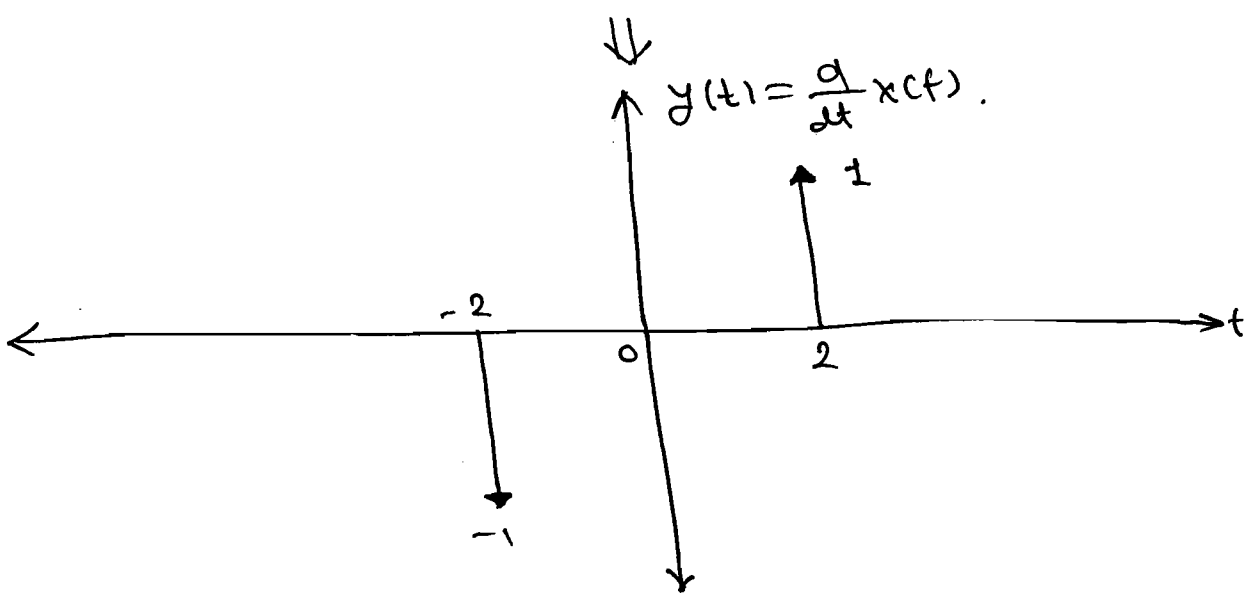
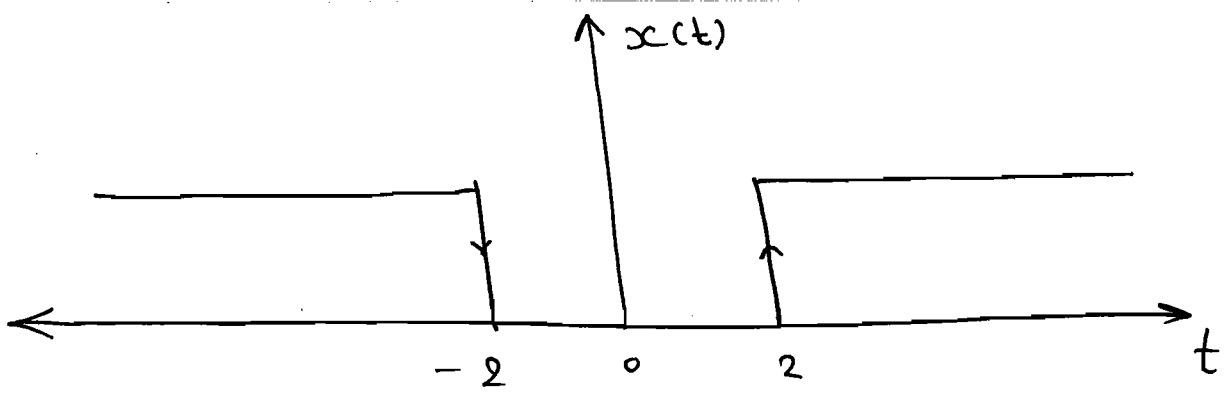
P. 4.2-16 Find the F.T. of the signal

$$y(t) = \frac{d}{dt} [u(t-2) + u(-t-2)].$$

Soln: $y(t) = \frac{d}{dt} [u(t-2) + u(-t-2)].$

$$y(t) = \delta(t-2) - \delta(t+2).$$

⇒



$$\therefore y(t) = -1 \cdot \delta(t+2) + \delta(t-2).$$

$$Y(\omega) = -e^{j2\omega} \cdot (1) + e^{-j2\omega} \cdot (1).$$

$$= -\frac{1}{2j} \left[\frac{e^{+j2\omega}}{2j} - \frac{e^{-j2\omega}}{2j} \right].$$

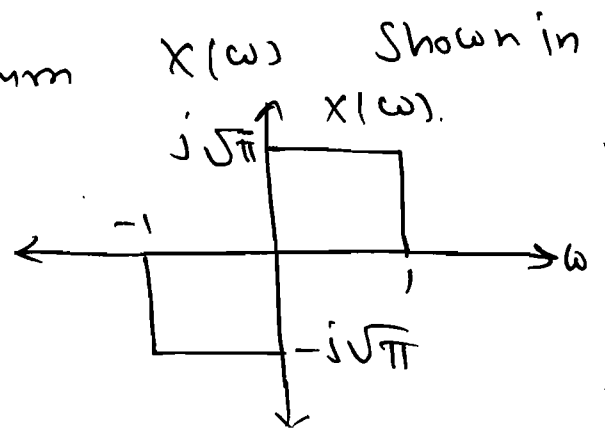
$$= -\frac{1}{2j} \times \sin(2\omega).$$

$$Y(\omega) = \frac{j \sin(2\omega)}{2}$$

P 4.2.17

For the Spectrum $X(\omega)$ shown in figure,

find $\frac{d}{dt} x(t)$ at $t=0$?



Soln:

$$x(t) = \frac{1}{2\pi} \int_{-\infty}^{\infty} X(\omega) \cdot e^{j\omega t} \cdot d\omega.$$

$$\therefore \frac{dx(t)}{dt} = \frac{1}{2\pi} \int_{-\infty}^{\infty} (j\omega) X(\omega) \cdot e^{j\omega t} \cdot d\omega.$$

$$\left. \frac{d}{dt} x(t) \right|_{t=0} = \frac{j\omega}{2\pi} \int_{-\infty}^{\infty} X(\omega) \cdot d\omega.$$

$$= \frac{1}{2\pi} \int_{-\infty}^{+\infty} (j\omega) X(\omega) \cdot d\omega.$$

$$= \frac{1}{2\pi} \left[\int_{-1}^0 (j\omega) (-j\sqrt{\pi}) (j\omega) d\omega + \int_0^1 (j\sqrt{\pi}) (j\omega) d\omega \right].$$

$$= \frac{1}{2\pi} \left[\sqrt{\pi} \left(\frac{\omega^2}{2} \right)_{-1}^0 - \sqrt{\pi} \left(\frac{\omega^2}{2} \right)_0^1 \right].$$

$$= \frac{1}{2\pi} \left[-\frac{\sqrt{\pi}}{2} - \frac{\sqrt{\pi}}{2} \right].$$

$$= -\frac{\sqrt{\pi}}{2\pi}$$

$$\therefore \boxed{\left. \frac{d}{dt} x(t) \right|_{t=0} = -\frac{1}{2\sqrt{\pi}}}$$

⑤

Frequency

Differentiation:

⇒ Diffⁿ w.r.t. one Variable corresponds to multiplication by other Variable.

$$\boxed{-jt x(t) \xleftrightarrow{\text{F.T.}} \frac{d}{d\omega} X(\omega)}$$

e.g. ① $y(t) = t \cdot e^{-at} \cdot u(t)$.

$$\therefore y(t) = \frac{-j}{-j} \cdot t \cdot e^{-at} \cdot u(t)$$

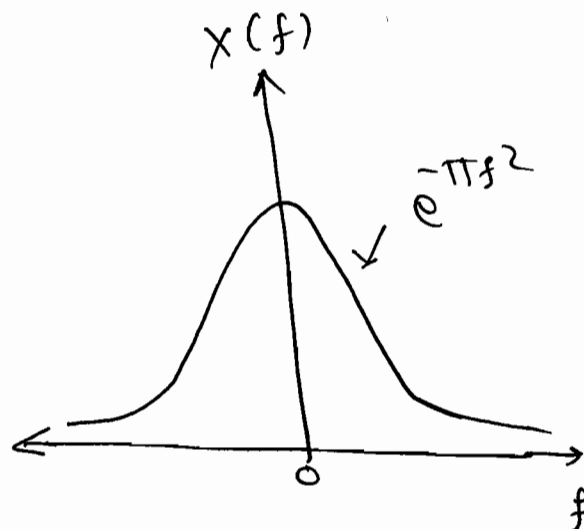
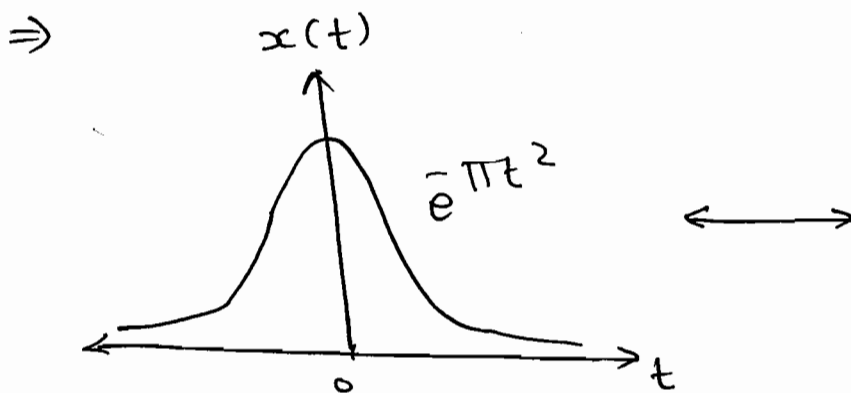
$$= \frac{-1}{j} \cdot (-jt \cdot e^{-at} \cdot u(t))$$

$$= +j \left[\frac{d}{d\omega} X \left(\frac{1}{a+j\omega} \right) \right]$$

$$= +j \frac{-1}{(a+j\omega)^2} X(j)$$

$$\therefore \boxed{Y(\omega) = \frac{1}{(a+j\omega)^2}}$$

* Gaussian function:



let, $x(t) = e^{-\pi t^2}$

$$\therefore \frac{d}{dt} x(t) = -e^{-\pi t^2} (2\pi t) = -2\pi t x(t)$$

$$\therefore \boxed{\frac{d}{dt} x(t) = -2\pi f x(t)} \quad \text{--- (1)}$$

$$\therefore j 2\pi f x(t) = -2\pi t \cdot e^{-\pi t^2}$$

$$j (j 2\pi f x(t)) = -j 2\pi t \cdot e^{-\pi t^2}$$

$$\therefore -2\pi f \cdot x(t) = \frac{d}{df} x(f)$$

$$\therefore \boxed{\frac{d}{df} x(f) = -2\pi f x(f)} \quad \text{--- (2)}$$

\Rightarrow From eq I & II looking in similar manner $x(f)$ is same as $x(t)$.

\Rightarrow In general,

$$\boxed{e^{-at^2} \quad (a > 0) \xleftrightarrow{\text{F.T.}} \sqrt{\frac{\pi}{a}} \cdot e^{-\omega^2/4a} \quad \text{(or)} \quad \sqrt{\frac{\pi}{a}} \cdot e^{-\frac{\pi^2 f^2}{a}}}$$

P 4.2-20 Given $x(t) \leftrightarrow X(\omega)$, express the F.T. of the following signals in terms of $X(\omega)$?

(i) $x_1(t) = x(2-t) + x(-t-2)$.

Solⁿ: $x_1(t) = x(-(t-2)) + x(-(t+2))$.

$$X_1(\omega) = e^{-j2\omega} \cdot X(-\omega) + e^{j2\omega} \cdot X(-\omega)$$

$$= \frac{X(-\omega)}{2} \left[e^{j2\omega} + e^{-j2\omega} \right]$$

$$\therefore X_1(\omega) = 2 X(-\omega) \cdot \cos 2\omega$$

② $x_2(t) = x(3t + 5)$

Sum: $x_2(t) = x(3(t-2))$

$$\therefore X_2(\omega) = \frac{1}{3} \cdot e^{-j2\omega} \cdot X(\omega/3)$$

③ $x_3(t) = \frac{d^2}{dt^2} x(t-3)$

Sum: $x_3(t) = \frac{d^2}{dt^2} x(t-3)$

$$X_3(\omega) = (j\omega)^2 \cdot e^{-j3\omega} \cdot X(\omega)$$

$$X_3(\omega) = -\omega^2 \cdot e^{-j3\omega} \cdot X(\omega)$$

* * *
④

$$x_4(t) = t \frac{dx(t)}{dt}$$

Sum: $x_4(t) = t \cdot \left(\frac{dx(t)}{dt} \right)$
 \swarrow
 $j \frac{d}{d\omega}$

$$X_4(\omega) = j \frac{d}{d\omega} (j\omega \cdot X(\omega))$$

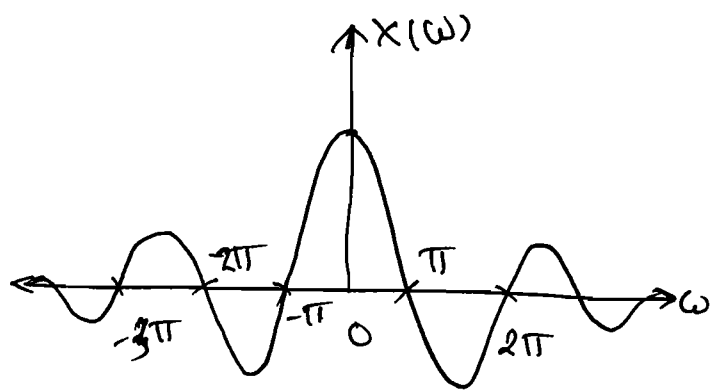
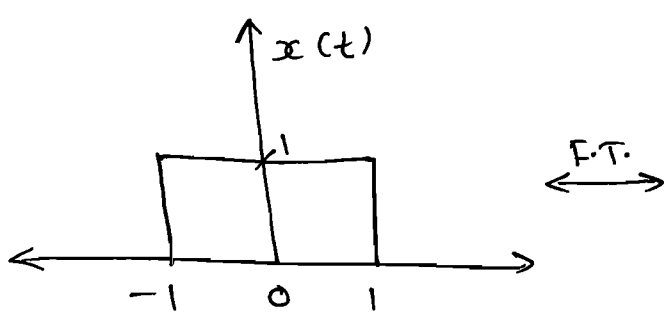
$$\therefore X_4(\omega) = - \left(X(\omega) + \omega \frac{dX(\omega)}{d\omega} \right)$$

P4.2.21

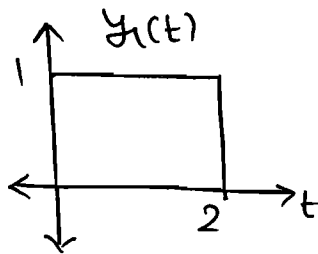
Given $x(t) = \begin{cases} 1; & |t| < 1 \leftrightarrow \frac{2 \sin \omega}{\omega} \\ 0; & \text{elsewhere} \end{cases}$ find

the F.T. of the following signals?

⇒



(a)

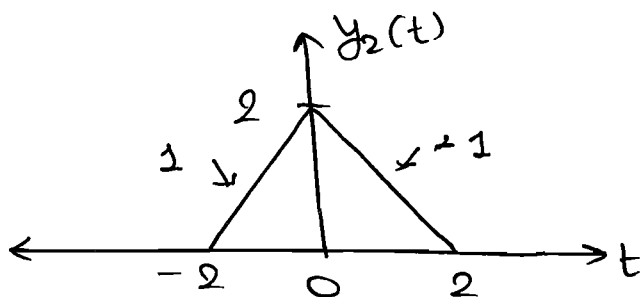


So m:

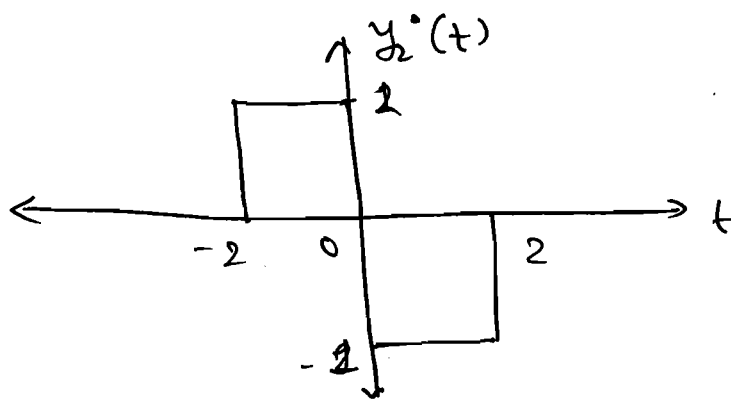
$$y_1(t) = x(t-1).$$

$$\therefore Y_1(\omega) = e^{-j\omega} \cdot X(\omega).$$

(b)



So m:

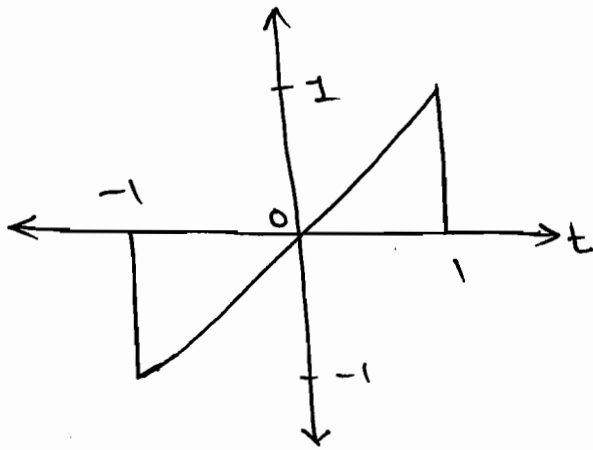


$$\therefore y_2^*(t) = y_1(-t) + -y_1(t).$$

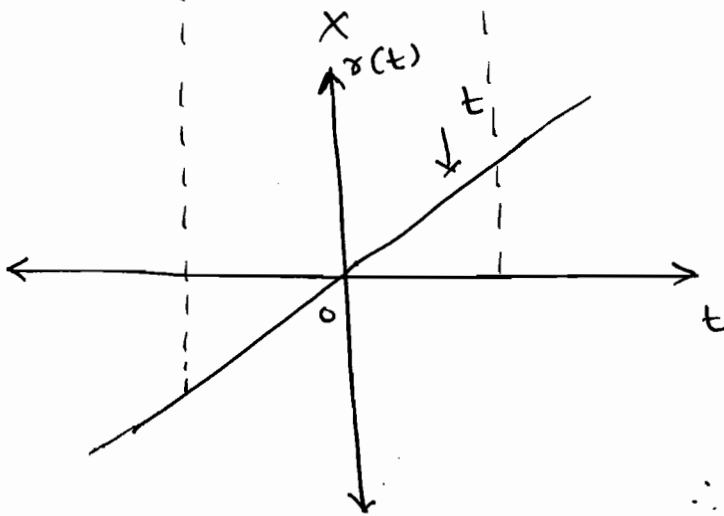
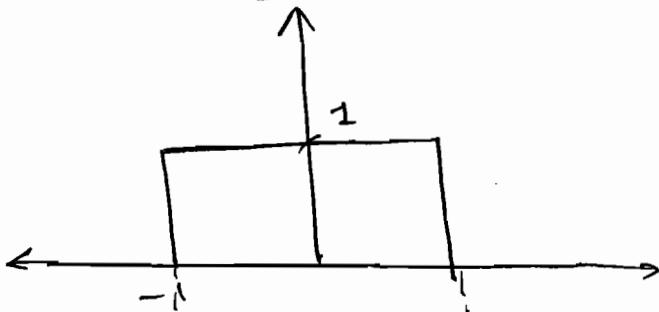
$$j\omega Y_2(\omega) = Y_1(-\omega) - Y_1(\omega).$$

$$\therefore Y_2(\omega) = \frac{1}{j\omega} [Y_1(-\omega) - Y_1(\omega)].$$

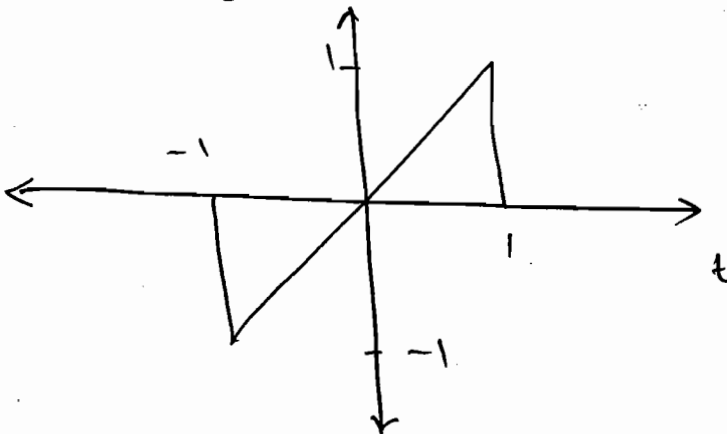
(c)



Soln: Method I
 $x(t)$



$y_3(t)$



$$\text{Sol } y_3(t) = t \cdot x(t)$$

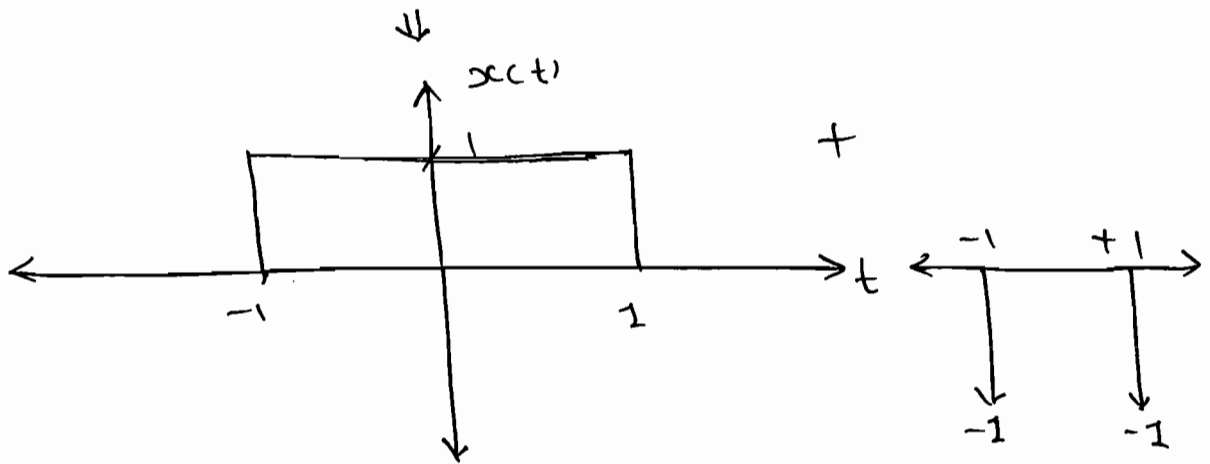
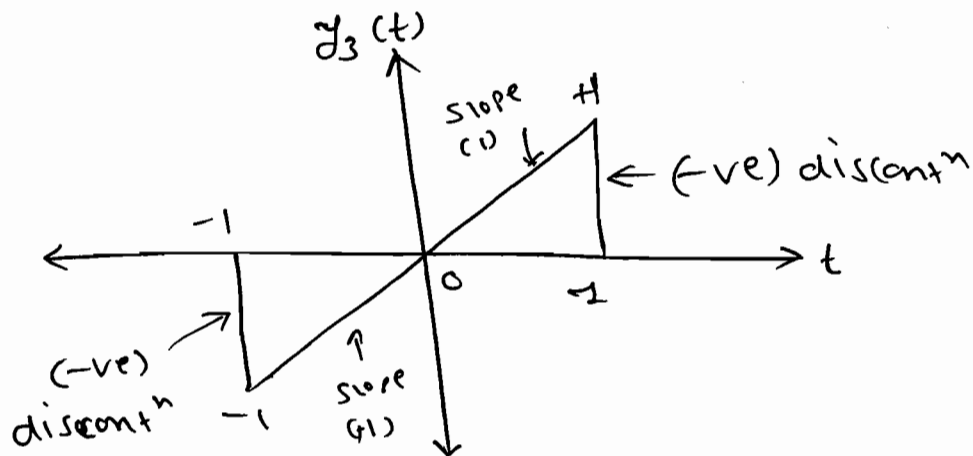
$$\therefore Y_3(\omega) = j \frac{dX(\omega)}{d\omega}$$

$$\therefore Y_3(\omega) = j \frac{d}{d\omega} \left(2 \frac{\sin \omega}{\omega} \right)$$

$$= 2j \left[\frac{\omega \cos \omega - \sin \omega}{\omega^2} \right]$$

$$\therefore Y_3(\omega) = \frac{2j}{\omega^2} [\omega \cos \omega - \sin \omega]$$

Method - II : By differentiation,



$$\therefore \frac{dy_3(t)}{dt} = xct) + \delta(t-1) + \delta(t+1).$$

$$\therefore (j\omega) Y_3(\omega) = X(\omega) + \frac{e^{-j\omega} + e^{j\omega}}{1}$$

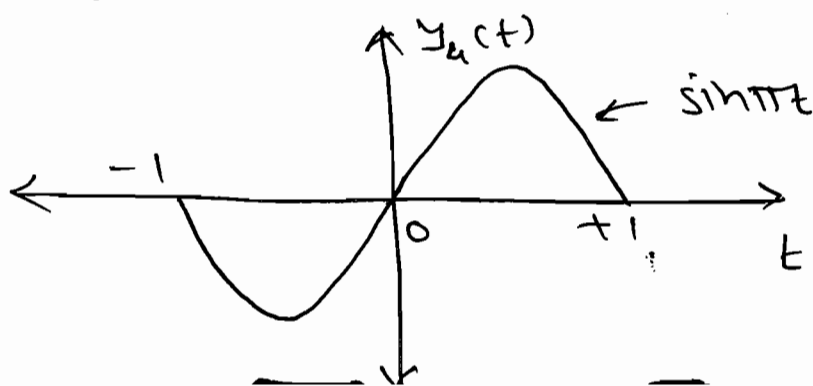
$$\therefore Y_3(\omega) = \frac{X(\omega)}{j\omega} + \frac{2 \cos \omega}{j\omega}$$

$$= \frac{1}{j\omega} \left[\frac{2 \sin \omega}{\omega} + 2 \cos \omega \right]$$

$$= \frac{j}{j^2 \omega^2} \left[2 \sin \omega - 2 \omega \cos \omega \right]$$

$$Y_3(\omega) = \frac{2}{j\omega^2} \left[2 \omega \cos \omega - 2 \sin \omega \right]$$

(d)



Soln:

$$Y_u(t) = \sin \pi t \cdot x(t).$$

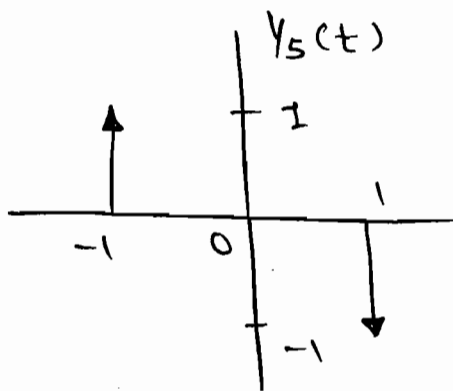
$$\therefore Y_u(\omega) \neq j \frac{d}{d\omega} (X(\omega)).$$

$$\therefore Y_u(t) = \frac{e^{j\pi t} - e^{-j\pi t}}{2j} \times x(t).$$

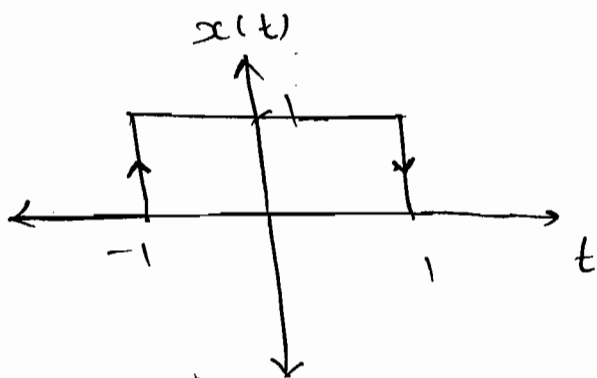
$$Y_u(t) = \frac{1}{2j} \left[e^{+j\pi t} \cdot x(t) - e^{-j\pi t} \cdot x(t) \right].$$

$$\Rightarrow Y(\omega) = \frac{1}{2j} \left[X(\omega - \pi) - X(\omega + \pi) \right].$$

(e)



Soln:

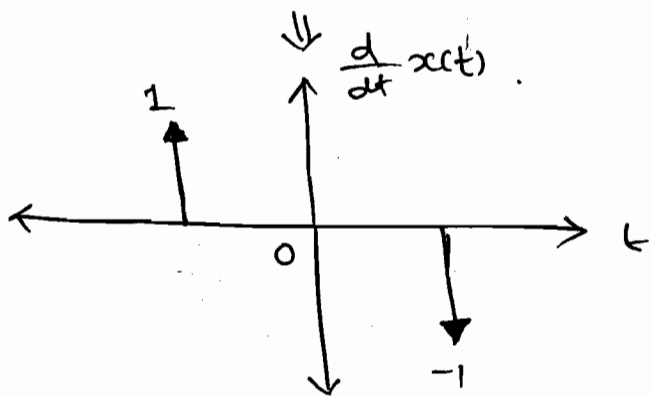


$$y_5(t) = \frac{d}{dt} x(t).$$

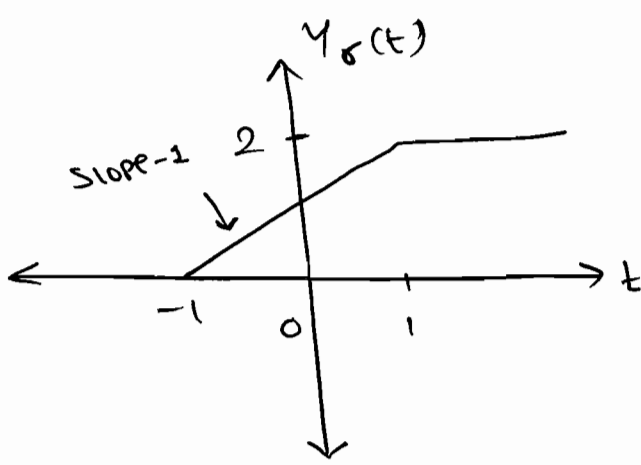
$$\therefore Y_5(\omega) = j\omega [X(\omega)].$$

$$\therefore Y_5(\omega) = j\omega \left[\frac{2 \sin \omega}{\omega} \right]$$

$$Y_5(\omega) = 2j \sin \omega$$



(F)



≡ Solⁿ:

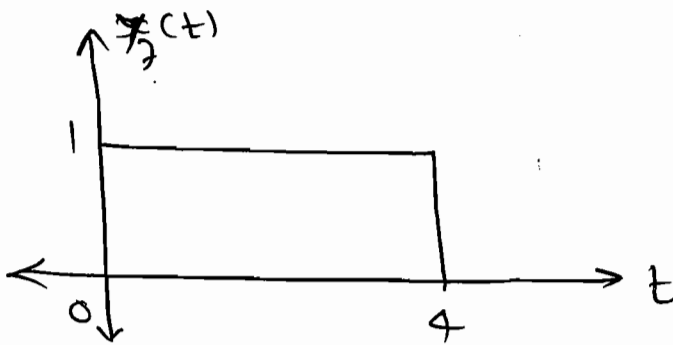
$$Y_6(t) = (t+1)x(t) + 2u(t-1).$$

$$\therefore Y_6(t) = tx(t) + x(t) + 2u(t-1).$$

↓ F.T.

$$\therefore Y_6(\omega) = j \frac{d}{d\omega} (X(\omega)) + X(\omega) + 2 \left[\frac{1}{j\omega} + \pi\delta(\omega) \right] e^{-j\omega}.$$

(g)



≡ Solⁿ:

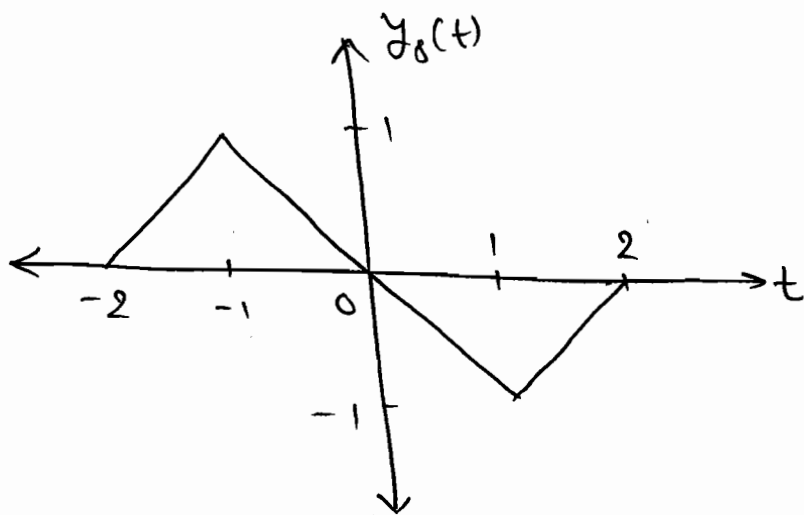
$$Y_7(t) = x\left(\frac{t}{4} - 1\right).$$

$$Y_7(t) = x\left(\frac{t-4}{4}\right).$$

$$\therefore Y_7(\omega) = \frac{1}{\frac{1}{4}} \cdot X\left(\frac{\omega}{4}\right) \cdot e^{-j4\omega}.$$

$$\therefore Y_7(\omega) = 4 \cdot e^{-j4\omega} \cdot X(4\omega).$$

(h)



Soln:

$$y_8(t) = y_2(2(t+1)) - y_2(2(t-1))$$

$$y_8(t) = y_2(2(t+1)) - y_2(2(t-1))$$

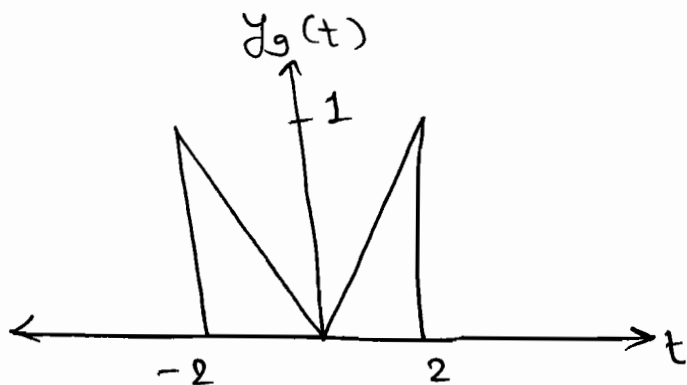
$$Y_8(\omega) = \left(\frac{1}{2}\right) e^{+j\omega} Y_2(\omega/2) - \left(\frac{1}{2}\right) e^{-j\omega} Y_2(\omega/2)$$

$$= 2e^{j\omega} Y_2(2\omega) - 2e^{-j\omega} Y_2(2\omega)$$

$$= 2 \times 2j \times Y_2(2\omega) \left[\frac{e^{j\omega} - e^{-j\omega}}{2j} \right]$$

$$\therefore Y_8(\omega) = 4j Y_2(2\omega) \cdot \sin \omega$$

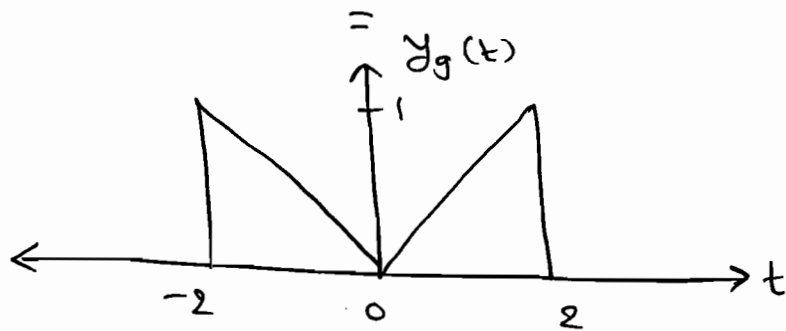
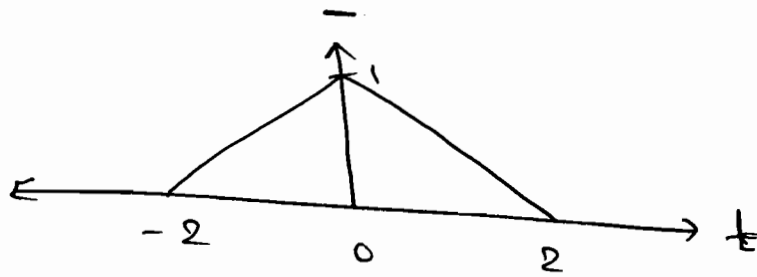
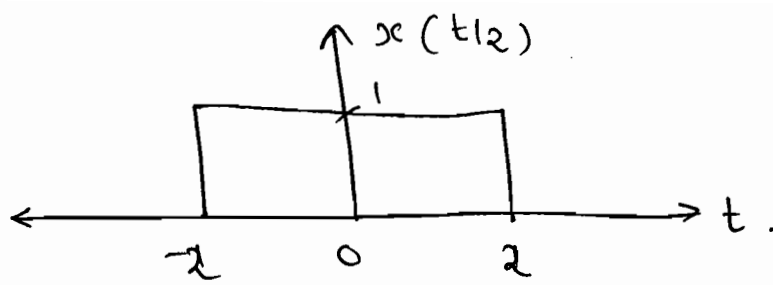
☆☆
(i)



Soln:

$$y_9(t) = x(t/2) - y_2(t)$$

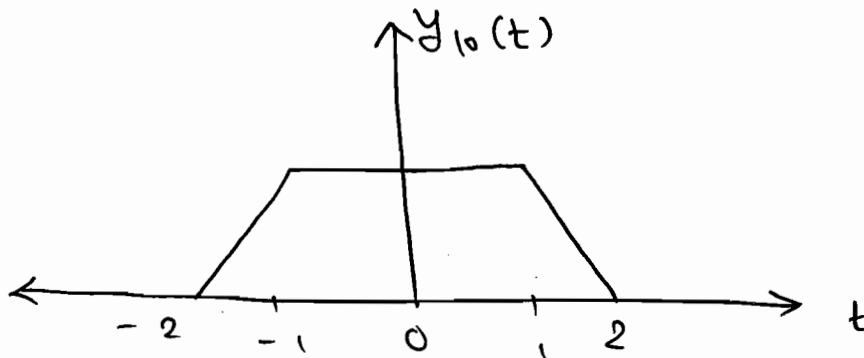
⇒



$$\therefore y_g(t) = x(t/2) - y_2(t).$$

$$\boxed{Y_g(\omega) = 2X(2\omega) - Y_2(\omega)}$$

*
*
(j)

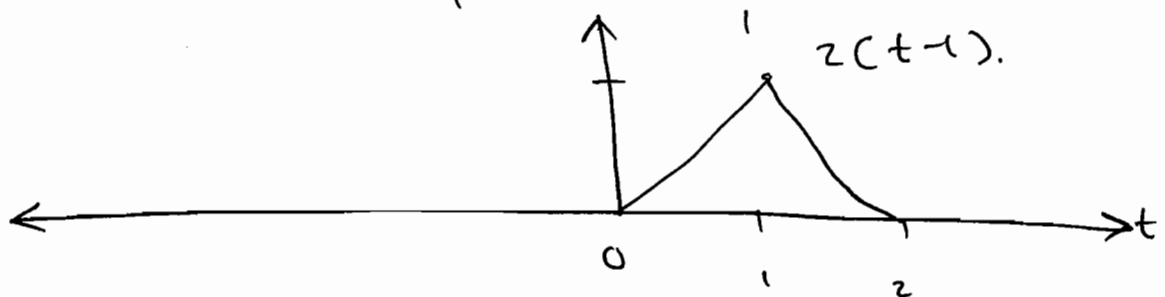
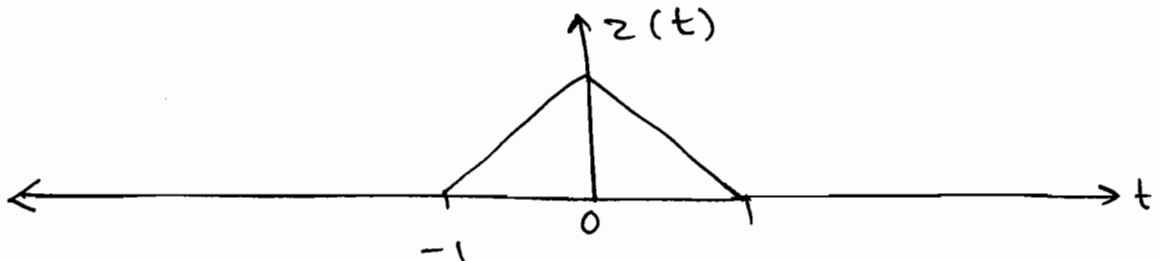
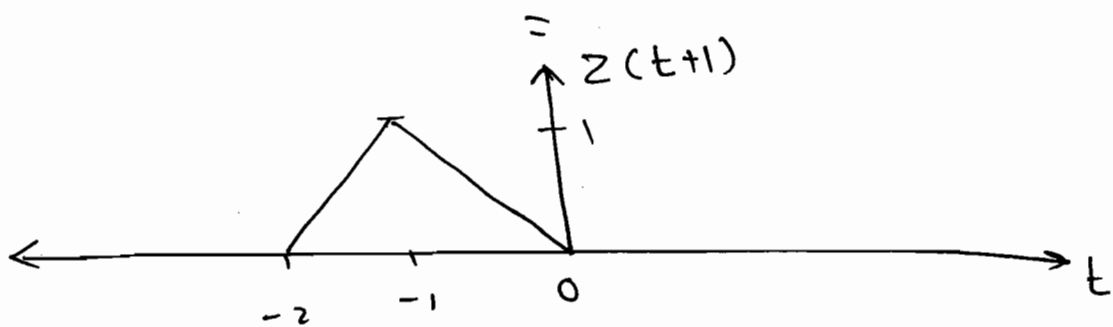
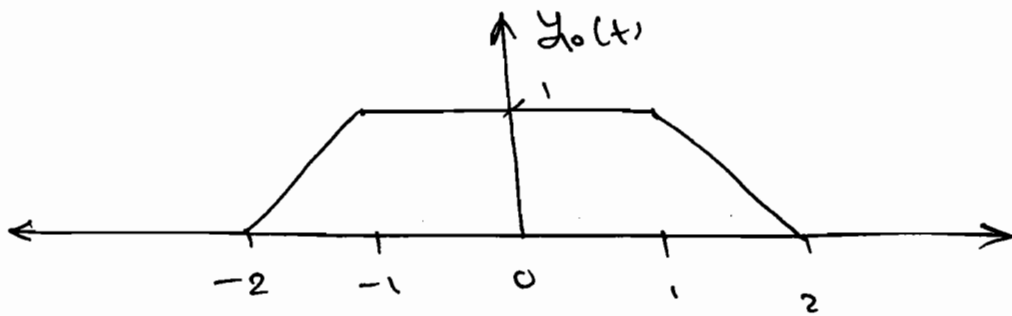


|||
|||

$$\text{let, } z(t) = \frac{1}{2} y_2(2t).$$

$$\therefore y_{10}(t) = z(t+1) + z(t) + z(t-1).$$

$$\begin{aligned} \therefore y_{10}(t) &= \frac{1}{2} [y_2(2t+2)] + \frac{1}{2} [y_2(2t)] \\ &\quad + \frac{1}{2} [y_2(2t-2)]. \end{aligned}$$



$$\therefore Y_{10}(\omega) = \frac{1}{2} \left[\frac{1}{2} e^{j\omega} Y_2(\omega/2) + \frac{1}{2} Y_2(\omega/2) + \frac{1}{2} Y_2(\omega/2) \cdot e^{-j\omega} \right]$$

$$Y_{10}(\omega) = \frac{Y_2(\omega/2)}{4} [1 + 2\cos\omega]$$

⑦ Convolution in time:-

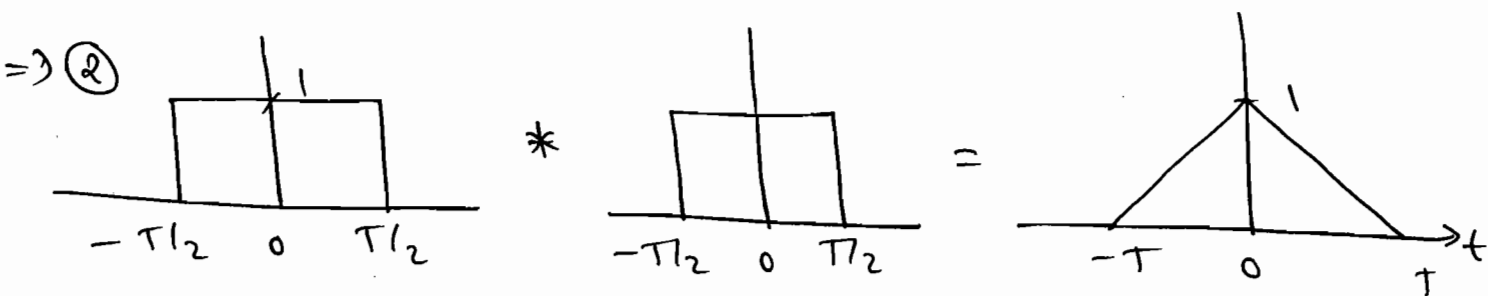
\Rightarrow If $x(t) \longleftrightarrow X(\omega)$ & $h(t) \longleftrightarrow H(\omega)$.

then, $x(t) * h(t) \longleftrightarrow X(\omega) \cdot H(\omega)$.

⇒ Convolution in time corresponds to multiplication in frequency domain.

⇒ F.T. of impulse response, $h(t)$ is known as frequency response, $H(\omega)$.

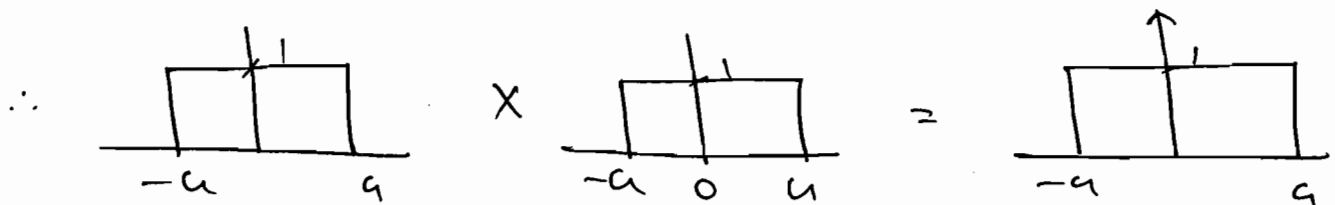
e.g. ① $e^{-at} \cdot u(t) * e^{-at} \cdot u(t) \xrightarrow{\text{F.T.}} \frac{1}{(a+j\omega)^2}$
 $= t \cdot e^{-at} \cdot u(t)$



∴ $\text{rect}(t/T) * \text{rect}(t/T) \xrightarrow{\text{F.T.}} T^2 \text{sinc}^2\left(\frac{\omega T}{2}\right)$

$T \text{sinc}\left(\frac{\omega T}{2}\right) \times T \text{sinc}\left(\frac{\omega T}{2}\right)$

③ $\frac{\text{sinc} \pi t}{\pi t} * \frac{\text{sinc} \pi t}{\pi t} = \frac{\text{sinc} \pi t}{\pi t} \xleftarrow{\text{I.F.T.}}$



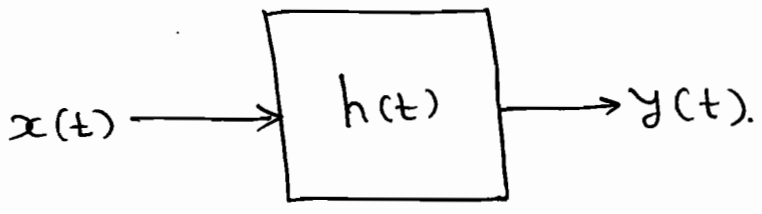
⇒ $\text{Gaussian} * \text{Gaussian} = \text{Gaussian}$

P4.2.23

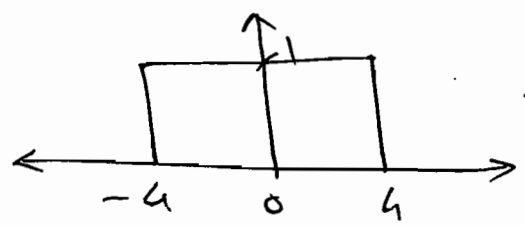
An L-T-I. system is having I.R. $h(t) = \frac{\sin 4t}{\pi t}$ for which the input

applied is $x(t) = \cos 2t + \sin 2t$, find the o/p.

Solⁿ:



$\therefore h(\omega) = \text{rect}(t/4)$



← Ideal LPF.

So, o/p = $\cos 2t$.

*
**

P4.2.26

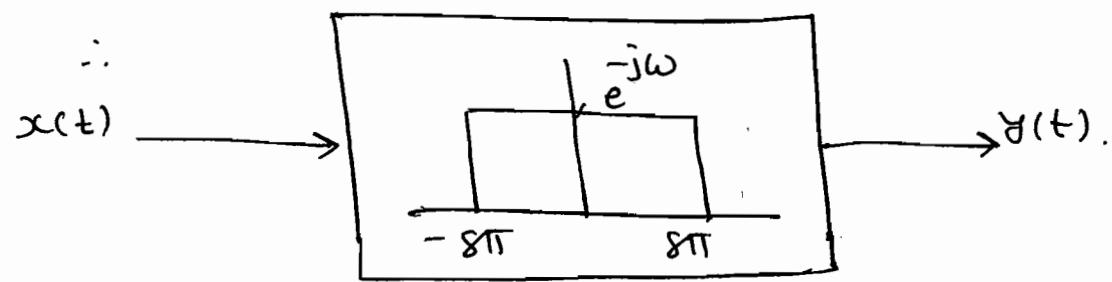
(a) Find the o/p of a system having impulse response $h(t) = 8 \text{sinc}[8(t-1)]$

When the input applied is $x(t) = \cos \pi t$.

Solⁿ:

$h(t) = 8 \text{sinc}[8(t-1)]$

$h(t) = \frac{8 \sin[8\pi(t-1)]}{8\pi(t-1)} \Rightarrow h(\omega) = e^{-j\omega} \cdot \text{rect}(t/16\pi)$

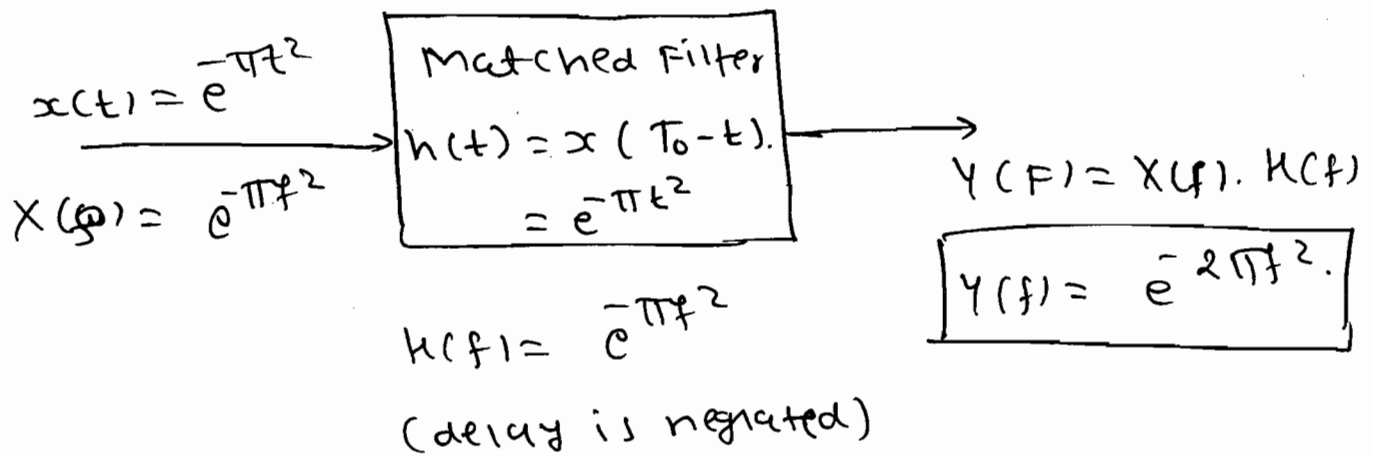


$\Rightarrow y(t) = \cos \pi(t-1)$ ← delay because of $e^{-j\omega}$.

b) Let $g(t) = e^{-\pi t^2}$, and $h(t)$ is a filter matched to $g(t)$. If $g(t)$ is applied as input to $h(t)$, then the Fourier transform of the output is,

- (a) $e^{-\pi f^2}$ (b) $e^{-\pi f^2/2}$ (c) $e^{-\pi |f|}$ (d) $e^{-2\pi f^2}$

Soln:



P 4.2.25 Using Convolution Property of F.T.

find the Convolution of following signals.

(a) $y(t) = \text{rect}(t) * \cos(\pi t)$.

Soln: $Y(\omega) = X(\omega) \cdot h(\omega)$.

$$\therefore Y(\omega) = \text{sinc}\left(\frac{\omega T}{2}\right) \cdot \left[\pi \left[\delta(\omega - \pi) + \delta(\omega + \pi) \right] \right]$$

$$= \frac{\sin(\omega/2)}{(\omega/2)} \left[\pi \left[\delta(\omega - \pi) + \delta(\omega + \pi) \right] \right]$$

~~$$= \frac{\sin(\pi/2)}{(\pi/2)} \cdot \pi \cdot \delta(\omega - \pi) + \frac{\sin(-\pi/2)}{(-\pi/2)} \cdot \pi \cdot \delta(\omega + \pi)$$~~

~~$$= \frac{1}{1} \cdot \pi \cdot \frac{\sin(\pi/2)}{(\pi/2)} + \frac{1}{1} \cdot \pi \cdot \frac{\sin(-\pi/2)}{(-\pi/2)}$$~~

$$\therefore Y(\omega) = \pi \times \frac{\sin \frac{\pi}{2}}{\pi/2} \delta(\omega - \pi) + \pi \times \frac{\sin(-\frac{\pi}{2})}{(-\pi/2)} \delta(\omega + \pi).$$

$$\therefore Y(\omega) = 2 \left[\delta(\omega - \pi) + \delta(\omega + \pi) \right].$$

$$\text{IFT} \downarrow = \frac{2}{\pi} \left\{ \pi \left[\delta(\omega - \pi) + \delta(\omega + \pi) \right] \right\}$$

$$\therefore Y(t) = \frac{2}{\pi} \cos \pi t.$$

$$(b) Y_3(t) = \text{sinc}(t/2) * \text{rect}(t) * \cos(2\pi t).$$

$$\Rightarrow Y_3(t) = \text{rect}(t) * \cos(2\pi t).$$

$$= \frac{\sin(\frac{\omega}{2})}{(\omega/2)} \times \left\{ \pi \left[\delta(\omega - 2\pi) + \delta(\omega + 2\pi) \right] \right\}$$

$$= \frac{\pi \cdot \sin(\frac{2\pi}{2})}{(\frac{2\pi}{2})} \delta(\omega - 2\pi)$$

$$+ \frac{\pi \sin(-\frac{2\pi}{2})}{(-\frac{2\pi}{2})} \delta(\omega + 2\pi)$$

$$= 0 + 0$$

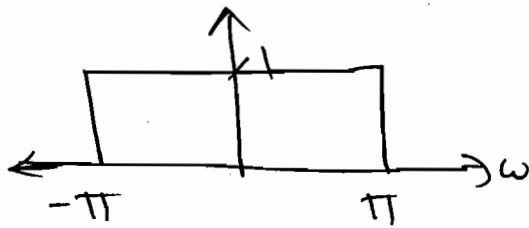
$$Y_3(t) = 0$$

$$(c) Y_3(t) = \text{sinc}(t/2) * \sin(t/2).$$

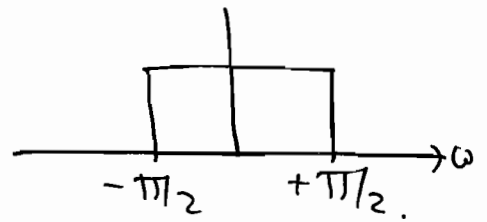
Solⁿ:

$$y_3(t) = \text{sinc}(t) * \text{sinc}(t/2).$$

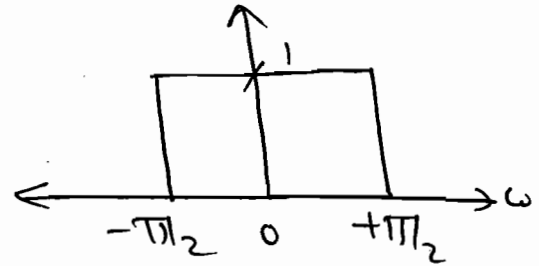
$$Y_3(\omega) = X_1(\omega) \cdot X_2(\omega) = \text{rect}(\omega/2) \times \text{rect}(\omega/2).$$



\times



$=$

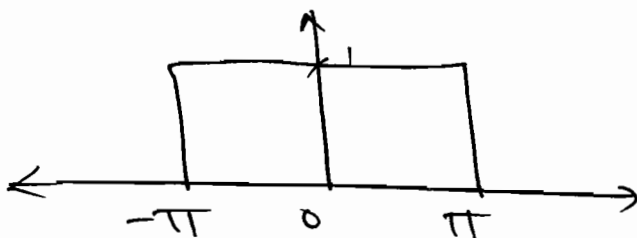


$$Y_3(\omega) = \left[\frac{\sin(\pi\tau)}{\pi\tau} \right] * \left[\frac{\sin(\frac{\pi\tau}{2})}{(\frac{\pi\tau}{2})} \right].$$

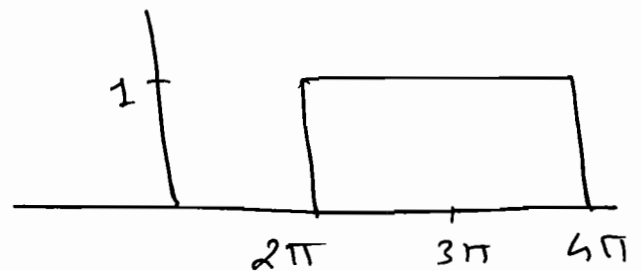
$$y_3(t) = \text{sinc}(t/2).$$

(d) $y_4(t) = \text{sinc}(t) * e^{j3\pi t} \cdot \text{sinc}(t).$

Solⁿ: $y_4(t) = \left[\frac{\sin \pi\tau}{\pi\tau} \right] * \left[e^{j3\pi\tau} \cdot \frac{\sin \pi\tau}{\pi\tau} \right].$



\times

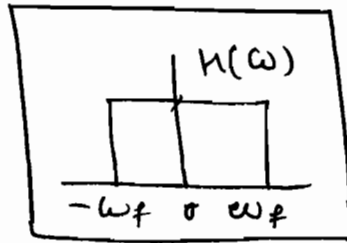


$= 0.$

Sol: $y_4(t) = 0$



$$\text{I/P: } \frac{\sin \omega_1 t}{\pi t} + \frac{\sin \omega_2 t}{\pi t}$$

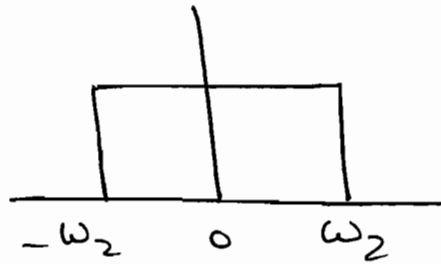


→ O/P = ?

⇒ ① $\omega_f < \omega_1$



+



let, $\omega_f = 0.5$

$$\text{O/P} = \frac{\sin \omega_f t}{\pi t} + \frac{\sin \omega_f t}{\pi t}$$

$$\text{O/P} = \frac{2 \sin \omega_f t}{\pi t}$$

② $\omega_1 < \omega_f < \omega_2$

let, $\omega_f = 1.5$

$1 < 1.5 < 2$

$$\text{O/P} = \frac{\sin \omega_1 t}{\pi t} + \frac{\sin \omega_f t}{\pi t}$$

③ $\omega_f > \omega_2$; $\omega_f = 2.5$

∴ $\text{O/P} = \text{I/P}$

P 4.2.22 Given $y(t) = x(t) * h(t)$ and

$g(t) = x(3t) * h(3t)$ such that $g(t) = Ay(Bt)$,

find A & B ?

Solⁿ: $y(t) = x(t) * h(t)$.

$$\Rightarrow Y(\omega) = X(\omega) \cdot H(\omega).$$

$$\rightarrow g(t) = x(3t) * h(3t).$$

$$G(\omega) = \frac{1}{3} X\left(\frac{\omega}{3}\right) \cdot \frac{1}{3} H\left(\frac{\omega}{3}\right).$$

$$G(\omega) = \frac{1}{9} H\left(\frac{\omega}{3}\right) \cdot X\left(\frac{\omega}{3}\right). \quad \text{--- (1)}$$

$$\rightarrow g(t) = Ay(Bt).$$

$$G(\omega) = \frac{A}{B} Y\left(\frac{\omega}{B}\right). \quad \text{--- (2)}$$

Compare eqⁿ (1) & (2).

$$\frac{A}{B} = \frac{1}{9}, \quad \& \quad B \neq \frac{1}{B}, \quad B \neq \frac{1}{3}$$

$$\boxed{B=3}$$

$$\Rightarrow A = 3/9$$

$$\boxed{A = 1/3}$$

P 4.2.24 Let $x(t)$ be a signal whose F.T.

is $X(\omega) = \delta(\omega) + \delta(\omega - \pi) + \delta(\omega - 5)$ & Let

$$h(t) = u(t) - u(t-2).$$

(a) is $x(t)$ periodic?

(b) is $x(t) * h(t)$ is periodic?

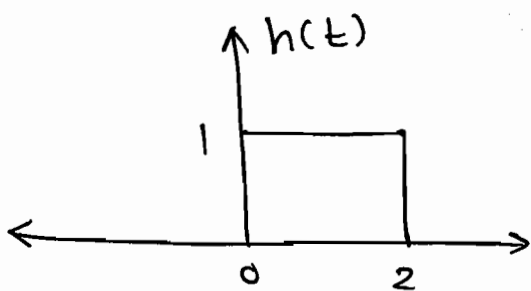
Soln: (a) $X(\omega) = \delta(\omega) + \delta(\omega - \pi) + \delta(\omega - 5)$.

$$x(t) = \frac{1}{2\pi} + \frac{e^{-j\pi t}}{2\pi} \cdot 1 + \frac{1}{2\pi} e^{-j5t} \cdot 1.$$

So, G.C.D. ($\pi, 5$)

So, Not periodic signal.

(b) $h(t) = u(t) - u(t-2)$



$$\xleftrightarrow{\text{F.T.}} e^{-j\omega} \cdot 2 \text{sinc} \left(\frac{\omega \cdot 2}{2} \right)$$

$$= e^{-j\omega} \frac{2 \text{sinc} \omega}{\omega}$$

$$= \frac{2 \text{sinc} \omega}{\omega} \cdot e^{-j\omega}$$

$$\therefore Y(\omega) = X(\omega) \cdot H(\omega)$$

$$\therefore Y(\omega) = [\delta(\omega) + \delta(\omega - \pi) + \delta(\omega - 5)] \times \left[\frac{2 \text{sinc} \omega}{\omega} \cdot e^{-j\omega} \right]$$

$$= \frac{e^{-j\omega}}{\omega} \cdot 2 \text{sinc} \omega \cdot \delta(\omega) + \frac{e^{-j\omega}}{\omega} \cdot 2 \text{sinc} \omega \delta(\omega - \pi)$$

$$+ \frac{e^{-j\omega}}{\omega} \cdot 2 \text{sinc} \omega \cdot \delta(\omega - 5)$$

$$Y(\omega) = 2\delta(\omega) + 0 + \frac{1}{\omega} \cdot 2 \text{sinc} 5 \cdot \delta(\omega - 5)$$

$$\therefore \boxed{Y(\omega) = 2\delta(\omega) + \frac{1}{\omega} \cdot 2 \text{sinc} 5 \delta(\omega - 5)}$$

So, OIP is periodic. ($\because \text{Geo}(0, 5) = 5$).

(8) Frequency Convolution:

\Rightarrow If $x_1(t) \longleftrightarrow X_1(\omega)$ and
 $x_2(t) \longleftrightarrow X_2(\omega)$ then.

$$x_1(t) \cdot x_2(t) \xleftrightarrow{\text{F.T.}} \frac{1}{2\pi} [X_1(\omega) * X_2(\omega)].$$

* Application:

- ① Modulator
- ② Samples in freq. domain.

e.g.: $x(t) \cdot \cos \omega_c t \xleftrightarrow{\text{F.T.}} \frac{1}{2\pi} [X(\omega) * [\delta(\omega - \omega_c) + \delta(\omega + \omega_c)]]$

$$= \frac{X(\omega - \omega_c) + X(\omega + \omega_c)}{2}$$

P 4.2.27 Find the F.T. of

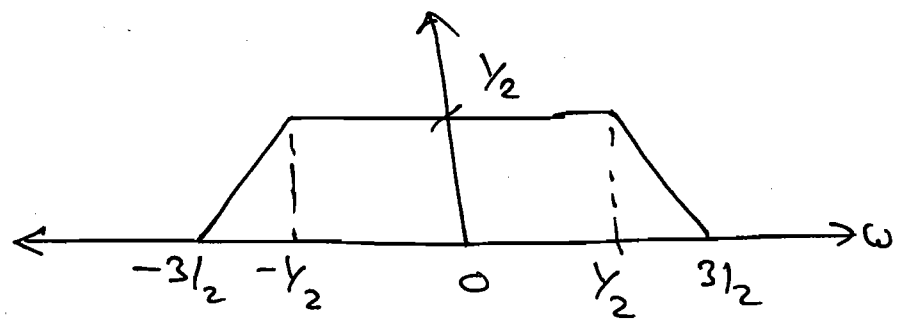
(b) $x(t) = \frac{\sin t \cdot \sin(t/2)}{\pi t^2}$

Solⁿ: $x(t) = \frac{\sin t}{\pi t} \times \frac{\sin(t/2)}{\frac{\pi t}{2}}$

$\therefore X(\omega) = \frac{1}{2\pi} \times \pi \left[\text{rect}(t/2) * \text{rect}(\omega) \right]$

$X(\omega) = \frac{1}{2} \left[\text{rect}(t/2) * \text{rect}(\omega) \right]$

$$\therefore X(\omega) =$$



(9) Integration in Time:

\Rightarrow If $x(t) \longleftrightarrow X(\omega)$

then

$$\int_{-\infty}^t x(\tau) d\tau \longleftrightarrow \frac{X(\omega)}{j\omega} + \pi X(0) \delta(\omega)$$

P. 4. 2. 28

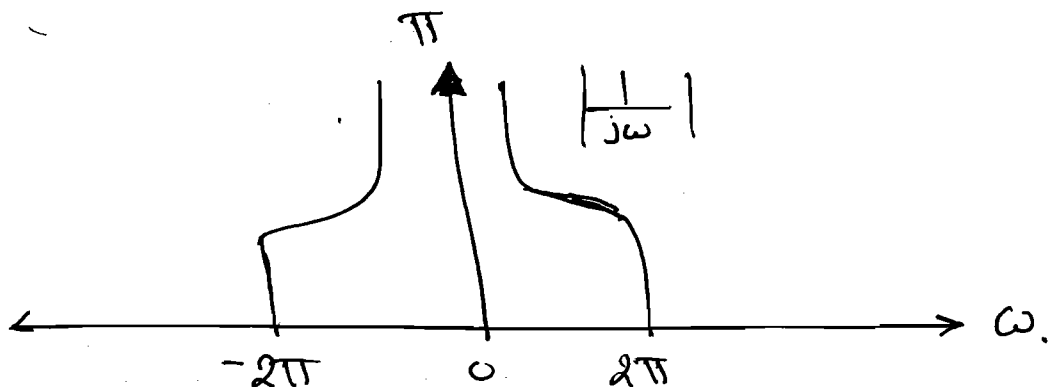
Find the F-T of $\int_{-\infty}^t \frac{\sin 2\pi\tau}{\pi\tau} d\tau$.

Solⁿ:

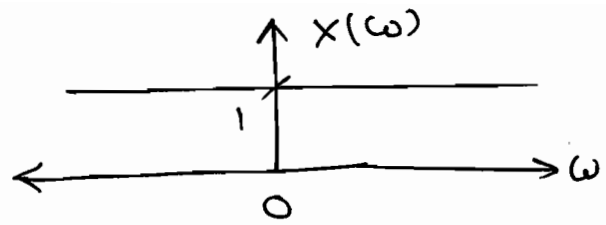

$$x(t) = \int_{-\infty}^t \frac{\sin 2\pi\tau}{\pi\tau} d\tau$$

$$X(\omega) = \frac{X_1(\omega)}{j\omega} + \pi X(0) \delta(\omega)$$


$$X(\omega) = \frac{\text{rect}(\omega/4\pi)}{j\omega} + \pi(1) \cdot \delta(\omega)$$



$$\Rightarrow x(t) = \delta(t)$$



$$\int_{-\infty}^t \delta(\tau) d\tau = u(t)$$

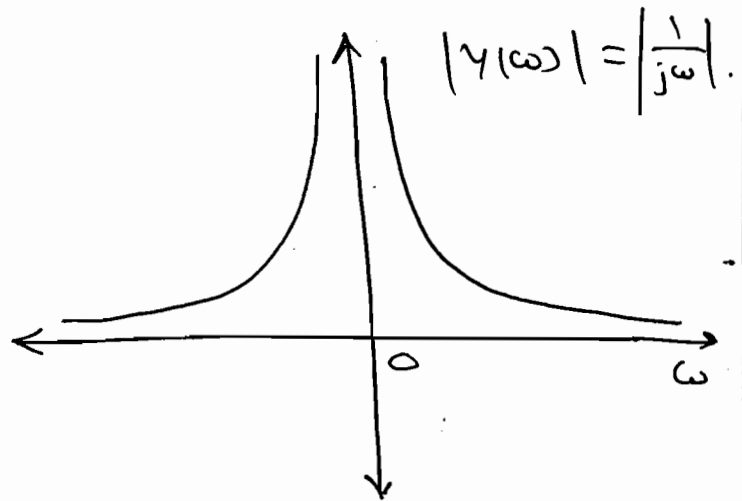


$$\frac{1}{j\omega} + \pi \delta(\omega)$$

$$Y(\omega)$$

i.e. $u(t) \xleftrightarrow{FT} \frac{1}{j\omega} + \pi \delta(\omega)$

$$|Y(\omega)| = \left| \frac{1}{j\omega} \right|$$



\Rightarrow Differentiation gives only $\frac{1}{j\omega}$ terms, $\pi \delta(\omega)$ [oc term] is missing there.

★ Rayleigh's Energy theorem (or)

Parseval's Power theorem:-

\Rightarrow Area under Spectral density represents energy (or) power in the signal.

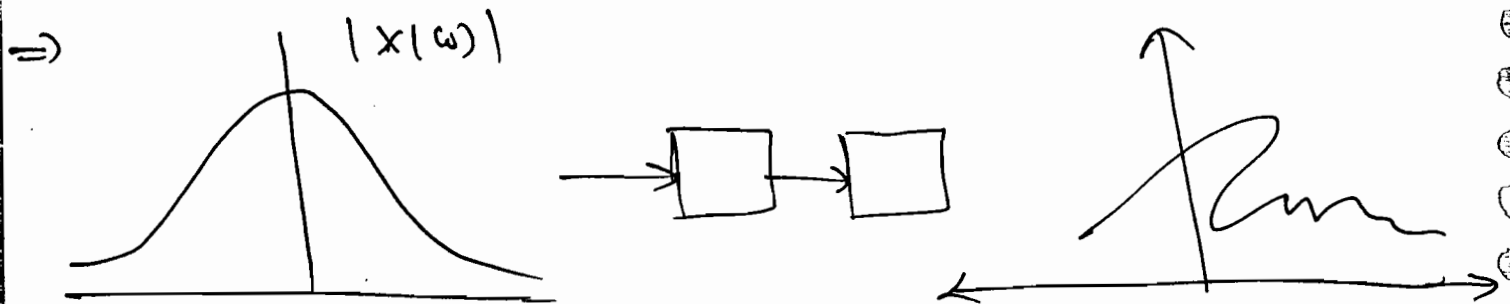
\Rightarrow When a signal is added with noise by comparing the noise spectral density with signal spectral density we can suppress the noise component by

designing an 'adaptive Filter'. [Adjustable coefficient].

⇒ IR → LTI filter.

Adaptive filter → LTI filter.

$$\Rightarrow \int_{-\infty}^{+\infty} |x(t)|^2 dt = \frac{1}{2\pi} \int_{-\infty}^{+\infty} |X(\omega)|^2 d\omega.$$



P 4.2.29 Find the energy in the signal

$$x(t) = \frac{\text{sinc} t}{\pi t}$$

Solⁿ:

$$E_{x(t)} = \frac{1}{2\pi} \int_{-\infty}^{\infty} |X(\omega)|^2 d\omega.$$

$$x(t) = \frac{\text{sinc} t}{\pi t} \xleftrightarrow{\text{F.T.}}$$

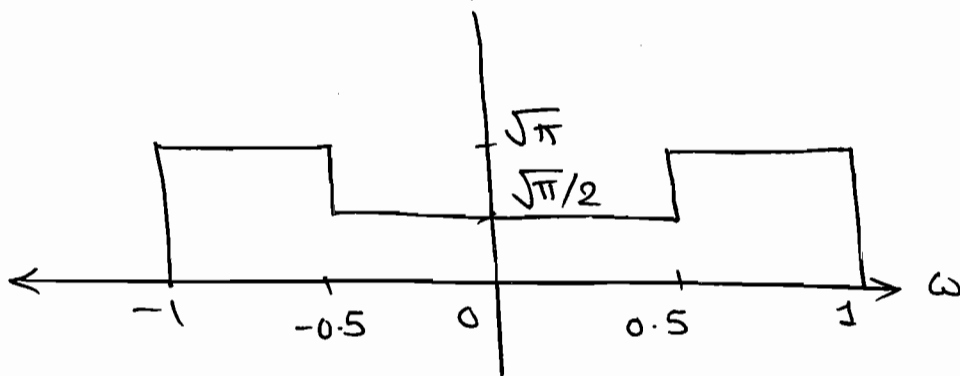
A graph of the Fourier transform $X(\omega)$ is shown on the right. It is a rectangular pulse with a height of 1, extending from $\omega = -a$ to $\omega = a$.

$$\therefore E_{x(t)} = \frac{1}{2\pi} \int_{-a}^a c|\beta|^2 d\omega.$$

$$= \frac{2a}{2\pi}$$

$$\therefore \boxed{E_{x(t)} = \frac{a}{\pi}}$$

P 4.2. 30 Find the energy in the spectrum shown in fig.



soln:

$$E_{x(t)} = \frac{1}{2\pi} \int_{-\infty}^{\infty} |x(\omega)|^2 d\omega.$$

$$= \frac{1}{2\pi} \times 2 \times \int_0^1 |x(\omega)|^2 d\omega$$

$$= \frac{1}{\pi} \times \left[\int_0^{0.5} \left(\frac{\sqrt{\pi}}{2}\right)^2 d\omega + \int_{0.5}^1 (\sqrt{\pi})^2 d\omega \right].$$

$$= \frac{1}{\pi} \left[\frac{\pi}{4} \times \frac{1}{2} + \frac{\pi}{2} \right].$$

$$= \frac{1}{8} + \frac{1}{2}$$

$$\boxed{E_{x(t)} = 5/8}$$

P4.3.21

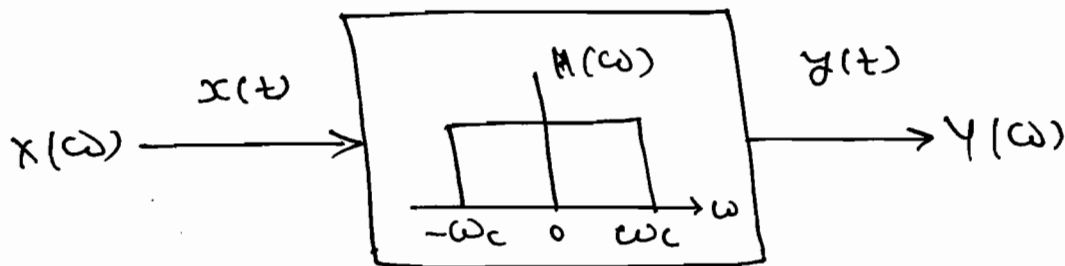
An input signal $x(t) = e^{-2t} u(t)$ is applied to an ideal L.P.F. with freq. response char.

$$H(\omega) = 1 ; |\omega| < \omega_c \\ = 0 ; |\omega| > \omega_c$$

~~✓~~

Find ω_c , such that energy in the

Soln:



→ slp: $x(t) = e^{-2t} u(t)$.

$$X(\omega) = \frac{1}{2 + j\omega}$$

$$|X(\omega)|^2 = \frac{1}{4 + \omega^2}$$

→ $E_{x(t)} = \int_{-\infty}^{\infty} |x(t)|^2 dt$

$$= \int_0^{\infty} e^{-4t} dt$$

$$E_{x(t)} = \frac{1}{4}$$

Now, given that

$$E_{y(t)} = \frac{1}{2} \times E_{x(t)}$$

$$\therefore E_{y(t)} = \frac{1}{8}$$

Now, $Y(\omega) = X(\omega) \cdot H(\omega)$.

$$Y(\omega) = \frac{1}{\sqrt{\omega^2 + 4}} \quad (1)$$

$$\therefore E_{y(t)} = \frac{1}{2\pi} \int_{-\omega_c}^{\omega_c} \frac{1}{\omega^2 + 4} \cdot d\omega$$

$$= \frac{2}{2\pi} \times \int_0^{\omega_c} \frac{1}{\omega^2 + 4} \cdot d\omega$$

$$\therefore \frac{1}{8} = \frac{1}{\pi} \times \frac{1}{2} \times \left[\tan^{-1}(\omega/2) \right]_0^{\omega_c}$$

$$\therefore \frac{\pi}{4} = \tan^{-1}(\omega_c/2)$$

$$\therefore \omega_c = 2 \tan \frac{\pi}{4}$$

$$\therefore \boxed{\omega_c = 2 \text{ rad/sec}}$$

P4.2.32 Consider $x(t) \longleftrightarrow X(\omega)$. Suppose

we are given the following facts

(i) $x(t)$ is real and non negative.

(ii) $F^{-1}\{(1+j\omega)X(\omega)\} = A \cdot e^{-2t} u(t)$, where 'A' is independent of t.

(iii) $\int_{-\infty}^{+\infty} |X(\omega)|^2 \cdot d\omega = 2\pi$ find a closed-form expression for $x(t)$.

Soln:

$$F^{-1} \{ (1+j\omega) X(\omega) \} = A e^{-2t} \cdot u(t).$$

$$\therefore (1+j\omega) X(\omega) = F \{ e^{-2t} \cdot u(t) \}.$$

$$\therefore (1+j\omega) X(\omega) = \frac{1}{2+j\omega}.$$

$$\therefore X(\omega) = \frac{1}{(1+j\omega)(2+j\omega)}.$$

$$\therefore X(\omega) = A \left[\frac{1}{1+j\omega} - \frac{1}{2+j\omega} \right]$$

$$\therefore x(t) = A [e^{-t} - e^{-2t}] u(t).$$

Now,

$$\int_{-\infty}^{+\infty} |X(\omega)|^2 d\omega = 2\pi$$

$$\Rightarrow \boxed{E_{x(t)} = 1} = \frac{1}{2\pi} \int_{-\infty}^{+\infty} |X(\omega)|^2 d\omega.$$

$$\therefore 1 = \int_{-\infty}^{\infty} |x(t)|^2 dt.$$

$$\therefore 1 = A^2 \left[\int_0^{\infty} [e^{-2t} - 2e^{-3t} + e^{-4t}] dt \right].$$

$$\therefore 1 = A^2 \left[\left[\frac{e^{-2t}}{-2} - \frac{2}{-3} e^{-3t} + \frac{e^{-4t}}{-4} \right]_0^{\infty} \right].$$

$$\therefore 1 = A^2 \left[\frac{1}{2} + \frac{2}{3} + \frac{1}{4} \right].$$

$$\therefore \frac{6}{A^2} = 1 = A^2 \left[\frac{6-8+3}{12} \right].$$

\Rightarrow

$$A = \sqrt{12}$$

$$\therefore x(t) = \sqrt{12} \left[e^{-t} - e^{-2t} \right] u(t)$$

P 4.2.33 Find the value of the integral

$$\int_{-\infty}^{+\infty} \frac{8}{(\omega^2 + 4)^2} d\omega$$

Soln:

~~XXXXXX~~

$$\int_{-\infty}^{+\infty} \frac{8}{(\omega^2 + 4)^2} d\omega$$

$$\rightarrow \frac{-d(t)}{e} \longleftrightarrow \frac{2d}{\omega^2 + d^2}$$

~~XXXXXX~~

$$\Rightarrow \frac{1}{2} \int_{-\infty}^{+\infty} \left(\frac{2(z)}{\omega^2 + d^2} \right)^2 d\omega$$

$$= \frac{1}{2} \times 2\pi \times \int_{-\infty}^{\infty} e^{-4|t|} dt$$

$$= \pi \times 2 \times \int_0^{\infty} e^{-4t} dt$$

$$= 2\pi \times \frac{1}{4}$$

$$= \frac{\pi}{2}$$

$$\therefore \text{Sol}_1 \int_{-\infty}^{+\infty} \frac{8}{(\omega^2 + 4)^2} d\omega = \pi/2$$

Q Using Parseval's theorem find the signal energy in $x(t) = 4 \operatorname{sinc}(t/5)$.

Soln:

$$x(t) = 4 \operatorname{sinc}(t/5)$$

$$A = 4, \quad T = 5$$

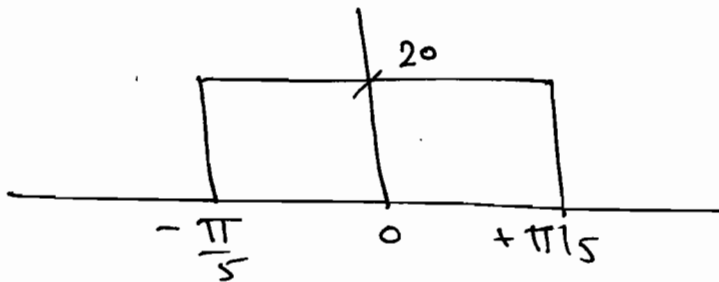
$$\therefore X(\omega) = AT \operatorname{rect}(\omega/2a)$$

$$x(t) = \frac{4 \sin(\pi t/5)}{\pi t/5}$$

$$x(t) = 20 \frac{\sin(\frac{\pi t}{5})}{\pi t}$$

↓ F.T.

$$X(\omega) = 20 \cdot \operatorname{rect}\left(\frac{\omega}{2\left(\frac{\pi}{5}\right)}\right)$$



$$\therefore E_{x(t)} = \frac{1}{2\pi} \int_{-\infty}^{+\infty} |X(\omega)|^2 d\omega$$

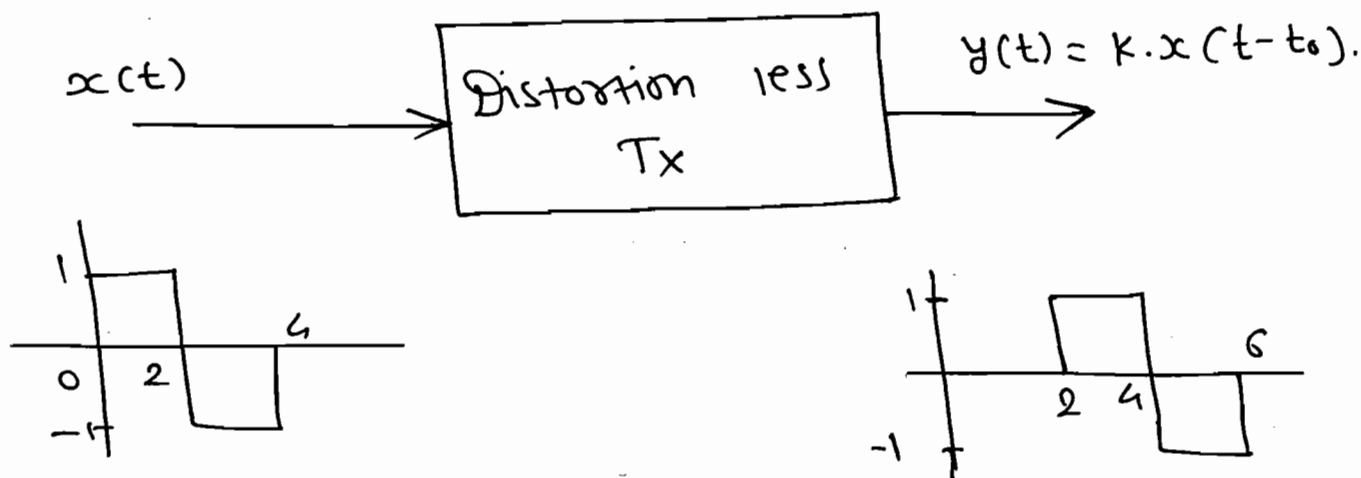
$$= \frac{1}{2\pi} \times 2 \times \int_0^{\pi/5} (400) d\omega$$

$$= \frac{1}{\pi} \times 400 \times \frac{\pi}{5}$$

$$\therefore \boxed{E_{x(t)} = 80}$$

* Applications:

① Distortionless Transmission:-



⇒ For distortionless transmission, output is replica of the input which scaling in its amplitude and possible delay.

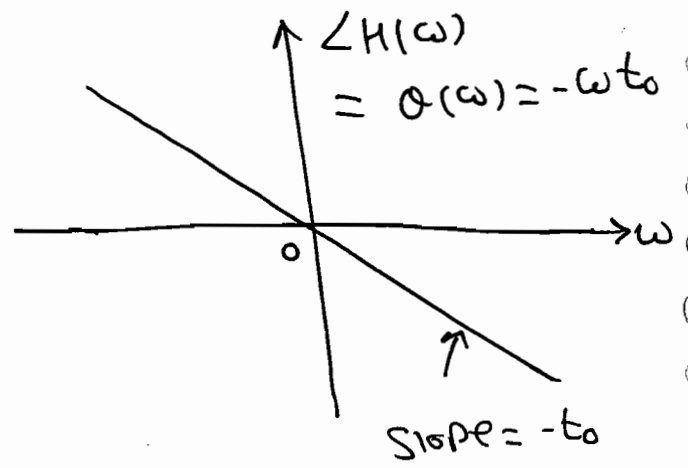
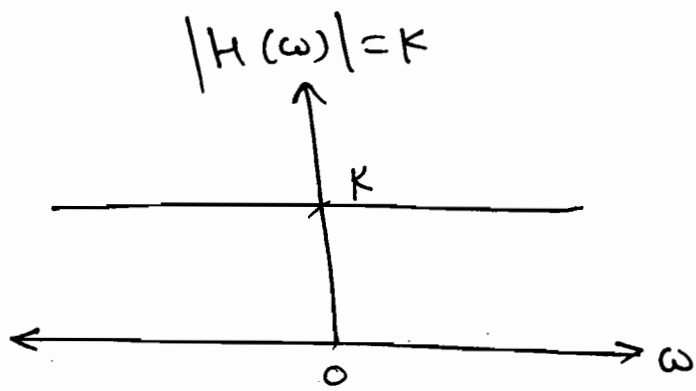
⇒ For Distortionless transmission, magnitude response must be a constant, phase response must be linear function of ω with slope $-t_0$, where t_0 is delay in output with respect to input.

$$y(t) = K x(t - t_0)$$

$$\therefore Y(\omega) = K \cdot e^{-j\omega t_0} \cdot X(\omega)$$

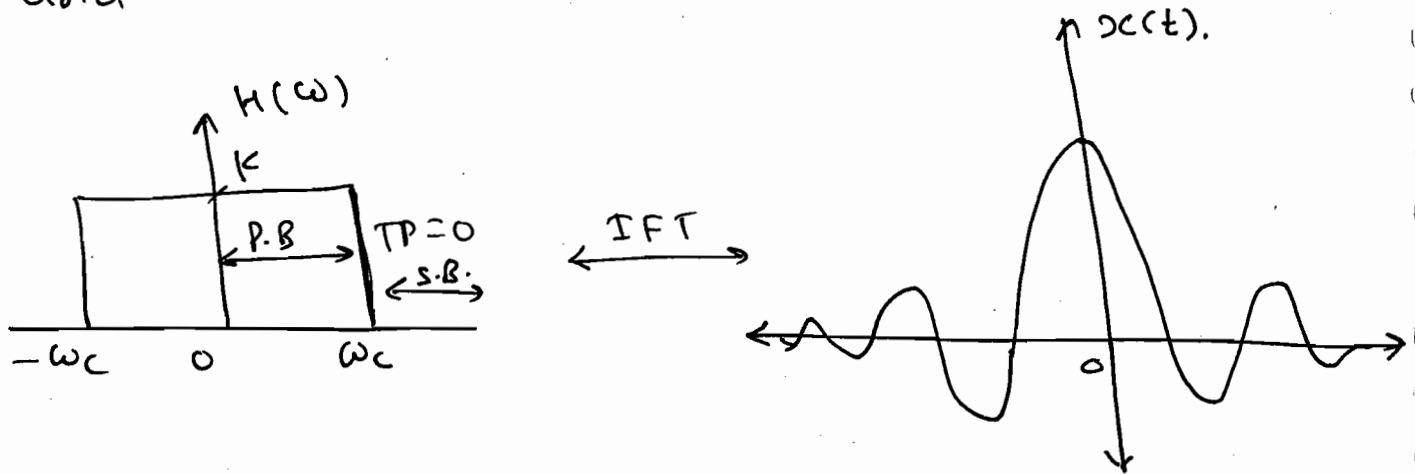
$$\therefore Y(\omega) = |H(\omega)| \cdot e^{j\theta(\omega)}$$

$$\Rightarrow |H(\omega)| = K, \quad \theta(\omega) = -\omega t_0$$



\Rightarrow According to Rayleigh's theorem for a distortionless condition we require infinite energy which is impractical so we are limiting the range of freq. from 0 to ω_c i.e. Ideal filter (IFT) of rectangular spectrum is a Sa^n which extends for all time.

\Rightarrow All ideal filters are non-causal and unstable.



\Rightarrow Transition width is deciding the order of the filter (no. of energy storing elements).

⇒ Most of the practical systems we are designing as non-linear phase response. To make it as linear we are defining two parameters.

① Phase delay:

⇒ It is the delay i.e. occurring at a single freq. which is due to carrier

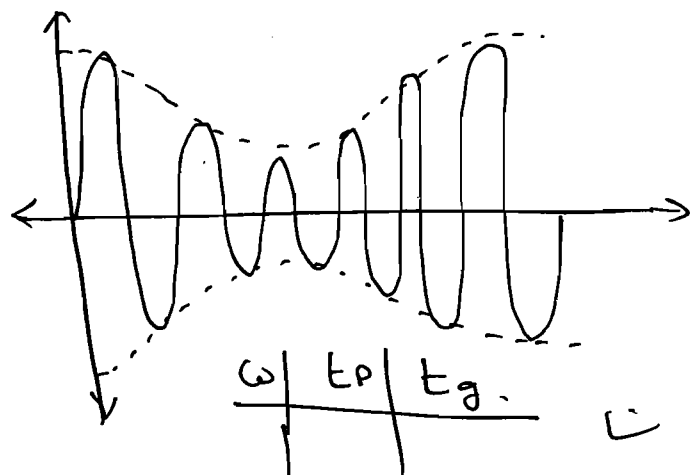
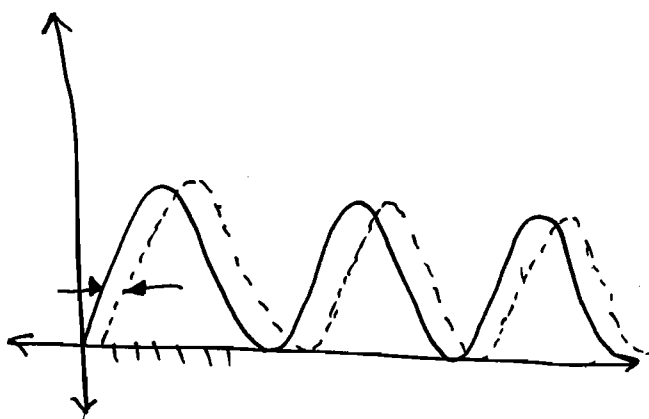
$$t_p(\omega) = -\frac{\theta(\omega)}{\omega}$$

② Group delay:

⇒ It is the delay i.e. occurring at a group (or) narrow band of freq. which is due to envelope of the msg signal.

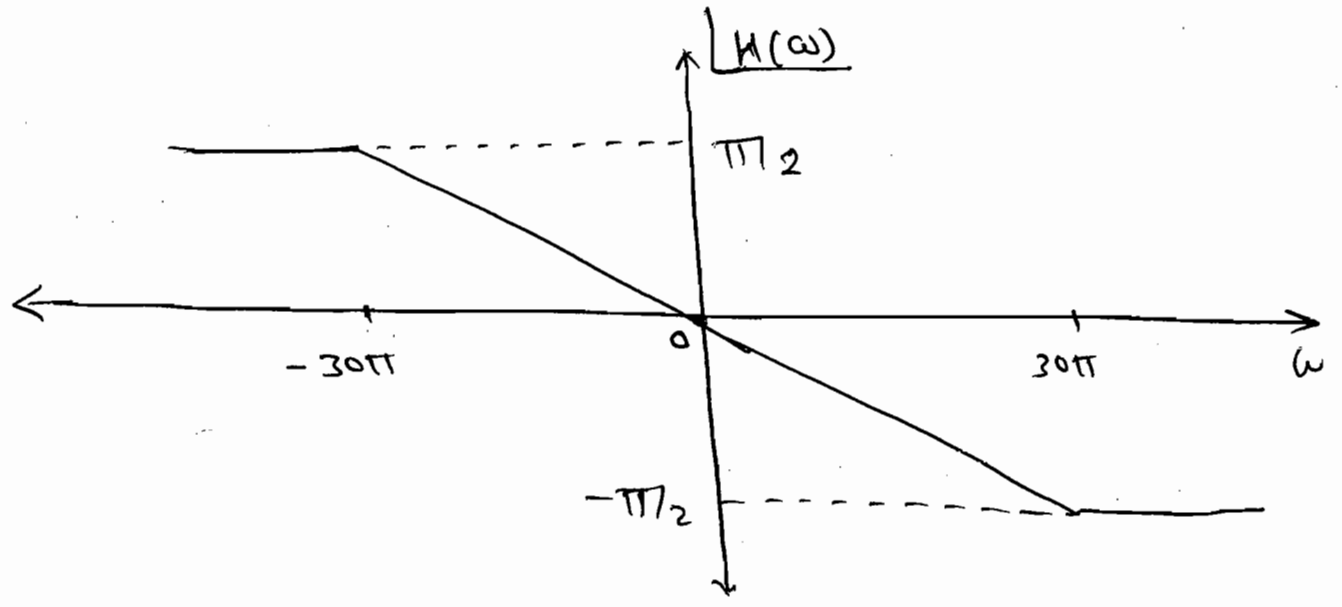
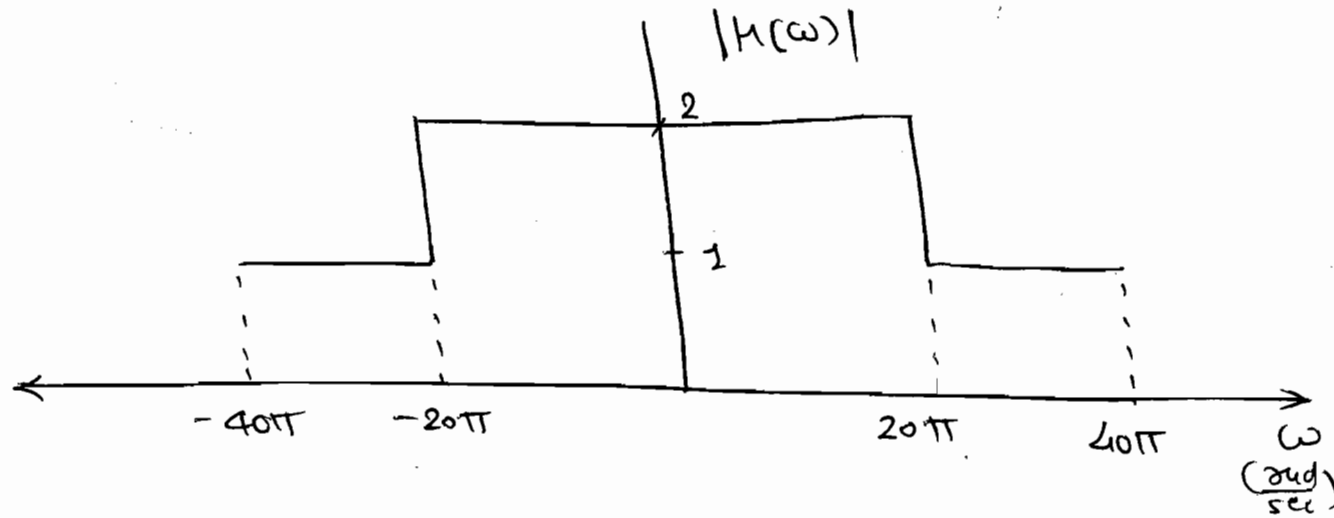
$$t_g(\omega) = -\frac{d\theta(\omega)}{d\omega}$$

⇒ ∴ indicates the phase lag present in the ~~system~~ system.



P4.3-1 Consider a transmission system $H(\omega)$

with magnitude and phase response as shown in figure. If an input $x(t) = 2 \cos 10\pi t + \sin 20\pi t$ is given to the system the output will be _____



Soln:

$$x(t) = 2 \cos 10\pi t + \sin 20\pi t$$

① $\cos 10\pi t$

$$\omega = \pm 30\pi \quad m = 1$$

$$\phi \Rightarrow \pm \pi/2$$

$$\text{So, } \begin{matrix} 30\pi & -\pi/2 \\ 10\pi & (?) \end{matrix}$$

$$\Rightarrow \phi = -\pi/2 \times 1/3 = -\pi/6$$

So, at 10π , $m \Rightarrow 2$
 $\phi \rightarrow -\pi/6$.

(2) $\sin 26\pi t$.

m at $26\pi \Rightarrow 2$ 1.

$\phi \Rightarrow 30\pi \rightarrow \pi/2$

$26\pi \rightarrow (?)$

$$\Rightarrow \phi = -\frac{13}{26\pi} \times \frac{\pi}{2}$$

$$\phi = -\frac{13\pi}{30}$$

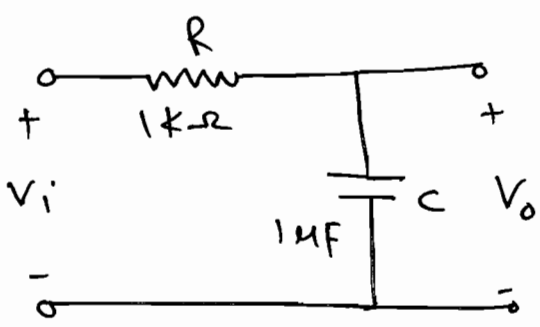
So, Ans: (2)(2) $\cos(10\pi t - \pi/6)$
 $+ \sin(26\pi t - \frac{13\pi}{30})$.

$$y(t) = 4 \cos(10\pi t - \pi/6) + \sin(26\pi t - \frac{13\pi}{30})$$

Q The system under consideration is an RC LPF with $R = 1\text{ k}\Omega$ & $C = 1\mu\text{F}$

a) Let $H(f)$ denote the frequency response of an RC LPF with let f_1 be the highest freq. component such that $0 \leq |f| \leq f_1$, $\left| \frac{H(f_1)}{H(0)} \right| \geq 0.95$ then f_1 (in Hz) is _____.

Soln:



$$H(f) = \frac{1}{1 + j2\pi fRC}$$

$$|H(f)| = \frac{1}{\sqrt{1 + (2\pi fRC)^2}}$$

Now, given that

$$|H(f, \omega)| \geq 0.95 |H(0)|.$$

$$\text{So, } \frac{1}{\sqrt{1 + (2\pi f_1 RC)^2}} \geq 0.95 \times \frac{1}{\sqrt{1+0}}$$

$$\Rightarrow \frac{1}{1 + (2\pi f_1 RC)^2} = 0.9025.$$

$$\Rightarrow 1 + (2\pi f_1 RC)^2 = 1.108$$

$$\therefore (2\pi f_1 RC)^2 = 0.108$$

$$\left(f_1 \times 10^{-6} \times 10^3 \right)^2 = \frac{0.108}{4 \times \pi^2}$$

$$\Rightarrow \boxed{f_1 = 52.2 \text{ Hz}}$$

b) Let $t_g(f)$ denote the group delay of RC LPF and $f_2 = 100 \text{ Hz}$, then $t_g(f_2)$ in msec, is _____.

Soln:

$$\angle H(f) = -\tan^{-1}(2\pi f RC) = \theta(f).$$

$$\therefore t_g = -\frac{d\theta(f)}{df}$$

$$= + \frac{1}{1 + (2\pi f RC)^2}$$

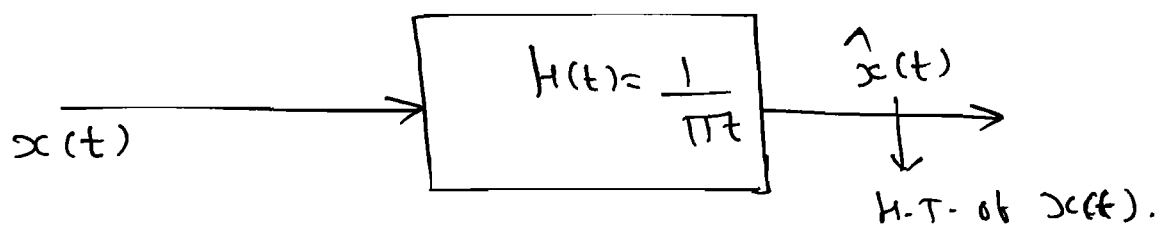
$$= \frac{1}{1 + (2\pi \times 100 \times 10^{-6} \times 10^3)^2}$$

$$\boxed{t_g = 0.717 \text{ sec}}$$

2 Hilbert Transform:-

⇒ The Hilbert transform is an operation that shifts the phase of $x(t)$ by $-\pi/2$, while the amplitude spectrum of the signal remains unaltered.

⇒



$$\Rightarrow \hat{x}(t) = x(t) * \frac{1}{\pi t}$$

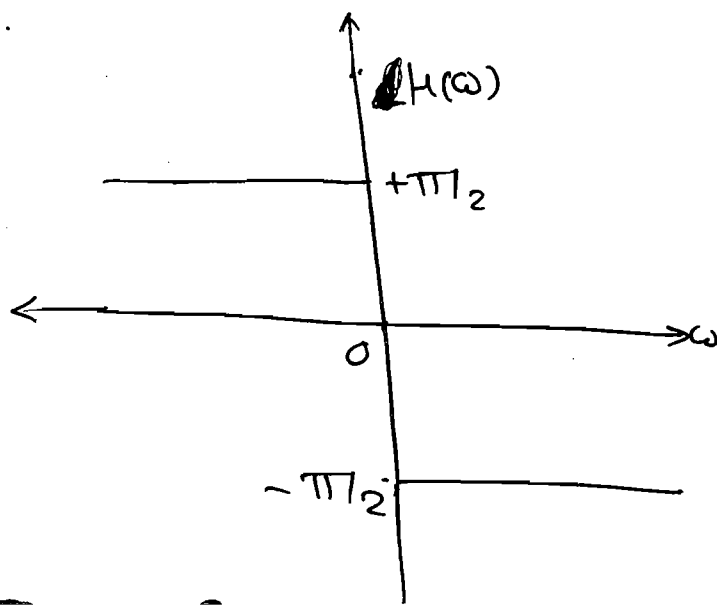
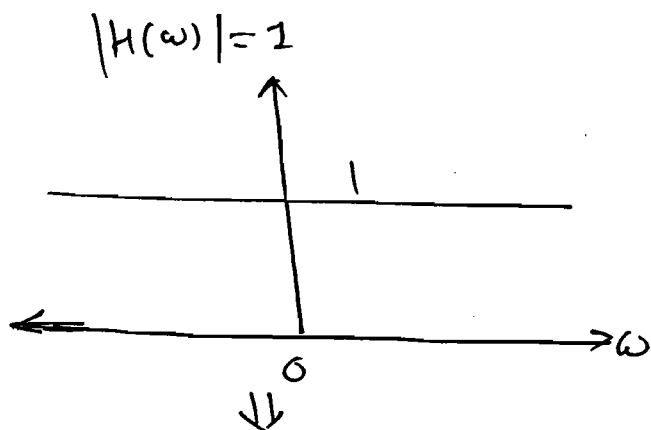
↓ F.T.

$$\hat{X}(\omega) = X(\omega) \cdot [-j \operatorname{sgn}(\omega)]$$

∴ freq. response
of H.T.

$$H(\omega) = \frac{\hat{X}(\omega)}{X(\omega)} = -j \operatorname{sgn}(\omega)$$

$$\Rightarrow H(\omega) = -j; \quad \omega > 0$$
$$= +j; \quad \omega < 0$$



All pass filter

⇒ An ideal H.T. is an all pass phase shifter.

⇒ It is obeying orthogonality,

Area under two signals must be zero.

i.e.
$$\int_{t_1}^{t_2} x(t) \cdot \hat{x}(t) \cdot dt = 0.$$

* Properties of H.T.

1) H.T. doesn't change the domain of a signal.

2) H.T. doesn't alter the amplitude spectrum of a signal.

3) If $\hat{x}(t)$ is H.T. of $x(t)$, then H.T. of $\hat{x}(t)$ is $-x(t)$.

4) $x(t)$ and $\hat{x}(t)$ are orthogonal to each other.

P4.4.1 Find the H.T. of

(1) $x(t) = \cos \omega_0 t$

(2) $x(t) = \sin \omega_0 t.$

Soln:
$$x(t) = \cos \omega_0 t \xrightarrow{\text{H.T.}} \cos(\omega_0 t - \pi/2)$$
$$= \cos(\pi/2 - \omega_0 t).$$
$$= \sin \omega_0 t.$$

$$x(t) = \sin \omega_0 t \xrightarrow{\text{H.T.}} \sin(\omega_0 t - \pi/2).$$
$$= -\sin(\pi/2 - \omega_0 t).$$
$$= -\cos \omega_0 t.$$

$$\Rightarrow \text{H.T. of } e^{j\omega t} \quad (\omega_0 > 0) = -j e^{j\omega t}$$

$$\downarrow$$

$$e^{j(\omega t - \pi/2)} = e^{j\omega t} \cdot e^{-j\pi/2}$$

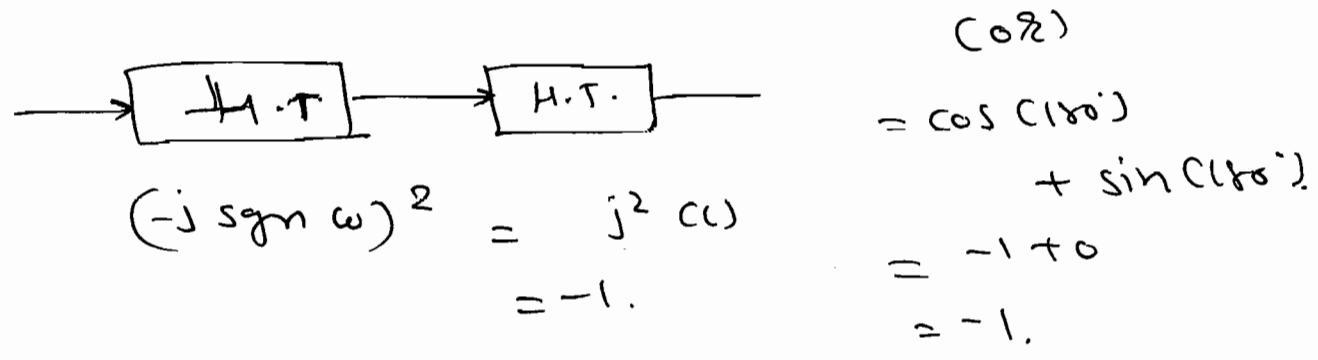
$$= e^{j\omega t} \cdot (-j)$$

$$= (-j) \cdot e^{j\omega t}$$

\Rightarrow H.T. of $\delta(t)$ is _____.

$$\Rightarrow \delta(t) * \frac{1}{\pi t} = \frac{1}{\pi t}$$

\Rightarrow H.T. of $\frac{1}{\pi t}$ is _____.



* CORRELATION: - (Correlogram).

$x(t), x(t-\tau)$

A.C.F

Auto Correlation fn

Energy Power

$x(t), y(t-\tau)$

C.C.F

Cross Correlation fn

Energy Power.

⇒ It provide a measure of the similarity between 2 waveforms as the function of search parameter (τ).

⇒ An application of correlation to signal detection in a radar, when a signal pulse is transmitted in order to detect a suspect target. If a target is present, the pulse will be detected by it. If the target is not present, there will be no detection pulse, just noise. By detecting the presence (or) absence of the detected pulse we confirm the presence (or) absence of target.

⇒

	A.C.F.
Energy	$R_x(\tau) = \int_{-\infty}^{+\infty} x(t) \cdot x(t-\tau) dt.$
Power	$R_x(\tau) = \lim_{T \rightarrow \infty} \frac{1}{2T} \int_{-T}^T x(t) \cdot x(t-\tau) dt.$

↑
 Lag (or)
 Searching Parameter

* Properties of ACF :-

1) ACF is an even function of τ

i.e. $R_x(\tau) = R_x(-\tau)$.

2) ACF at origin indicates either energy (or) power in the signal.

3) Max. value of ACF is at origin,

i.e., $|R_x(\tau)| \leq |R_x(0)| \quad \forall \tau$.

4) $R_x(\tau) = x(\tau) * x(-\tau)$.

$$x(\tau) * x(-\tau) = \int_{-\infty}^{\infty} x(t) \cdot x(-(\tau-t)) \cdot dt$$

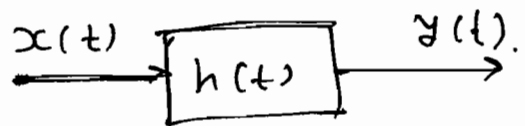
$$= \int_{-\infty}^{+\infty} x(t) \cdot x(t-\tau) \cdot dt = R_x(\tau)$$

5) F.T. of ACF is known as ESD (or) PSD

$$R_x(\tau) \xleftrightarrow{\text{F.T.}} S_x(\omega) \text{ ESD / PSD}$$

6) For an LTI SYSTEM

$$\therefore Y(\omega) = X(\omega) \cdot H(\omega)$$



$$\therefore |Y(\omega)|^2 = |X(\omega)|^2 \cdot |H(\omega)|^2$$

$$\therefore |Y(\omega)|^2 = |X(\omega)|^2 \cdot |H(\omega)|^2.$$

$$\therefore S_y(\omega) = S_x(\omega) \cdot |H(\omega)|^2.$$

output spectral density = [input spectral density] \times [$|H(\omega)|^2$].

P4.5.1 Find the Auto correlation and Power in the signal.

$$x(t) = 6 \cos\left(6\pi t + \frac{\pi}{3}\right).$$

Solⁿ: $P_{avg} = \frac{A^2}{2} = \frac{36}{2} = 18 \text{ W}.$

$$\rightarrow R_x(\tau) = \lim_{T \rightarrow \infty} \frac{1}{2T} \int_{-T}^T 6 \cos\left(6\pi t + \frac{\pi}{3}\right) \cdot 6 \cos\left(6\pi t - 6\pi\tau + \frac{\pi}{3}\right) dt$$

$$= \lim_{T \rightarrow \infty} \frac{1}{2T} \int_{-T}^T \frac{36}{2} \left[\cos\left(12\pi t - 6\pi\tau + \frac{\pi}{3}\right) + \cos(6\pi\tau) \right] dt.$$

$$= \lim_{T \rightarrow \infty} \frac{18}{2T} \int_{-T}^T \cos(6\pi\tau) dt.$$

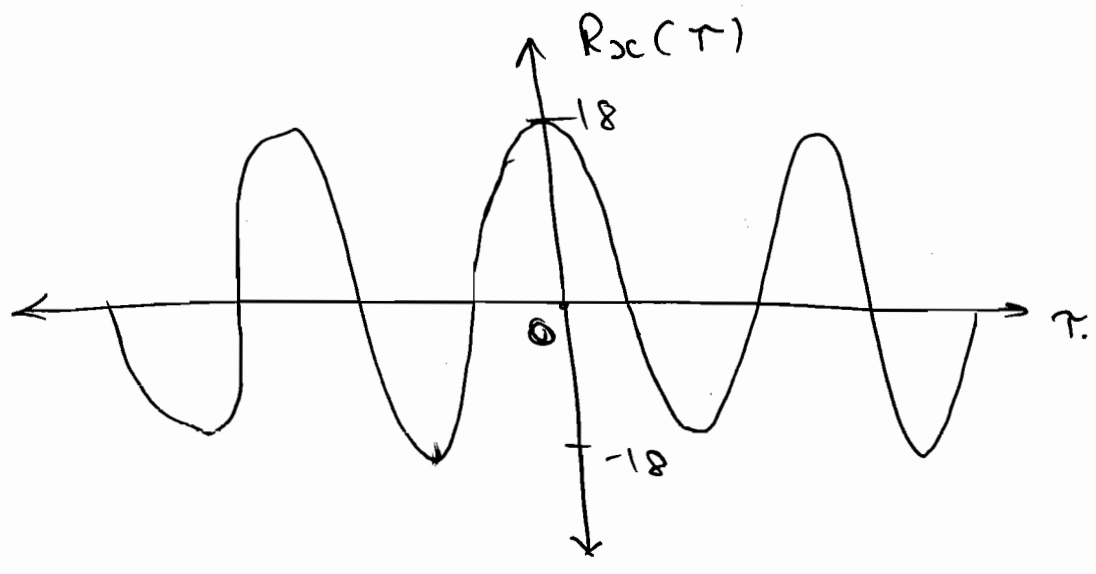
$$= \lim_{T \rightarrow \infty} \frac{18 \cos(6\pi\tau)}{2T} \times \int_{-T}^T dt.$$

$$= \lim_{T \rightarrow \infty} \frac{18 \cos(6\pi\tau)}{2T} \times 2T$$

$$\Rightarrow R_x(\tau) = 18 \cos(6\pi\tau)$$

(077) Power = $R_x(0) = 18 \text{ W}$.

$$\left. \begin{array}{l} A \cos(\omega_0 t + \theta) \\ A \sin(\omega_0 t + \theta) \end{array} \right\} \rightarrow \frac{A^2}{2} \cos(\omega_0 \tau) \leftarrow \text{ACF is fixed.}$$



P 4.5.2. Find the ACF of $x(t) = e^{-3t} u(t)$.

Soln:

$$R_x(\tau) = \int_{-\infty}^{\infty} x(t) \cdot x(t-\tau) \cdot dt$$

energy signal.

$$= \int_0^{\infty} e^{-3t} \cdot e^{-3(t-\tau)} \cdot dt$$

wrong

$$= e^{3\tau} \int_0^{\infty} e^{-6t} \cdot dt$$

$$= \frac{e^{3\tau}}{6} [0-1] = \frac{e^{3\tau}}{6}$$

$\Rightarrow x(t) = e^{-3t} \cdot u(t)$ is energy signal.

$$\therefore R_x(\tau) = \int_{-\infty}^{\infty} x(t) \cdot x(t-\tau) dt.$$

$$\therefore R_x(\tau) = \int_{-\infty}^{\infty} e^{-3t} \cdot u(t) \cdot e^{-3(t-\tau)} \cdot u(t-\tau) \cdot dt$$

$$u(t) \cdot u(t-\tau)$$

$$t > \tau$$

$$\& t < \tau.$$

$$\text{(OR)}$$

$$\Rightarrow R_x(\tau) = x(\tau) * x(-\tau).$$

$$= e^{-3\tau} \cdot u(\tau) * e^{3\tau} \cdot u(-\tau).$$

F.T. ↓

$$= \left[\frac{1}{3+j\omega} \right] \times \left[\frac{1}{3-j\omega} \right].$$

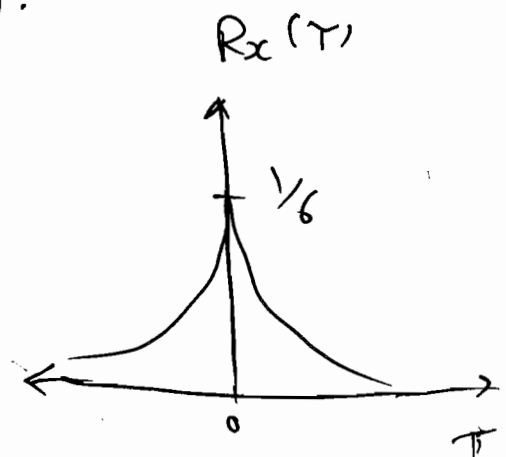
$$= \left(\frac{1}{\omega^2 + 9} \right)$$

$$= \frac{1}{6} \left(\frac{2(3)}{\omega^2 + (3)^2} \right).$$

↓ I.F.T

$$\therefore R_x(\tau) = \frac{1}{6} e^{-3|\tau|}$$

$$\therefore R_x(0) = \text{Energy} = \frac{1}{6}.$$



Q P. 4.5.3

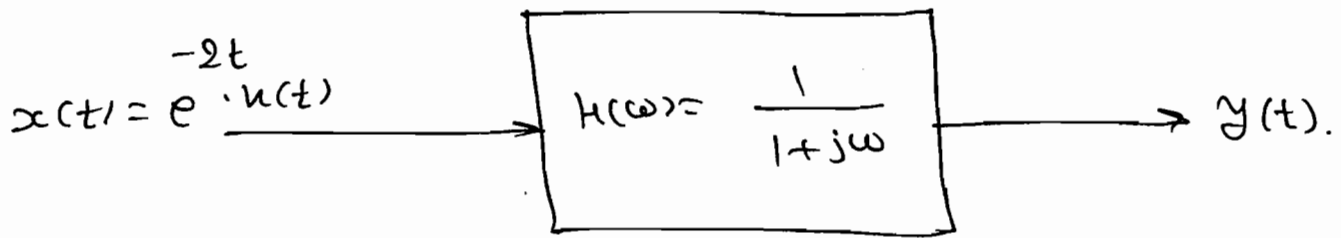
Consider a filter with $H(\omega) = \frac{1}{1+j\omega}$

and input $x(t) = e^{-2t} \cdot u(t)$.

(a) Find the PSD of the output?

(b) Show that total energy in the o/p is one-third of the input energy.

Soln:



$$\therefore x(t) = e^{-2t} \cdot u(t)$$

↓ F.T.

$$\therefore X(\omega) = \frac{1}{2+j\omega}$$

$$Y(\omega) = X(\omega) \cdot H(\omega)$$

$$|Y(\omega)|^2 = |X(\omega)|^2 \cdot |H(\omega)|^2$$

$$\therefore S_Y(\omega) = |H(\omega)|^2 \cdot S_X(\omega)$$

$$S_X(\omega) = |X(\omega)|^2 = \frac{1}{4 + \omega^2}$$

$$\therefore |H(\omega)|^2 = \frac{1}{1 + \omega^2}$$

$$\therefore S_Y(\omega) = \left(\frac{1}{1 + \omega^2} \right) \times \left(\frac{1}{4 + \omega^2} \right)$$

ESD at o/p.

(b) Energy = Area under ESD.

$$\therefore E_Y = \frac{1}{2\pi} \int_{-\infty}^{\infty} S_Y(\omega) \cdot d\omega$$

$$\begin{aligned}
\therefore E_y(\omega) &= \frac{1}{2\pi} \int_{-\infty}^{\infty} \frac{1}{(\omega^2+1)} \cdot \frac{1}{(\omega^2+4)} \cdot d\omega \\
&= \frac{1}{2\pi} \int_{-\infty}^{\infty} \frac{\frac{1}{3}}{\omega^2+1} - \frac{\frac{1}{3}}{\omega^2+4} \cdot d\omega \\
&= \frac{1}{2\pi} \times \frac{1}{3} \left[\tan^{-1}(\omega) - \frac{1}{2} \tan^{-1}(\omega/2) \right]_{-\infty}^{\infty} \\
&= \frac{1}{6\pi} \left[\frac{\pi}{2} - \frac{\pi}{4} - \frac{\pi}{2} - \frac{\pi}{4} \right] \\
&= \frac{1}{6\pi} \left[-\frac{\pi}{2} \right]
\end{aligned}$$

$$\therefore E_y(\omega) = \frac{1}{12}$$

$$\begin{aligned}
\Rightarrow \text{I/P } x(t) &= e^{-2t} u(t) \\
E_x &= \int_0^{\infty} (e^{-2t})^2 \cdot dt \\
&= \int_0^{\infty} e^{-4t} \cdot dt
\end{aligned}$$

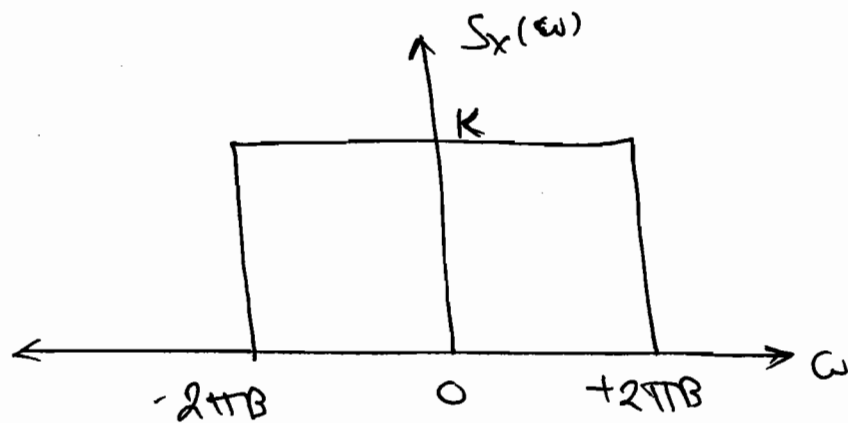
$$E_x = \frac{1}{4}$$

$$\text{So, } E_{O/P} = \frac{1}{3} E_{I/P}$$

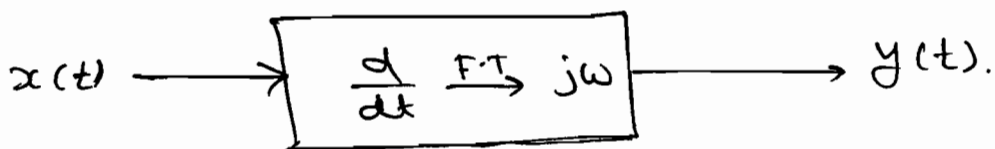
P 4.5.4

A power signal whose PSD is shown in fig. is applied to an ideal

differentiator, find the mean square value of the o/p at the differentiator.



Soln:



⇒ mean square value of o/p

= Power = Area under o/p PSD

$$= \frac{1}{2\pi} \int_{-\infty}^{\infty} S_y(\omega) \cdot d\omega.$$

Now, $S_y(\omega) = |H(\omega)|^2 \cdot S_x(\omega).$

So, $|H(\omega)|^2 = \omega^2.$

$$\therefore \text{M.S.V. of o/p} = \frac{1}{2\pi} \int_{-\infty}^{+\infty} \omega^2 \cdot S_x(\omega) \cdot d\omega.$$

$$= \frac{1}{2\pi} \int_{-\infty}^{+\infty} \omega^2 \cdot S_x(\omega) \cdot d\omega.$$

$$= \frac{1}{2\pi} \int_{-2\pi B}^{2\pi B} \omega^2 \cdot K \cdot d\omega.$$

$$= \frac{1}{\pi} \times k \times \int_0^{2\pi B} \omega^2 \cdot d\omega$$

$$= \frac{k}{\pi} \times \left[\frac{\omega^3}{3} \right]_0^{2\pi B}$$

$$= \frac{k}{\pi} \times \frac{8 \times \pi^3 \times B^3}{3}$$

$$\boxed{\text{M.S.V. of } x(t) = \frac{8\pi^2 B^3 K}{3}}$$

P4.5.5 Find the C.C.F of $x(t) = e^{-t} u(t)$
and $y(t) = e^{-3t} u(t)$?

Soln:

$$\text{ACF} \Rightarrow R_x(\tau) = x(\tau) * x(-\tau).$$

$$\text{CCF} \Rightarrow R_{xy}(\tau) = x(\tau) * y(-\tau).$$

$$\& R_{yx}(\tau) = y(\tau) * x(-\tau).$$

$$\therefore \boxed{R_{yx} = R_{xy}}$$

$$\text{So, } R_{xy}(\tau) = x(\tau) * y(-\tau).$$

$$\text{F.T.} \downarrow \Rightarrow \left[e^{-t} u(t) \right] * \left[e^{+3t} u(t) \right].$$

$$= \frac{1}{1+j\omega} \times \frac{1}{3-j\omega}$$

$$= \frac{1}{(1+j\omega)(3-j\omega)}$$

$$= \frac{1}{4} \left[\frac{1}{1+j\omega} + \frac{1}{3-j\omega} \right].$$

↓ I.F.T.

$$R_x(t) = \frac{1}{4} \left[e^{-t} \cdot u(t) + e^{3t} \cdot u(-t) \right].$$

* F.T. of Periodic Signals :-

⇒ Periodic and discrete in one domain is corresponds to discrete & periodic in other domain.

$$\Rightarrow 1 \xrightarrow{\text{F.T.}} 2\pi \delta(\omega).$$

$$1 \cdot e^{j\omega_0 t} \xrightarrow{\text{F.T.}} 2\pi \delta(\omega - \omega_0)$$

$$\Rightarrow \cos \omega_0 t = \frac{1 \cdot e^{j\omega_0 t} + 1 \cdot e^{-j\omega_0 t}}{2}$$

$$\downarrow \text{F.T.} \quad = \frac{1}{2} \cdot e^{j(\omega)(\omega_0)t} + \frac{1}{2} \cdot e^{j(-1)(\omega_0)t}$$

$$= \frac{2\pi}{2} \delta(\omega - \omega_0) + \frac{2\pi}{2} \delta(\omega + \omega_0).$$

$$\cos \omega_0 t \xrightarrow{\text{F.T.}} = 2\pi \left[\frac{\delta(\omega - \omega_0) + \delta(\omega + \omega_0)}{2} \right].$$

Rect	← F.T. →	Sa (or) sinc
Δ ² or	← F.T. →	Sa ² (or) sinc ²

Impulse $\xleftrightarrow{\text{F.T.}}$ Constant

Impulse train $\xleftrightarrow{\text{F.T.}}$ Impulse train

Gaussian $\xleftrightarrow{\text{F.T.}}$ Gaussian

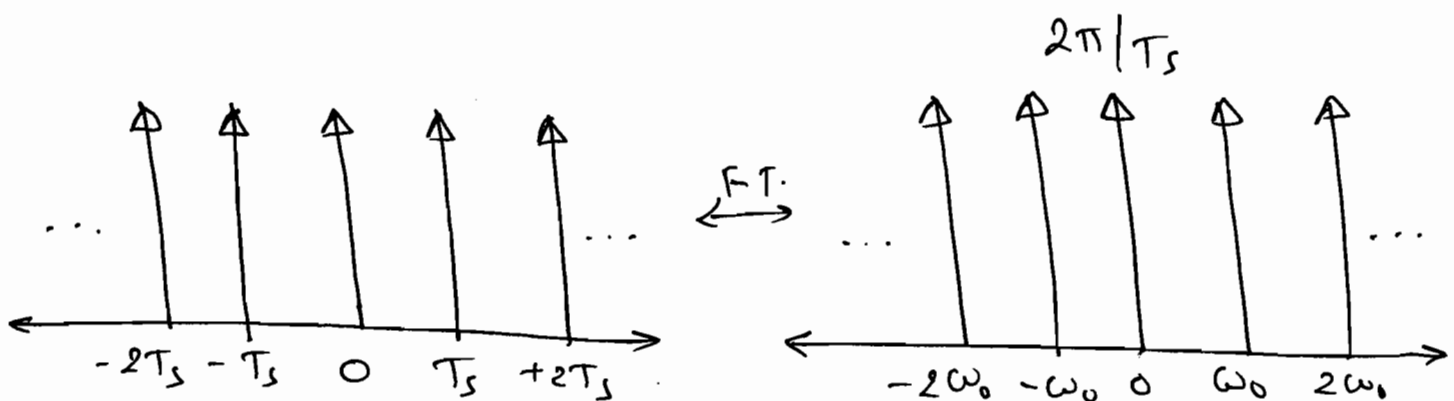
\Rightarrow

$$x_p(t) = \sum_{n=-\infty}^{\infty} C_n \cdot e^{jn\omega_0 t}$$

\downarrow F.T.

$$X_p(\omega) = 2\pi \sum_{n=-\infty}^{\infty} C_n \cdot \delta(\omega - n\omega_0)$$

\Rightarrow F.T. of a periodic signal consist of a sequence of equidistant impulse located at harmonic frequencies of the signal.



\Rightarrow

$$\sum_{n=-\infty}^{+\infty} \delta(t - nT_s) \leftrightarrow \frac{2\pi}{T_s} \sum_{n=-\infty}^{+\infty} \delta(\omega - n\omega_0)$$

Q An L.T.I. sys. is having Impulse

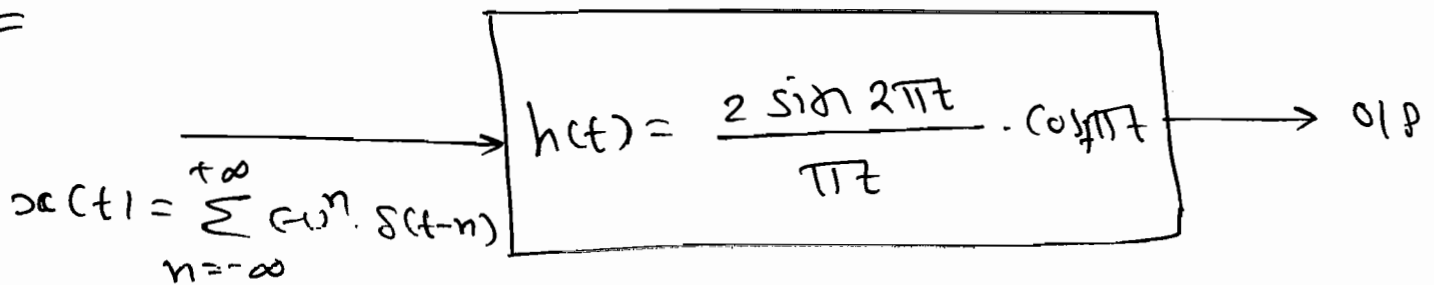
Response $h(t) = \frac{2 \sin 2\pi t}{\pi} \cdot \cos \pi t$ for

which the I/P applied is

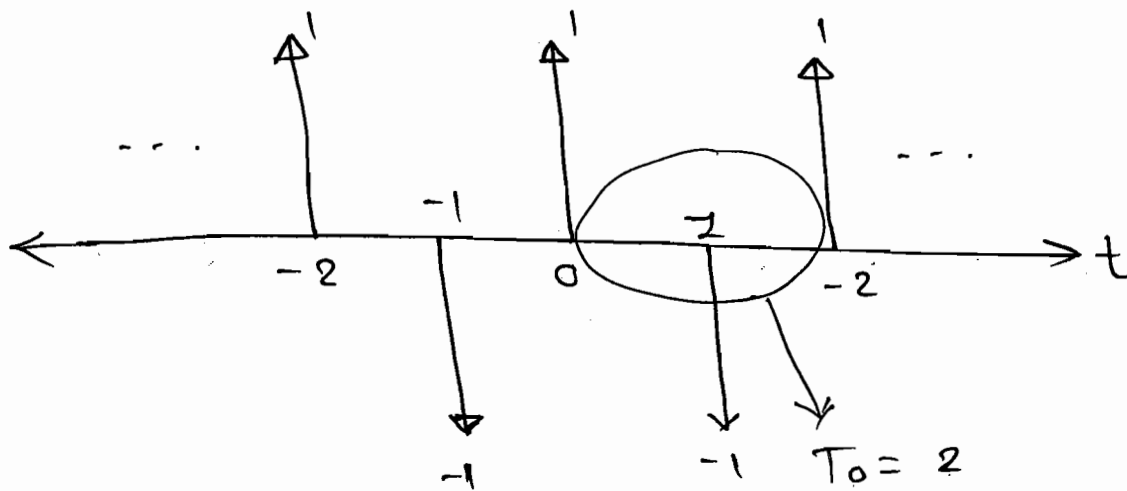
$x(t) = \sum_{n=-\infty}^{+\infty} (-1)^n \delta(t-n)$, find the

O/P.

Soln:



$$\Rightarrow x(t) = \sum_{n=-\infty}^{\infty} (-1)^n \delta(t-n)$$



$$\omega_0 = \frac{2\pi}{T} \Rightarrow \boxed{\omega_0 = \pi}$$

\Rightarrow Now,

$$X_p(\omega) = 2\pi \sum_{n=-\infty}^{+\infty} C_n \delta(\omega - n\omega_0)$$

$$\text{So, } C_n = \frac{1}{T} \int_0^T x(t) \cdot e^{-j\omega_0 n t} dt$$

$$\Rightarrow C_n = \frac{1}{2} \int_0^2 [s(t) - s(t-1)] e^{-jn\pi t} dt.$$

$$= \frac{1}{2} \left[\int_0^2 s(t) e^{-jn\pi t} dt - \int_0^2 s(t-1) e^{-jn\pi t} dt \right]$$

\uparrow $t=0$ \uparrow $t=1$
 Shifting Property of impulse.

$$\Rightarrow C_n = \frac{1}{2} \left[e^{-jn\pi(0)} - e^{-jn\pi(1)} \right]$$

$$= \frac{1}{2} \left[1 - e^{-jn\pi} \right]$$

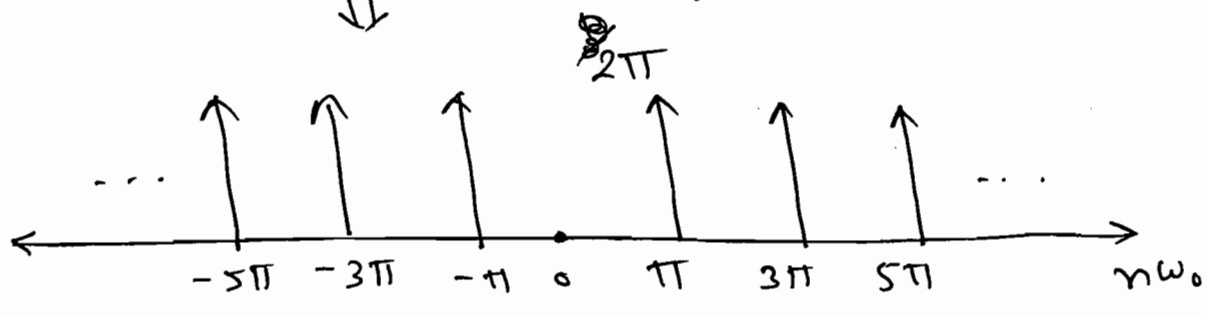
$$C_n = \frac{1}{2} [1 - (-1)^n]$$

$$\Rightarrow C_n = 1 \quad ; \quad n = \text{odd.}$$

$$= 0 \quad ; \quad n = \text{even.}$$

$$\therefore X_p(\omega) = \frac{2\pi}{2} \sum_{n=-\infty}^{+\infty} (1) \cdot \delta(\omega - n\pi) \quad (\because \omega_0 = \pi)$$

(odd n) $X_p(\omega)$

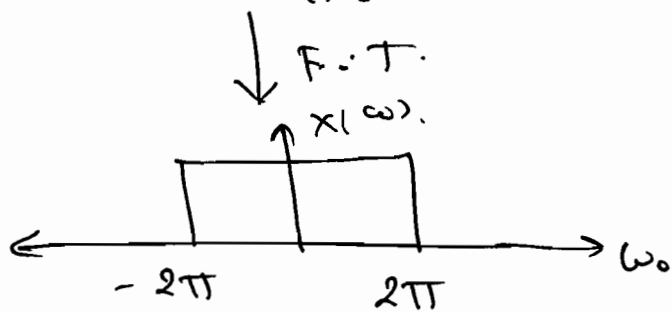


Now, $h(t) = \frac{2 \sin 2\pi t}{\pi t} \cdot \cos^2 \pi t$

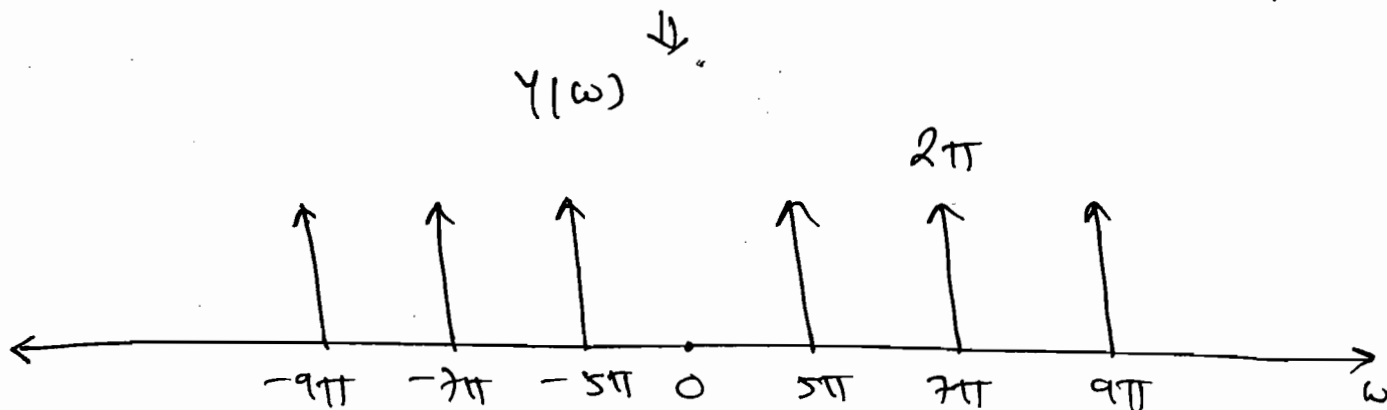
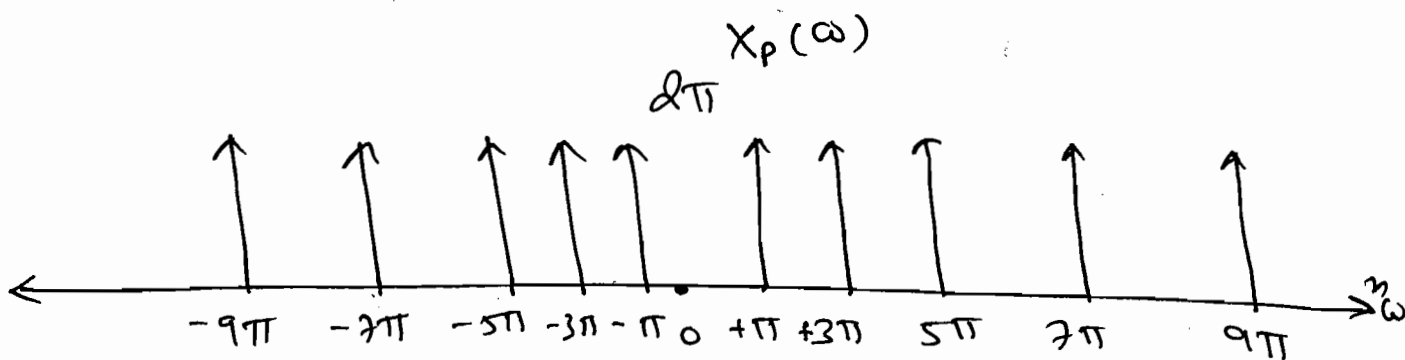
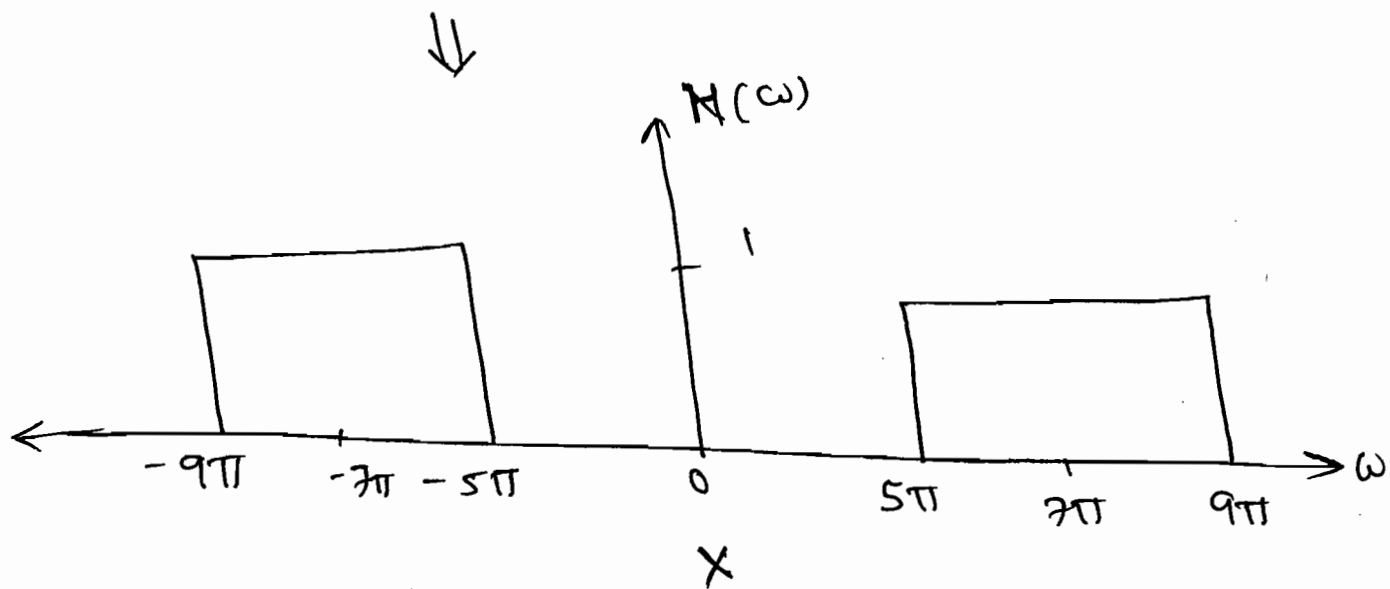
$$= \frac{2 \sin 2\pi t}{\pi t} \cdot \left[\frac{e^{-j\pi t} + e^{j\pi t}}{2} \right]$$

$$h(t) = \frac{\sin 2\pi t}{\pi t} \cdot \left[\frac{e^{-j\pi t} + e^{j\pi t}}{1} \right]$$

$$\text{i.e., } x_c(t) = \frac{\sin 2\pi t}{\pi t}$$



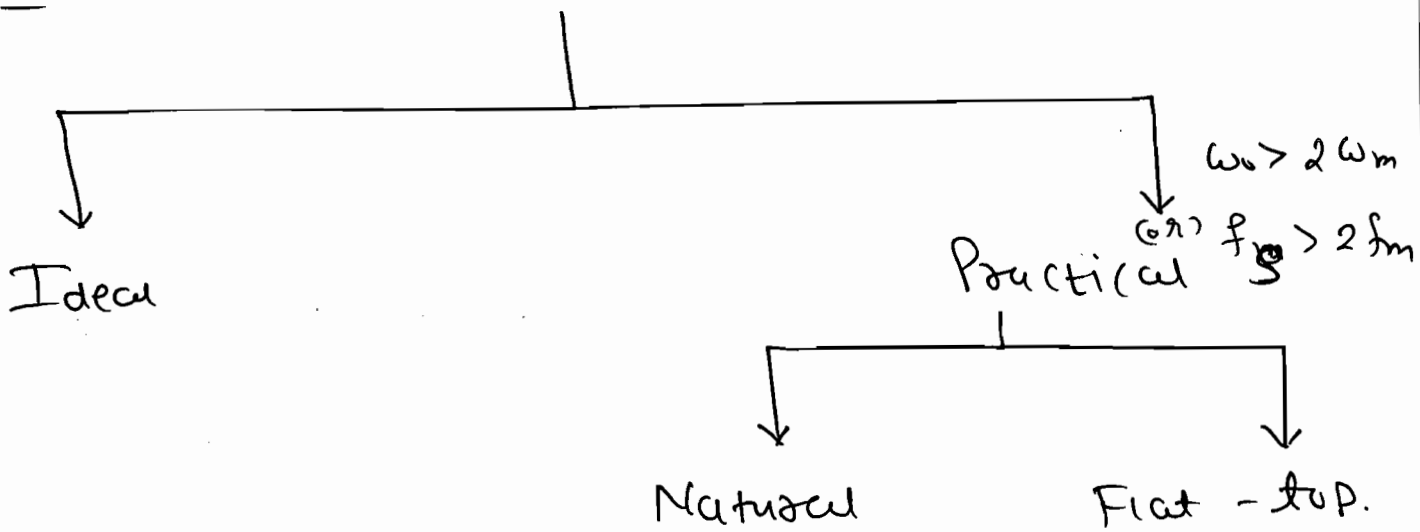
$$\therefore H(\omega) = X(\omega - 7\pi) + X(\omega + 7\pi)$$



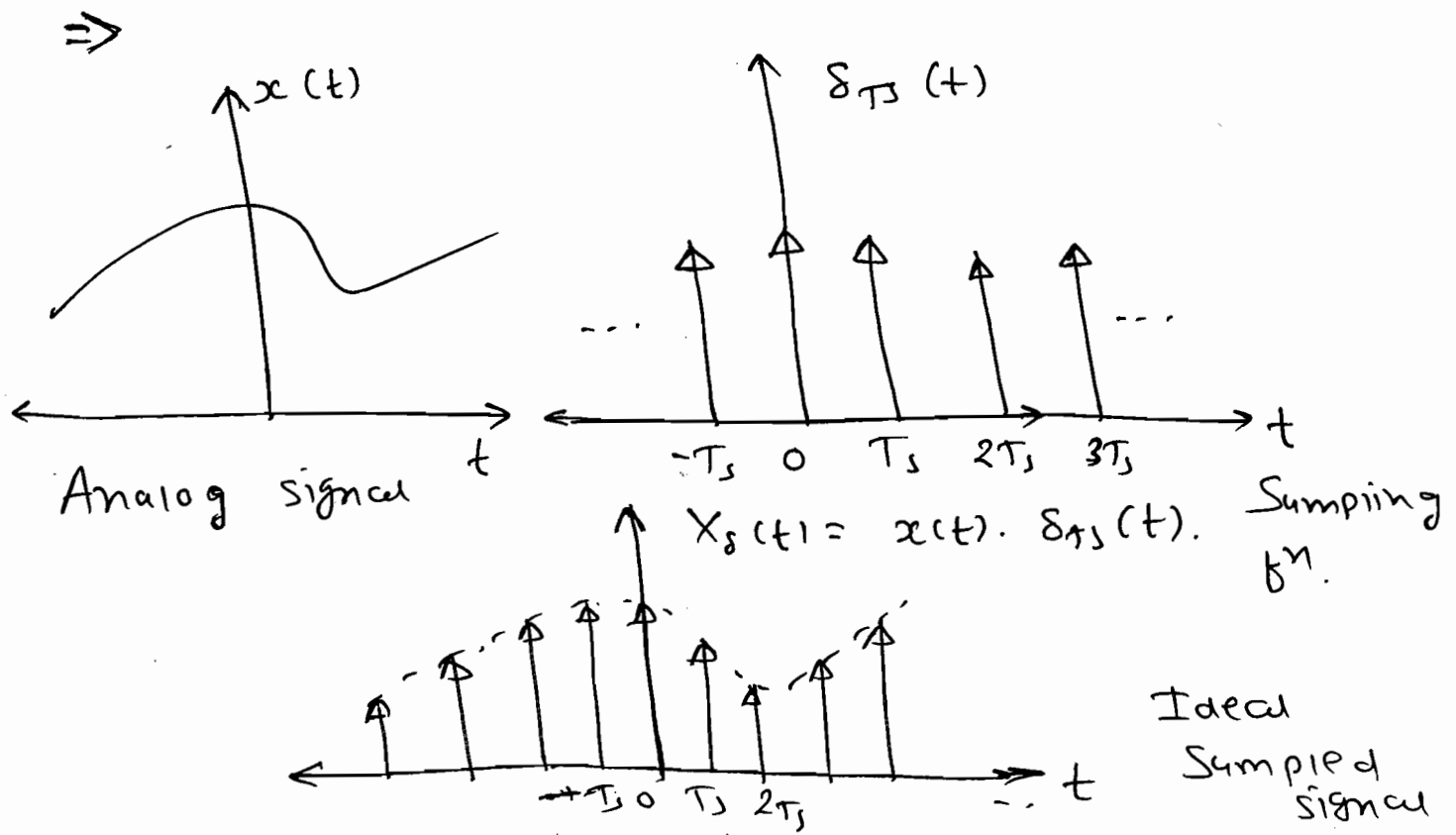
$$\Rightarrow Y(\omega) = 2\pi \left[\delta(\omega - 5\pi) + \delta(\omega + 5\pi) + \delta(\omega - 7\pi) + \delta(\omega + 7\pi) + \delta(\omega - 9\pi) + \delta(\omega + 9\pi) \right]$$

$$\therefore Y(\omega) = 2 \left[\cos 5\pi t + \cos 7\pi t + \cos 9\pi t \right]$$

* Sampling Theorem :-



① Ideal Sampling :-



$\Rightarrow x(t) \rightarrow$ Analog signal

$$\Rightarrow \delta_{T_s}(t) = \sum_{n=-\infty}^{\infty} \delta(t - nT_s)$$

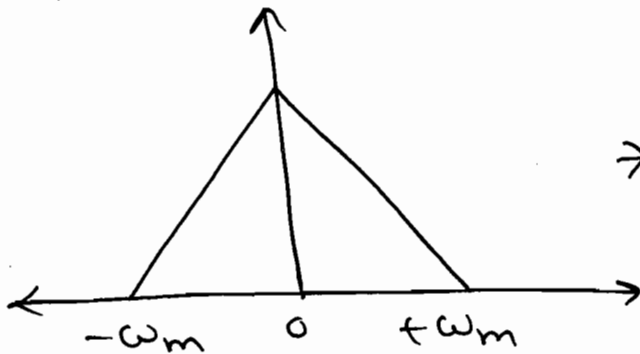
$\delta_{T_s}(t) =$ Sampling function.

$\Rightarrow x_s(t) \rightarrow$ Ideally Sampled signal.

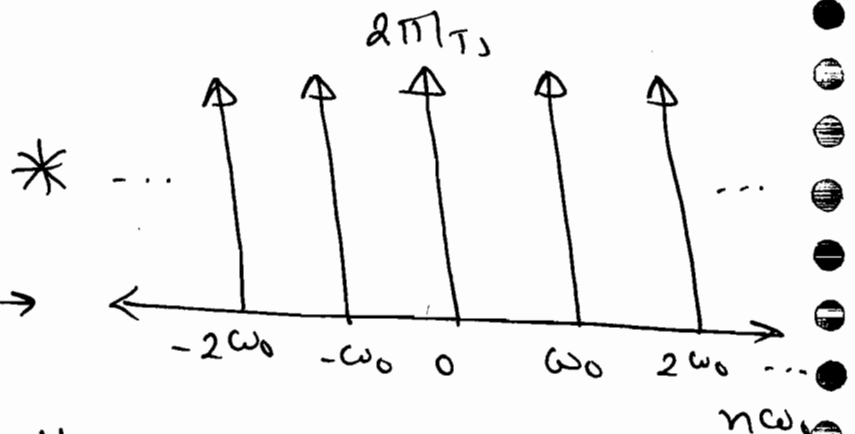
$$x_s(t) = x(t) \cdot \sum_{n=-\infty}^{+\infty} \delta(t - nT_s) \quad \leftarrow \text{Time domain.}$$

\Rightarrow Take F.T.

$$x(t) \leftrightarrow X(\omega)$$

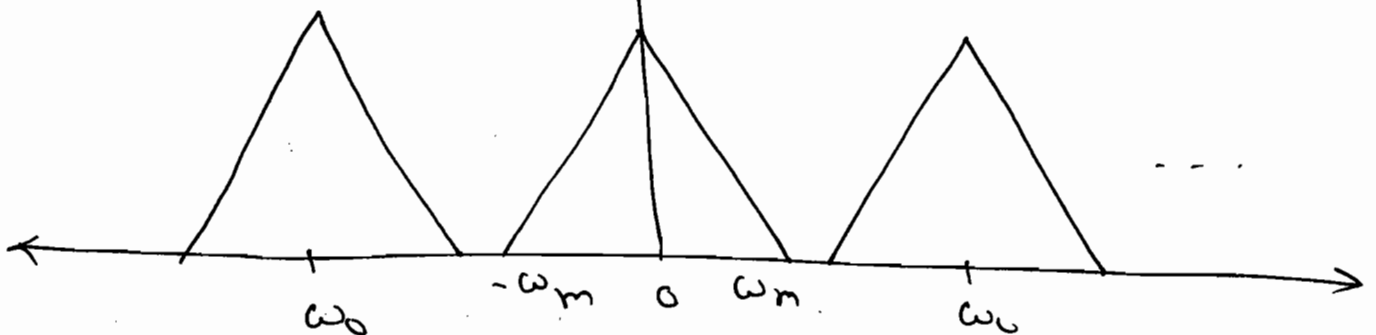


$$\sum_{n=-\infty}^{\infty} \delta(t - nT_s) \quad \leftarrow \frac{1}{T_s} \sum_{n=-\infty}^{\infty} \delta(\omega - n\omega_0)$$



\Downarrow Convolve.

$$X_s(\omega)$$



$$\Rightarrow X_s(\omega) = \frac{1}{2\pi} \left[X(\omega) * \frac{2\pi}{T_s} \sum_{n=-\infty}^{\infty} \delta(\omega - n\omega_0) \right]$$

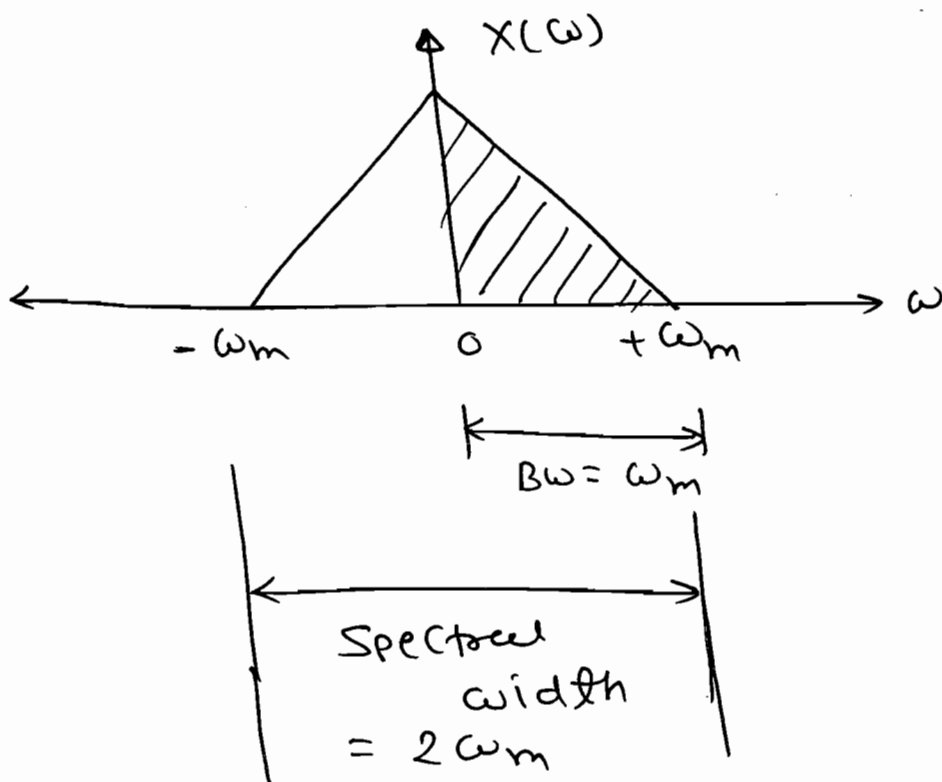
⇒ Spectrum of $x_s(t)$

⇒

$$X_s(\omega) = \frac{1}{T_s} \sum_{n=-\infty}^{+\infty} X(\omega - n\omega_0)$$

↑
Freq. domain.

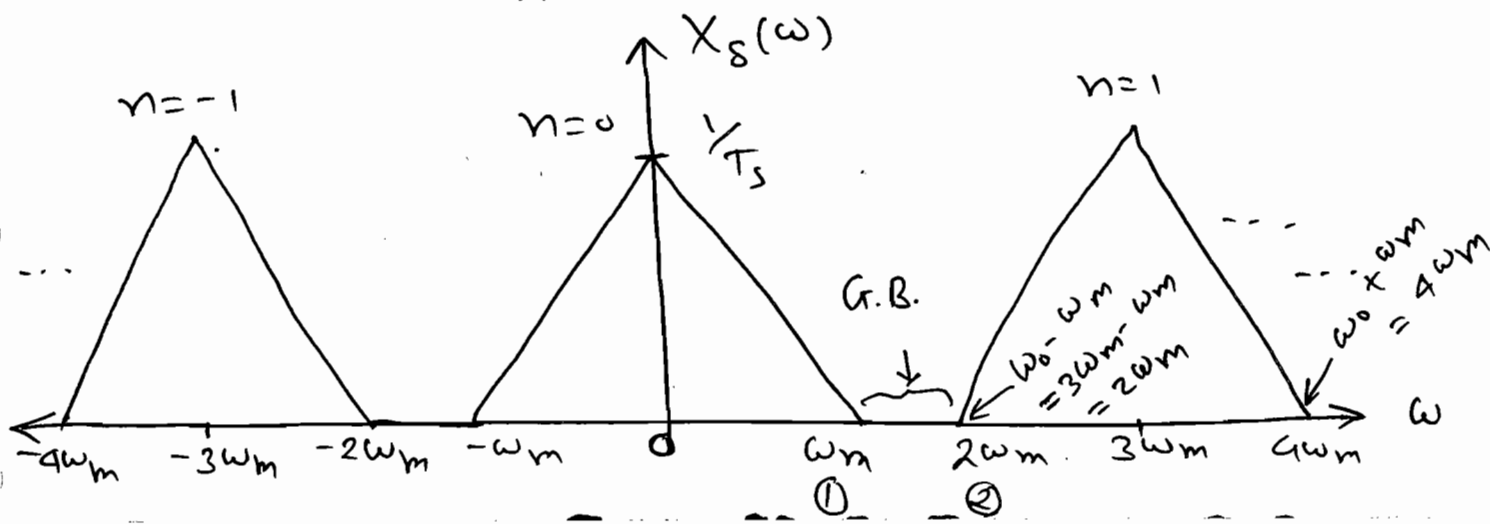
⇒ Assume Band limited spectrum,



Case- (i): $\omega_0 > 2\omega_m$ ⇒ over Sampling

⇒ Let, $\omega_0 = 3\omega_m$

$$X_s(\omega) = \frac{1}{T_s} \sum_{n=-\infty}^{\infty} X(\omega - 3n\omega_m)$$



$$\Rightarrow \text{Guard Band} = (2) - (1) \\ = (\omega_0 - \omega_m) - (\omega_m)$$

$$\boxed{\text{Guard Band} = \omega_0 - 2\omega_m.}$$

\Rightarrow Images don't overlap,

if ~~the~~ (2) > (1).

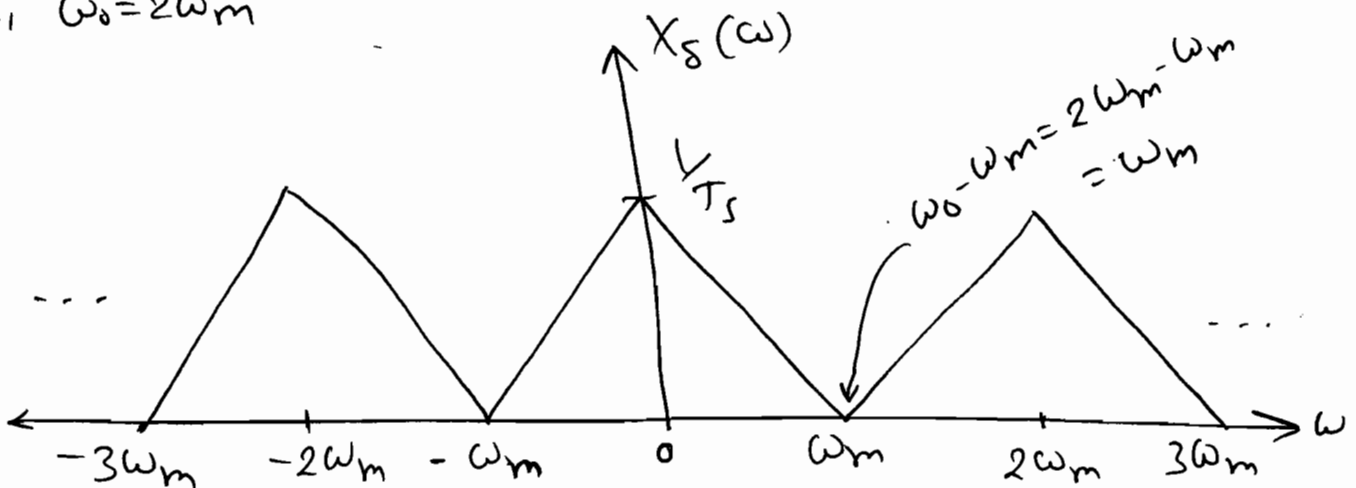
i.e. $\omega_0 - \omega_m > \omega_m.$

$$\Rightarrow \boxed{\omega_0 > 2\omega_m.}$$

Case-(ii):- $\omega_0 = 2\omega_m$, Critical Sampling.

$$\Rightarrow X_s(\omega) = \frac{1}{T_s} \sum_{n=-\infty}^{+\infty} X(\omega - 2\omega_m n).$$

let, $\omega_0 = 2\omega_m$



$$\Rightarrow \text{G.B.} = \omega_0 - 2\omega_m = 2\omega_m - 2\omega_m = 0.$$

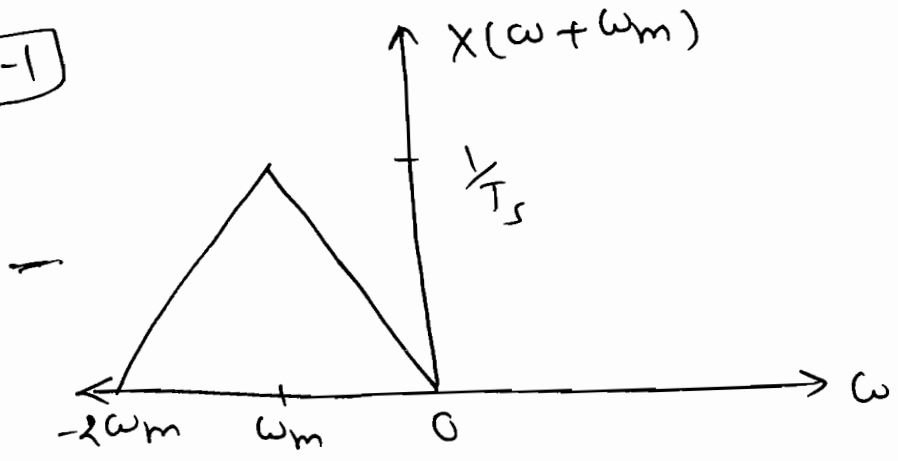
$$\boxed{\text{G.B.} = 0.}$$

⇒ Case-(iii) := $\omega_0 < 2\omega_m$ Under Sampling.

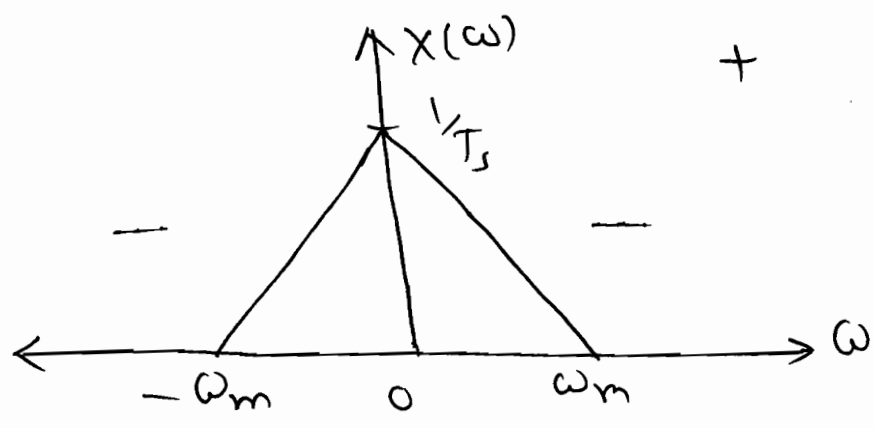
⇒ Let, $\omega_0 = \omega_m$.

$$\therefore X_s(\omega) = \frac{1}{T_s} \sum_{n=-\infty}^{\infty} X(\omega - n\omega_m).$$

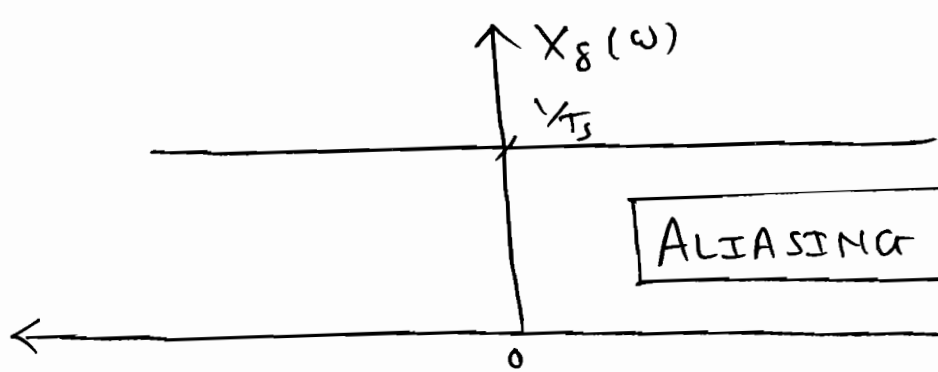
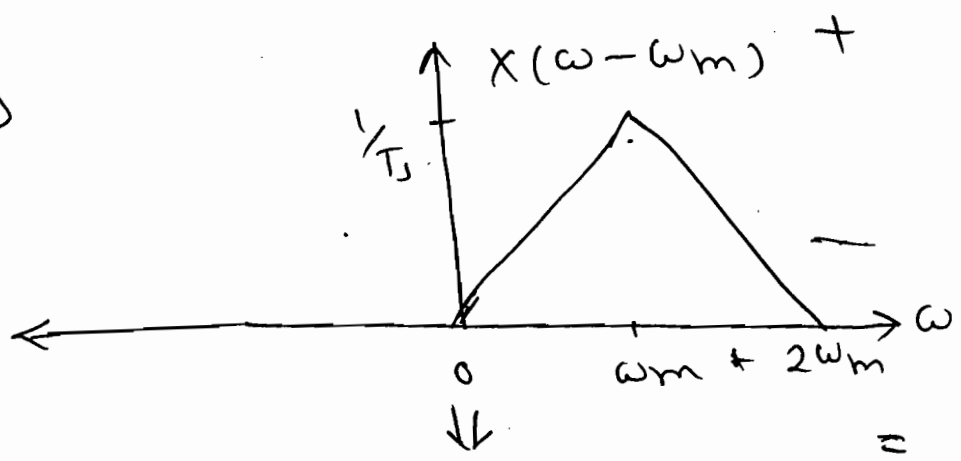
$n = -1$



$n = 0$



$n = 1$

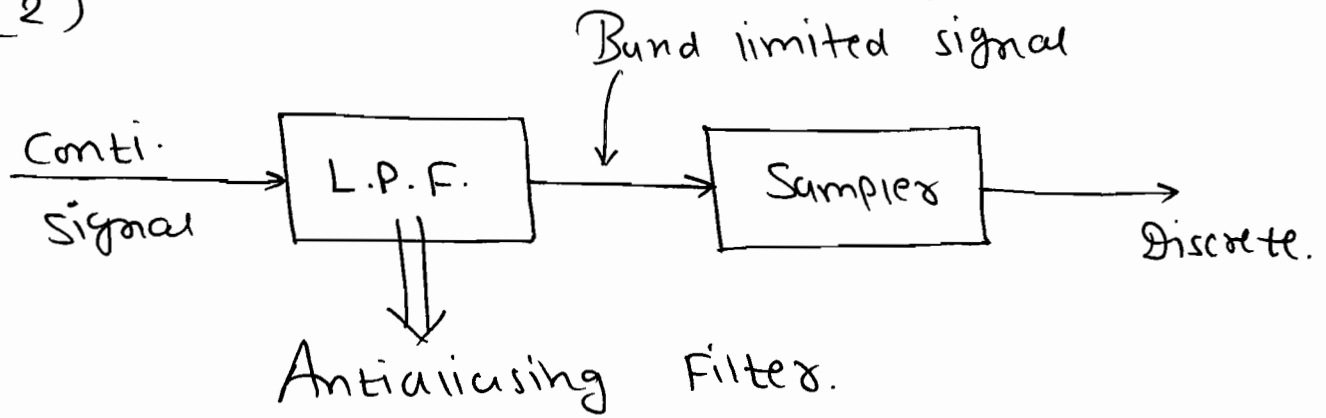


ALIASING (or) Spectral Folding.

⇒ To Avoid Aliasing

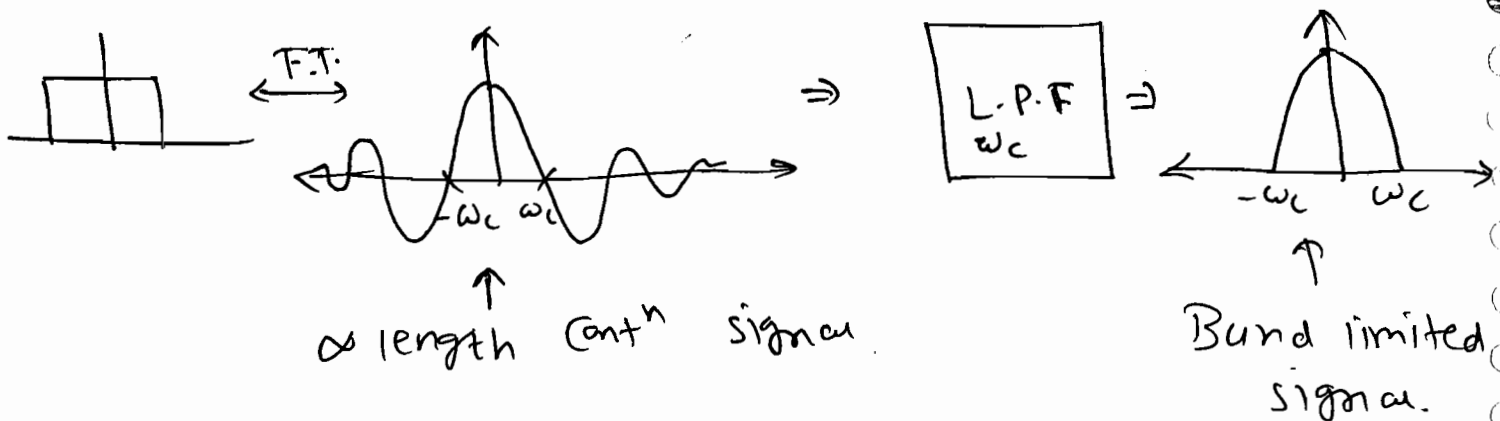
(1) $\omega_0 > 2\omega_m$

(2)



⇒ No Spectrum in Real time is Band-limited. So, to make ∞ length spectrum as Band limited, Continuous signal is applied to LPF before Sampling.

eg.



⇒ Nyquist Rate = minimum Sampling Rate
 $= 2\omega_m$
 $= 2$ (Height freq. of signal component).

P4.6-1 Find the Nyquist rate & Nyquist interval for each of the following signals!

$$(a) \quad x_1(t) = \left(\frac{\sin 200\pi t}{\pi t} \right)$$

Soln: Here, $\omega_m = 200\pi$.

$$\therefore \text{N.R.} = 2\omega_m = 2(200\pi) \text{ rad/sec.}$$

$$\Rightarrow \text{N.R.} = 200 \text{ Hz.} = f_s$$

$$T_s = \frac{1}{f_s} = \frac{1}{200} \text{ sec.}$$

$$\therefore \boxed{T_s = 5 \text{ ms}}$$

$$(b) \quad x_2(t) = \left(\frac{\sin 200\pi t}{\pi t} \right)^2$$

Soln:

$$x_2(t) = \frac{1 + \cos 400\pi t}{4(\pi t)^2}$$

So, $\omega_m = 400\pi$

$$\text{N.R.} \Rightarrow \omega_0 = 2\omega_m = 2(400\pi) \text{ rad/sec.}$$

$$f_s = 2f_m = 400 \text{ Hz.}$$

$$\Rightarrow T_s = \frac{1}{f_s} = \frac{1}{400} \Rightarrow \boxed{T_s = 2.5 \text{ ms}}$$

$$(c) \quad x_3(t) = 5 \cos 1000\pi t \cdot \cos 4000\pi t$$

Soln:

$$x_3(t) = \frac{5}{2} \cdot 2 \cos 1000\pi t \cdot \cos 4000\pi t$$

$$= \frac{5}{2} \cdot (\cos 4000\pi t + \cos 5000\pi t)$$

$$\Rightarrow \omega_m = 5000 \pi$$

$$\Rightarrow \text{N.R.} = \omega_0 = 2\omega_m = 2(5000\pi) \text{ rad/sec.}$$

$$f_s = 2f_m = 5 \text{ kHz.}$$

$$\Rightarrow T_s = \frac{1}{5k} = 0.2 \text{ msec.}$$

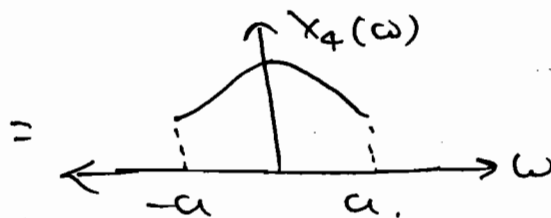
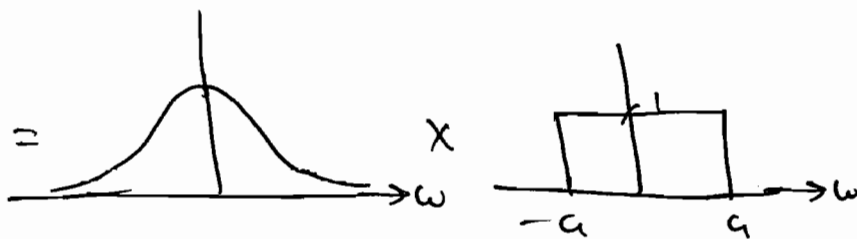
$$\boxed{T_s = 0.2 \text{ ms}}$$

$$(d) X_4(t) = e^{-\sigma t} u(t) * \frac{\sin at}{\pi t}$$

Soln:

$$X_4(\omega) = \frac{1}{\sigma + j\omega} \times \text{[Rectangular Pulse]}$$

\downarrow F.T \downarrow F.T



$$\Rightarrow \omega_m = a.$$

$$\text{N.R.} \Rightarrow \omega_0 = 2\omega_m = 2a. \text{ rad/sec.}$$

$$f_s = 2f_m = 2 \times \frac{\omega_m}{2\pi} = \frac{a}{\pi} \text{ Hz.}$$

$$\Rightarrow \boxed{T_s = \frac{\pi}{a} \text{ sec}}$$

$$(e) X_5(t) = \text{sinc}(100t) + 3 \text{sinc}^2(60t).$$

Sol^m: $x_5(t) = \frac{\sin(100\pi t)}{100\pi} + 3 \left(\frac{\sin 60\pi t}{60\pi} \right)^2$

$$x_5(t) = \frac{\sin(100\pi t)}{100\pi} + 3 \left[\frac{1 - \cos 120\pi t}{(2)^2 \times (60\pi)^2} \right]$$

$\Rightarrow \omega_m = 120\pi$

N.R. $\Rightarrow \omega_0 = 2\omega_m = 2(120\pi)$ rad/sec.

$f_s = 2f_m = 120$ Hz.

$\Rightarrow T_s = \frac{1}{120}$ sec.

P 4.6.2. Let $x(t)$ be a signal with Nyquist rate ω_0 . Determine the Nyquist rate for each of the following signals.

(a) $x(t) + x(t-1)$.

Sol^m: $x(t) \rightarrow$ B.W. = ω_m .
 & N.R. = ω_0 .

i.e. $\omega_0 = 2\omega_m$

$X(\omega) + e^{-j\omega} X(\omega) \rightarrow$ N.R. = ω_0

Bw not change hence N.R. not change. i.e. ω_0 .

(b) $\frac{d}{dt} x(t)$.

Sol^m: \downarrow F.T. = $j\omega X(\omega)$.

\Rightarrow B.W. not change hence N.R. Same.

i.e. ω_0 .

(c) $x(3t)$.

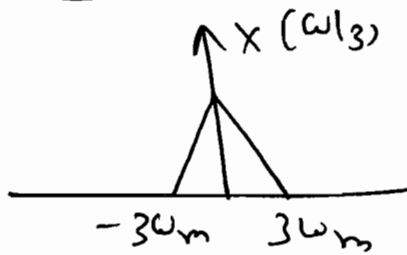
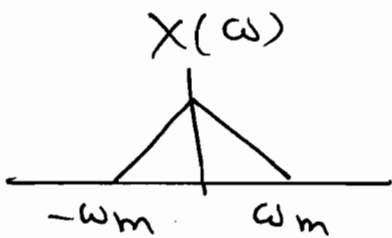

Solⁿ: $x(3t) \xleftrightarrow{\text{F.T.}} \frac{1}{|3|} \cdot X(\omega/3)$.

New B.W. $\Rightarrow \omega_m' = 3\omega_m$.

So. New N.R.

$\omega_0' = 2(3\omega_m)$
 $= 3(2\omega_m)$

$\omega_0' = 3\omega_0$

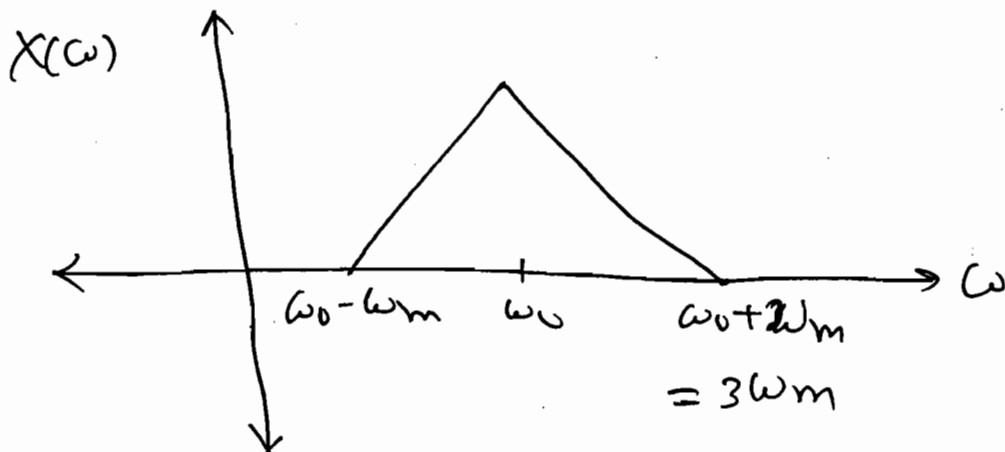


(d) $x(t) \cdot \cos(\omega_0 t)$.

Solⁿ: $x(t) \cdot \cos(\omega_0 t) \xleftrightarrow{\text{F.T.}} \pi \left[X(\omega_m - \omega_0) + X(\omega_m + \omega_0) \right]$.

eg. $\omega_0 = 2\omega_m$

~~$= \pi [X(\omega_m - 2\omega_m) + X(\omega_m + 2\omega_m)]$~~



So, New N.R. $\omega_0' = 2 (3\omega_m)$
 $= 3(2\omega_m)$

$$\omega_0' = 3\omega_0$$

P4.6.3 Two signals $x_1(t)$ & $x_2(t)$ are band limited to 2 kHz & 3 kHz respectively, find the Nyquist rate of the following signals.

Solⁿ: (a) $x_1(2t)$.

Solⁿ: $x_1(2t) \xleftrightarrow{F.T.} \frac{1}{2} X_1(\omega/2)$.

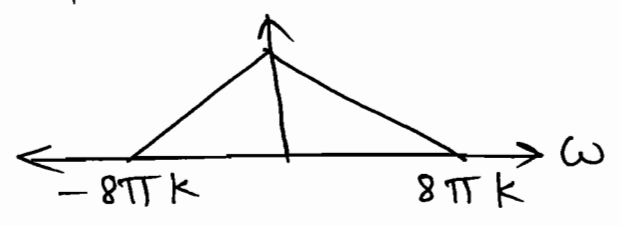

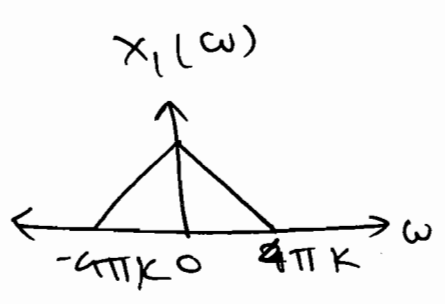
$x_1(t) \rightarrow$ B.W. = 2 kHz

So, N.R. of $x_1(t) \Rightarrow$ ~~2 kHz~~ = 4 kHz.

$$f_{s_1} = 2 f_{m_1} = 4 \text{ kHz.}$$

$$\omega_{0_1} = 2 \omega_{m_1} = 8\pi \text{ k rad/sec.}$$

$x_1(\omega/2)$



So, N.R. of $x_1(2t)$

$\Rightarrow \omega_{0_1}' = 2 \omega_{m_1}' = 2 (8\pi)K$
 $= 16\pi K \text{ rad/sec.}$

$$f_{s_1}' = 2 f_{m_1}'$$

$$f_{s_1}' = 8 \text{ kHz.}$$

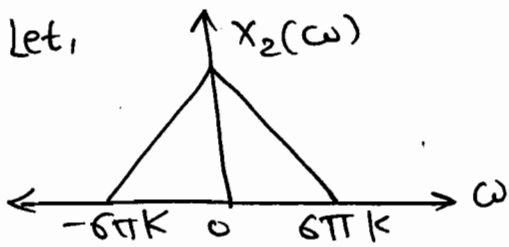
(b) $x_2(t-3)$.

Soln: B.W. of $x_2(t)$ is $\rightarrow 3$ kHz.
 $\Rightarrow f_{m_2} = 3$ kHz.

N.R. $f_{s_2} = 2 f_{m_2} = 6$ kHz

$\omega_{o_2} = 2 \omega_{m_2} = 6(2\pi) = 12\pi$ k rad/sec

Now, $x_2(t-3) \xleftrightarrow{\text{F.T.}} e^{-j3\omega} \cdot X_2(\omega)$.



B.W. is not change. Hence.
 N.R. is not change.

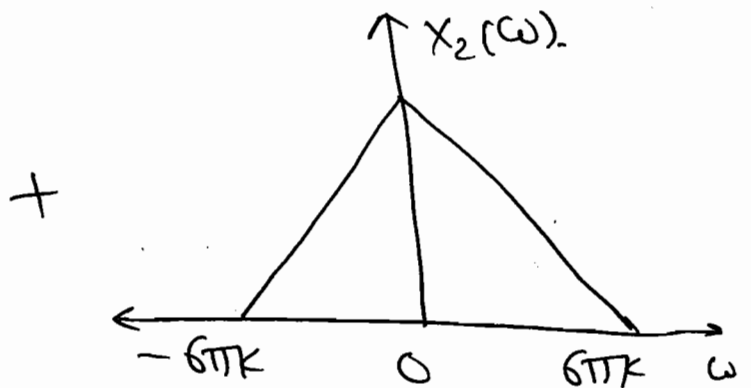
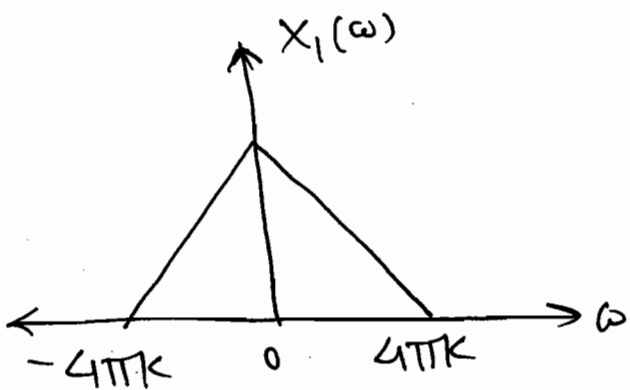
i.e. N.R. of $x_2(t-3)$

$\Rightarrow \omega'_{o_2} = 2 \omega_{m_2} = 12\pi$ k rad/sec.

$\& \boxed{f'_{s_2} = 2 f_m = 6 \text{ kHz}}$

(c) $x_1(t) + x_2(t)$.

Soln: $x_1(t) + x_2(t) \xleftrightarrow{\text{F.T.}} X_1(\omega) + X_2(\omega)$.



\Rightarrow Max. freq. after addition of $X_1(\omega)$
 $\& X_2(\omega)$ is 6π k rad/sec.

$$\Rightarrow \omega_m' = 6\pi k \text{ rad/sec.}$$

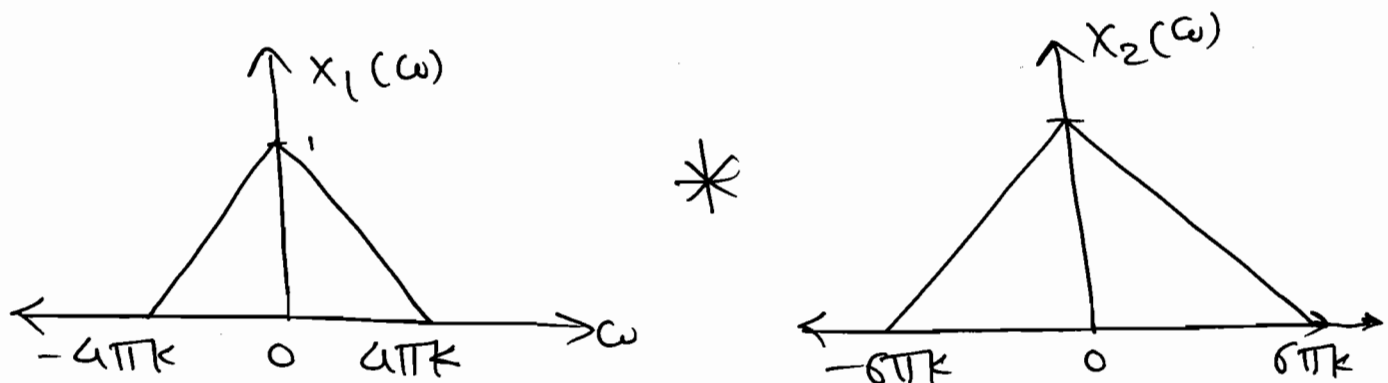
$$\text{N.R.} \Rightarrow \omega_0' = 2\omega_m' = 12\pi k \text{ rad/sec.}$$

$$\therefore \boxed{f_s' = 2f_m' = 6k \text{ Hz.}}$$

$$(d) x_1(t) \cdot x_2(t).$$

Solⁿ: Mul. $\xleftrightarrow{\text{F.T.}}$ Conv.

$$\therefore x_1(t) \cdot x_2(t) \xleftrightarrow{\text{F.T.}} X_1(\omega) * X_2(\omega).$$



\Rightarrow After convolution new upper & lower limit of the signal are.

Lower limit = { Sum of the lower limit of $x_1(\omega)$ & $x_2(\omega)$ }

Upper limit = { Sum of the upper limit of $x_1(\omega)$ & $x_2(\omega)$ }

$$\Rightarrow \text{So, Lower limit} = \{-10\pi k\}.$$

$$\text{Upper limit} = \{+10\pi k\}.$$

$$\text{So, } \omega_m' = 10\pi k \text{ rad/sec.}$$

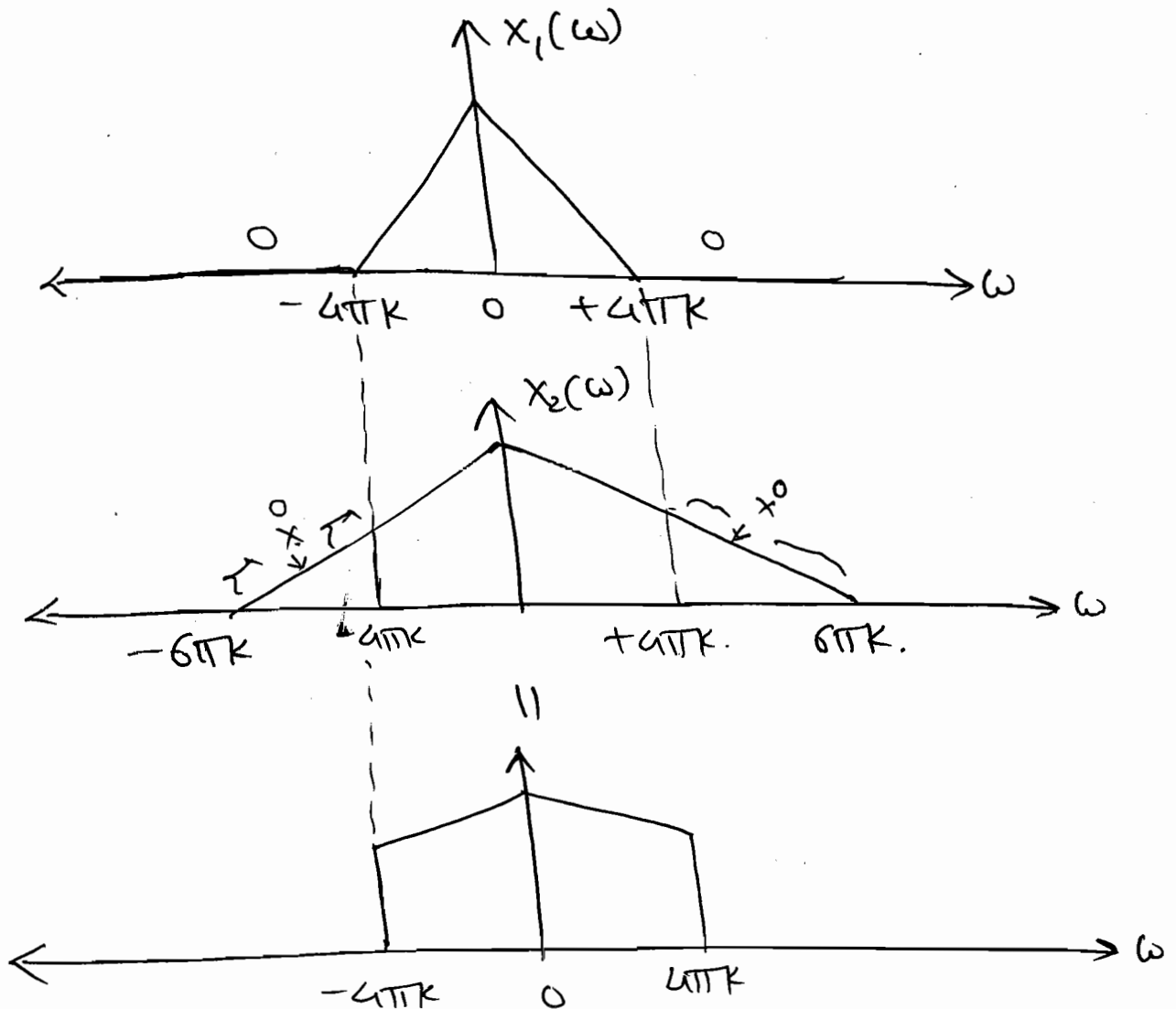
$$\text{N.R. } \omega_0' = 2\omega_m' = 2(10\pi k) = 20\pi k \text{ rad/sec.}$$

$$\Rightarrow \boxed{f_s' = 2 f_m = 10 \text{ KHz.}}$$

(e) $x_1(t) * x_2(t)$.

|| Soln: Conv. $\xleftrightarrow{\text{F.T.}}$ mult.

$\Rightarrow x_1(t) * x_2(t) \xleftrightarrow{\text{F.T.}} X_1(\omega) \cdot X_2(\omega)$.



\Rightarrow After Multiplication of two signals $X_1(\omega)$ & $X_2(\omega)$ new highest freq. is $4\pi K$ rad/sec.

So, N.R. $\Rightarrow \omega_0' = 2\omega_m' = 2(4\pi K) = 8\pi K$ rad/sec.

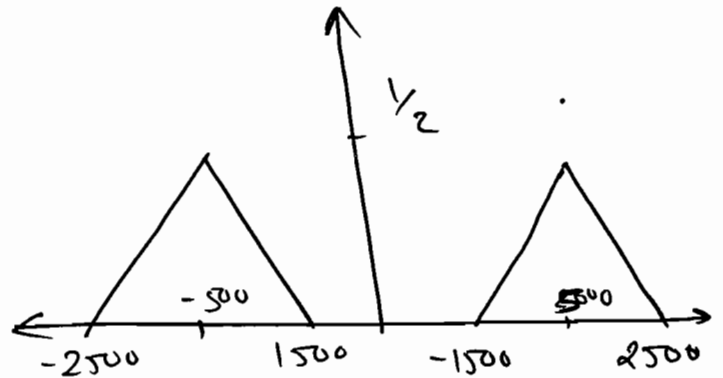
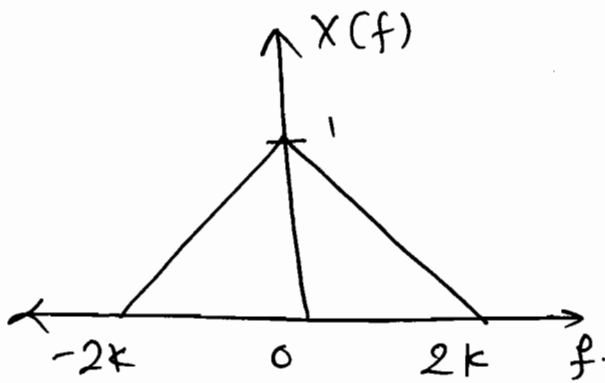
$$\boxed{f_s' = 2 f_m = 8 \text{ KHz.}}$$

(f) $x_1(t) \cdot \cos(1000\pi t) \rightarrow f_0 = 500 \text{ Hz}$.

Soln:

$= x_1(t) \cdot \cos(1000\pi t)$.

$\xleftrightarrow{\text{F.T.}} \frac{x_1(f - f_0) + x_1(f + f_0)}{2}$



\Rightarrow ~~Ques~~ $f_m' = 2500 \text{ Hz}$.

N.R. $\& f_m = f_0 = 500 \text{ Hz}$.

\therefore $f_0 = 5 \text{ kHz}$.

Note:-

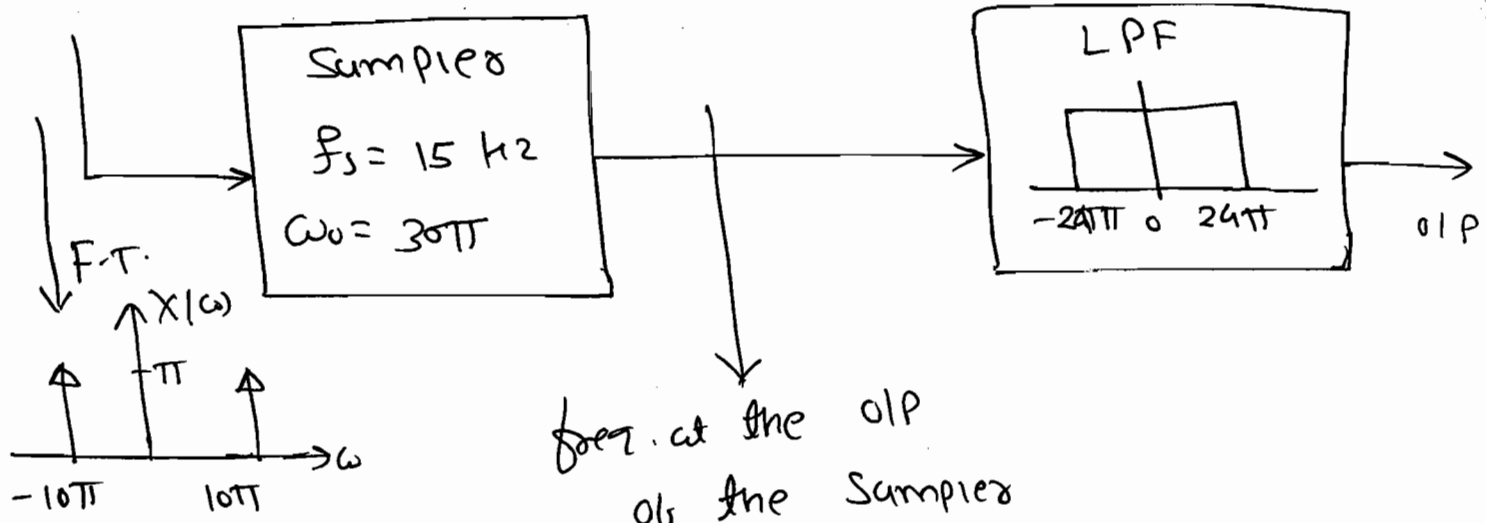
$x_1(t) \leftrightarrow X_1(\omega) \rightarrow \frac{\text{B.W.}}{\omega_{m1}}$
 $x_2(t) \leftrightarrow X_2(\omega) \rightarrow \omega_{m2}$.

- | | <u>New B.W.</u> |
|---|------------------------------------|
| ① $x_1(t) \pm x_2(t) \xleftrightarrow{\text{F.T.}} X_1(\omega) \pm X_2(\omega)$ | Max $(\omega_{m1}, \omega_{m2})$. |
| ② $x_1(t) \cdot x_2(t) \leftrightarrow X_1(\omega) * X_2(\omega)$ | $(\omega_{m1} + \omega_{m2})$ |
| ③ $x_1(t) * x_2(t) \leftrightarrow X_1(\omega) \cdot X_2(\omega)$ | Min $(\omega_{m1}, \omega_{m2})$. |

Q A signal $x(t) = \cos(10\pi t)$ is a sampled at 15 kHz and is passed through an ideal L.P.F with cut off freq 12 kHz. What freq. will appear at the o/p of the filter?

Soln:

$$x(t) = \cos(10\pi t)$$



$$(\omega - n\omega_0) \quad n \rightarrow -\infty \text{ to } +\infty$$

$$(\omega_m - n\omega_0) \Rightarrow (f_m - n f_s)$$

⇒ here. $\omega_m = 10\pi$
 $\omega_0 = 30\pi$

let, $n=0 \Rightarrow \omega = \pm 10\pi$ ← o/p

$n=1 \Rightarrow \omega = \omega_m - \omega_0$

$\omega = -20\pi$ ← o/p $\omega = -40\pi$ $\omega = 20\pi$ ← o/p

$n=-1 \Rightarrow \omega = \omega_m + \omega_0$ $\omega = 40\pi$

$n=2 \Rightarrow \omega = \omega_m - 2\omega_0$ $\omega = -50\pi$
 $\omega = -70\pi$

So, freq. at LPF i.e. at OIP $\Rightarrow \pm 10\pi, \pm 20\pi$.

P4.6.4. A signal represented by $x(t) = 5 \cos(400\pi t)$ is sampled at a rate of 300 Hz. The resulting samples are passed through an ideal LPF with cut-off freq. of 150 Hz. Which of the following will be contained in the OIP of LPF?

- (a) 100 Hz (b) 100 Hz, 150 Hz
(c) 50 Hz, 100 Hz (d) 20, 100, 150 Hz.

Solⁿ: $\omega_m = 400\pi \Rightarrow f_m = \pm 200 \text{ Hz}$.

$f_s = 300 \text{ Hz}$.

\Rightarrow Freq. at OIP of the sampler is,
 $f = f_m - n f_s, \quad n \rightarrow -\infty \text{ to } +\infty$.

$n=0, \quad f = f_m = \pm 200 \text{ Hz}$.

$n=1, \quad f = f_m - f_s = 100 \text{ Hz}, -500 \text{ Hz}$.

$n=-1, \quad f = f_m + f_s = 500 \text{ Hz}, 100 \text{ Hz}$.

$n=2, \quad f = f_m - 2f_s = 800 \text{ Hz}, -400 \text{ Hz}$.

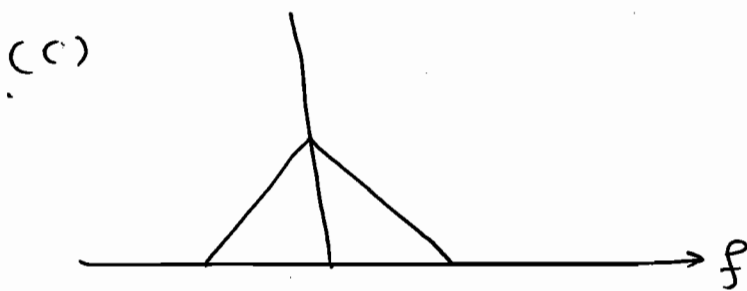
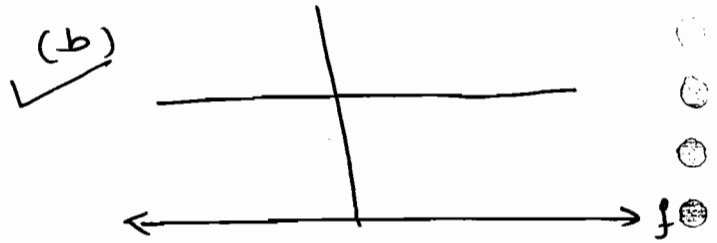
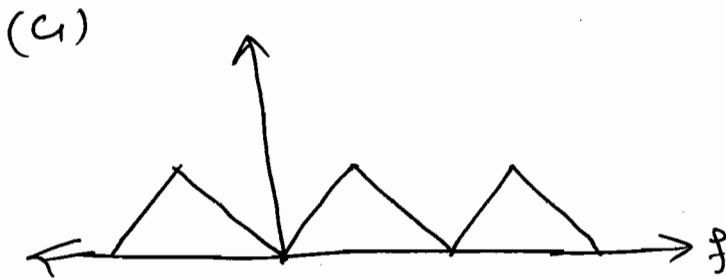
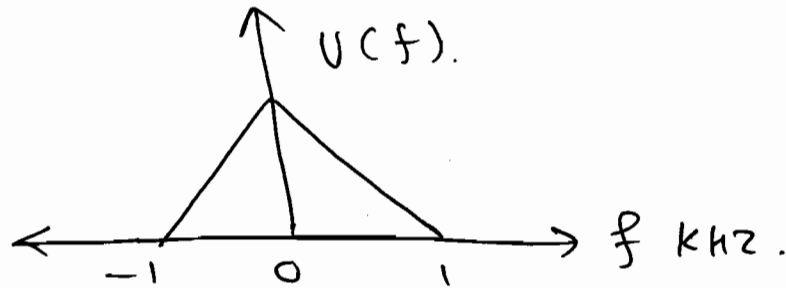
\Rightarrow Cut-off freq. of LPF is 150 Hz.

So, OIP freq. at LPF is in betⁿ -150 to 150.

i.e. $\pm 100 \text{ Hz}$

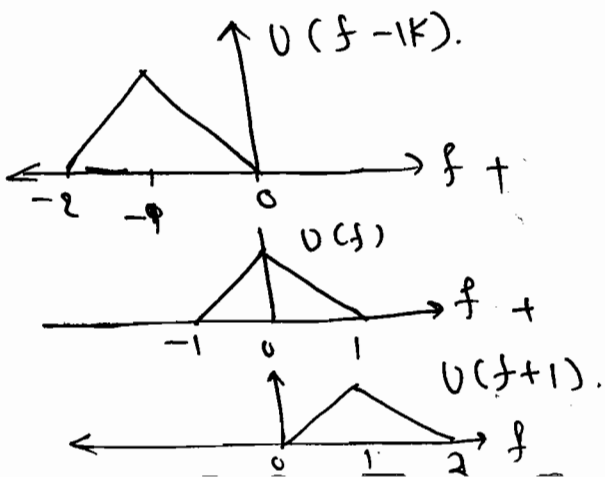
So, ans - **(a) 100 Hz.**

P4.6.5 The freq. Spectrum of a signal is shown in figure it this signal is ideally sampled at intervals of 1 msec, then the freq. Spectrum of the sampled signal will be

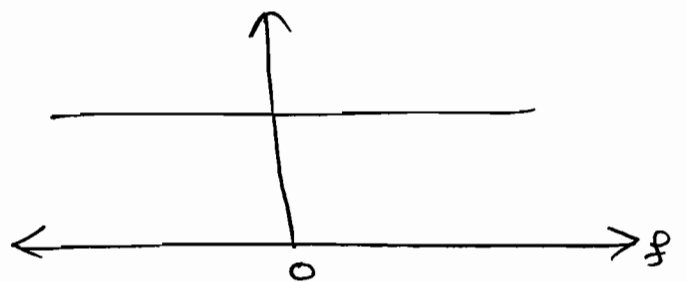


Soln:
 $f_m = 1 \text{ kHz.}$
 $f_s = 1 \text{ msec.}$

$\therefore f_s < 2 f_m$, So, under sampling.

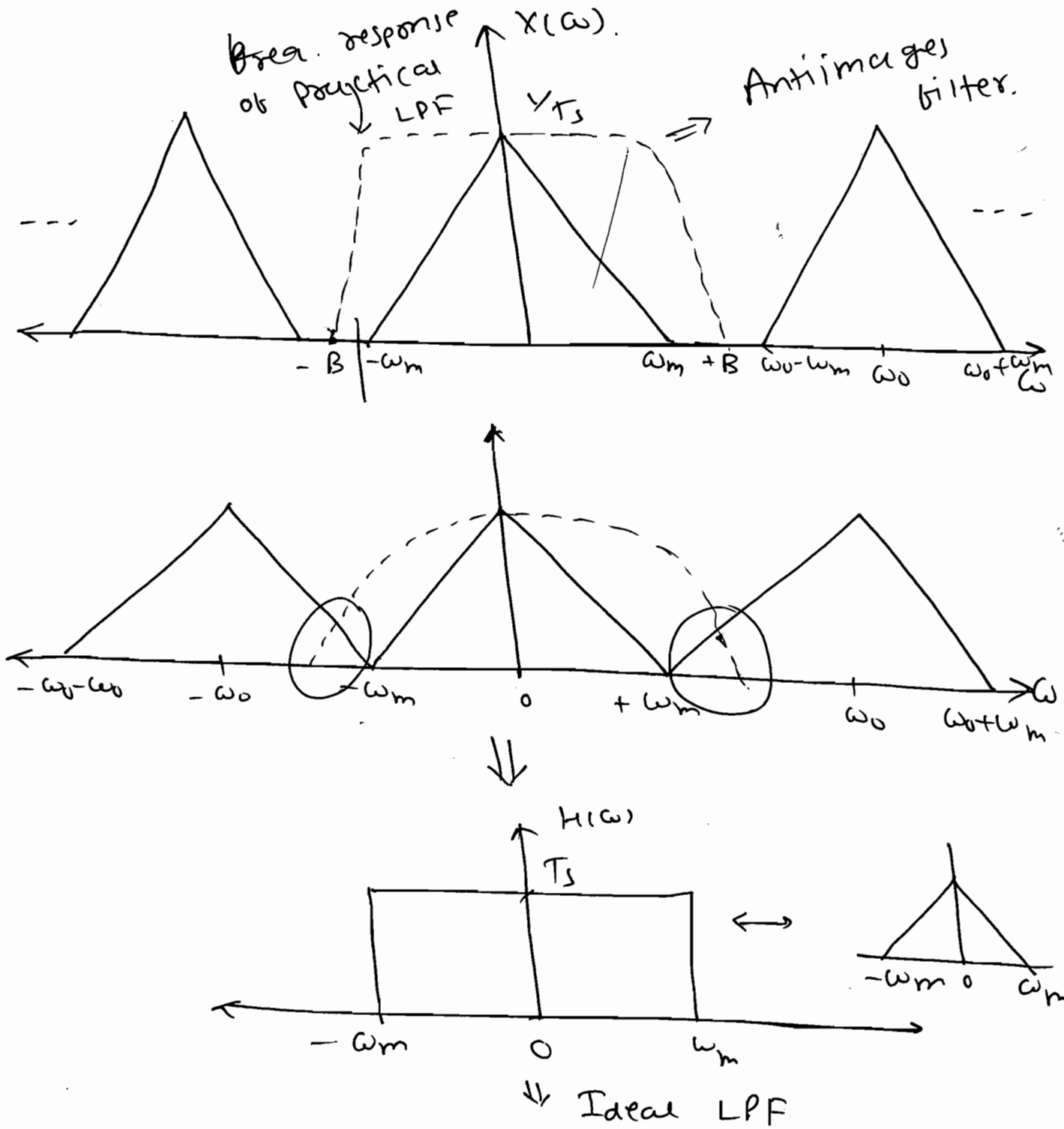


\Rightarrow



* Signal Reconstruction:-

⇒ The process of recovering original continuous spectrum from the sampled spectrum is signal reconstruction.



⇒ $\omega_m < B < \omega_0 - \omega_m$ ✓

P 4.6.7 A signal $x(t) = 6 \cos 10\pi t$ is sampled at a rate of 14 kHz to recover the original signal, cut-off freq. of the LPF should be _____.

- (a) $5 < f_c < 9$ (b) 9 (c) 10 (d) 14.

✓
Solⁿ: $\omega_m = 10\pi \Rightarrow f_m = 5 \text{ kHz}, f_s = 14 \text{ kHz}$

$\therefore f_m < B < f_s - f_m$

$\therefore 5 < B < 14 - 5$

$\Rightarrow 5 < B < 9$

P 4.6.6 A signal with 2 freq. components at 6 kHz and 12 kHz is sampled at the rate of 16 kHz and then passed through a LPF having a cut-off freq. of 16 kHz. The output signal of the filter is _____.

(a) is an undistorted version of original signal.

(b) contains 6 kHz & spurious components of 4 kHz.

(c) contains only 6 kHz components.

(d) contains both components of original signal and 2 spurious components of

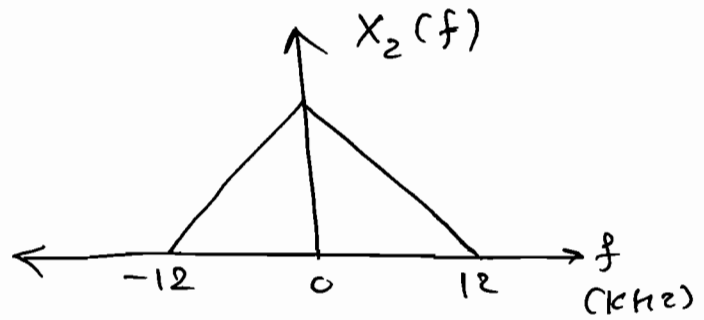
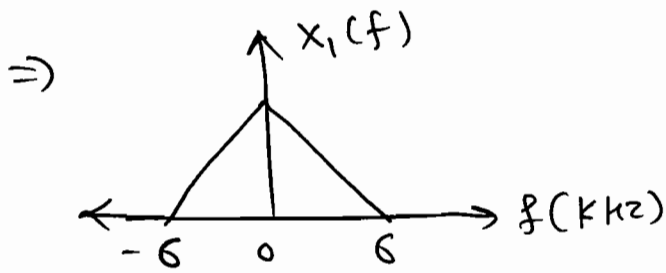
of 4 kHz & 10 kHz.

Solⁿ:

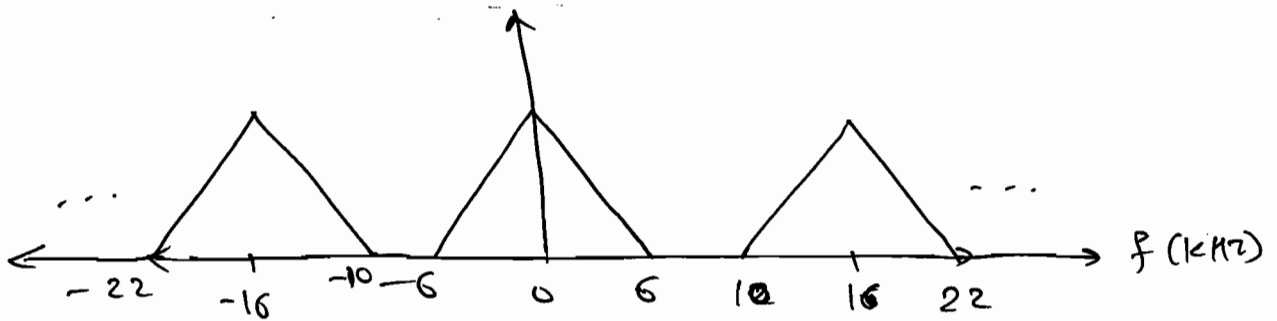
$$f_{m1} = 6 \text{ kHz},$$

$$f_{m2} = 12 \text{ kHz}.$$

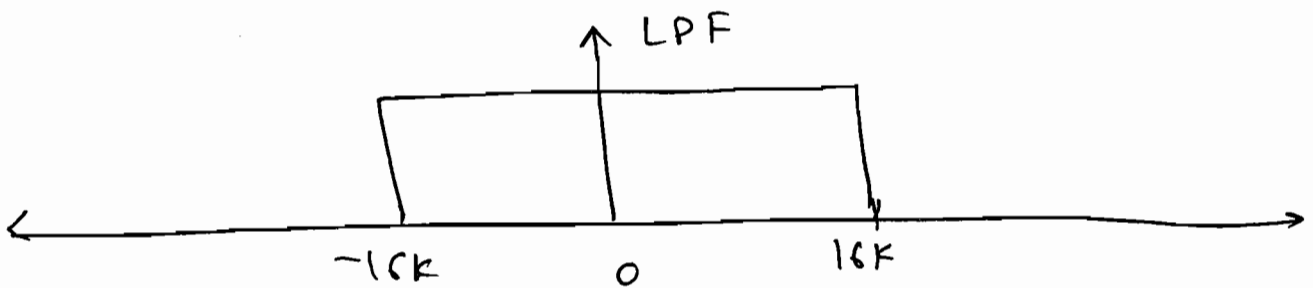
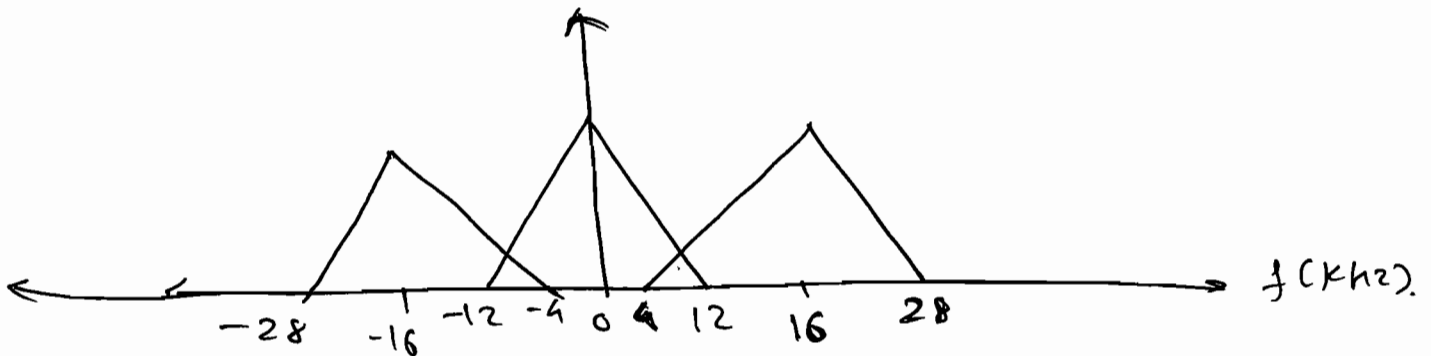
$$f_s = 16 \text{ kHz}.$$



① ($f_s = 16 \text{ k}$) > ($2 f_{m1} = 12 \text{ kHz}$) ⇒ over sampling

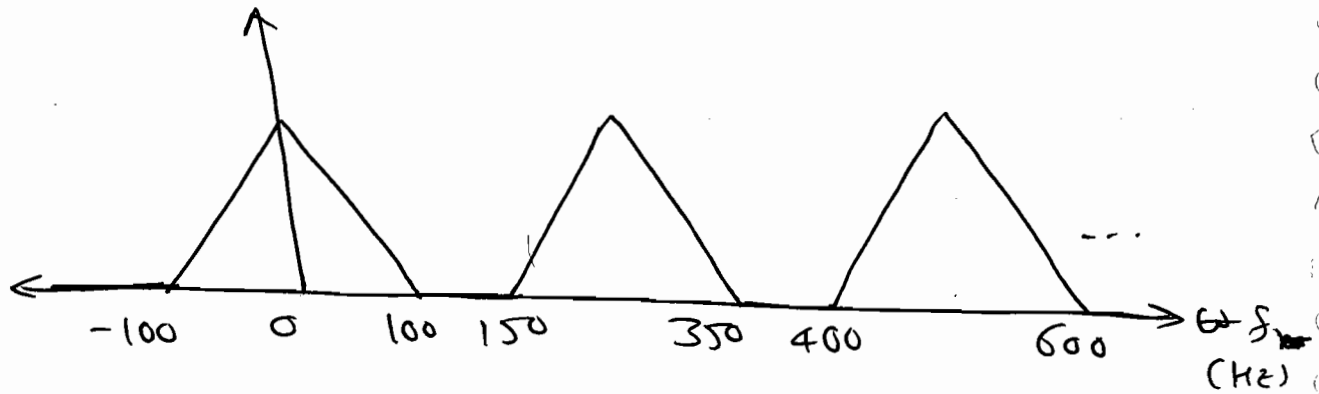


② ($f_s = 16 \text{ k}$) < ($2 f_{m2} = 24 \text{ kHz}$) ⇒ under sampling



⇒ Ans-(b) contains 6 kHz & spurious components of 4 kHz.

P 4.6.8 The Spectrum of a bandlimited signal after sampling is shown in figure. The value of sampling interval is _____.



Soln:

$$f_m = 100 \text{ Hz.}$$

$$\therefore f_s - f_m = 150 \text{ Hz.}$$

$$\therefore f_s = 150 + 100 = 250 \text{ Hz.}$$

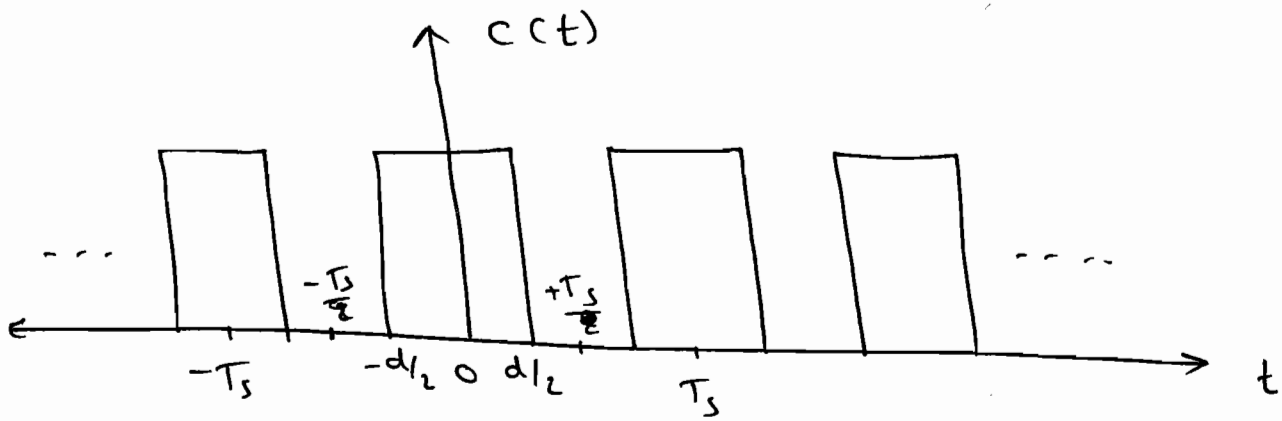
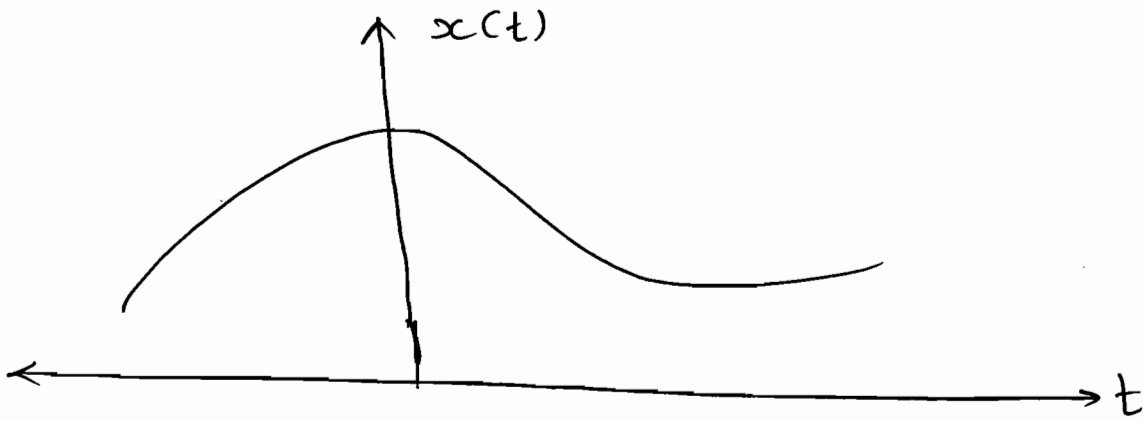
$$\therefore f_s = 250 \text{ Hz.}$$

$$\Rightarrow \text{S.I. } T_s = \frac{1}{f_s} = \frac{1}{250} = 4 \text{ m sec.}$$

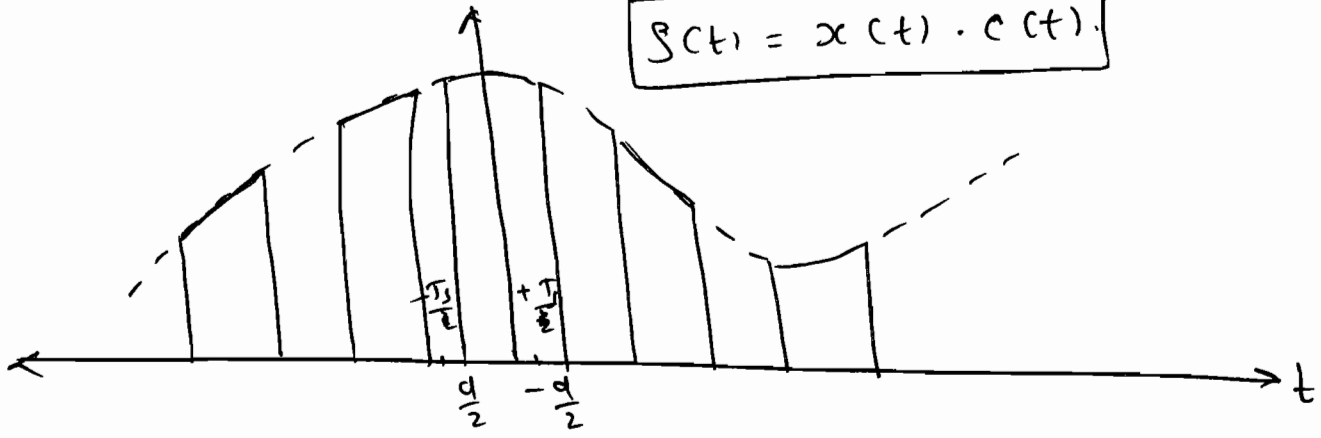
$$\boxed{T_s = 4 \text{ msec}}$$

Note: The freq. at the o/p of sampler is $\omega - n\omega_0$ in ideal sampling. We can take the value of n from $-\infty$ to $+\infty$, but in natural sampling n value is decided by C_n .

* ② Natural Sampling:-



$$s(t) = x(t) \cdot c(t)$$



$$s(t) = x(t) \sum_{n=-\infty}^{+\infty} c_n e^{jn\omega_0 t}$$

↓ F.T.

$$S(\omega) = \sum_{n=-\infty}^{\infty} C_n X(\omega - n\omega_0)$$

$$C_n = \frac{1}{T} \int_{-d/2}^{d/2} c(t) e^{-jn\omega_0 t} dt$$

$$\Rightarrow T = T_s$$

$$\therefore \frac{C_n}{T_s} =$$

$$= \frac{1}{2T_s} \times \left[\frac{e^{-jn\omega_0 t} + d_1}{-jn\omega_0} \right]_{-d_2}^{+d_2}$$

$$= \frac{1}{T_s} \times \left[\frac{e^{-jn\omega_0 \frac{d}{2}} - e^{jn\omega_0 \frac{d}{2}}}{-jn\omega_0} \right]$$

$$C_n = \frac{\sin\left(\frac{n\omega_0 d}{2}\right)}{n\omega_0 T_s}$$

P 4.6.9 Let $x(t) = 2\cos(800\pi t) + \cos(1400\pi t)$

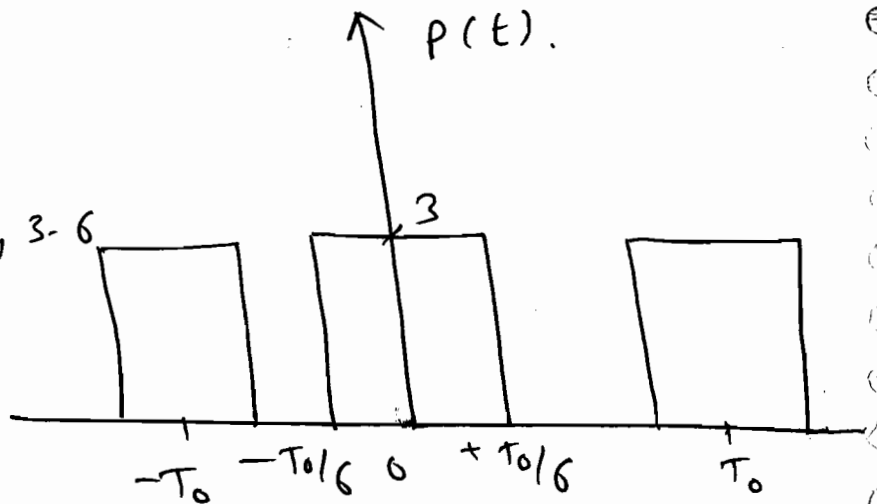
and $x(t)$ is sampled with the rectangular pulse train as shown in fig. The only spectral components (in kHz) in the sampled signal in the freq. range 2.5 kHz to 3.5 kHz.

(a) 2.7, 3.4

(b) 3.3, 3.8

(c) 2.6, 2.7, 3.3, 3.4, 3.6

(d) 2.7, 3.3



Soln:

$$C_n = \frac{1}{T_0} \int_{-T_0/6}^{T_0/6} (3) \cdot e^{-jn\omega_0 t} \cdot dt$$

$$\omega_0 = \frac{2\pi}{T_0}$$

$$\omega_0 = 2\pi \text{ kHz}$$

$$f_s = \frac{1}{2} \text{ kHz}$$

$$C_n = \frac{\sin\left(\frac{n\omega_0 d}{2}\right)}{n\omega_0 T_s}$$

$$= \frac{\sin\left(\frac{n \times \frac{2\pi}{2 \times 10^{-3}} \times \frac{10^{-3}}{6}\right)}{n \times \frac{2\pi}{2 \times 10^{-3}} \times T_s}$$

$$C_n = \frac{\sin\left(\frac{2\pi}{3}\right)}{n\pi}$$

$$C_n = 0 \text{ for } n = 3, 6, 9, \dots$$

$$C_n \neq 0 \text{ for } n = 0, 1, 2, 4, 5, \dots$$

\Rightarrow freq. at the o/p of natural sampler.

$$\left. \begin{array}{l} f_{m1} \pm n f_s \\ f_{m2} \pm n f_s \end{array} \right\} n = 0, 1, 2, 4, 5, 7, 8, \dots$$

$$\Rightarrow n=0 \Rightarrow \begin{array}{l} f_{m1} = f = 0.4 \text{ k} \\ f_{m2} = f = 0.7 \text{ k} \end{array}$$

$$\Rightarrow n=1 \Rightarrow \begin{array}{l} f_1 = f_{m1} + f_s = 0.4 + 1 \text{ k} = 1.4 \text{ kHz} \\ f_2 = f_{m2} + f_s = 0.7 + 1 \text{ k} = 1.7 \text{ kHz} \end{array}$$

$$\Rightarrow n=2 \Rightarrow \begin{array}{l} f_1 = f_{m1} + 2f_s = 0.4 + 2 \text{ k} = 2.4 \text{ kHz} \\ f_2 = f_{m2} + 2f_s = 0.7 + 2 \text{ k} = 2.7 \text{ kHz} \end{array}$$

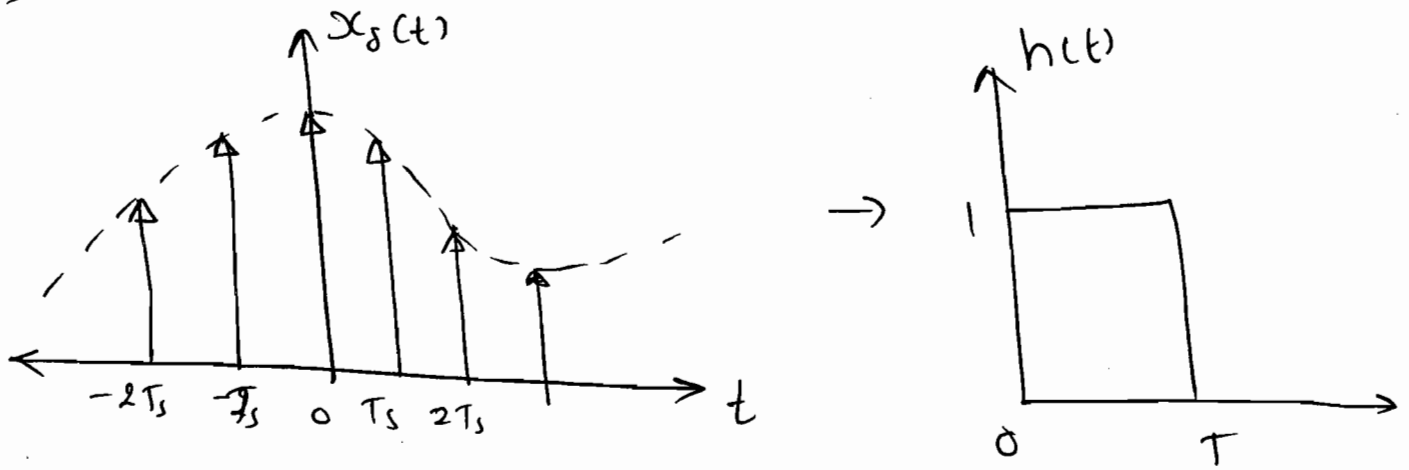
$$\Rightarrow n=4 \Rightarrow \begin{array}{l} f_1 = f_{m1} + 4f_s = 0.4 + 4 \text{ k} = 3.6 \text{ k} \\ f_2 = f_{m2} + 4f_s = 0.7 + 4 \text{ k} = 3.3 \text{ k} \end{array}$$

$$\Rightarrow n=1 \Rightarrow \begin{array}{l} f_1 = f_{m1} - f_s \\ f_2 = f_{m2} - f_s \end{array}$$

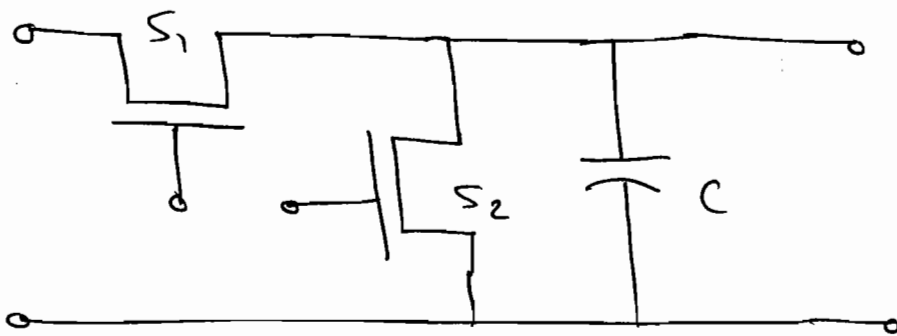
So, Ans: (d) 2.7, 3.3.

③ Flat - Top Sampling:

⇒



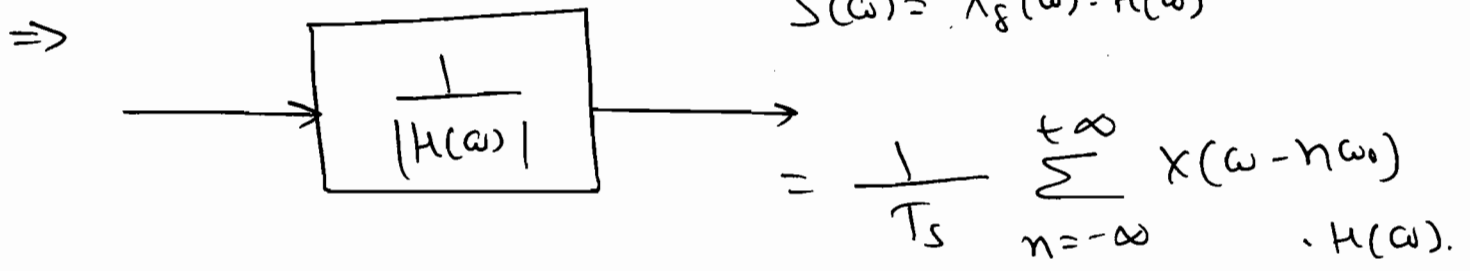
⇒



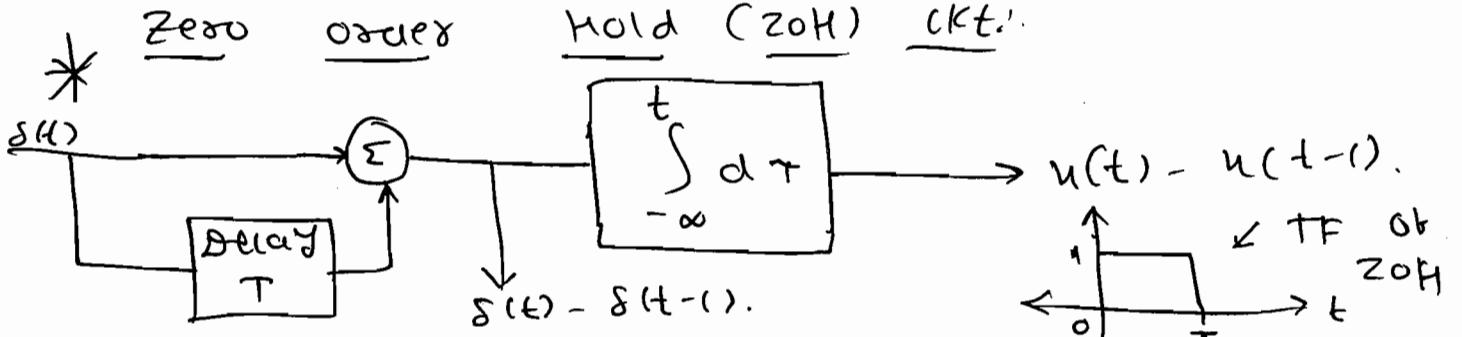
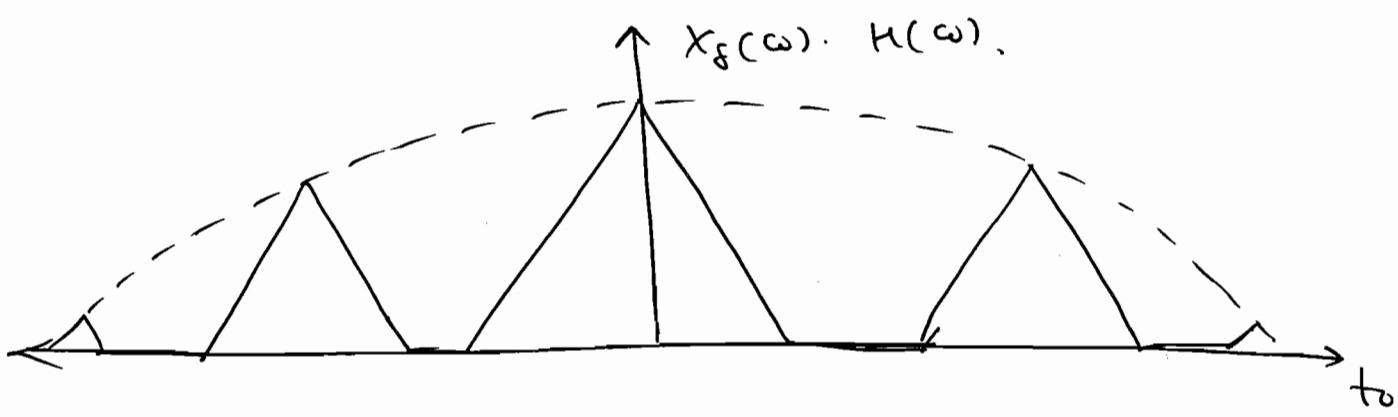
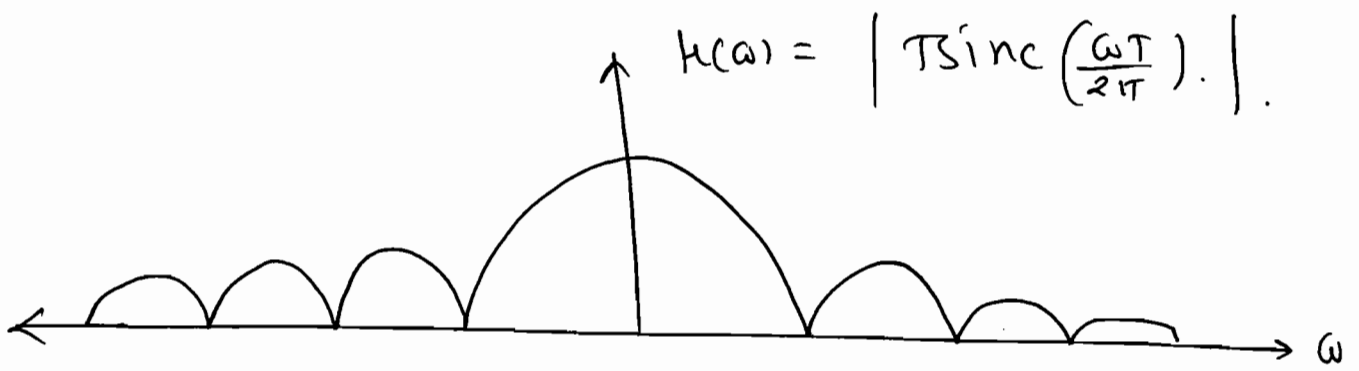
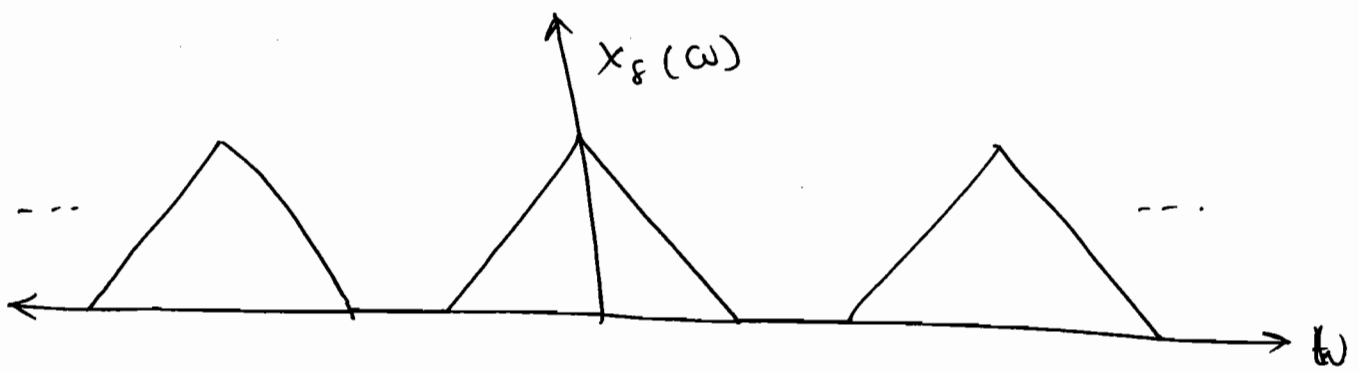
Sample and hold ckt.

⇒ because of maintaining constant amplitude level we introduce amplitude distortion of $T \text{sinc} \left(\frac{\omega T}{2\pi} \right)$ & phase delay of $-\frac{\omega T}{2}$, which is known as Aperture effect.

⇒ To Cancel this, Flat-Top Sampled sig. is applied to an equalizer $\frac{1}{|h(\omega)|}$.



Equalizer $H(\omega) = T \text{sinc} \left(\frac{\omega T}{2\pi} \right) \cdot e^{-j\omega(T/2)}$.



Ch-5 - Laplace Transform:

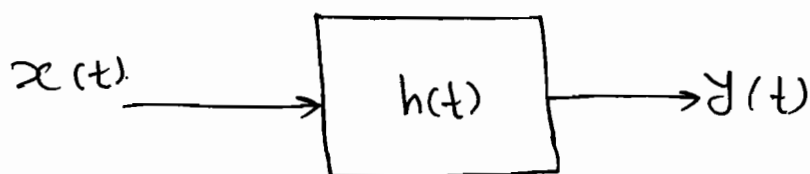
Purpose: All differential and integral equations are converted to simple algebraic eqⁿ.

⇒ L-T expresses signals as linear combination of complex exponentials, which are eigen functions of DE which describe continuous-time LTI systems.

⇒ The primary role of the L-T in engineering is the transient & stability analysis of causal LTI systems.

⇒ In addition to its simplicity, many design techniques in circuits, filters & control systems have been developed in L-T domain.

⇒ Generalization of F.T. is Laplace Trans.



⇒ Let, Input $x(t) = e^{st}$ ($s = \sigma + j\omega$)
↓
Complex Variable.

$$\Rightarrow \text{O/P is } y(t) = e^{st} \cdot H(s).$$

$$\rightarrow y(t) = x(t) * h(t).$$

$$= \int_{-\infty}^{+\infty} x(t-\tau) \cdot h(\tau) d\tau.$$

$$= \int_{-\infty}^{+\infty} e^{s(t-\tau)} \cdot h(\tau) \cdot d\tau.$$

$$y(t) = e^{st} \cdot \int_{-\infty}^{+\infty} e^{-s\tau} \cdot h(\tau) \cdot d\tau.$$

$$\therefore \boxed{y(t) = e^{st} \cdot H(s)}$$

\Rightarrow L.T. of general signal $x(t)$

$$\boxed{L[x(t)] = \int_{-\infty}^{+\infty} x(t) \cdot e^{-st} dt = X(s)}$$

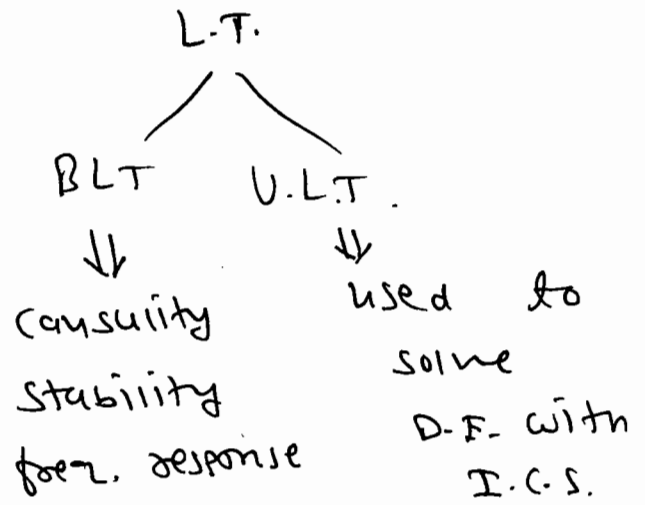
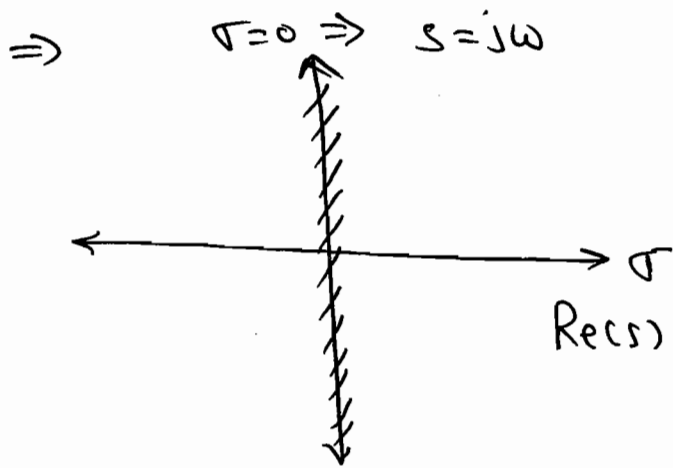
$$s = \sigma + j\omega.$$

$$\Rightarrow X(\sigma + j\omega) = \int_{-\infty}^{+\infty} x(t) \cdot e^{-(\sigma + j\omega)t} dt.$$

$$= \int_{-\infty}^{+\infty} [x(t) \cdot e^{-\sigma t}] \cdot e^{-j\omega t} dt$$

$$\therefore \boxed{L[x(t)] = F\{x(t) \cdot e^{-\sigma t}\}}$$

$\Rightarrow e^{-\sigma t}$ may be decaying (or) growing depending on whether ' σ ' is +ve (or) -ve.



* Region of Convergence of L.T. : (Roc)

$X(s) < \infty$.

$\Rightarrow \int_{-\infty}^{+\infty} |x(t) \cdot e^{-\sigma t}| dt < \infty$.

Necessary.

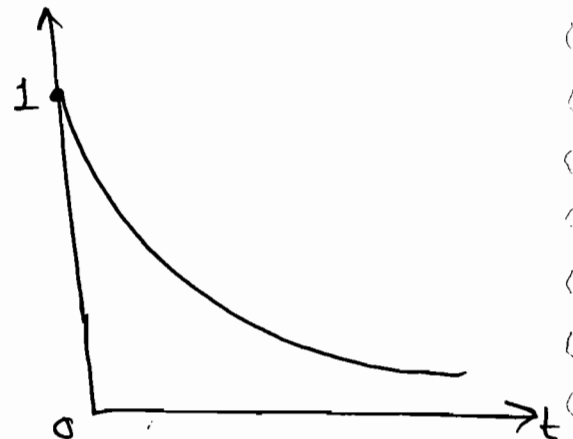
* L.T. of Standard Signals:

① $x_1(t) = e^{-at} u(t) ; \text{Re}\{a\} > 0$.

$\Rightarrow X(s) = \int_{-\infty}^{\infty} x(t) \cdot e^{-st} \cdot dt$

$= \int_0^{\infty} e^{-at} \cdot e^{-st} \cdot dt$

$= \int_0^{\infty} e^{-(s+a)t} \cdot dt$



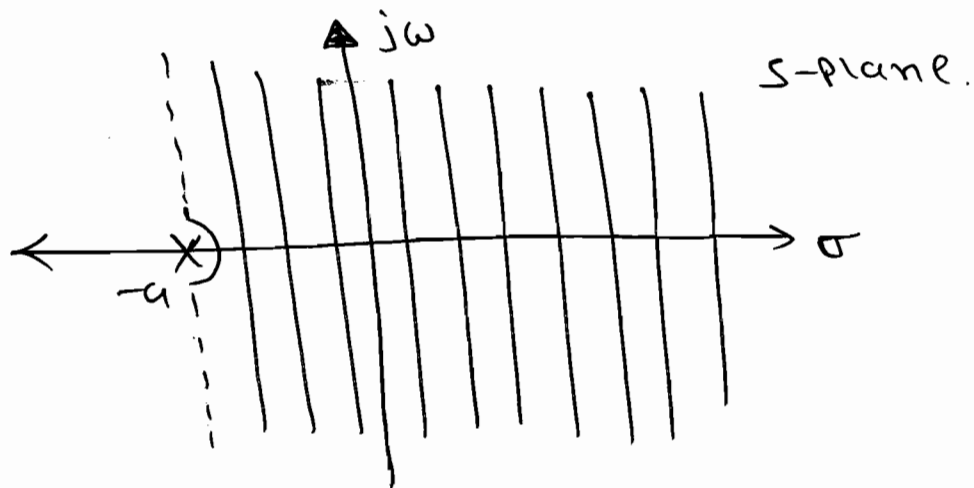
$$= \left[\frac{e^{-cs+at}}{-(s+a)} \right]_0^{\infty}$$

$$= \frac{1}{\infty} + \frac{1}{s+a}$$

$$= \frac{1}{s+a} ; \quad \sigma + a > 0$$

$$\underbrace{\sigma > \operatorname{Re}\{-a\}}_{\text{R.o.c.}}$$

$$\rightarrow e^{-at} u(t) \longleftrightarrow \frac{1}{s+a} ; \quad \operatorname{Re}(s) > -a.$$



$$\textcircled{1} \quad x_1(t) = e^{-at} u(t).$$

\Rightarrow R.o.c. of LT consist of lines lie to $j\omega$ -axis.

\Rightarrow Roc do not contain any Pole.

\Rightarrow For Stability in Laplace domain Roc must include Imaginary axis.

$$\textcircled{2} \quad x_2(t) = -e^{-at} u(-t) ; \quad \operatorname{Re}\{a\} > 0.$$

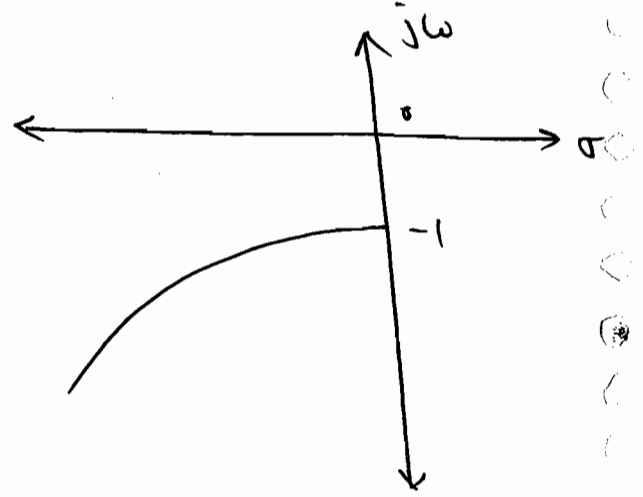
$$\Rightarrow x_2(t) = 0 ; \quad t > 0$$

$$= -e^{-at} ; \quad t < 0.$$

$$\Rightarrow X_2(s) = \int_{-\infty}^0 -e^{-at} \cdot e^{-jt} \cdot dt$$

$$= \int_{-\infty}^0 -e^{-(s+a)t} \cdot dt$$

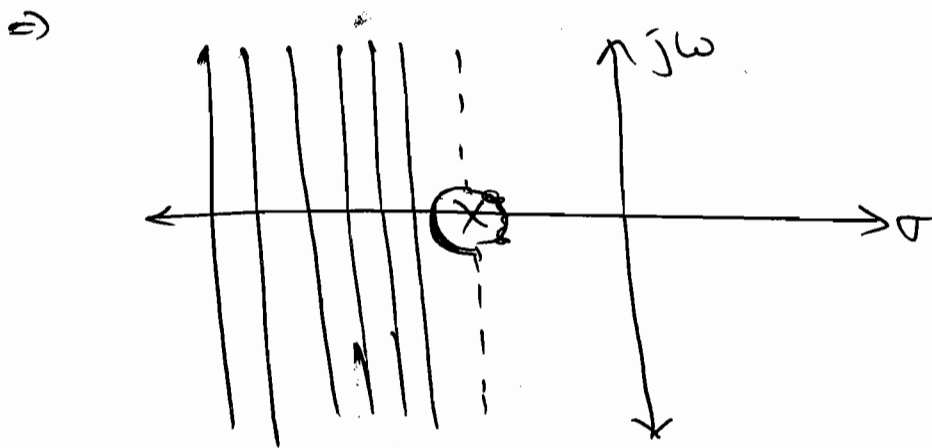
$$= \left[\frac{e^{-(s+a)t}}{-(s+a)} \right]_{-\infty}^0 = \left[\frac{e^{-(\sigma+aj\omega)t}}{-(\sigma+aj\omega)} \right]_{-\infty}^0$$



$$X_2(s) = \frac{1}{s+a} ; \sigma+a < 0, \text{ Re}(s) < -a$$

$$\text{Re}(\sigma+aj\omega) < -a$$

$$\Rightarrow \boxed{\sigma < -a}$$



$$\Rightarrow e^{-at} u(t) \longleftrightarrow \frac{1}{s+a} ; \sigma > \text{Re}\{-a\}$$

$$-e^{-at} u(-t) \longleftrightarrow \frac{1}{s+a} ; \sigma < \text{Re}\{-a\}$$

Note: Solution of Laplace transform is unique only when the Roc is given.

$$\textcircled{3} x_3(t) = e^{at} u(t) ; \operatorname{Re}\{a\} > 0.$$

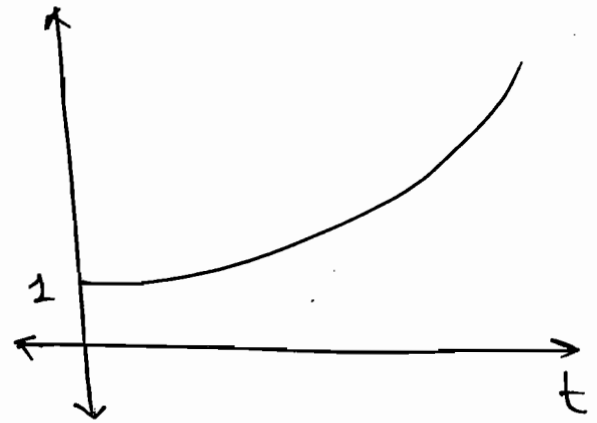
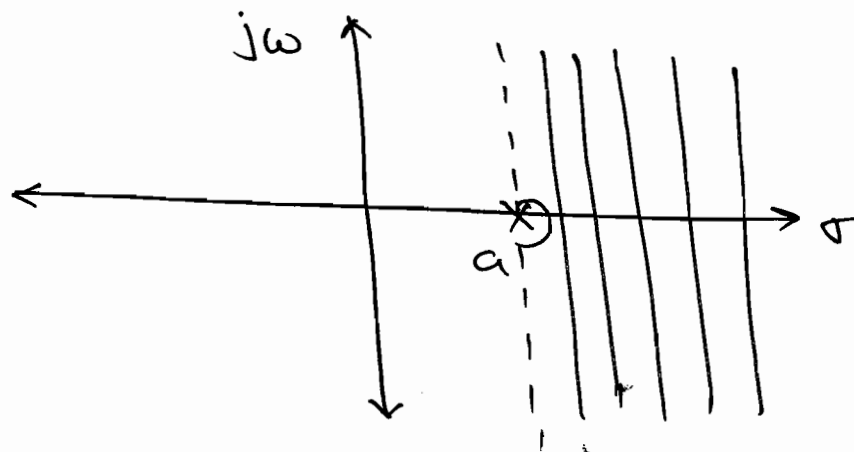
$$\Rightarrow X_3(s) = \int_0^{\infty} e^{at} \cdot e^{-st} \cdot dt.$$

$$= \int_0^{\infty} e^{-(s-a)t} \cdot dt.$$

$$= \left[\frac{e^{-(s-a)t}}{-(s-a)} \right]_0^{\infty}$$

$$= \left[\frac{e^{-(\sigma-a+j\omega)t}}{-(s-a)} \right]_0^{\infty}.$$

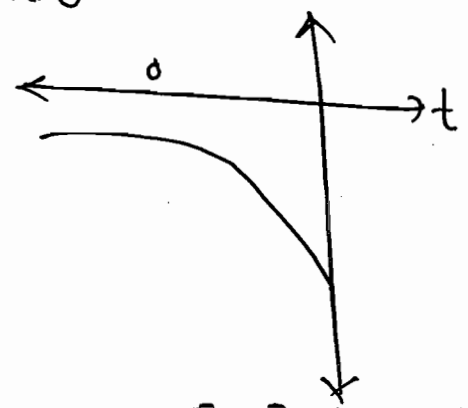
$$\therefore X_3(s) = \frac{1}{(s-a)} ; \quad \begin{array}{l} \sigma - a > 0 \\ \sigma > \operatorname{Re}\{a\}. \end{array}$$



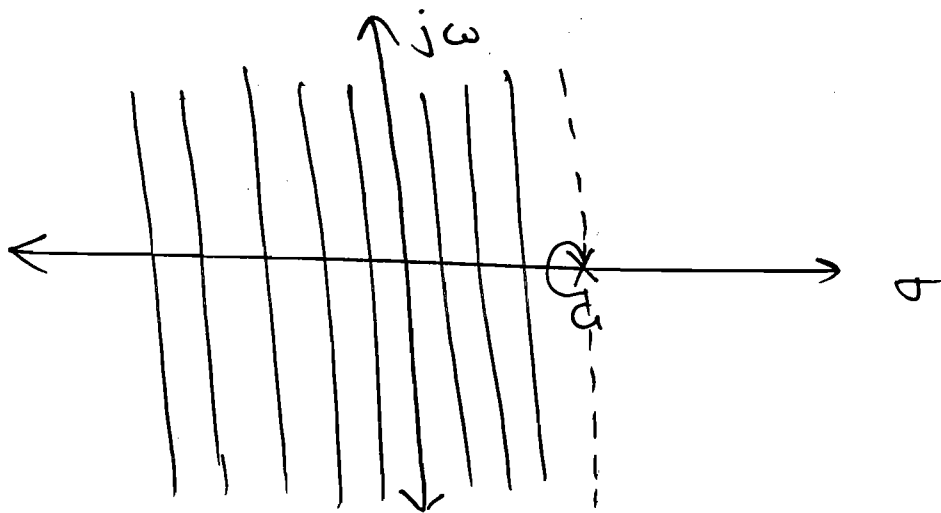
$$\textcircled{4} x_4(t) = -e^{at} u(-t), \quad \operatorname{Re}\{a\} \geq 0.$$

$$\Rightarrow X_4(s) = \frac{1}{s-a} ; \quad \operatorname{Re}\{s\} < a.$$

$$\sigma < \operatorname{Re}\{a\}$$



$$-e^{at} u(-t) \longleftrightarrow \frac{1}{s-a} ; \sigma < a.$$



⇒

$$e^{-at} u(t) \longleftrightarrow \frac{1}{s+a} ; \sigma > \text{Re}\{-a\}$$

$$-e^{at} u(-t) \longleftrightarrow \frac{1}{s-a} ; \sigma \neq \text{Re}\{-a\}.$$

$$e^{at} u(t) \longleftrightarrow \frac{1}{s-a} ; \sigma > \text{Re}\{a\}.$$

$$-e^{-at} u(-t) \longleftrightarrow \frac{1}{s-a} ; \sigma < \text{Re}\{a\}.$$

⇒ If $x(t)$ is a finite duration then the Roc is complete s-plane.

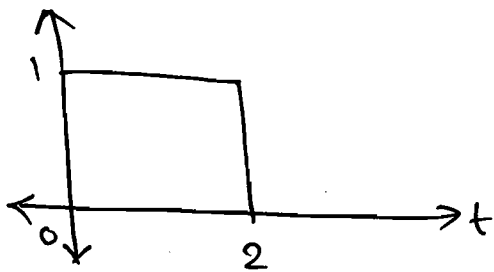
e.g.

$$x(t) = \delta(t).$$

↓ L.T.

$$X(s) = 1, \text{ Roc entire s-plane.}$$

e.g.



$$x(t) = u(t) - u(t-2)$$

$$X(s) = \frac{1}{s} - \frac{e^{-2s}}{s}$$

$$\lim_{s \rightarrow 0} \frac{1 - e^{-2s}}{s}$$

$$= \lim_{s \rightarrow 0} \frac{0 + 2e^{-2s}}{(1)}$$

(\because L' hospital rule.)

$$= 2 //$$

Roc is entire s-plane.

* Properties of L.T.

(1.) Linearity :

$$\Rightarrow \text{If } x_1(t) \leftrightarrow X_1(s) \text{ with Roc} = R_1$$

$$x_2(t) \leftrightarrow X_2(s) \text{ with Roc} = R_2.$$

$$\text{Then } ax_1(t) + bx_2(t) \leftrightarrow aX_1(s) + bX_2(s) \\ \text{With Roc} = R_1 \cap R_2.$$

P 5.1.2 Find the L.T. of the following signals with R.O.C.?

$$1) x_1(t) = e^{-t} u(t) + e^{-3t} u(t).$$

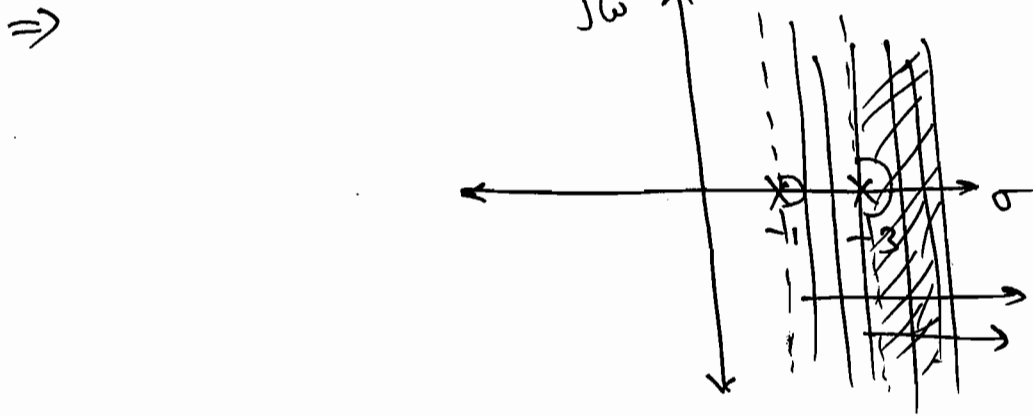
$$\text{Soln: } X_1(s) = \frac{1}{(s+1)} + \frac{1}{(s+3)}$$

$$\uparrow \\ \sigma > -1$$

$$\uparrow \\ \sigma > -3.$$

Common Roc.

$$\boxed{\sigma > -1}$$



Note :- If the L.T. $X(s)$ of $x(t)$ is rational, then if $x(t)$ is right sided the Roc is the region in the s-plane to the right of the rightmost pole and if $x(t)$ is left sided, Roc is left of the left most pole.

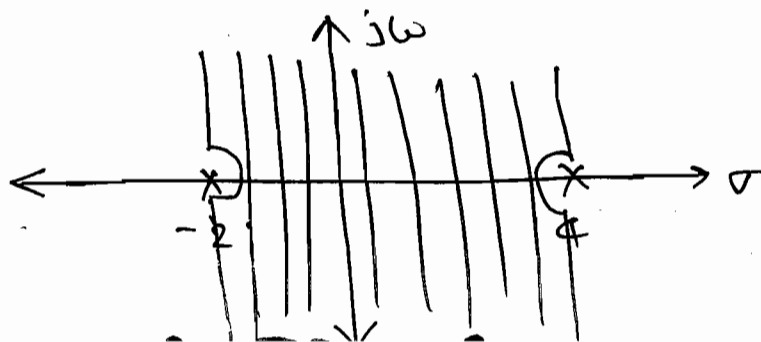
→ In above case right of the right most pole is -3 so, Roc: $\sigma > -3$.

(2) $x_2(t) = e^{-2t} u(t) + e^{+4t} u(-t)$.

Solⁿ: $X_2(s) = \frac{1}{(s+2)} - \frac{1}{(s-4)}$

\uparrow \uparrow
 $\sigma > -2$ $\sigma < 4$.

So, Roc: $-2 < \sigma < 4$.

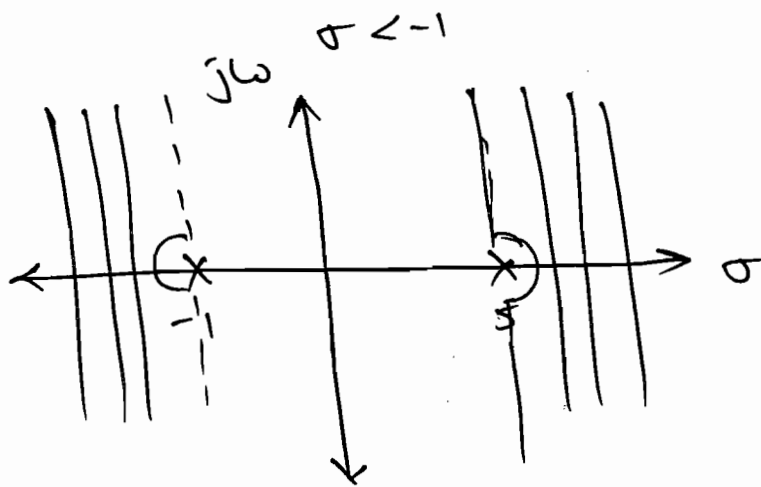


(3) $x_3(t) = e^{-t} u(-t) + e^{5t} u(t).$

Soln:

$$X_3(s) = \frac{-1}{(s+1)} + \frac{1}{(s-5)}$$

\uparrow $\sigma < -1$ \uparrow $\sigma > 5.$



No Common Roc so L.T. Can not exist.

(4) $x_4(t) = 1 \quad \forall t.$

Soln:

$$X_4(s) = u(t) + u(-t).$$

\uparrow $\sigma > 0$ \uparrow $\sigma < 0$

No Common Roc. so ^{L.T} do not exist.

(5) $x_5(t) = \text{sgn}(t).$

Soln:

$$x_5(t) = u(t) - u(-t)$$

\uparrow $\sigma > 0$ \uparrow $\sigma < 0$

No Common Roc. so L.T. do not exist.

PS-1.3

Consider the signal $x(t) = e^{-5t} u(t) + e^{-\beta t} u(t)$ & its L.T. is $X(s)$. What are

Constraints placed on the real & imaginary parts of β if the Roc of $x(s)$ is $\text{Re}\{s\} > -3$?

Solⁿ:
 $x(t) = e^{-5t} u(t) + e^{-\beta t} u(t).$

$$X(s) = \frac{1}{(s+5)} + \frac{1}{(s+\beta)}$$

\uparrow \uparrow
 $\sigma > -5$ $\sigma > -\beta$

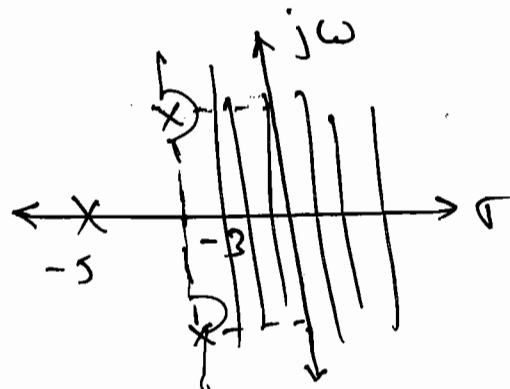
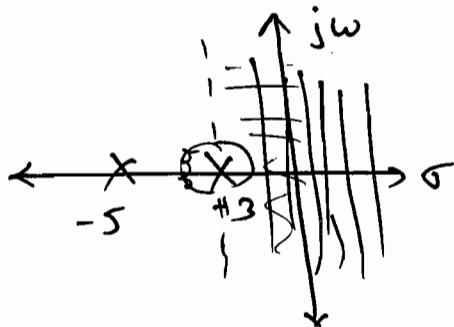
$$\begin{aligned} \sigma + \text{Re}\{\beta\} &> 0 \\ \sigma + 3 &> 0 \end{aligned}$$

Now, Roc of $x(s)$ is $\text{Re}\{s\} > -3$

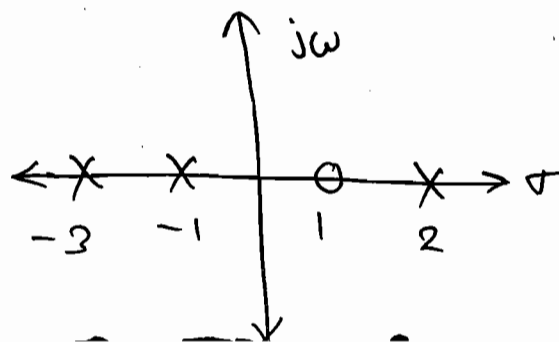
So, $\sigma > \text{Re}\{\beta\}$.

So, $\text{Re}\{\beta\} = 3.$

$\text{Im}\{\beta\} \Rightarrow$ any value.



P5.1.4 How many possible Roc are there for the pole-zero plot shown in fig (1)?



Solⁿ: Possible Roc.

① $\sigma < -3$

③ $-3 < \sigma < -1$.

② $\sigma > 2$

④ $-1 < \sigma < 2$.

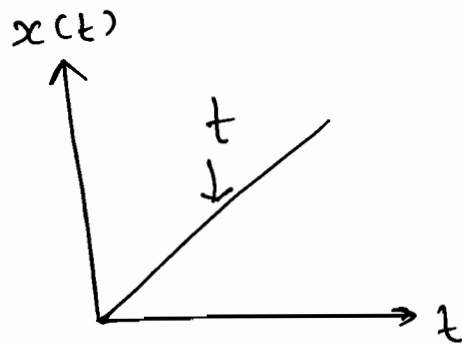
P 5.1.5 In what range should $\text{Re}\{s\}$ remain so that the L.T. of the fⁿ $(a+2)t + 5 \cdot u(t)$ exists?

Solⁿ: $x(t) = e^{(a+2)t} \cdot e^5 \cdot u(t)$.

so, $\text{Re}\{s\} > (a+2)$.

Q $x(t) = t \cdot u(t)$.

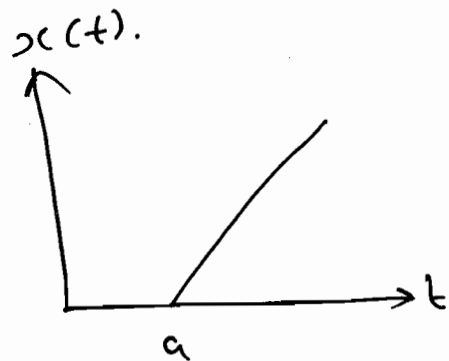
Solⁿ: $X(s) = \frac{1}{s^2}$



Q $(t-a) u(t-a)$.

Solⁿ: Shifting Property.

$X(s) = \frac{e^{-as}}{s^2}$



Q $(t-a) u(t)$.

Solⁿ: $x(t) = (t-a) u(t)$
 $= t \cdot u(t) - a u(t)$.

$$\Rightarrow X(s) = \frac{1}{s^2} - \frac{a}{s}$$

Q $t u(t-a)$.

Soln: $x(t) = t u(t-a)$.

$$\Rightarrow x(t) = [(t-a) + a] u(t-a)$$

$$= (t-a) \cdot u(t-a)$$

↓ L.T. $+ a u(t-a)$.

$$X(s) = \frac{e^{-as}}{s^2} + \frac{a \cdot e^{-as}}{s}$$

$$X(s) = \frac{e^{-as}}{s^2} [1 + as] \checkmark$$

(or)

$$\Rightarrow x(t) = t u(t-a)$$

$$L[x(t)] = L[t u(t-a)]$$

$$= e^{-as} L[t + a]$$

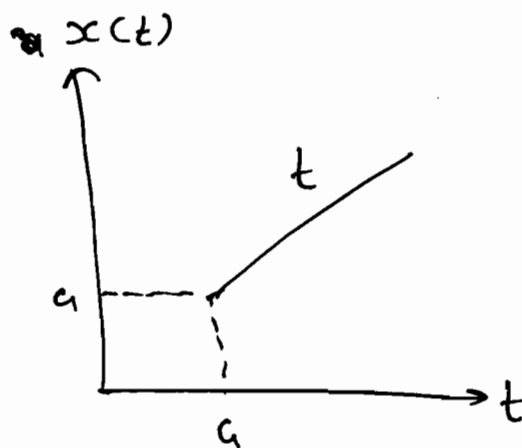
$$= e^{-as} \left[\frac{1}{s^2} + \frac{a}{s} \right]$$

$$X(s) = \frac{e^{-as}}{s^2} [1 + as] \checkmark$$

(*)

$$X(s) = \int_{-\infty}^{+\infty} x(t) \cdot e^{-st} dt$$

$$X(s) = \text{F.T.} \{ x(t) \cdot e^{-\sigma t} \}$$



When $\sigma = 0 \Rightarrow s = j\omega$

$$X(s) = \text{F.T.} \{x(t)\}.$$

So, L.T. of $x(t)$ (calculated on $j\omega$ axis (i.e. $s = j\omega$) is nothing but the F.T. of $x(t)$.

\Rightarrow Right-sided $\Rightarrow u(t)$.
Left-sided $\Rightarrow -u(-t)$.
**
*

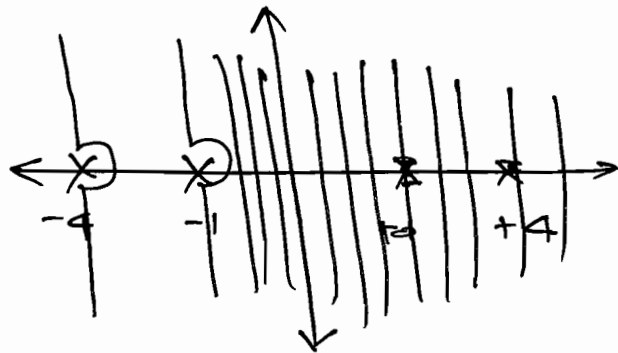
eg.

$$X(s) = \frac{1}{(s+1)(s+4)}$$

$\frac{1}{3}$:

$$X(s) = \frac{1}{(s+1)(s+4)}$$
$$= \frac{\frac{1}{3}}{s+1} - \frac{\frac{1}{3}}{s+4}$$

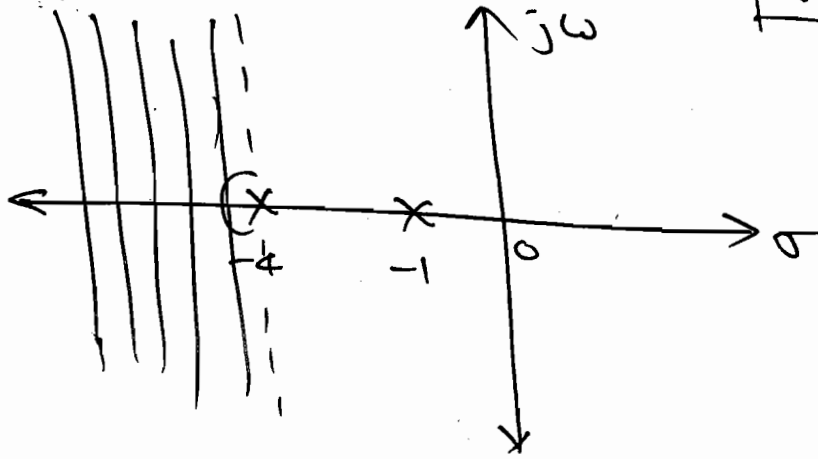
① $x(t)$ is right sided. $\sigma > -1$



$$\Rightarrow x(t) = \frac{1}{3} e^{-t} u(t) - \frac{1}{3} e^{-4t} u(t).$$

② $x(t)$ is left-sided.

$$\sigma < -4$$



$$\Rightarrow x(t) = -\frac{1}{3} e^{-t} u(-t) + \frac{1}{3} e^{-4t} u(-t).$$

③ $x(t)$ is two sided.

$$-4 < \sigma < -1$$

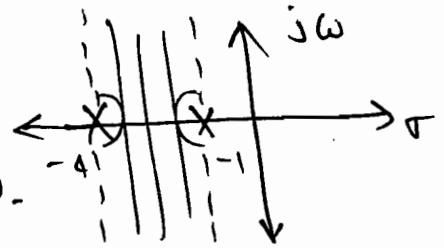
① $-4 < \sigma$

$$\Rightarrow \sigma > -4$$

$$u(t)$$

② $\sigma < -1$

$$\Downarrow -u(-t).$$



$$\text{So, } x(t) = -\frac{1}{3} e^{-t} \cdot u(-t) + \frac{1}{3} e^{-4t} \cdot u(t).$$

P5.1.1

Given $X(s) = \frac{2s+5}{s^2+s+6}$, find

all the time-domain signals?

Soln:

$$X(s) = \frac{2s+5}{s^2+s+6}$$

$$\Rightarrow X(s) = \frac{2s+5}{(s+2)(s+3)} = \frac{1}{(s+2)} + \frac{1}{(s+3)}$$

① $x(t)$ is left sided.

$$\text{R.O.C.} \text{ :- } \boxed{\sigma < -3}$$

$$\Rightarrow \boxed{x(t) = -e^{-2t} u(-t) - e^{-3t} u(-t)}$$

② $x(t)$ is Right sided.

$$\text{R.O.C.} \quad \boxed{\sigma > -2}$$

$$\boxed{x(t) = e^{-2t} u(t) + e^{-3t} u(t)}$$

③ $x(t)$ is Two sided.

$$\text{R.O.C.} \quad -\frac{3}{2} < \sigma < -2$$

$$\therefore \boxed{x(t) = -e^{-2t} u(-t) + e^{-3t} u(t)}$$

2. Time-Shifting:-

$$\Rightarrow \text{let, } x(t) \longleftrightarrow X(s), \text{ Roc} = R$$

$$\text{then } \boxed{x(t-t_0) \longleftrightarrow e^{-st_0} X(s)}, \text{ with } \text{Roc} = R.$$

P5.16.

$$(b) x(t) = u(t-5)$$

$$\begin{aligned} \text{Soln:} \\ \underline{\underline{X(s)}} &= e^{-5s} \mathcal{L}[u(t)] \\ &= e^{-5s} / s \end{aligned}$$

$$(c) \quad y(t) = e^{5t} u(-t+3).$$

Soln:

$$y(t) = e^{5t} u(-(t-3)).$$

$$= e^{5t} \cdot e^{-3s} \mathcal{L}[u(-t)].$$

$$= e^{-3s} \mathcal{L}[e^{5t} u(-t)].$$

$$= e^{+3(s-5)} \cdot \frac{1}{s-5}$$

P 5.1.8 Consider the signal $x(t) = e^{-5t} u(t-1)$

with L.T. $X(s)$.

a) Find $X(s)$ with R.O.C.?

Soln:

$$x(t) = e^{-5t} u(t-1).$$

$$X(s) = e^{-5t+5-5} u(t-1).$$

$$= e^{-5(t-1)} \cdot u(t-1) \cdot e^{-5}.$$

$$X(s) = \frac{e^{-5} \cdot e^{-s}}{s+5}; \quad \text{Roc } \sigma > -5.$$

(or)

$$X(s) = e^{-5} \left[\mathcal{L} \left\{ e^{-s(t+1)} \right\} \right].$$

$$= e^{-5} \left[\frac{e^{-5}}{s+5} \right].$$

$$\Rightarrow X(s) = \frac{e^{-s} \cdot e^{-s}}{s+s}; \quad \text{R.O.C. } \boxed{\sigma > -s}$$

(b) Find the values of 'A' & 't₀' such that the L.T. G(s) of g(t) = A e^{-st} u(-t-t₀) has same algebraic form as X(s).
 What is the R.O.C. of (corresponding to G(s))?

Solⁿ:

$$g(t) = A \cdot e^{-st} \cdot u(-t-t_0).$$

$$= A \cdot e^{-st} \cdot u(\ominus(t+t_0)).$$

$$= A \cdot e^{-t_0 s} \cdot L \left[\frac{e^{-s(t-t_0)}}{e^{-s(t-t_0)}} \right].$$

s become -s

$$= A \cdot e^{s t_0} \cdot e^{-t_0(-s)} \times \frac{1}{-s+s}$$

$$G(s) = - \frac{A \cdot e^{s t_0} \cdot e^{t_0 s}}{s-s}; \quad \text{R.O.C.}$$

$$s-s \neq 0$$

$$\therefore \text{So, } \boxed{A = -1}, \quad \boxed{t_0 = -1}$$

$$\& \text{ R.O.C. } \boxed{\sigma < -s}$$

$$\leftarrow \sigma > s$$

but $\boxed{\sigma < -s}$
 (\because s becomes -s).

③ Shift in S-domain:

\Rightarrow If $x(t) \longleftrightarrow X(s)$ with $\text{Roc} = R$ then

$$x(t) \cdot e^{s_0 t} \longleftrightarrow X(s-s_0) \quad \text{with } \text{Roc} = R + \text{Re}(s_0)$$

(4) Time - reversal :-

$\Rightarrow x(t) \longleftrightarrow X(s)$ then $x(-t) \longleftrightarrow X(-s)$,
 $Roc = -R$.

P 5.1.7. Find the I.L.T. of

$$Y(s) = \frac{e^{-3s}}{(s+1)(s+2)}, \quad \sigma > -1.$$

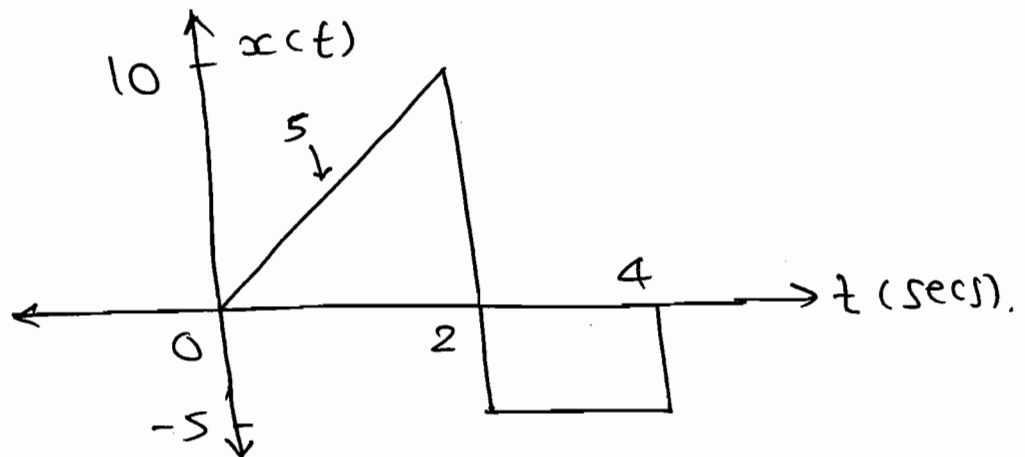
Solⁿ:

$$Y(s) = e^{-3s} \downarrow_{t_0=3} \left[\frac{1}{(s+1)} - \frac{1}{(s+2)} \right].$$

$$y(t) = e^{-(t+3)} \cdot u(t+3) - e^{-2(t+3)} \cdot u(t+3).$$

P 5.1.9. Find the L.T. of the wave form

shown in figure?



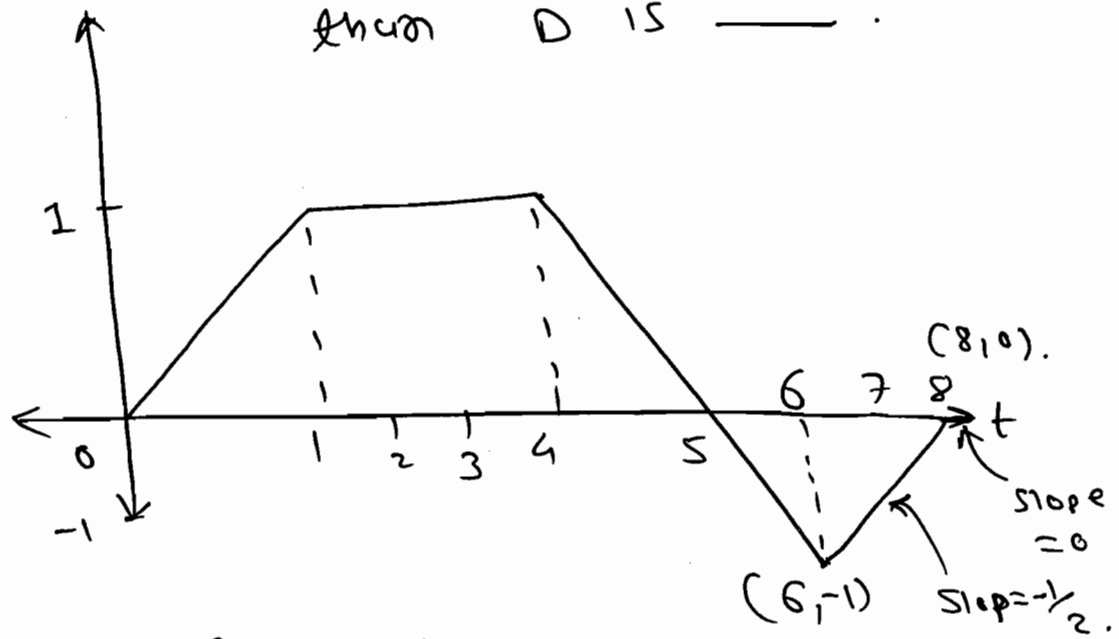
Solⁿ: $x(t) = 5R(t) - 5R(t-2) - 15u(t-2) + 5u(t-4).$

$$\Rightarrow X(s) = \frac{5}{s^2} \frac{5e^{-2s}}{s^2} - \frac{15e^{-2s}}{s} + \frac{5e^{-4s}}{s}.$$

P 5.1.10 L.T. of the waveform shown in

is $\frac{1}{s^2} (1 + A e^{-s} + B e^{-4s} + C e^{-6s} + D e^{-8s})$.

then D is _____.



Soln:

$$\text{slope} = \frac{-1 - 0}{6 - 8} = \frac{1}{2}$$

D (8 to 6).

$$\text{So, } \boxed{D = \frac{1}{2}}$$

A (1 to 0).

$$\text{So, } \boxed{A = \text{slope} = 1}$$

P 5.1.11 Find the L.T. of

$$1) x_1(t) = \cos \omega_0 t u(t)$$

Soln:
$$x_1(t) = \frac{e^{j\omega_0 t} + e^{-j\omega_0 t}}{2} \cdot u(t)$$

$$x_1(t) = \frac{1}{2} \cdot u(t) \cdot e^{j\omega_0 t} + \frac{1}{2} \cdot u(t) \cdot e^{-j\omega_0 t}$$

let, $x(t) = u(t)$

L.T. $\rightarrow X(s) = \frac{1}{s}$

$$X_1(s) = \frac{1}{2} X(s - j\omega_0) + \frac{1}{2} X(s + j\omega_0)$$

$$\Rightarrow X_1(s) = \frac{1}{2} \left[\frac{1}{s-j\omega_0} + \frac{1}{s+j\omega_0} \right].$$

$$\therefore X_1(s) = \frac{s}{s^2 + \omega_0^2} ; \quad \sigma > 0 + 0$$

$\sigma > 0$

$$(2) \quad x_2(t) = t \cdot e^{-3t} u(t).$$

Solⁿ:
 $x_2(t) = t \cdot e^{-3t} \cdot u(t).$

let, $x(t) = t \Rightarrow X(s) = \frac{1}{s^2}.$

$$\therefore X_2(s) = X(s+3).$$

$$\therefore X_2(s) = \frac{1}{(s+3)^2} ; \quad \sigma > 0$$

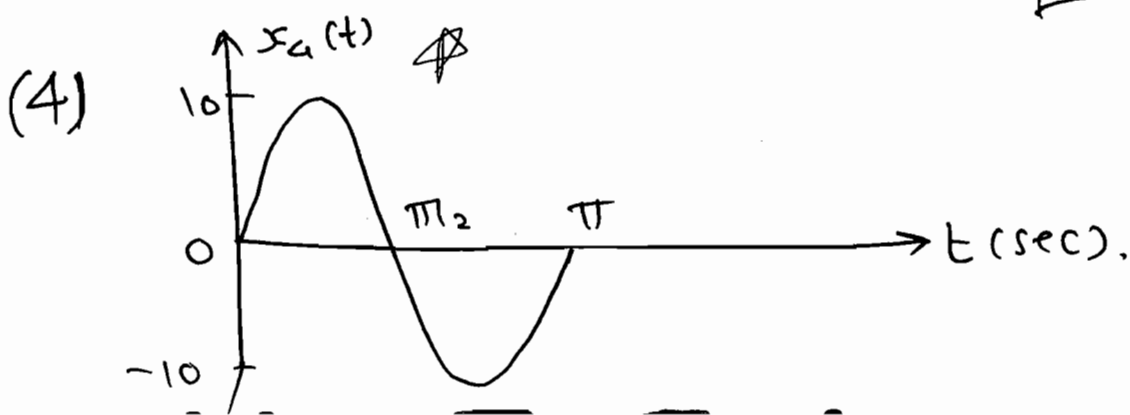
$$(3) \quad x_3(t) = e^{-at} \sin \omega_0 t u(t).$$

Solⁿ:
 $L[\sin \omega_0 t] = \frac{\omega_0}{s^2 + \omega_0^2}.$

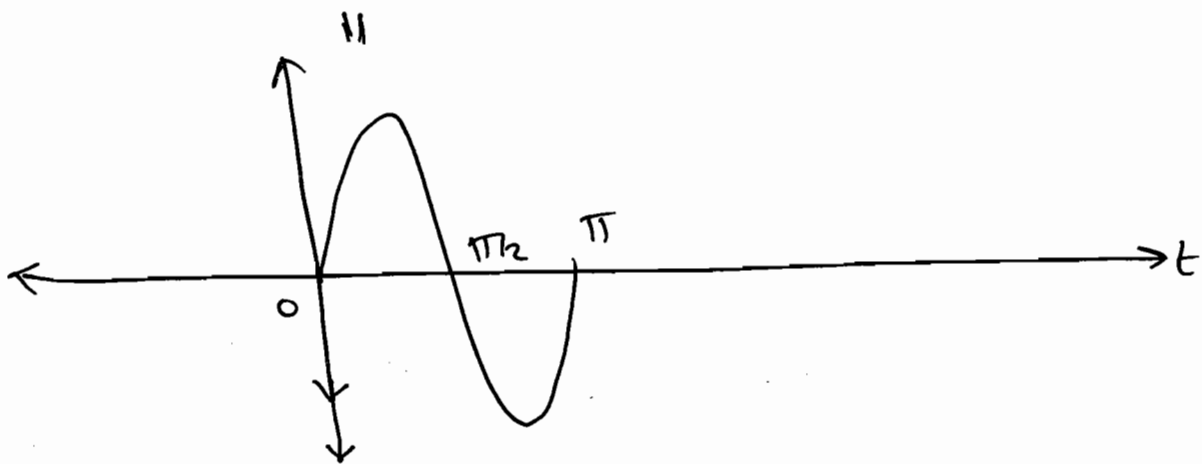
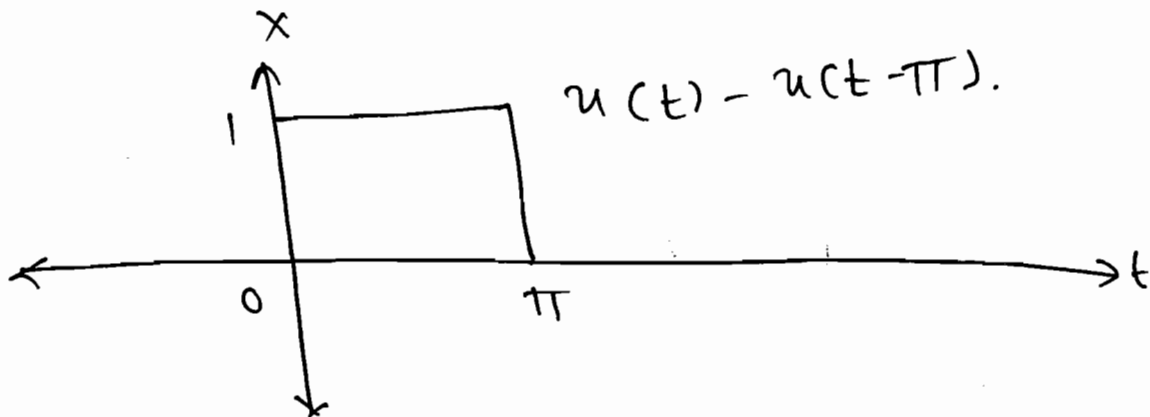
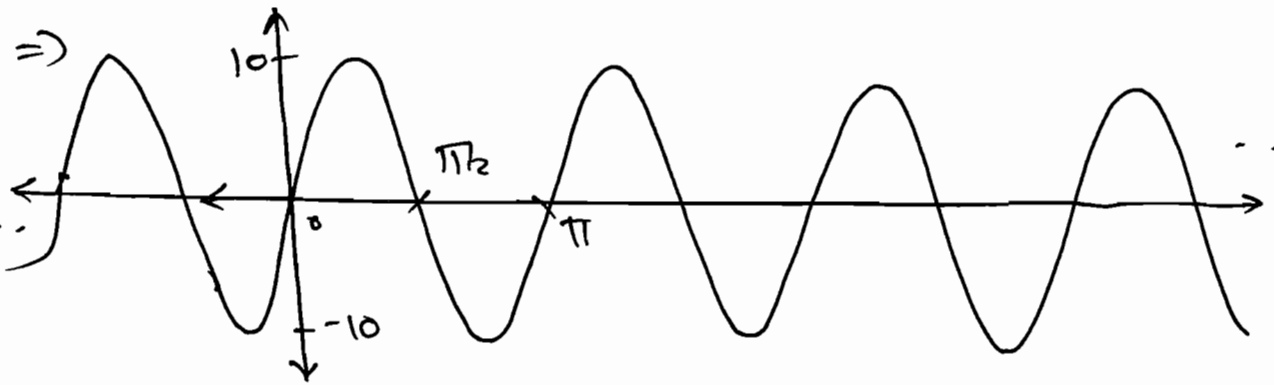
$$\therefore X_3(s) = X(s+a).$$

$$\therefore X_3(s) = \frac{\omega_0}{(s+a)^2 + \omega_0^2} ; \quad \sigma > 0 + \operatorname{Re}\{-a\}$$

$\sigma > \operatorname{Re}\{-a\}.$



$$\Rightarrow \omega_0 = \frac{2\pi}{T} = \frac{2\pi}{\pi} = 2.$$



$$\Rightarrow X_u(t) = 10 \sin \omega_0 t \cdot [u(t) - u(t-\pi)].$$

$$X_u(t) = \sin 2t \cdot [u(t) - u(t-\pi)].$$

$$\downarrow \text{L.T.} = \frac{20}{s^2+4} - \frac{20e^{-\pi s}}{s^2+4}.$$

$$X_G(s) = \frac{20}{s^2+4} [1 - e^{-\pi s}].$$

P5.1.12

Let $x(t)$ be a signal that has a rational L.T. with exactly 2 poles located at $s = -1$ and $s = -3$. If

$g(t) = e^{2t} x(t)$ & $G(\omega)$ converges,

determine whether $g(t)$ is

- (a) left-sided
- (b) right-sided.
- (c) two-sided
- (d) finite-duration.

Soln:

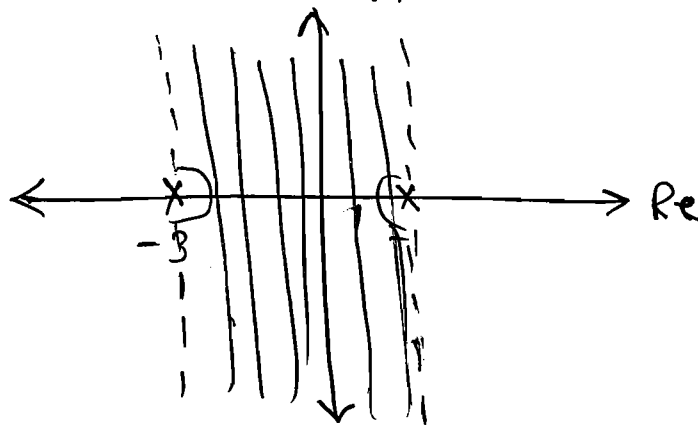
$$X(s) = \frac{1}{(s+1)(s+3)}$$

$$\Rightarrow \text{Now, } g(t) = e^{2t} x(t).$$

$$\Rightarrow G(s) = X(s-2).$$

$$\Rightarrow G(s) = \frac{1}{(s-1)(s+3)}$$

Now, $G(\omega)$ converges means F.T. is defined and L.T.'s Roc includes $j\omega$ (or) "Im" axis.



R.o.c. must be

$$\Rightarrow \boxed{-3 < \sigma < -1} \quad \text{So, Ans } \textcircled{c} \text{ two sided}$$

P 5.1.13 Let $g(t) = x(t) + \alpha x(-t)$ where

$$x(t) = \beta e^{-t} u(t) \quad \& \quad G(s) = \frac{s}{s^2-1}, \quad -1 < \operatorname{Re}\{s\} < 1,$$

find α & β !

Soln:

$$g(t) = x(t) + \alpha x(-t).$$

$$\therefore G(s) = X(s) + \alpha X(-s).$$

$$\Rightarrow x(t) = \beta \cdot e^{-t} u(t).$$

$$\Rightarrow X(s) = \frac{\beta}{(s+1)}, \quad \operatorname{Re}\{s\} > -1.$$

$$X(-s) = \frac{\beta}{-s+1}, \quad \operatorname{Re}\{s\} < 1.$$

$$\therefore G(s) = \frac{\beta}{(s+1)} + \frac{\alpha\beta}{(-s+1)}.$$

$$G(s) = \frac{\beta}{(s+1)} - \frac{\alpha\beta}{s-1}, \quad \text{--- (1)}$$

$$\text{Given } G(s) = \frac{s}{s^2-1} = \frac{s}{(s+1)(s-1)}.$$

$$G(s) = \frac{\frac{1}{2}}{(s-1)} - \frac{-\frac{1}{2}}{(s-1)}. \quad \text{--- (2)}$$

Compare eqn (1) & (2).

$$\therefore \boxed{\beta = \frac{1}{2}}$$

$$\alpha \cdot \beta = -\frac{1}{2}.$$

$$\alpha \cdot \left(\frac{1}{2}\right) = \left(-\frac{1}{2}\right).$$

$$\boxed{\alpha = -1}$$

Q $Y(s) = \frac{s^2 - s + 1}{(s+1)^2}$; $\sigma > -1$.

soln:

$$Y(s) = \frac{s^2 - s + 1}{(s+1)^2}$$

$$= \frac{s^2 + 2s + 1 - 3s}{(s+1)^2}$$

$$= \frac{(s+1)^2 - 3(s+1-1)}{(s+1)^2}$$

$$Y(s) = 1 - \frac{3}{(s+1)} + \frac{3}{(s+1)^2}$$

↓ I.L.T.

$$y(t) = \delta(t) - 3e^{-t}u(t) + 3te^{-t}u(t)$$

5) Differentiation in time :-

If $x(t) \leftrightarrow X(s)$ with $\text{Roc} = R$

then $\frac{dx(t)}{dt} \leftrightarrow sX(s)$ with $\text{Roc} = R$.

PS.1.14

Consider 2 right-sided signals

$x(t)$ & $y(t)$ related through the

Equation

$$\frac{dx(t)}{dt} = -2y(t) + \delta(t)$$

$$\frac{dy(t)}{dt} = 2x(t)$$

find $X(s)$ & $Y(s)$ with Roc?

Soln:

$$sX(s) = -2Y(s) + 1$$

$$\& \quad sY(s) = 2X(s).$$

$$\Rightarrow Y(s) = \frac{2X(s)}{s}$$

$$\therefore sX(s) = -2 \left[\frac{2X(s)}{s} \right] + 1.$$

$$\therefore sX(s) = -\frac{4X(s)}{s} + 1.$$

$$X(s) \left[s + \frac{4}{s} \right] = 1.$$

$$\therefore \boxed{X(s) = \frac{s}{s^2 + 4}} \quad \text{Roc } \boxed{\sigma > 0}$$

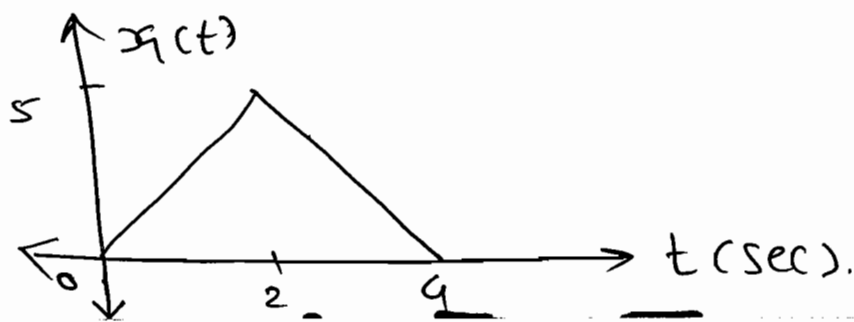
$$\therefore x(t) = \cos 2t$$

$$\therefore Y(s) = \frac{2}{s} \times \frac{s}{s^2 + 4} = \frac{2}{s^2 + 4}.$$

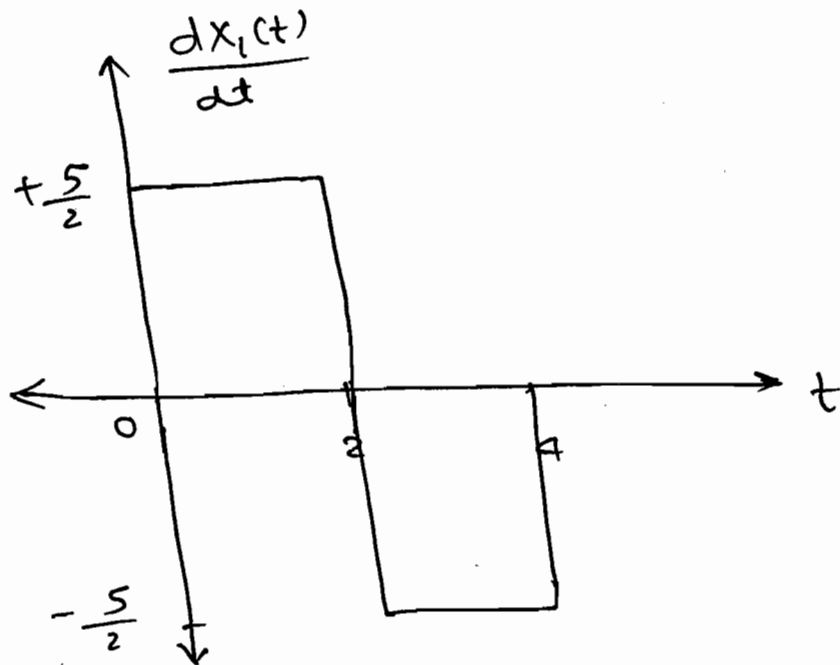
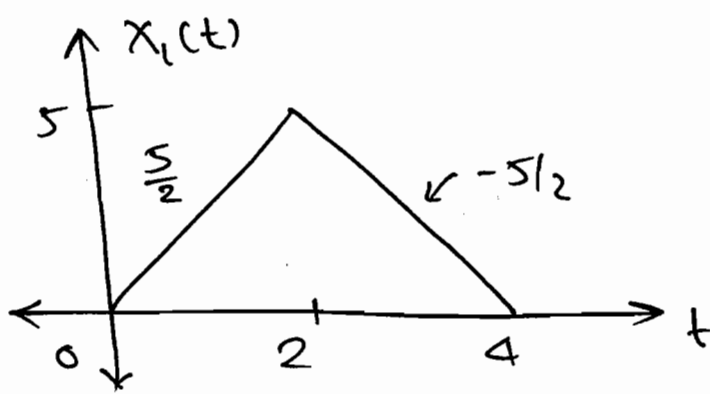
$$\Rightarrow \boxed{Y(s) = \frac{2}{s^2 + 4}} \Rightarrow y(t) = \sin 2t.$$

$(\sigma > 0)$

P 5.1.15 By using derivative method find the L.T. of the following signal?



Soln:



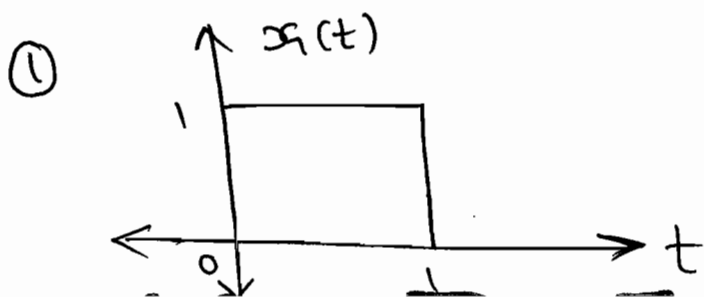
$$\therefore \frac{dx_1(t)}{dt} = \frac{5}{2} u(t) - \frac{10}{2} u(t-2) + \frac{5}{2} u(t-4)$$

$$\therefore S X_1(s) = \frac{5}{2s} - 5 \frac{e^{-2s}}{s} + \frac{5}{2} \frac{e^{-4s}}{s}$$

$$\therefore X_1(s) = \frac{5}{2s^2} - \frac{5 \cdot e^{-2s}}{s^2} + \frac{5 \cdot e^{-4s}}{2s^2}$$

P 5.1.16 Find the Laplace transform of

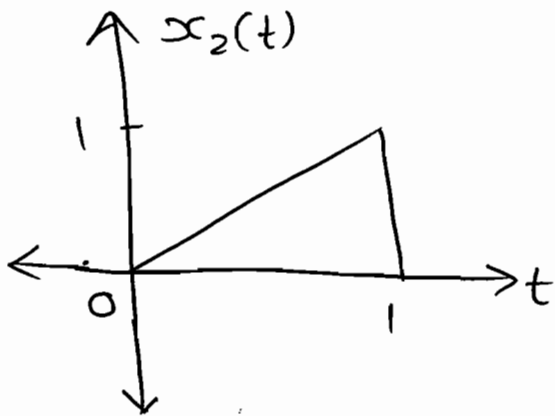
the following signals?



Solⁿ: $x_1(t) = u(t) - u(t-1).$

L.T. \downarrow $X_1(s) = \frac{1}{s} - \frac{e^{-s}}{s} = \frac{1-e^{-s}}{s}.$

(2)



Solⁿ: $x_2(t) = t \cdot [u(t) - u(t-1)].$

$x_2(t) = t \cdot x_1(t)$

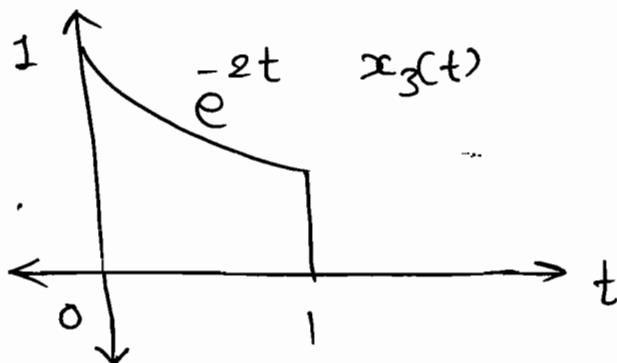
\downarrow L.T.

$\therefore X_2(s) = (-1)' \cdot \frac{d}{ds} (X_1(s)).$

$= - \left[\frac{-1}{s^2} - \frac{s(-1) \cdot e^{-s} - e^{-s}}{s^2} \right].$

$X_2(s) = \frac{1}{s^2} + \frac{-s \cdot e^{-s} - e^{-s}}{s^2}.$

P 5.1.16



Solⁿ:

$x_3(t) = x_1(t) [u(t) - u(t+1)].$

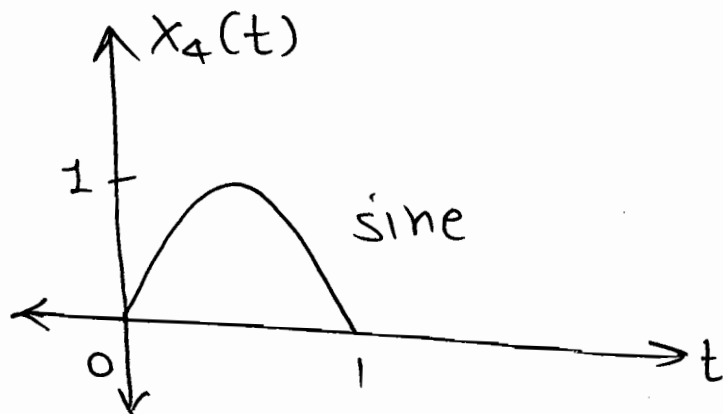
$$\therefore x_3(t) = e^{-2t} \cdot x_1(t).$$

$$\Rightarrow \downarrow$$

$$X_3(s) = X_1(s+2).$$

$$X_3(s) = \frac{1 - e^{-(s+2)}}{(s+2)}$$

④



$$\omega_0 = \frac{2\pi}{T}$$

$$= \frac{2\pi}{2}$$

$$\omega_0 = \pi$$

$\therefore \omega_0 = \pi$

$$x_4(t) = \sin \omega_0 t \cdot [x_1(t)].$$

$$= \sin \pi t \cdot [x_1(t)].$$

$$= \frac{e^{+j\pi t} - e^{-j\pi t}}{2j} \cdot x_1(t).$$

$$x_4(t) = \frac{e^{+j\pi t} \cdot x_1(t) - e^{-j\pi t} \cdot x_1(t)}{2j}$$

\downarrow L.T.

$$\therefore X_4(s) = \frac{X_1(s+j\pi) - X_1(s-j\pi)}{2j}$$

$$\therefore X_4(s) = \frac{1 - e^{-(s-j\pi)}}{(s+2-j\pi) 2j} - \frac{1 - e^{-j(s+j\pi+2)}}{(s+j\pi+2)}$$

6) Differentiation in s-domain :-

$\Rightarrow \mathcal{I}_t x(t) \longleftrightarrow X(s)$ with $\text{Roc} = \mathcal{R}$,

then $t x(t) \longleftrightarrow -\frac{d}{ds} X(s)$ $\text{Roc} = \mathcal{R}$.

$\Rightarrow t^n x(t) \longleftrightarrow (-1)^n \frac{d^n}{ds^n} X(s)$.

P 5.1.17 Find the I.L.T. of $X(s) = \log \left[\frac{s+5}{s+6} \right]$?

Soln: $X(s) = \log \left[\frac{s+5}{s+6} \right]$.

$$\therefore \frac{dX(s)}{ds} = \frac{1 \cdot (s+6) - (s+5) \cdot 1}{(s+5)(s+6)}$$

$$= \frac{1}{(s+5)(s+6)}$$

$$\therefore \frac{dX(s)}{ds} = \frac{1}{(s+5)} - \frac{1}{(s+6)}$$

$$\therefore -t \cdot x(t) = \left(e^{-5t} - e^{-6t} \right) u(t).$$

$\therefore x(t) = \left[\frac{e^{-6t} - e^{-5t}}{t} \right] u(t)$.

in general,

$$x(t) = \left[\frac{e^{-\alpha t} - e^{-\beta t}}{t} \right] u(t) \xleftrightarrow{\text{L.T.}} \text{Log} \left[\frac{s+\beta}{s+\alpha} \right]$$

P5.1.18

Find the ILT of

$$(a) \quad X(s) = \frac{4}{(s+2)(s+1)^3}$$

Soln:

$$X(s) = \frac{4}{(s+2)(s+1)^3}$$

$$X(s) = 4 \left[\frac{A=-4}{(s+2)} + \frac{B=4}{(s+1)^3} + \frac{C}{(s+1)^2} + \frac{D}{(s+1)} \right]$$

$$\Rightarrow X(s) = 4 \left[\frac{-4}{(s+2)} + \frac{4}{(s+1)^3} + \frac{C}{(s+1)^2} + \frac{D}{(s+1)} \right]$$

$$= \frac{4}{(s+2)(s+1)^3}$$

Put $s=0$.

$$\therefore \frac{4}{2} = -\frac{4}{2} + 4 + C + D$$

$$\boxed{C = -D}$$

Put $s=1$.

$$\therefore \frac{1}{6} = -\frac{4}{3} + \frac{1}{2} + \frac{C}{4} + \frac{D}{2}$$

$$\Rightarrow C + 2D = 4$$

$$\Rightarrow \boxed{D=4} \quad \& \quad \boxed{C=-4}$$

$$\therefore X(s) = \frac{-4}{(s+2)} + \frac{4}{(s+1)^3} - \frac{4}{(s+1)^2} + \frac{4}{(s+1)}$$

↓ I.L.T.

$$x(t) = -4e^{-2t} + \frac{4}{2!} e^{-t} \cdot t^2 - 4te^{-t} + 4e^{-t}$$

$$(b) \quad X(s) = e^{-2s} \frac{d}{ds} \left[\frac{1}{(s+1)^2} \right]$$

Solⁿ:

$$X(s) = e^{-2s} \left[\frac{-2}{(s+1)^3} \right]$$

$$\downarrow \text{I.L.T.} = \frac{-2e^{-2s}}{(s+1)^3}$$

$$x(t) = -2 \frac{(t+2)^2}{2!} \cdot e^{-(t+2)} \cdot u(t+2)$$

$$\therefore \boxed{x(t) = -(t+2)^2 \cdot e^{-(t+2)} \cdot u(t+2)}$$

7) Convolution in time :-

$$\Rightarrow \text{If } x(t) \leftrightarrow X(s) \text{ with } \text{Roc} = R_1 \text{ \& } \\ h(t) \leftrightarrow H(s) \text{ with } \text{Roc} = R_2.$$

$$\text{then } \boxed{x(t) * h(t) \leftrightarrow X(s) \cdot H(s) \text{ } \text{Roc} = R_1 \cap R_2}$$

\Rightarrow L.T. of impulse response is known as System (or) transfer function.

P 5.1.19 Solve the following equation.

$$y(t) + \int_0^{\infty} y(\tau) \cdot x(t-\tau) d\tau = x(t) + \delta(t)?$$

$$\underline{\underline{\text{Solⁿ:}}} \quad y(t) + y(t) * x(t) = x(t) + \delta(t).$$

L.T. $\rightarrow Y(s) \neq X(s) + X(s) \cdot Y(s) = X(s) + 1.$

$\therefore Y(s) [1 + \cancel{X(s)}] = (1 + \cancel{X(s)})$

$\therefore Y(s) = 1$

$\therefore \boxed{Y(t) = \delta(t)}$

P 5.1.20 ~~solve~~ the following

Consider a signal $y(t) = x_1(t-2) * x_2(-t+3)$ where $x_1(t) = e^{-2t} \cdot u(t)$ & $x_2(t) = e^{-3t} \cdot u(t)$. Find $Y(s)$ with Roc?

Soln:
 $X_1(s) = \frac{1}{(s+2)} \quad \sigma > -2, \quad X_2(s) = \frac{1}{(s+3)} \quad \sigma > -3.$

$\therefore y(t) = x_1(t-2) * x_2(-t+3)$

$Y(s) = e^{-2s} X_1(s) \cdot e^{-3s} X_2(-s)$

$\therefore \boxed{Y(s) = \frac{e^{-2s}}{(s+2)} \cdot \frac{e^{-3s}}{(-s+3)}}$
 $\sigma > -2 \quad \sigma < 3.$

So, Roc $\boxed{-2 < \sigma < 3}$

P 5.2.21 Find the transfer function &

impulse response of a filter whose input-output relation is described by

$y(t) = x(t) + \int_{-\infty}^t y(\lambda) \cdot e^{-3(t-\lambda)} \cdot u(t-\lambda) d\lambda.$

Solⁿ:

$$Y(s) = X(s) + y(t) * e^{-3t}$$

$$y(t) = [x(t) + y(t) * e^{-3t}]$$

$$\therefore Y(s) = X(s) + Y(s) \cdot \frac{1}{s+3}$$

$$\therefore Y(s) \left[1 - \frac{1}{s+3} \right] = X(s)$$

$$\therefore \frac{Y(s)}{X(s)} = H(s) = \frac{s+3}{s+2} = \frac{s+2+1}{s+2}$$

$$\therefore H(s) = 1 + \frac{1}{s+2}$$

$$\therefore h(t) = \delta(t) + e^{-2t} \cdot u(t)$$

P 5.1.23 An Input $x(t) = \exp(-2t) \cdot u(t) + \delta(t-6)$ is applied to an L.T.I. system with impulse response $h(t) = u(t)$. The output is

Solⁿ:
$$X(s) = \frac{1}{s+2} + e^{-6s}$$

$$H(s) = \frac{1}{s}$$

$$\therefore H(s) = \frac{Y(s)}{X(s)}$$

$$\therefore Y(s) = H(s) \cdot X(s)$$

$$= \frac{1}{s} \cdot \left[\frac{1}{s+2} + e^{-6s} \right]$$

$$\therefore Y(s) = \frac{1}{s(s+2)} + \frac{e^{-6s}}{s}$$

$$= \frac{1}{2s} - \frac{1}{2(s+2)} + \frac{e^{-6s}}{s}$$

$$\therefore y(t) = \frac{1}{2} u(t) - \frac{1}{2} e^{-2t} \cdot u(t) + u(t+6).$$

$$\therefore y(t) = 0.5 [1 - \exp(-2t)] u(t) + u(t+6).$$

PS-1.14 Let the L.T. of a function $f(t)$ which exists for $t > 0$ be $F_1(s)$ and the L.T. of its delayed version $f(t-\tau)$ be $F_2(s)$. Now let $F_1^*(s)$ be the complex conjugate of $F_1(s)$ with $s = \sigma + j\omega$ of $G(s) = \frac{F_2(s) \cdot F_1^*(s)}{|F_1(s)|^2}$, then the L.T.I. of

$G(s)$ is
 (a) $\delta(t)$ (b) $\delta(t-\tau)$ (c) $u(t)$ (d) $u(t-\tau)$.

Soln:

$$F_2(s) = e^{-\tau s} \cdot F_1(s).$$

$$\Rightarrow G(s) = \frac{F_2(s) \cdot F_1^*(s)}{|F_1(s)|^2}$$

$$\Rightarrow G(s) = \frac{e^{-\tau s} \cdot F_1(s) \cdot F_1^*(s)}{|F_1(s)|^2}$$

$$G(s) = e^{-\tau s} \cdot 1$$

$$\Rightarrow y(t) = \delta(t-\tau).$$

Ans: (b) $\delta(t-\tau)$.

* Frequency Integration :-

$$\Rightarrow \boxed{\frac{x(t)}{t} \longleftrightarrow \int_s^\infty X(s) \cdot ds.}$$

P 5-1-25 Find the L.T. of $\frac{\sin \omega_0 t}{t} \cdot u(t)$?

Soln: let, $x(t) = \sin \omega_0 t$

$$X(s) = \frac{\omega_0}{s^2 + \omega_0^2} \dots$$

$$\Rightarrow L \left[\frac{\sin \omega_0 t}{t} \cdot u(t) \right] = \int_s^\infty X(s) \cdot ds.$$

$$= \int_s^\infty \frac{\omega_0}{s^2 + \omega_0^2} \cdot ds.$$

$$= \frac{\omega_0}{\omega_0} \tan^{-1} \left(\frac{s}{\omega_0} \right) \Big|_s^\infty$$

$$= \frac{\pi}{2} - \tan^{-1} (s/\omega_0).$$

* Integration in time :-

$$\Rightarrow \boxed{\int_0^t x(\tau) d\tau \longleftrightarrow \frac{X(s)}{s}.}$$

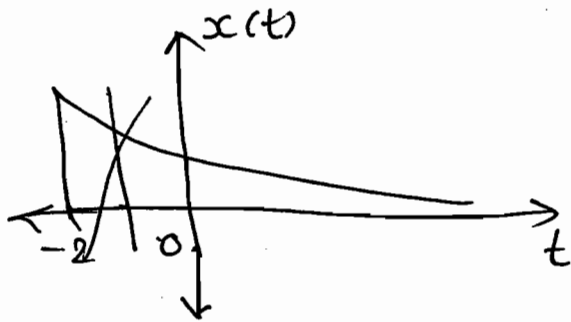
5.2 Unilateral L.T.

$$X(s) = \int_0^\infty x(t) \cdot e^{-st} \cdot dt.$$

P 5.2.1 Find the U.L.T. of the following signals & find the ROC?

(a) $x(t) = e^{-3t} \cdot u(t+2)$.

Soln:



$$\Rightarrow X(s) = \int_0^{\infty} e^{-3t} \cdot e^{-st} \cdot dt$$

$X(s) = \frac{1}{s+3} ; \sigma > -3.$	R.O.C
---------------------------------------	-------

(b) $x(t) = \delta(t+2) + \delta(t-4)$.

Soln:

$X(s) = e^{-4s}$

* Differentiation in time :-

$$\Rightarrow \frac{d}{dt} x(t) \longleftrightarrow sX(s) - X(0)$$

$$\Rightarrow \frac{d^2}{dt^2} x(t) \longleftrightarrow s^2 X(s) - sX(0) - X'(0)$$

P 5.2.2 A system described by a linear, constant coefficient, ordinary, first order

differential equation has an exact solution given by $y(t)$ for $t > 0$, when the forcing function is $x(t)$ and the initial condition is $y(0)$. If one wishes to modify the system so that solution becomes $-2y(t)$ for $t > 0$, we need to

Sum: (D) Change the initial condition to $-2y(0)$ and the forcing t^n to $-2x(t)$.



Total Response

Zero state

Zero I/P

(Z.S.R.) response

response (Z-I.R.)

(or)

(or)

forced Resp.

Natural Response.

(or)

(or)

Steady-state

Transient Res.

Resp.



I/P is taken.

I/P is not taken.

All initial conditions

Initial conditions are

are zero.

considered.



Transfer function

Charac. Polynomial.

⇒ T.F. of sys. is always representing the Z.S.R.

* Differentiation in time:-

$$\left. \begin{array}{l} \frac{d}{dt} \rightarrow j\omega \rightarrow s \\ \frac{d}{d\omega} \rightarrow -jt \\ \frac{d}{d(j\omega)} \rightarrow -t \\ \frac{d}{ds} \rightarrow -t \end{array} \right\} \text{Roc} = R.$$

* Steady - State Response:-

⇒ If $x(t) = A \cos(\omega_0 t + \theta)$.

then calculate $H(s) \Big|_{s=j\omega_0}$

$$\Rightarrow H(s) \Big|_{s=j\omega_0} = K \angle \phi.$$

Steady state response,

$$y_{ss}(t) = KA \cdot \cos(\omega_0 t + \theta + \phi).$$

P52.3 Consider a system with T.F.

$$H(s) = \frac{s-2}{s^2+4s+4}. \quad \text{Find the steady-state}$$

response when the input applied is

$$8 \cos 2t ?$$

Solⁿ:

$$x(t) = 8 \cos 2t.$$

$$A = 8, \quad \omega_0 = 2, \quad \theta = 0.$$

$$H(s) \Big|_{s=2j} = \frac{2j-2}{-4+8j+4} = \frac{j-1}{4j}.$$

$$= 0.3536 \angle -45^\circ.$$

$$\begin{array}{cc} \downarrow & \downarrow \\ K & \phi \end{array}$$

$$\therefore \text{S.S.R.} = y_{ss}(t) = (0.3536 \times 8) \cos(2t + 0 + (-45^\circ))$$

$$\therefore \boxed{y_{ss}(t) = 2\sqrt{2} \cdot \cos(2t - 45^\circ)}.$$

* Initial & Final Value Theorem:-

$$\Rightarrow \boxed{x(0) = \lim_{s \rightarrow \infty} s X(s)}$$

I.V.T

$$\boxed{x(\infty) = \lim_{s \rightarrow 0} s X(s)}$$

F.V.T.

Note:-

→ Poles at Imaginary axis, F.V.T is not applicable.

→ F.V.T. is valid only if All Poles have -ve Real Parts except a simple Poles have -ve Real Parts except a

Simple Pole at $s=0$.

P 5.2.4. Find the initial & final value for the following T-F?

$$a) X(s) = \frac{2s+5}{s^2+5s+6}$$

Solⁿ:

$$\text{I.V.T.} \quad \lim_{s \rightarrow \infty} s \cdot \frac{2s+5}{s^2+5s+6}$$
$$x(0) = \lim_{s \rightarrow \infty} \frac{2s+5}{s^2+5s+6}$$

$$= \lim_{s \rightarrow \infty} \frac{s^2(2 + 5/s)}{s^2(1 + \frac{5}{s} + \frac{6}{s^2})}$$

\therefore ~~$x(0) = 0$~~

$x(0) = 2$

\Rightarrow

F.V.T.

$$x(\infty) = \lim_{s \rightarrow 0} \frac{s(2s+5)}{s^2+5s+6}$$

$x(\infty) = 0$

$$(b) X(s) = \frac{4s+5}{2s+1}$$

Solⁿ:

\downarrow
Proper T-F:

We require strictly Proper fⁿ.

$$\Rightarrow X(s) = \frac{4s+2+3}{2s+1}$$

$$X(s) = 2 + \frac{3}{2s+1} \text{ } \left. \vphantom{X(s)} \right\} \text{ strictly Proper.}$$

$$\Rightarrow x(0) = \lim_{s \rightarrow \infty} s \left[\frac{3}{2s+1} \right]$$

$$= \lim_{s \rightarrow \infty} \frac{3}{2 + 1/s}$$

$$\boxed{x(0) = 3/2}$$

$$\Rightarrow x(\infty) = \lim_{s \rightarrow 0} s \left[\frac{3}{2s+1} \right]$$

$$\therefore \boxed{x(\infty) = 0}$$

$$(c) X(s) = \frac{12(s+2)}{s(s^2+4)}$$

$$\text{Sol}^n: x(0) = \lim_{s \rightarrow \infty} \frac{\cancel{s} \cdot 12(s+2)}{\cancel{s}(s^2+4)} = \frac{12(1+\frac{2}{s})}{s(1+\frac{4}{s^2})} = 0.$$

here, Pole is on imaginary axis.

so, finaly value can not be determine.

$$(d) X(s) = e^{-s} \left[\frac{-2}{s(s+2)} \right]$$

$$\text{Sol}^n: x(0) = \lim_{s \rightarrow \infty} \cancel{s} \cdot e^{-s} \left[\frac{-2}{\cancel{s}(s+2)} \right]$$

$$\therefore \boxed{x(0) = 0}$$

$$\Rightarrow x(\infty) = \lim_{s \rightarrow 0} \cancel{s} \cdot e^{-s} \left[\frac{-2}{\cancel{s}(s+2)} \right]$$

$$= -\frac{2}{2}$$

$$\boxed{x(\infty) = -1}$$

Q * * * $X(s) = \frac{s}{s^2 + \omega_0^2}$

Soln: $x(\infty) = \lim_{s \rightarrow 0} \frac{s^2}{s^2 + \omega_0^2} = 0 \cdot X$

but I.L.T.

$x(t) = \cos(\omega_0 t) \cdot u(t)$

$-1 \leq x(t) \leq 1$
 $t \rightarrow \infty$

* * *
Q

$X(s) = \frac{1}{s-2}$

Soln: $x(\infty) = \lim_{s \rightarrow 0} \frac{s}{s-2} = 0 \cdot X$

I.L.T.

$x(t) = e^{2t}$

$x(t) \Big|_{t \rightarrow \infty} = \infty$

P 5.2.5

A LTI, Causal continuous time system has a rational T-F with simple poles at $s = -2$, and $s = -4$ and one of the simple pole zero at $s = -1$. A unit step $u(t)$ is applied as the input of the system. At steady state, the output has a constant value of 1. Find the impulse response?

Soln:

$H(s) = \frac{K(s+1)}{(s+2)(s+4)}$

$$\Rightarrow Y(\infty) = \lim_{s \rightarrow 0} s \cdot Y(s) = 1.$$

$$\therefore \lim_{s \rightarrow 0} s \cdot H(s) \cdot X(s) = 1.$$

$$\Rightarrow \lim_{s \rightarrow 0} s \cdot \frac{K(s+1)}{(s+2)(s+4)} \cdot \frac{1}{s} = 1$$

$$\Rightarrow \frac{K(0+1)}{(0+2)(0+4)} = 1$$

$$\boxed{K=8}$$

$$\Rightarrow H(s) = \frac{8(s+1)}{(s+2)(s+4)}$$

$$\Rightarrow H(s) = \frac{12}{(s+4)} - \frac{4}{(s+2)}$$

$$\Rightarrow \boxed{h(t) = 12e^{-4t} \cdot u(t) - 4e^{-2t} \cdot u(t)}$$

P 5.2.6. An LTI system having TF

$$\frac{s^2+1}{s^2+2s+1} \text{ \& input } x(t) = \sin(t+1) \text{ is in}$$

steady state. The output is sampled at ω_s rad/sec to obtain final output $\{y(k)\}$ which of the following is true?

(a) $y(0) = 0$ for all ω_s .

(b) $y(0) \neq 0$ for all ω_s .

(C) $y(\cdot) \neq 0$ for $\omega_s > 2$ but zero for $\omega_s < 2$.

(D) $y(\cdot) = 0$ for $\omega_s > 2$ but non zero for $\omega_s < 2$.

Soln:

$$H(s) = \frac{s^2 + 1}{s^2 + 2s + 1}$$

$$H(j\omega) = \frac{-\omega^2 + 1}{-\omega^2 + 2j\omega + 1}$$

$$H(j\omega) \Big|_{\omega=1} = \frac{-1+1}{-1+2j+1} = 0.$$

So, ans: (A) $y(\cdot) = 0$ for all ω_s .

P 5.2.7 What is the output as $t \rightarrow \infty$

for a system that has T.F., $G(s) = \frac{2}{s^2 - s - 2}$

when subjected to a step input?

(A) -1 (B) 1 (C) 2 (D) unbounded.

Soln:

$$G(s) = \frac{2}{s^2 - s - 2}$$

$$= \frac{2}{s^2 - s + \frac{1}{4} - \frac{9}{4}}$$

$$G(s) = \frac{2}{(s - \frac{1}{2})^2 - (\frac{3}{2})^2}$$

Poles: $s_1, s_2 : \frac{1}{2} \pm \frac{3}{2} = 2, -1$.

Poles are Right hand side of the

s plane. So, Ans: (D) unbounded.

P 5.2.8 Consider a system described by the T.F. $G(s) = \frac{2s+3}{s^2+2s+5}$ when it is subjected to an input of $10u(t)$, find the initial & final values of the response.

Soln:

$$Y(s) = H(s) \cdot X(s).$$

$$Y(s) = \frac{2s+3}{s^2+2s+5} \times \frac{10}{s}.$$

$$\therefore y(0) = \lim_{s \rightarrow \infty} s \times \frac{10}{s} \times \frac{2s+3}{(s^2+2s+5)}$$

$$\boxed{y(0) = 0}$$

$$\begin{aligned} \Rightarrow y(\infty) &= \lim_{s \rightarrow 0} s \times \frac{10}{s} \times \frac{2s+3}{(s^2+2s+5)} \\ &= \frac{10 \times 3}{(0+0+5)} \end{aligned}$$

$$\boxed{y(\infty) = 6}$$

P 5.2.9 Let a signal $a_1 \sin(\omega_1 t + \phi_1)$ be applied to a stable LTI system. Let the corresponding steady state output be represented as $F_2 (\omega_2 t + \phi_2)$. Then which of the following statement is TRUE?

- (A) F is not necessarily a "sine" or "cosine" function but must be periodic & $\omega_1 = \omega_2$
- (B) F must be "sine" (or) "cosine" with $a_1 = a_2$
- (C) F must be "sine", $\omega_1 = \omega_2$, $a_1 \neq a_2$.
- (D) F must be "sine" (or) "cosine" functions with $\omega_1 = \omega_2$.

Solⁿ: Input freq. and output freq. should remain same. so. $\omega_1 = \omega_2$.

→ Function can be sine (or) cosine.

→ Amplitude can be change.

so, Ans - (D).

* Causality & Stability :-

⇒ For a causal system $h(t) = 0$; $t < 0$ and thus is right-sided and the ROC associated with the system t^n for a causal system is a right-half plane.

⇒ An LTI system is stable if and only if the ROC of the system function $H(s)$ include $j\omega$ axis.

\Rightarrow For the T.F. to be both causal and stable all poles must lie in the left half of s-plane with -ve Real parts.

P 5.3.1 Given $H(s) = \frac{s-1}{(s+1)(s+2)}$. Find $h(t)$

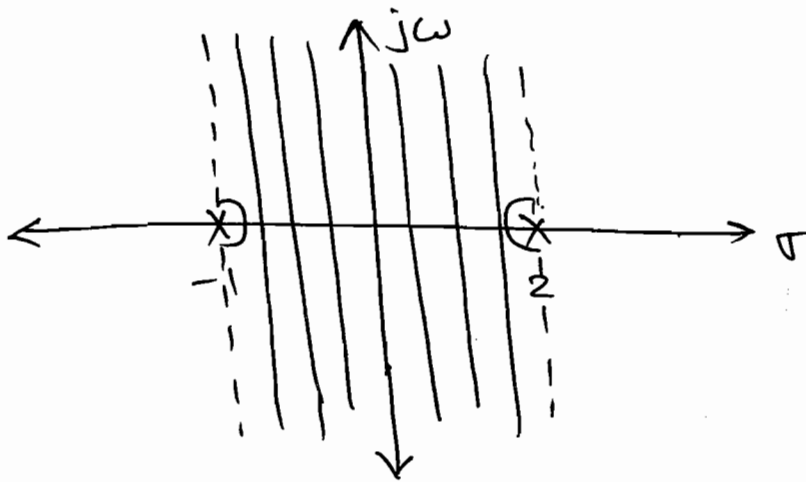
for each of the following cases.

(i) Stable.

Soln:

$$H(s) = \frac{s-1}{(s+1)(s+2)}$$

$$\Rightarrow H(s) = \frac{\frac{2}{3}}{(s+1)} + \frac{\frac{1}{3}}{(s+2)}$$



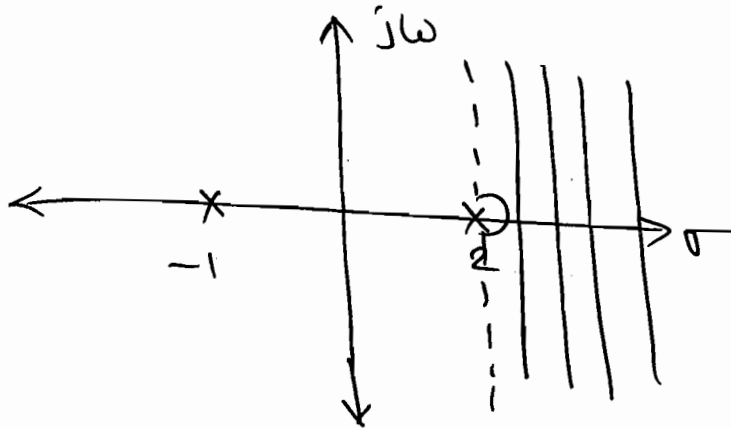
$$\Rightarrow \boxed{-1 < \sigma < 2}$$

$$\therefore \boxed{h(t) = \frac{2}{3} e^{-t} u(t) - \frac{1}{3} e^{2t} u(-t)}$$

(ii) Causal:

$$\Rightarrow H(s) = \frac{\frac{2}{3}}{(s+1)} + \frac{\frac{1}{3}}{s-2}$$

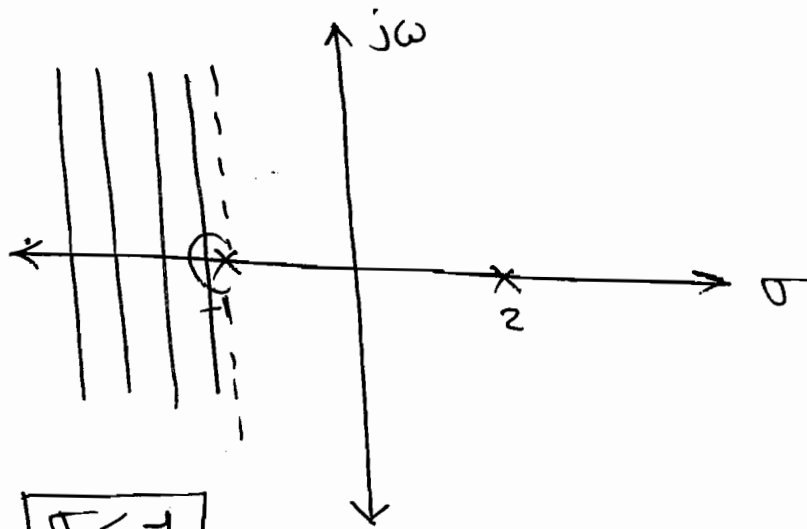
⇒



$$\sigma > 2$$

$$\text{So, } h(t) = \frac{2}{3} e^{-t} u(t) + \frac{1}{3} e^{2t} u(-t).$$

(iii) neither Causal nor stable.



$$\sigma < -1$$

$$\text{So, } h(t) = -\frac{2}{3} e^{-t} u(-t) + \left(-\frac{1}{3}\right) e^{2t} u(t).$$

PS. 3.2

Given $X(s) = \frac{s-5}{s^2-s-6}$ & F.T. of the

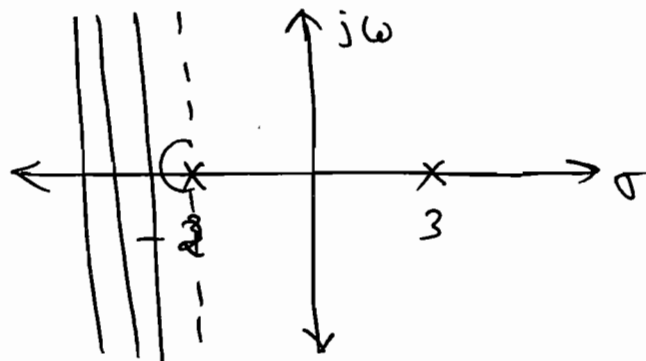
signal is defined then $x(t)$ is _____.

Solⁿ: The given system is unstable.

$$X(s) = \frac{s-5}{s^2-s-6}$$

$$X(s) = \frac{5-s}{(s-3)(s+2)}$$

$$\Rightarrow X(s) = \frac{\frac{2}{5}}{(s-3)} - \frac{7/5}{(s+2)}$$



$$\sigma < -2$$

$$\therefore x(t) = -\frac{2}{5} e^{3t} u(-t) + \frac{7}{5} e^{-2t} u(-t)$$

P 5.3.3 Consider an LTI system for which we are given the following

information $X(s) = \frac{s+2}{s-2}$ and $x(t) = 0, t > 0$,

and output is $y(t) = -\frac{2}{3} e^{2t} u(-t) + \frac{1}{3} e^{-t} u(t)$

(a) Find T.F. & R.O.C.?

(b) Find the output if input is $x(t) = e^{3t}$ using part (a)?

Solⁿ: $X(s) = \frac{s+2}{s-2}$ and $x(t) = 0, t > 0$

i.e. signal is left sided.


Hence, R.O.C $\sigma < 2$

Now, $y(t) = -\frac{2}{3} e^{2t} u(-t) + \frac{1}{3} e^{-t} u(t)$

$$Y(s) = \frac{\frac{2}{3}}{(s-2)} + \frac{\frac{1}{3}}{(s+1)}$$

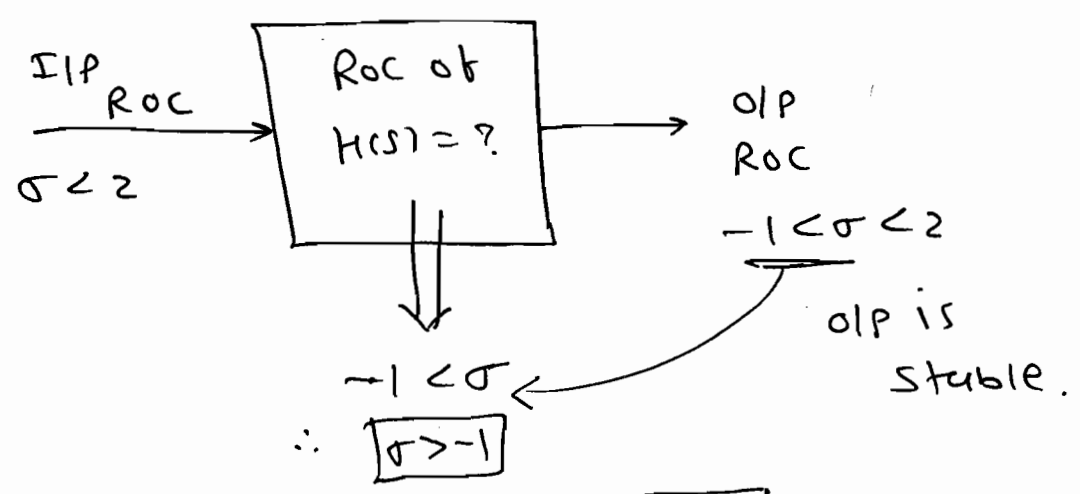
$$= \frac{1}{3} \left[\frac{2s+2 + s-2}{(s-2)(s+1)} \right]$$

$$Y(s) = \frac{s}{(s-2)(s+1)}$$



$$\begin{aligned} \text{T.F.} \Rightarrow H(s) &= \frac{Y(s)}{X(s)} = \frac{s}{(s-2)(s+1)} \cdot \frac{(s+2)}{(s-2)} \\ &= \frac{s}{\cancel{(s-2)}(s+1)} \times \frac{\cancel{s-2}}{(s+2)} \end{aligned}$$

$$H(s) = \frac{s}{(s+1)(s+2)}$$



$$\therefore H(s) = \frac{s}{(s+1)(s+2)} ; \text{ROC: } \sigma > -1$$

(b) Find $x(t)$

$$x(t) = e^{3t}$$

if i/p $x(t) = e^{st} \Rightarrow$ o/p $y(t) = e^{st} \cdot H(s)$

here $s=3$

$$\therefore y(t) = e^{3t} \cdot H(s) \Big|_{s=3}$$

$$= \frac{e^{3t} \times 3}{(4)(5)}$$

$$y(t) = \frac{3}{20} \cdot e^{3t}$$

P 5.3.4 Consider an LTI system with input $x(t)$ and output $y(t)$ related as

$$\frac{dy(t)}{dt} + 3y(t) = \frac{d^2x(t)}{dt^2} + \frac{dx(t)}{dt} - 2x(t).$$

Find the T.F. of inverse system. Does a stable & causal inverse system exist?

Solⁿ:

$$\xrightarrow{\text{L.T.}} Sy(s) + 3y(s) = s^2x(s) + sx(s) - 2x(s).$$

$$\therefore \frac{y(s)}{x(s)} = H(s) = \frac{(s^2 + s - 2)}{(s+3)}$$

$$\therefore H_{\text{Inv}}(s) = \frac{(s+3)}{(s^2 + s - 2)}$$

$$H_{\text{Inv}}(s) = \frac{(s+3)}{(s+2)(s-1)}$$

for causal system poles must be lies on left hand side so can't be causal & stable simultaneously.

\Rightarrow The system is stable if $\boxed{-2 < \sigma < 1}$.

P5.3-5

Which ^{one} of the following statements

is NOT TRUE for a continuous time causal and stable LTI sys?

(A) All the poles of the system must lie on the left side of the $j\omega$ axis.

(B) Zeros of the system can lie anywhere in the s -plane.


(C) All the poles must lie within $|s|=1$.

(D) All the roots of the characteristic equation must be located on the left side of the $j\omega$ axis.

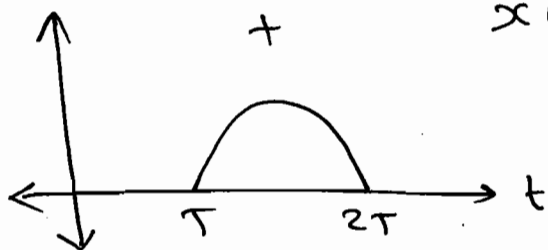
Ans: (C)

* L.T. of Switched Periodic Signal:

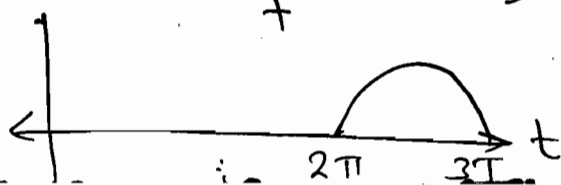
$\Rightarrow x(t) \cdot u(t) \leftrightarrow X(s)$



$x(t-T) \cdot u(t-T) \leftrightarrow e^{-sT} \cdot X(s)$



$x(t-2T) \cdot u(t-2T) \leftrightarrow e^{-2sT} \cdot X(s)$



$$\Rightarrow Y(s) = X(s) \left[1 + e^{-sT} + e^{-2sT} + e^{-3sT} + \dots \right]$$

$$\therefore Y(s) = X(s) \times \frac{1}{1 - e^{-sT}}$$

$$Y(s) = \frac{X(s)}{1 - e^{-sT}}$$

$$\Rightarrow Y_p(s) = \frac{\int_0^T x(t) \cdot e^{-st} \cdot dt}{1 - e^{-sT}}$$

eg Find the L.T. of the periodic signal shown in fig. 1.

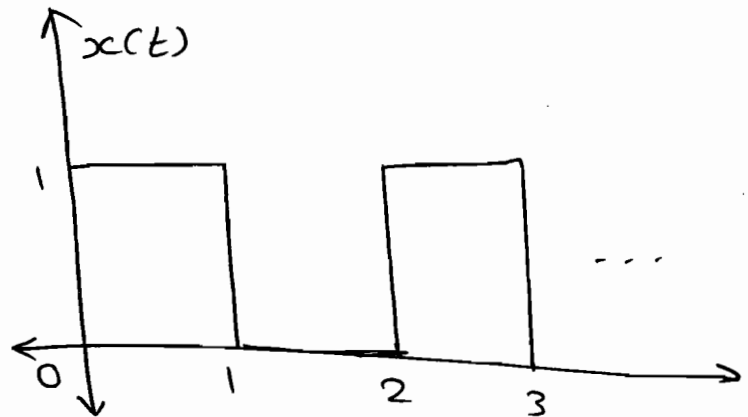
Soln: $T = 2$

$$X_p(s) = \frac{\int_0^T x(t) \cdot e^{-st} \cdot dt}{1 - e^{-sT}}$$

$$= \frac{\int_0^2 x(t) \cdot e^{-st} \cdot dt}{1 - e^{-2s}}$$

$$= \frac{\int_0^1 1 \cdot e^{-st} \cdot dt}{1 - e^{-2s}}$$

$$= \frac{\left[\frac{e^{-st}}{-s} \right]_0^1}{1 - e^{-2s}}$$



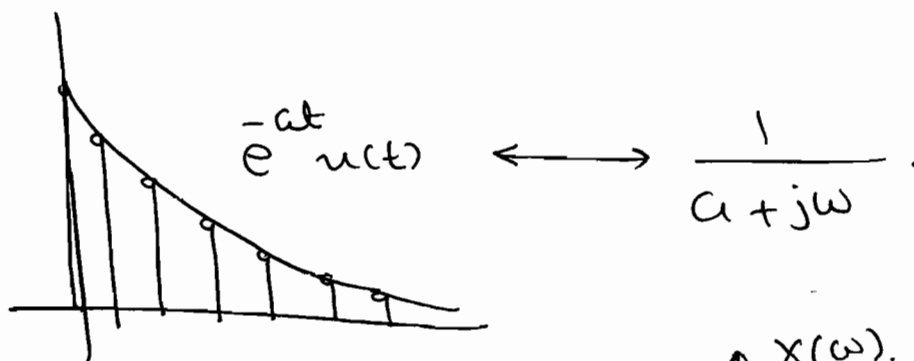
$$= \frac{\frac{1}{s} - \frac{e^{-s}}{s}}{1 - e^{-2s}}$$

$$\therefore X_p(s) = \frac{1 - e^{-s}}{s(1 - e^{-2s})}$$

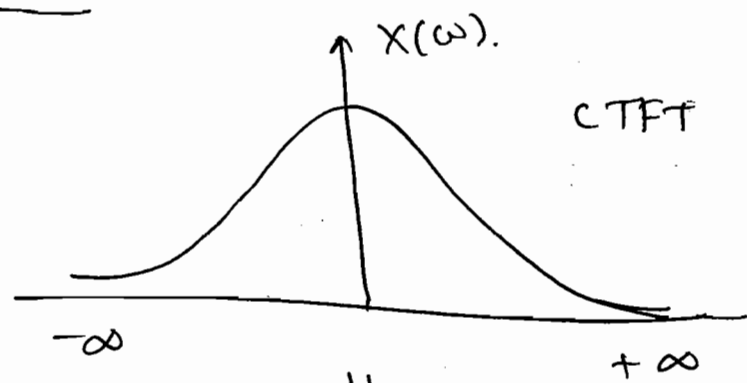
Ch-6 - DTFT

- The DTFT describes the spectrum of discrete signals & formalizes that discrete signals have periodic spectra.

→ The freq. range for a discrete signal is unique over $(-\pi, +\pi)$ (or) $(0, 2\pi)$.

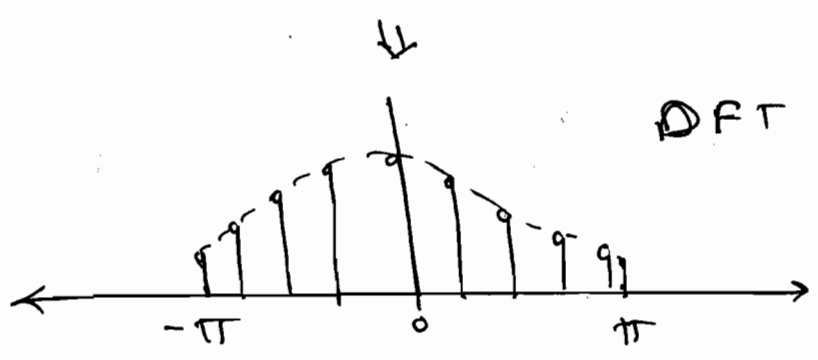
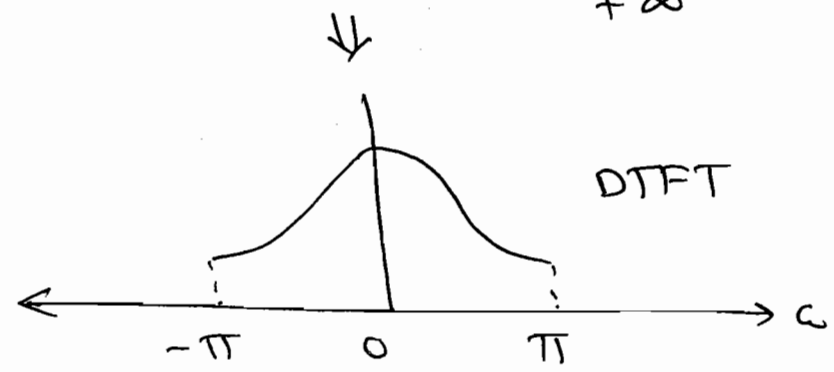


$$\longleftrightarrow \frac{1}{a + j\omega}$$



$$x[n] \longleftrightarrow X(e^{j\omega})$$

(or) $X(\omega)$.



\Rightarrow CT FT	D.T. F.T.
$\omega: -\infty$ to $+\infty$	$\omega: -\pi$ to $+\pi$ (or) 0 to 2π
Non-Periodic	Periodic

$$\Rightarrow \text{D.T.F.T. } X(e^{j\omega}) = \sum_{n=-\infty}^{+\infty} x(n) \cdot e^{-j\omega n}$$

$$\Rightarrow \text{I.D.T.F.T. } x(n) = \frac{1}{2\pi} \int_{\langle 2\pi \rangle} X(e^{j\omega}) e^{j\omega n} d\omega$$

$$\Rightarrow \text{F.S.} \xleftrightarrow{\text{Dual}} \text{D.T.F.T.}$$

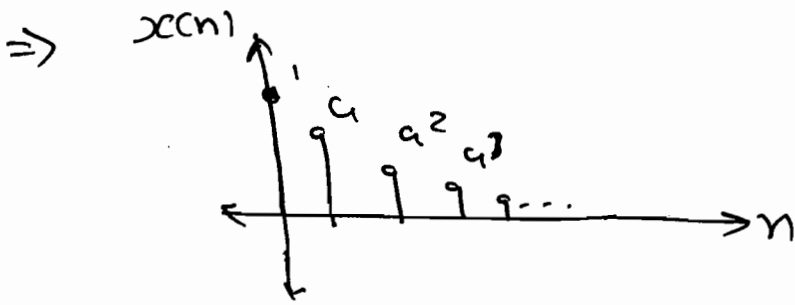
* Convergence of DTFT.

\Rightarrow A sufficient condition for existence

of DTFT is $\sum_{n=-\infty}^{+\infty} |x(n)| < \infty$.

- Some sequences are not absolutely summable, but they are square summable.
- There are signals that are neither absolutely summable nor have finite energy, but still have DTFT.

e.g. $x[n] = a^n \cdot u[n] ; |a| < 1.$



$$\therefore X_1(e^{j\omega}) = \sum_{n=-\infty}^{\infty} x[n] \cdot e^{-j\omega n}$$

$$= \sum_{n=0}^{+\infty} a^n \cdot e^{-j\omega n}$$

$$= \sum_{n=0}^{+\infty} (a \cdot e^{-j\omega})^n$$

$$= 1 + a e^{-j\omega} + (a e^{-j\omega})^2 + \dots$$

$$\therefore X_1(e^{j\omega}) = \frac{1}{1 - a e^{-j\omega}}$$

\Rightarrow

$$X_1(e^{j\omega}) = \frac{1}{1 - a(\cos\omega - j \sin\omega)}$$

$$X_1(e^{j\omega}) = \frac{1}{(1 - a \cos\omega) + j a \sin\omega}$$

$$|X(\omega)| = \frac{1}{\sqrt{(1 - a \cos\omega)^2 + a^2 \sin^2\omega}}$$

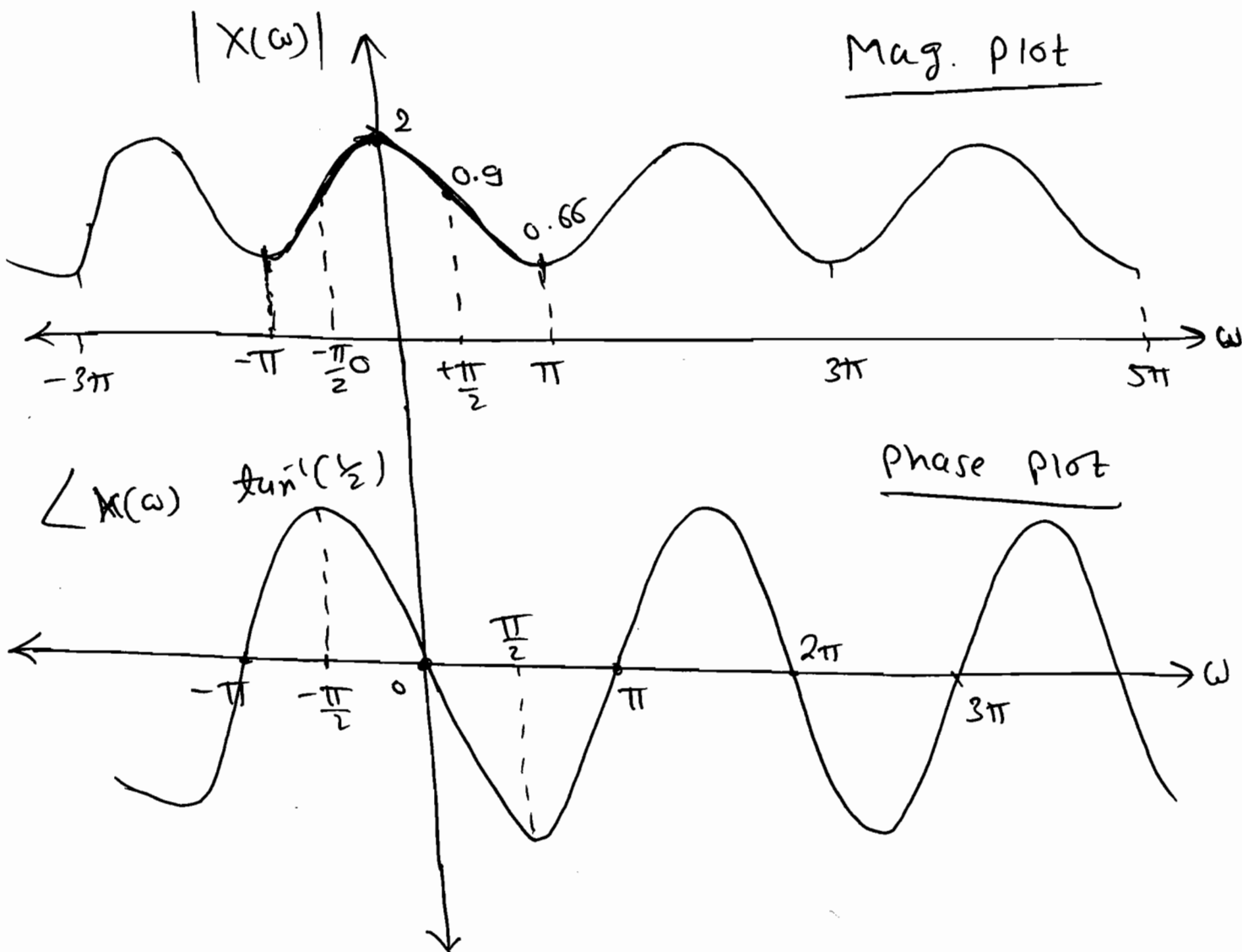
$$= \frac{1}{\sqrt{1 - 2a \cos\omega + a^2}}$$

let, $a = \frac{1}{2}$.

$$\therefore |X(\omega)| = \frac{1}{\sqrt{1.25 - \cos \omega}}$$

$$\angle X(\omega) = -\tan^{-1} \left[\frac{a \sin \omega}{1 - a \cos \omega} \right]$$

$$\angle X(\omega) = -\tan^{-1} \left[\frac{\frac{1}{2} \sin \omega}{1 - \frac{1}{2} \cos \omega} \right]$$



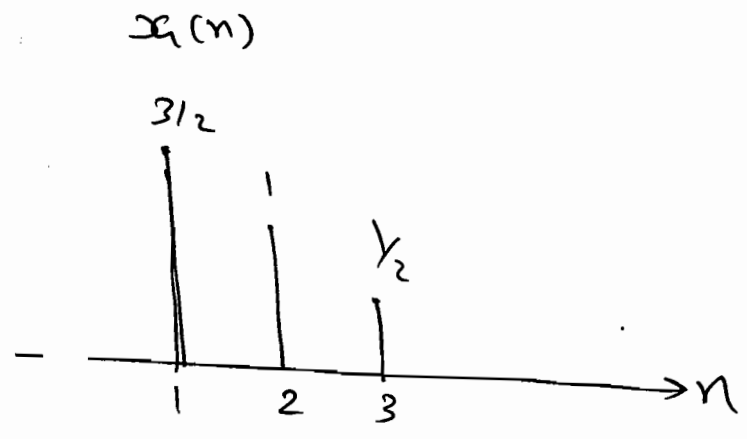
* Periodicity Property:

$$\Rightarrow X(e^{j(\omega+2\pi)}) = X(e^{j\omega})$$

is or not the F.T. of the signal frequency response?

$$\frac{\sin(\omega(3 + \frac{1}{2}))}{\sin(\omega/2)}$$

↙ N_1



$$\sum_{n=-\infty}^{\infty} x[n] \cdot e^{-j\omega n}$$

$$x[n] \cdot e^{-j\omega n}$$

$$+ e^{j\omega 3} + 1 \left[e^{-j\omega 2} + e^{j\omega 2} \right]$$

$$3/2 \left[e^{-j\omega} + e^{j\omega} \right] + 2$$

$$+ \frac{1}{2} \cos 2\omega + 3 \cos \omega + 2$$

ansd.

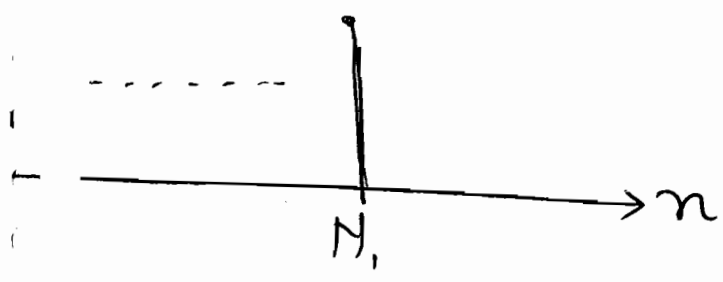
then

$$e^{j\omega}$$

then

$$e^{j(\omega - \omega_0)}$$

$$-e^{-j\omega}$$

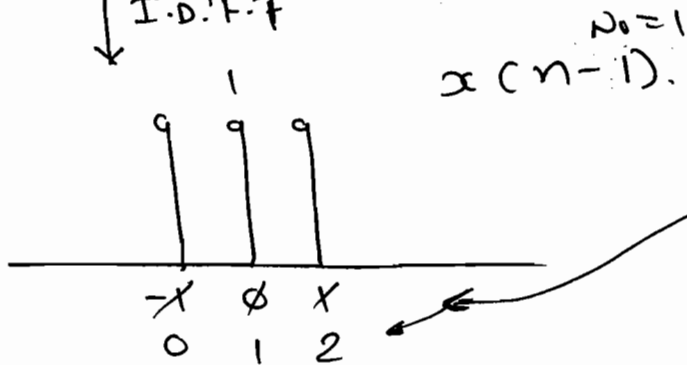


Soln:

$$H(\omega) = \frac{\sin\left(\omega\left(1 + \frac{1}{2}\right)\right)}{\sin\left(\omega/2\right)} \cdot e^{-j\omega(1)}$$

$N_1 = 1$
 $N_0 = 1$

I.D.T.F.F



So, given system is Causal.

$$(c) \quad H(\omega) = \frac{e^{-j3\omega}}{1} + \frac{e^{+j2\omega}}{1}$$

Soln:

$$\delta(n) \xleftrightarrow{\text{D.T.F.T}} 1$$

$$\therefore h(n) = \delta(n-3) + \delta(n+2)$$

↓

given system is Non-Causal.

P 6-1.2. (a) Let $x(n] = \left(\frac{1}{2}\right)^n \cdot u(n)$, $y(n] = x^2(n)$.

& $Y(e^{j\omega})$ be the F.T. of $y(n)$. Then

$Y(e^{j\omega})$ is _____

Soln:

$$Y(\omega) = \sum_{n=-\infty}^{\infty} y(n) \cdot e^{-j\omega n}$$

$$= \sum_{n=-\infty}^{+\infty} x^2(n) \cdot e^{-j\omega n}$$

$$\Rightarrow x(n) = \left(\frac{1}{2}\right)^n \cdot u(n).$$

$$x^2(n) = \left(\frac{1}{2}\right)^{2n} \cdot u(n) = \left(\frac{1}{4}\right)^n \cdot u(n).$$

$$\therefore Y(\omega) = \sum_{n=-\infty}^{\infty} \left(\frac{1}{4}\right)^n \cdot e^{-j\omega n}$$

$$\therefore Y(e^{j0}) = \sum_{n=-\infty}^{\infty} \left(\frac{1}{4}\right)^n \cdot e^{-j\omega(0)}$$

$$\therefore Y(e^{j0}) = \sum_{n=-\infty}^{\infty} \left(\frac{1}{4}\right)^n$$

$$\Rightarrow Y(e^{j0}) = \frac{1}{1 - \frac{1}{4}} = \frac{4}{3}$$

$$\therefore \boxed{Y(e^{j0}) = \frac{4}{3}}$$

(b) Given $X(e^{j\omega}) = \cos^3(3\omega)$, the find

the sum $S = \sum_{n=-\infty}^{+\infty} (-1)^n \cdot x(n)$.

$$\stackrel{\text{sum}}{=} X(e^{j\omega}) = \sum_{n=-\infty}^{\infty} x(n) \cdot e^{-j\omega n}$$

let, $\omega = \pi$

$$\therefore X(e^{j\pi}) = \sum_{n=-\infty}^{\infty} x(n) \cdot e^{-j\pi n}$$

$$\therefore X(e^{j\pi}) = \sum_{n=-\infty}^{+\infty} x(n) \cdot (-1)^n = S.$$

$$\therefore S = \sum_{n=-\infty}^{\infty} (-1)^n \cdot x(n) = X(e^{j\pi})$$

$$= \cos^3(3\pi)$$

$$= (-1)^3 = -1.$$

$\therefore \boxed{S = -1}$

(c) What is the d.c. & high-frequency gain of the filter described by

$$h(n) = \{1, 2, 3, 4\}.$$

Soln:

$$H(\omega) = \sum_{n=-\infty}^{+\infty} h(n) \cdot e^{-j\omega n}$$

$$\therefore H(\omega) = \sum_{n=0}^3 h(n) \cdot e^{-j\omega n}$$

$$\therefore H(\omega) = 1 + 2e^{-j\omega(1)} + 3e^{-j2\omega} + 4e^{-j3\omega}$$

for d.c. gain $\omega = 0$.

$$\therefore H(0) = \sum_{n=0}^3 h(n) \cdot (1) = 1 + 2 + 3 + 4 = 10.$$

for high freq. gain $\omega = \pi$

$$\therefore H(e^{j\pi}) = \sum_{n=0}^3 h(n) \cdot (-1)^n = 1 - 2 + 3 - 4 = -2.$$

$$\text{D.C. gain} = H(0) = \sum_{n=-\infty}^{\infty} x(n).$$

$$\text{H.F. gain} = H(e^{j\pi}) = \sum_{n=-\infty}^{+\infty} x(n) \cdot (-1)^n$$

P 6.1.3. Find the F.T. of

(i) $y_1(n) = \left(\frac{1}{4}\right)^n \cdot u(n-3)$.

Soln:

$$y_1(n) = \left(\frac{1}{4}\right)^{(n-3)+3} \cdot u(n-3)$$

↓ F.T. = $\frac{1}{64} \cdot \left[\left(\frac{1}{4}\right)^{n-3} \cdot u(n-3) \right]$ $n_0=3$

$$Y(\omega) = \frac{1}{64} \cdot \frac{e^{-j3\omega}}{1 - \frac{1}{4} \cdot e^{-j\omega}}$$

(ii) $y_2(n) = \delta(n-n_0)$.

Soln:

$$y_2(n) = \delta(n-n_0)$$

↓ F.T.

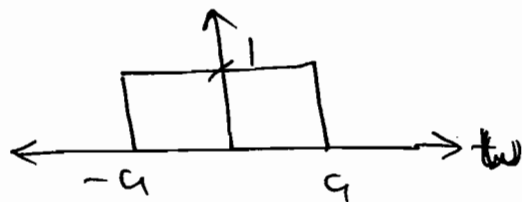
$$Y(\omega) = e^{-j\omega n_0} \cdot 1$$

*

Cont'n:

$$\frac{\sin at}{\pi t}$$

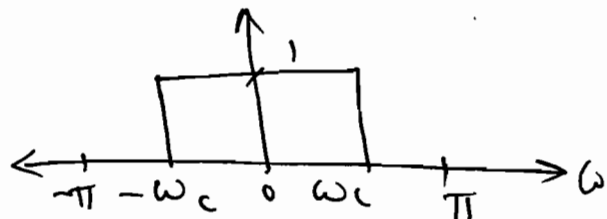
← F.T. →



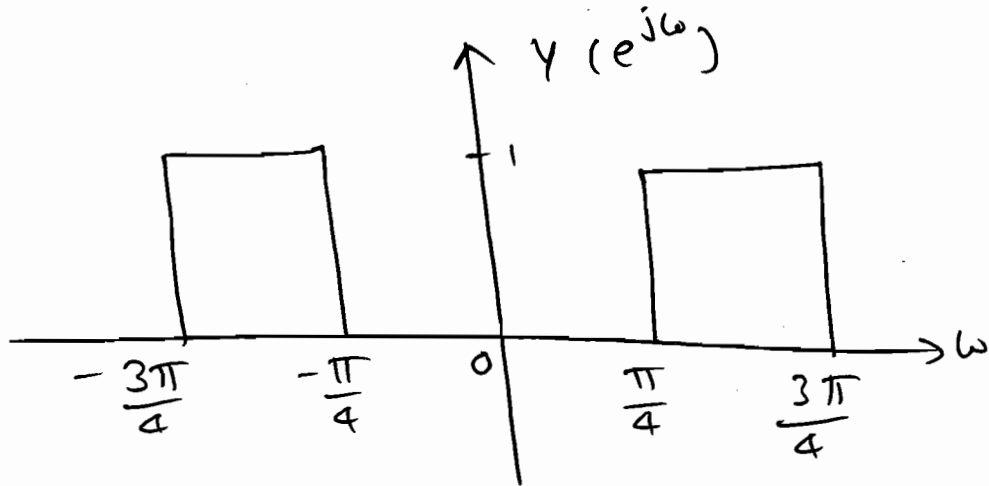
Dist:

$$\frac{\sin \omega_c \pi}{\pi \omega}$$

← F.T. →

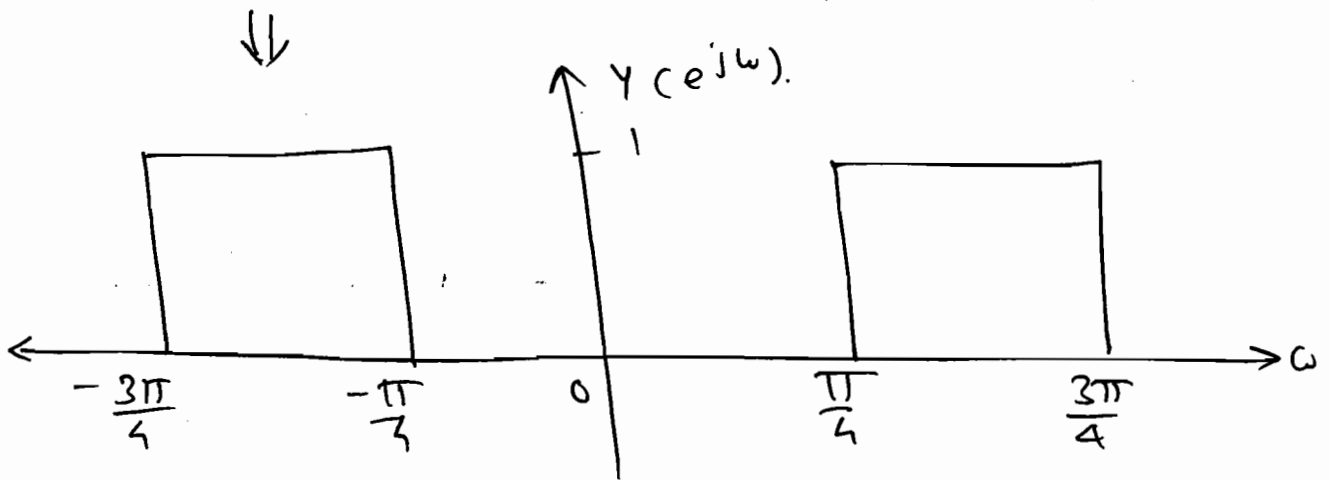
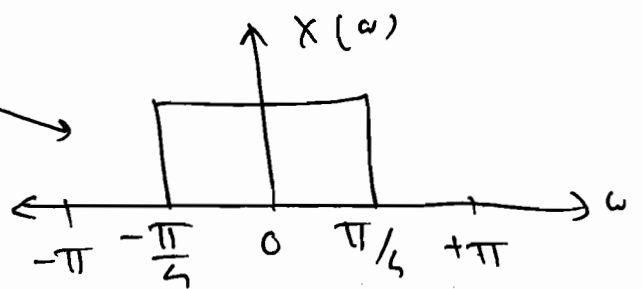


P6.1.4 Find the signal corresponding to the spectrum shown in figure?



Soln:

let, $x(n) = \frac{\sin \frac{\pi}{4} n}{\frac{\pi}{4} n}$



$$\therefore Y(e^{j\omega}) = x \left[e^{+j(\omega - \frac{\pi}{2})} \right] + x \left[e^{j(\omega + \frac{\pi}{2})} \right]$$

↓ I.F.T

$$y(n) = x(n) \cdot e^{j\omega \frac{\pi}{2} n} + x(n) \cdot e^{-j\frac{\pi}{2} n}$$

$$\therefore y(n) = x(n) \cdot e^{+j\frac{\pi}{2} n} + x(n) \cdot e^{-j\frac{\pi}{2} n}$$

$$y(n) = 2x(n) \cdot \cos\left(\frac{\pi}{2} n\right)$$

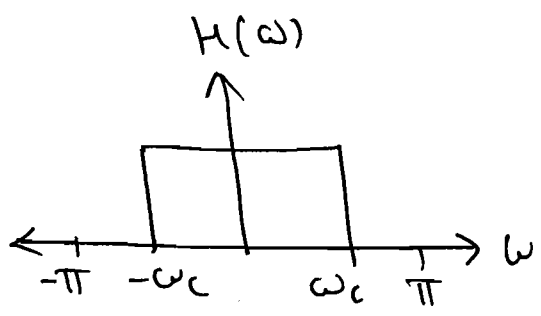
P 6.15

(a) Let $h(n)$ is the impulse response of ideal L.P.F. with cutoff frequency ω_c , what type of filter has unit impulse response $g(n) = (-1)^n h(n)$.

Sum:

$$h(n) \leftrightarrow H(\omega)$$

$$\therefore h(n) = \frac{\sin \omega_c n}{n\pi} \xleftrightarrow{F.T.}$$

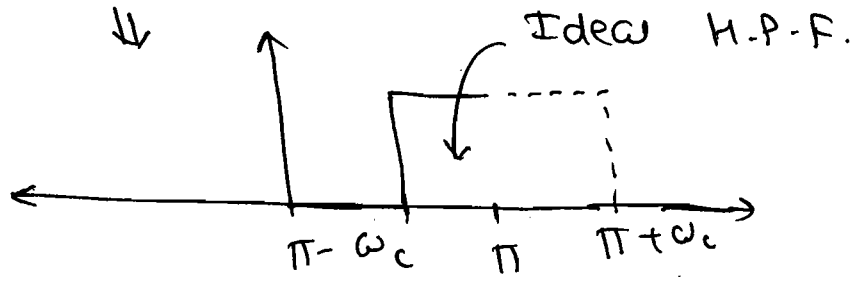


$$\Rightarrow g(n) = (-1)^n h(n)$$

$$g(n) = e^{jn\pi} h(n)$$

↓ F.T.

$$G(e^{j\omega}) = H(e^{j(\omega - \pi)})$$

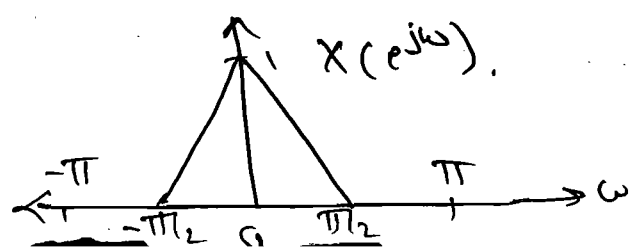


⇒ Type of filter is Ideal HPF.

(b) A discrete system with input $x(n]$ & output $y(n)$ are related as

$$y(n) = x(n) + (-1)^n x(n)$$

If the input spectrum $X(e^{j\omega})$ is shown below the o/p spectrum at $\omega=0$ & $\omega=\pi$ are.

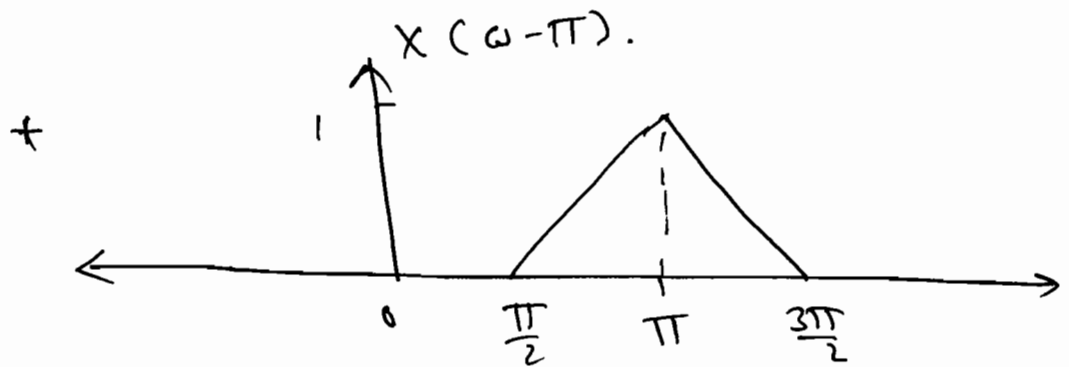
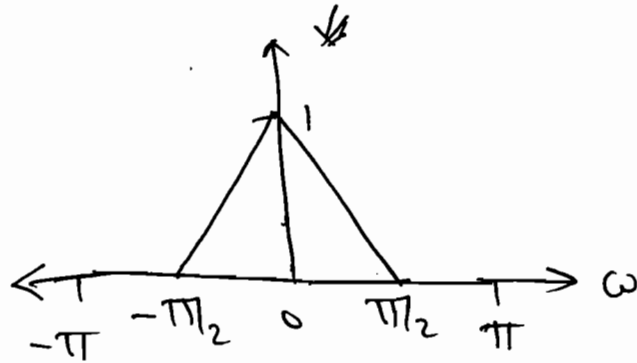


Soln. $y(n) = x(n) + (-1)^n \cdot x(n).$

$\Rightarrow y(n) = x(n) + e^{jn\pi} \cdot x(n).$

↓ F.T.

$\therefore Y(e^{j\omega}) = X(e^{j\omega}) + X(e^{j(\omega - \pi)}).$



So, The old spectrum i.e.

$Y(e^{j\omega})$ at $\omega = 0$ is 1 and
 $\omega = \pi$ is also 1.

* Time-Scaling :-

\Rightarrow $x(n) \leftrightarrow X(e^{j\omega})$, then $x[n/k] \leftrightarrow X(e^{j\omega/k})$
 then $x(n/k) \leftrightarrow X(e^{j\omega k}).$

\Rightarrow n is integer multiple of k.

P 6.1.6. Find the I.F.T. of $Y(e^{j\omega})$

$$Y(e^{j\omega}) = \frac{1}{1 - \frac{1}{2} \cdot e^{-j\omega}}$$

Soln:

$$Y(e^{j\omega}) = \frac{1}{1 - \frac{1}{2} \cdot e^{-j\omega}} \quad \leftarrow k=0.$$

↓ I.F.T.

$$\therefore y(n) = \left(\frac{1}{2}\right)^{\frac{n}{10}} \cdot u\left(\frac{n}{10}\right), \quad n=0, 10, 20, \dots$$

P 6.1.7. If the DTFT of $x(n) = \left(\frac{1}{5}\right)^n \cdot u(n+2)$ is $X(e^{j\omega})$, find the sequence that has a DTFT given $Y(e^{j\omega}) = X(e^{j2\omega})$.

Soln:

$$Y(e^{j\omega}) = X(e^{j2\omega})$$

↓
k=2

↓ I.F.T.

$$\therefore y(n) = x(n/k) = x(n/2)$$

$$\therefore y(n) = \left(\frac{1}{5}\right)^{n/2} \cdot u\left(\frac{n}{2} + 2\right), \quad n=0, 2, 4, 6, \dots$$

* Frequency Differentiation:-

$$\Rightarrow -jn x(n) \longleftrightarrow \frac{d}{d\omega} X(e^{j\omega})$$

\Rightarrow

$$n x(n) \longleftrightarrow j \frac{d}{d\omega} X(e^{j\omega})$$

P.6.1.8. Find the F.T. of $y(n) = n a^n \cdot u(n)$?

Soln: Let, $x(n) = a^n \cdot u(n)$.

\downarrow F.T.

$$\therefore X(e^{j\omega}) = \frac{1}{1 - a e^{-j\omega}}$$

$$\therefore n a^n \cdot u(n) \longleftrightarrow j \frac{d}{d\omega} (X(e^{j\omega}))$$

$$Y(e^{j\omega}) = j \frac{d}{d\omega} \left[\frac{1}{1 - a e^{-j\omega}} \right]$$

$$= j \frac{-a(-j) \cdot e^{-j\omega}}{(1 - a e^{-j\omega})^2}$$

$$Y(e^{j\omega}) = \frac{j^2 a \cdot e^{-j\omega}}{(1 - a e^{-j\omega})^2}$$

$$Y(e^{j\omega}) = \frac{-a \cdot e^{-j\omega}}{(1 - a e^{-j\omega})^2}$$

P.6.1.9. Find the value of $\sum_{n=0}^{\infty} n \left(\frac{1}{2}\right)^n$?

Soln:

$$\sum_{n=0}^{\infty} n \left(\frac{1}{2}\right)^n = \frac{-a \cdot e^{j\omega}}{(1 - a e^{-j\omega})^2} \Bigg|_{\omega=0} = \frac{-a \cdot e^{-j0}}{(1 - a e^{-j0})^2}$$

$$\Rightarrow \sum_{n=0}^{\infty} n \left(\frac{1}{2}\right)^n = \frac{-\frac{1}{2}}{\left(1 - \frac{1}{2}\right)^2}$$

$$\sum_{n=0}^{\infty} n \cdot \left(\frac{1}{2}\right)^n = \frac{-\frac{1}{2}}{\left(\frac{1}{2}\right)^2} = -2$$

P 6.1.10 Find the F.T. of $x(n) = n e^{j\frac{n\pi}{8}} \alpha^{n-3} u(n-3)$.

Soln:

$$x(n) = n \cdot e^{j\frac{n\pi}{8}} \alpha^{n-3} u(n-3)$$

$$= j \frac{d}{d\omega} \left[\frac{e^{-j(\omega - \frac{\pi}{8}) \cdot 3}}{1 - \alpha e^{-j(\omega - \frac{\pi}{8})}} \right]$$

* Convolution in time :-

$$\Rightarrow x(n) \longleftrightarrow X(e^{j\omega})$$

$$h(n) \longleftrightarrow H(e^{j\omega}) \quad \text{then}$$

$$x(n) * h(n) \longleftrightarrow X(e^{j\omega}) \cdot H(e^{j\omega})$$

Note:-

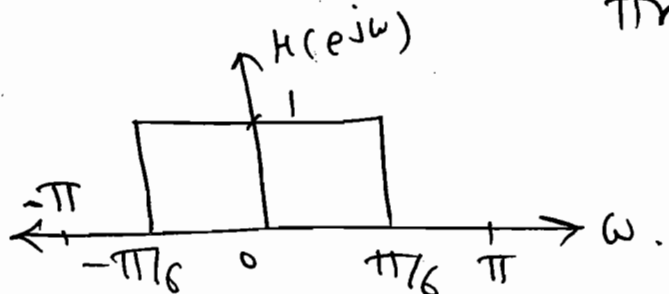
\Rightarrow F.T. of impulse response is known as frequency response.

P 6.1.11 Consider $x(n] = \sin\left(\frac{n\pi}{8}\right) - 2\cos\left(\frac{n\pi}{4}\right)$.

if the impulse response is $h(n) = \frac{\sin\left(\frac{n\pi}{6}\right)}{\pi n}$.

Soln:

$$h(n) = \frac{\sin\frac{n\pi}{6}}{\pi n} \xrightarrow{\text{F.T.}}$$



So, only $\sin\left(\frac{\pi m}{8}\right)$ will be passed through

hcm.

hence o/p is

$$y(m) = \sin\left(\frac{\pi m}{8}\right)$$

P 6.1.12 An L.T.I. system is having impulse response

$$h(m) = \begin{cases} 4\sqrt{2} & ; n=2, -2 \\ -2\sqrt{2} & ; n=1, -1 \\ 0 & ; \text{elsewhere.} \end{cases}$$

Find the output when input applied is

$$x(m) = e^{jn\pi/4}$$

Soln:

$$H(e^{j\omega}) = \sum_{n=-\infty}^{\infty} h(n) \cdot e^{-j\omega n}$$

$$H(e^{j\omega}) = 4\sqrt{2} \left[e^{-j2\omega} + e^{j2\omega} \right] + (-2\sqrt{2}) \left[e^{j\omega} + e^{-j\omega} \right]$$

$$H(e^{j\omega}) = 8\sqrt{2} \cos 2\omega - 2\sqrt{2} \cos \omega$$

Now, $x(m) = e^{jn\pi/4}$

\therefore if i/p is $x(m) = e^{j\omega n} \Rightarrow y(m) = e^{j\omega n} \cdot H(\omega)$

$$\Rightarrow x(m) = e^{jn\pi/4} \Rightarrow y(m) = e^{jn\pi/4} \cdot H(\omega) \Big|_{\omega = \pi/4}$$

$$= \left[0 - 2\sqrt{2} \times \frac{1}{\sqrt{2}} \right] e^{jn\pi/4} = -2 e^{jn\pi/4}$$

$$\Rightarrow \boxed{y(n) = 4 \cdot e^{jn\pi/4}}$$

$$\Rightarrow \text{Ib } x(n) = (-1)^n = e^{jn\pi}$$

$$\Rightarrow y(n) = e^{jn\pi} [8\sqrt{2} \cos 2\pi - 4\sqrt{2} \cos \pi]$$

$$= e^{jn\pi} [8\sqrt{2}(1) - 4\sqrt{2}(-1)]$$

$$\boxed{y(n) = 12\sqrt{2} \cdot e^{jn\pi}}$$

P 6.1.13 Design a 3 point FIR filter with

impulse response $h(n) = \{\alpha, \beta, \alpha\}$ & the

magnitude response blocks the frequency

$f = 1/3$ & phase the freq. $f = 1/8$ with

unity gain. What is the D.C. gain of

the filter?

Soln: $h(n) = \{\alpha, \beta, \alpha\}$
 $n=-1 \quad \uparrow \quad n=1$
 $n=0$

↓ F.T.

$$\Rightarrow H(e^{j\omega}) = \sum_{n=-1}^{+1} h(n) \cdot e^{-j\omega n}$$

$$= \alpha e^{-j\omega(1)} + \beta + \alpha e^{+j\omega(1)}$$

$$\therefore \boxed{H(e^{j\omega}) = 2\alpha \cos \omega + \beta}$$

Now, given that $H(e^{j\omega}) \big|_{f=1/3} = 0$.

$$\neq H(e^{j\omega}) \Big|_{f = \frac{1}{8}} = 1.$$

$$\Rightarrow H(e^{j\omega}) \Big|_{\omega = 2\pi(\frac{1}{3})} = 0.$$

$$\Rightarrow 2\alpha \cdot \cos\left(\frac{2\pi}{3}\right) + \beta = 0.$$

$$\Rightarrow -2\alpha \cdot \cos\frac{\pi}{3} + \beta = 0.$$

$$\Rightarrow -2\alpha \cdot \frac{1}{2} + \beta = 0 \Rightarrow \boxed{\alpha = \beta}$$

$$\Rightarrow H(e^{j\omega}) \Big|_{\omega = 2\pi(\frac{1}{8})} = 1.$$

$$\Rightarrow 2\alpha \cdot \cos\left(\frac{\pi}{4}\right) + \beta = 1.$$

$$2\alpha \cdot \frac{1}{\sqrt{2}} + \alpha = 1.$$

$$\boxed{\alpha = \frac{1}{1+\sqrt{2}} = \beta}$$

$$\text{So, } H(e^{j\omega}) = \frac{2}{1+\sqrt{2}} \cdot \cos\omega + \frac{1}{1+\sqrt{2}}.$$

$$\text{D.C. gain } \Rightarrow H(e^{j\omega}) \Big|_{\omega=0} = \frac{2}{1+\sqrt{2}} + \frac{1}{1+\sqrt{2}} = \frac{3}{1+\sqrt{2}}$$

P 6-1-14 Digital filters:-

$$(1) y(n) = x(n) - x(n-1]. \text{ [HPF].}$$

$\Rightarrow \downarrow$ F.T.

$$Y(e^{j\omega}) = X(e^{j\omega}) - e^{-j\omega} \cdot X(e^{j\omega}).$$

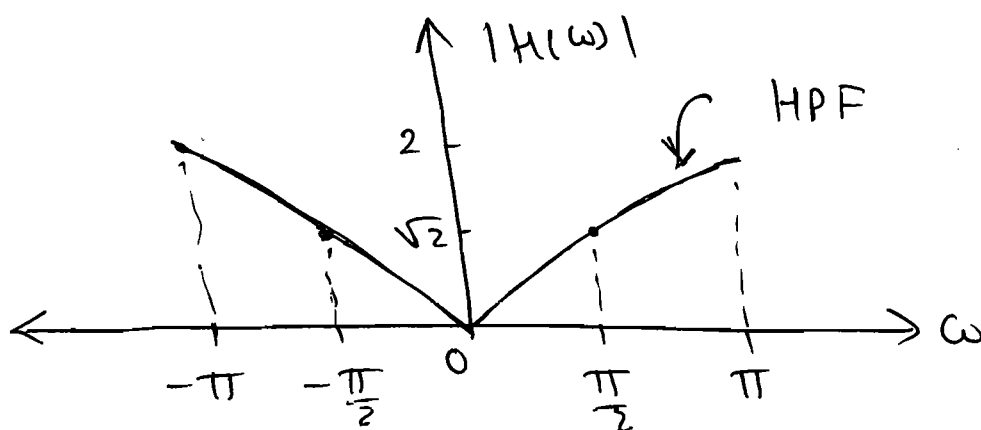
$$\Rightarrow Y(\omega) = (1 - e^{-j\omega}) X(\omega).$$

$$\Rightarrow \text{T.F. } H(\omega) = \frac{Y(\omega)}{X(\omega)} = 1 - e^{-j\omega}.$$

$$\Rightarrow \omega = 0 \Rightarrow H(0) = 1 - 1 = 0.$$

$$\rightarrow \omega = \frac{\pi}{2} \Rightarrow H\left(\frac{\pi}{2}\right) = 1 - e^{-j\frac{\pi}{2}} = 1 + j = \sqrt{2} \angle 45^\circ.$$

$$\rightarrow \omega = \pi \Rightarrow H(\pi) = 1 - e^{-j\pi} = 1 - (-1) = 2.$$



$$(2) \quad Y(n) = x(n) + x(n-1). \quad \text{[LPF]}$$

\Rightarrow \downarrow F.T.

$$Y(\omega) = X(\omega) + e^{-j\omega} \cdot X(\omega).$$

$$\Rightarrow \text{T.F. } \frac{Y(\omega)}{X(\omega)} = H(\omega) = 1 + e^{-j\omega}.$$

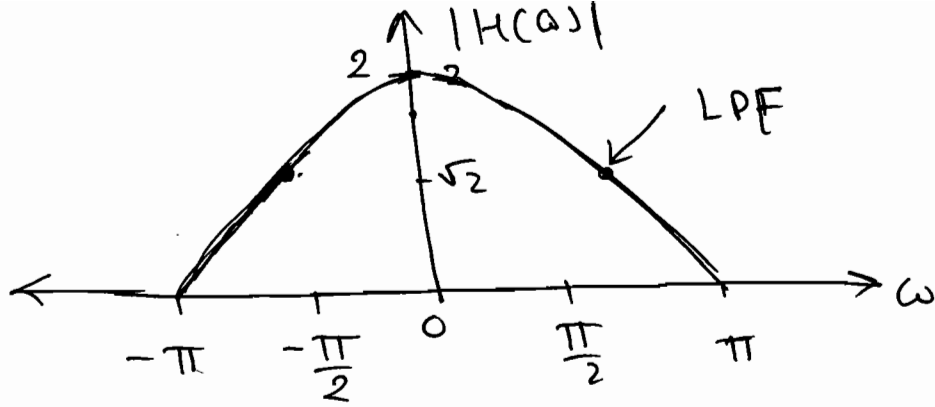
$$\rightarrow \omega = 0 \Rightarrow H(0) = 1 + e^{-j0} = 2.$$

$$\rightarrow \omega = \frac{\pi}{2} \Rightarrow H\left(\frac{\pi}{2}\right) = 1 + e^{-j\frac{\pi}{2}} = 1 - j = \sqrt{2} \angle -45^\circ.$$

$$\rightarrow \omega = \pi \Rightarrow H(\pi) = 1 + e^{-j\pi} = 1 + (-1) = 0.$$

$$\Rightarrow \omega = -\pi \Rightarrow H(-\pi) = 1 + e^{j\pi} = 1 - 1 = 0.$$

⇒



[3] $h(n) = \delta(n) - \delta(n-2)$. [BPF].

Soln:

↓ F.T.

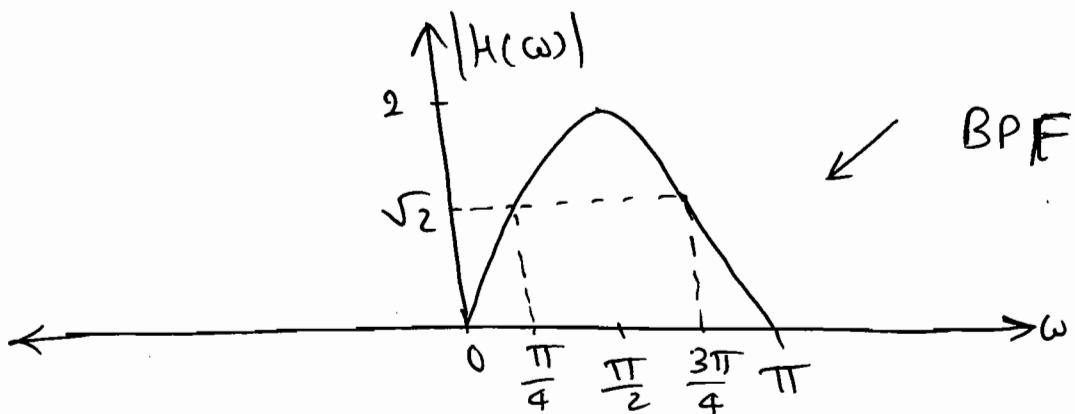
$$\therefore H(\omega) = 1 - e^{-j2\omega} \cdot 1.$$

$$\Rightarrow H(\omega) = 1 - e^{-j2\omega}$$

$$\rightarrow \omega = 0 \Rightarrow H(0) = 1 - e^{-j(0)} = 1 - 1 = 0.$$

$$\rightarrow \omega = \frac{\pi}{2} \Rightarrow H\left(\frac{\pi}{2}\right) = 1 - e^{-j2\left(\frac{\pi}{2}\right)} = 1 - e^{-j\pi} = 1 - (-1) = 2.$$

$$\Rightarrow \omega = \pi \Rightarrow H(\pi) = 1 - e^{-j2\pi} = 1 - 1 = 0.$$



[4] $h[n] = \delta[n] + \delta[n+2]$.

Soln:

↓ F.T.

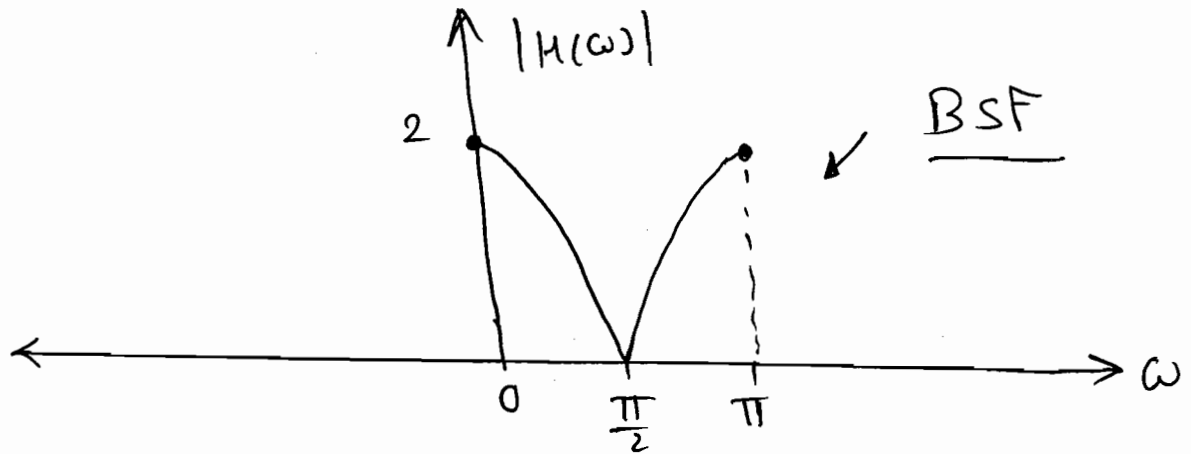
$$\therefore H(\omega) = 1 + e^{-j2\omega} \cdot 1.$$

$$\Rightarrow \boxed{H(\omega) = 1 + e^{-j2\omega}}$$

$$\rightarrow \omega = 0 \Rightarrow H(0) = 1 + e^{-j(0)} = 2.$$

$$\rightarrow \omega = \frac{\pi}{2} \Rightarrow H\left(\frac{\pi}{2}\right) = 1 + e^{-j2\pi \times \frac{\pi}{2}} = 1 + (-1) = 0.$$

$$\rightarrow \omega = \pi \Rightarrow H(\pi) = 1 + e^{-j2\pi} = 1 + 1 = 2.$$



P6.1.15. Consider the system described by the equation $y(n) = ay(n-1) + bx(n) + x(n-1)$, where 'a' & 'b' are real, find the relation between a & b such that $|H(e^{j\omega})| = 1$.

Solⁿ:

$$y(n) = ay(n-1) + bx(n) + x(n-1).$$

↓ F.T.

$$\therefore Y(\omega) = a \cdot e^{-j\omega} Y(\omega) + bX(\omega) + e^{-j\omega} X(\omega).$$

$$\therefore Y(\omega) [1 - a e^{-j\omega}] = [b + e^{-j\omega}] X(\omega).$$

$$\therefore \frac{H(\omega)}{1} = \frac{Y(\omega)}{X(\omega)} = \frac{b + e^{-j\omega}}{1 - a \cdot e^{-j\omega}}.$$

Now, $|H(e^{j\omega})| = 1 \Rightarrow |H(\omega)|^2 = 1.$

$$\Rightarrow H(\omega) \cdot H^*(\omega) = 1.$$

$$\Rightarrow \left[\frac{b + e^{-j\omega}}{1 - a e^{-j\omega}} \right] \cdot \left[\frac{b + e^{j\omega}}{1 - a e^{j\omega}} \right] = 1.$$

$$\therefore \frac{b^2 + b [e^{j\omega} + e^{-j\omega}] + 1}{1 - a [e^{-j\omega} + e^{j\omega}] + a^2} = 1.$$

$$\therefore b^2 + 2b \cos \omega + 1 = 1 - 2a \cos \omega + a^2$$

$$\therefore a^2 - b^2 = 2 \cos \omega [b - a].$$

$$\therefore -(a+b) = 2 \cos \omega.$$

$$\Rightarrow \boxed{a = -b}$$

$$\stackrel{(or)}{=} |H(e^{j\omega})|_{\omega=0} = 1. \quad (\because = 1 \forall \omega).$$

$$\therefore \frac{b+1}{1-a} = 1.$$

$$b+1 = 1-a \Rightarrow \boxed{b = -a}$$

Q.16

PG.1.16 An input $x(n)$ with length 3 is applied to a LTI system having an impulse response $h(n)$ of length 5, and $Y(\omega)$ is the DTFT of the o/p $y(n)$ of the system. If $|h(n)| \leq L$ & $|x(n)| \leq B \forall n$, the maximum value of $Y(0)$ can be _____.

(A) $15LB$ (B) $12LB$

(C) $8LB$ (D) $7LB$.

Solⁿ: $y(n) = x(n) * h(n)$

$\Rightarrow Y(\omega) = X(\omega) \cdot H(\omega)$

$\Rightarrow Y(0) = X(0) \cdot H(0)$

$x(n) \rightarrow L=3$
 $\rightarrow X(\omega) = \sum_{n=0}^2 x(n) \cdot e^{-j\omega n}$

$X(0) = \sum_{n=0}^2 x(n)$

$\Rightarrow Y(0) = \left[\sum_{n=0}^2 x(n) \right] \times \left[\sum_{n=0}^4 h(n) \right]$

$\rightarrow H(\omega) = \sum_{n=0}^4 h(n) \cdot e^{-j\omega n}$

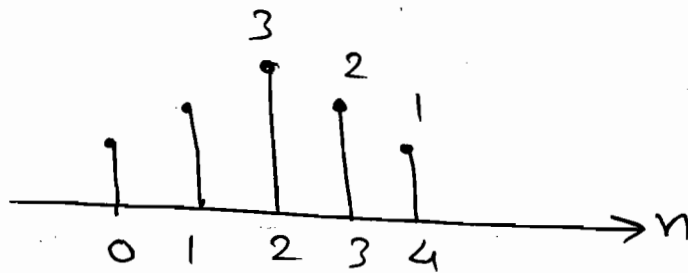
$\rightarrow H(0) = \sum_{n=0}^4 h(n)$

$\Rightarrow Y(0) = \sum_{n=0}^2 B \times \sum_{n=0}^4 B \cdot L$

$Y(0) = 3B \times 5L$

$\Rightarrow Y(0) = 15LB$

P 6.1.17 Consider a filter with I.R. shown in figure. Find the group delay of the filter?



Solⁿ: F.I.R. filters:

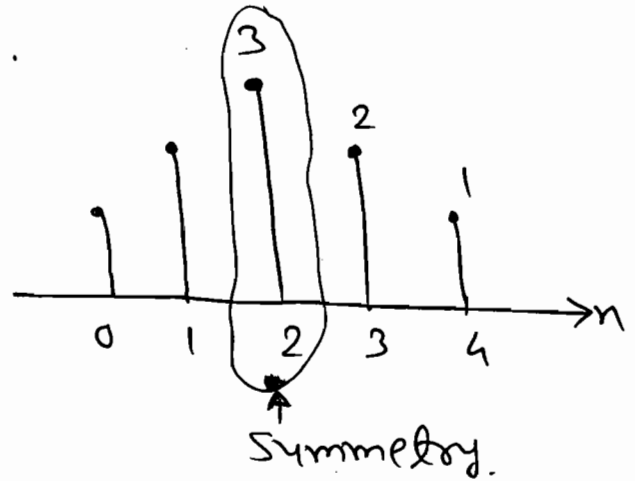
Linear phase response $\theta(\omega) = -\alpha\omega$

$\therefore \alpha$ is the value of n for which spectrum is symmetrical about π .

In this case, $n=2$.

$$\Rightarrow \theta(\omega) = -2\omega$$

$$\Rightarrow t_g(\omega) = -\frac{d\theta(\omega)}{d\omega}$$



$$\Rightarrow \boxed{t_g(\omega) = +2}$$

$$\Rightarrow h[n] = \pm h[N-1-n] \Rightarrow \text{For symmetry.}$$

here, $N = \text{length of I.R.} = 5$

$$\therefore h[n] = h[4-n]$$

$$\Rightarrow h[0] = h[4] = 1$$

$$h[1] = h[3] = 2$$

* Note:

Group delay $t_g(\omega) =$ Value of n about which spectrum is symmetrical.

P 6.1.18 An L.T.I. filter is described by the

difference equation
$$y[n] = x[n] + 2x[n-1] + x[n-2]$$

(a) Obtain the magnitude & phase response.

(b) Find the o/p when the input is

$$x[n] = 10 + 4 \cos \left[\frac{\pi n}{2} + \frac{\pi}{4} \right] ?$$

Soln:
$$y[n] = x[n] + 2x[n-1] + x[n-2]$$

FT
$$Y(\omega) = X(\omega) + 2e^{-j\omega} X(\omega) + 2e^{-j2\omega} X(\omega)$$

$$\Rightarrow H(\omega) = \frac{Y(\omega)}{X(\omega)} = 1 + 2e^{-j\omega} + e^{-j2\omega}$$

$$H(\omega) = (1 + 2\cos\omega + \cos 2\omega) - j(\sin\omega + \sin 2\omega)$$

Mag.

$$\Rightarrow |H(\omega)| = \sqrt{(1 + 2\cos\omega + \cos 2\omega)^2 + (\sin\omega + \sin 2\omega)^2}$$

Phase

$$\angle H(\omega) = -\tan^{-1} \left(\frac{\sin\omega + \sin 2\omega}{1 + 2\cos\omega + \cos 2\omega} \right)$$

$$(b) \quad x(n) = 10 + 4 \cos \left[\frac{\pi}{2}n + \frac{\pi}{4} \right] ?$$

$$\Rightarrow H(\omega) = (1 + e^{-j\omega})^2$$

$$= e^{-j\frac{\omega}{2}(2)} \left(e^{j\frac{\omega}{2}} + e^{-j\frac{\omega}{2}} \right)^2$$

$$= 4e^{-j\omega} \left(\frac{e^{j\frac{\omega}{2}} + e^{-j\frac{\omega}{2}}}{2} \right)^2$$

$$H(\omega) = 4e^{-j\omega} \cdot \cos^2 \frac{\omega}{2}$$

$$\Rightarrow \text{Mag. } |H(\omega)| = 4 \cdot \cos^2 \frac{\omega}{2}$$

$$\text{Phase } \angle H(\omega) = \theta(\omega) = -\omega$$

$$\text{Now } x(n) = \underbrace{10}_{\omega=0} + 4 \cos \left(\underbrace{\frac{\pi}{2}n + \frac{\pi}{4}}_{\omega=\pi/2} \right)$$

$$H(\omega)|_{\omega=0} = 4, \quad H(\omega)|_{\omega=\pi/2} = 4 \cdot e^{-j\frac{\pi}{2}} \cdot \cos^2 \frac{\pi}{4} = 4 \cdot e^{-j\pi/2} = 4 \cdot e^{-j\pi/2}$$

$$\therefore y(n) = K.A. \cos(\omega_0 n + \phi)$$

$$\Rightarrow y(n) = 40 + 4(2) \cdot \cos\left[\frac{\pi n}{2} + \frac{\pi}{4} - \frac{\pi}{2}\right]$$

$$\Rightarrow y(n) = 40 + 8 \cdot \cos\left[\frac{\pi n}{2} - \frac{\pi}{4}\right]$$

* Parseval's relation :-

$$\Rightarrow x(n) \longleftrightarrow X(e^{j\omega})$$

$$\text{The } \sum_{n=-\infty}^{\infty} |x(n)|^2 = \frac{1}{2\pi} \int_{\langle 2\pi \rangle} |X(e^{j\omega})|^2 d\omega$$

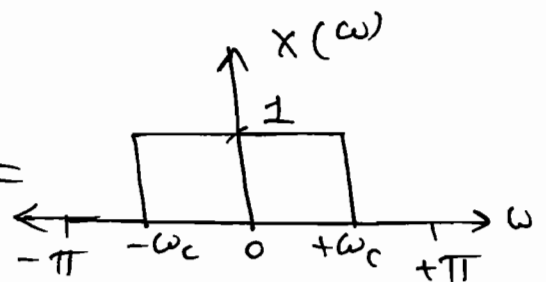
\Rightarrow Parseval's relation is known as Conservation of energy theorem, because DTFT operator preserves energy when going from time domain to freq. domain.

P 6-1-20 Find the energy in the signal

$$x(n) = \frac{\sin \omega_c n}{\pi n}$$

Soln:

$$x(n) = \frac{\sin \omega_c n}{\pi n} \xleftrightarrow{\text{F.T.}} X(\omega) =$$



$$\therefore E_{x(n)} = \sum_{n=-\infty}^{\infty} |x(n)|^2 = \frac{1}{2\pi} \int_{-\pi}^{\pi} |X(e^{j\omega})|^2 d\omega$$

$$\Rightarrow E_{x(n)} = \frac{1}{2\pi} \int_{-\omega_c}^{+\omega_c} c(\omega)^2 \cdot d\omega.$$

$$= \frac{2\omega_c}{2\pi} = \frac{\omega_c}{\pi}.$$

$$\Rightarrow \boxed{E_{x(n)} = \frac{\omega_c}{\pi}}$$

P 6.1.21 Find the value of:

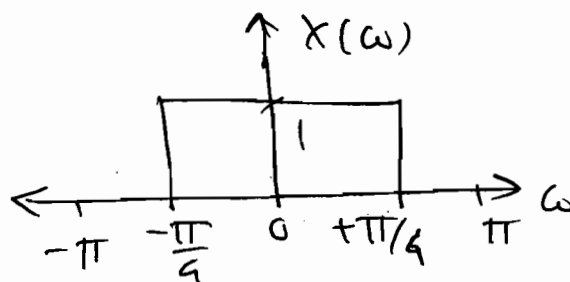
$$\sum_{n=-\infty}^{+\infty} \frac{\sin\left(\frac{n\pi}{4}\right) \cdot \sin\left(\frac{n\pi}{3}\right)}{2\pi n \cdot 5\pi n}$$

Soln:

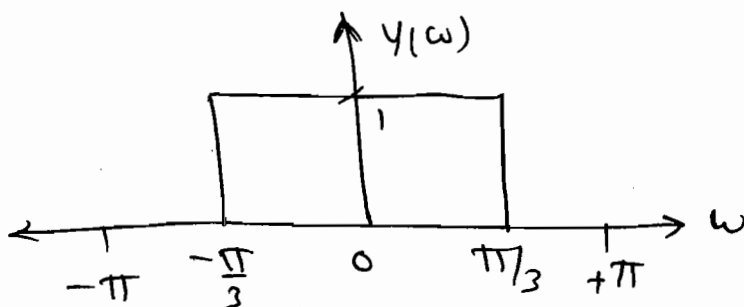
$$\sum_{n=-\infty}^{+\infty} x[n] \cdot y[n] = \frac{1}{2\pi} \int_{\langle 2\pi \rangle} X(e^{j\omega}) \cdot Y(e^{j\omega}) \cdot d\omega.$$

↓
Plancher's Relation.

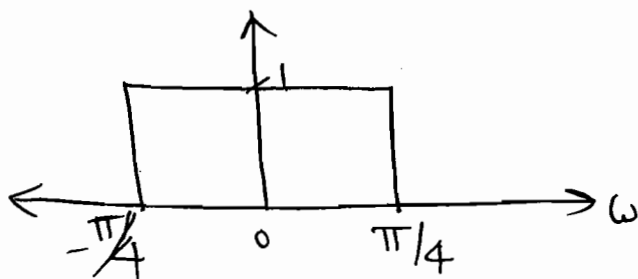
let, $x_1(n) = \frac{\sin \frac{n\pi}{4}}{\pi n} \longleftrightarrow$



$y(n) = \frac{\sin\left(\frac{n\pi}{3}\right)}{\pi n} \longleftrightarrow$



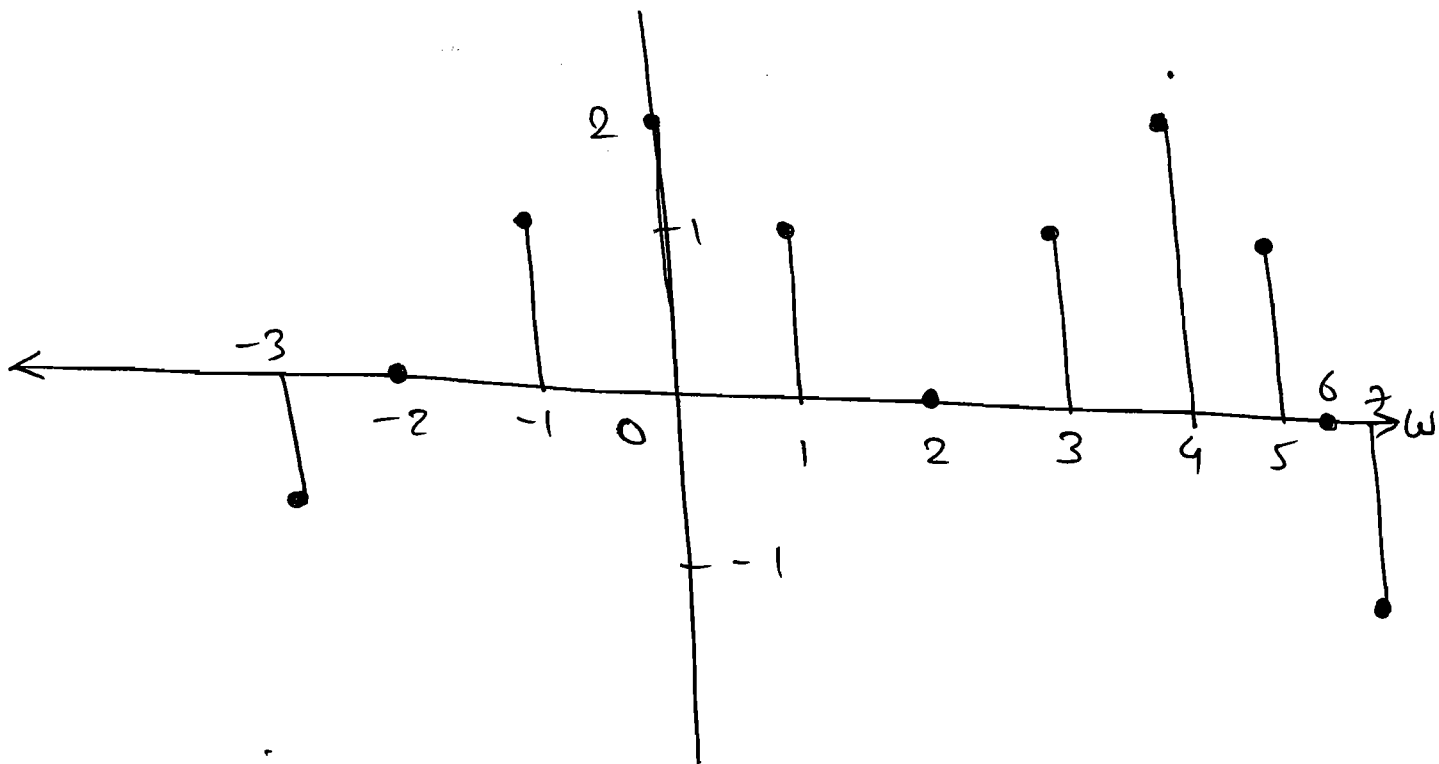
$X(\omega) \cdot Y(\omega) =$



$$\therefore \sum_{n=-\infty}^{+\infty} \frac{\sin\left(\frac{2\pi}{4}\right)}{2\pi n} \cdot \frac{\sin\left(\frac{2\pi}{3}\right)}{2\pi n} = \frac{1}{2\pi \times 10} \int_{-\pi/4}^{\pi/4} (1) \cdot d\omega.$$

$$= \frac{1}{2\pi \times 10} \times \frac{\pi}{2} = \boxed{\frac{1}{40}}$$

P 6.1.22 For the signal shown in fig 6.1-22, find the following quantities without calculating DTFT?



(a) $X(e^{j0})$

Soln:

$$X(e^{j\omega}) = \sum_{n=-\infty}^{+\infty} x(n) \cdot e^{-j\omega n}$$

$$X(e^{j0}) = \sum_{n=-\infty}^{\infty} x(n) \cdot (1).$$

$$X(e^{j0}) = \sum_{n=-3}^7 x(n) = x(-3) + x(-2) + x(-1) + x(0) + x(1) + x(2) + x(3) + x(4) + x(5) + x(6) + x(7).$$

$$\therefore X(e^{j0}) = -1 + 0 + 1 + 2 + 1 + 0 + 1 + 2 + 1 + 0 - 1$$

$$\boxed{X(e^{j0}) = 6}$$

(b) $X(e^{j\pi})$.

Soln: $X(e^{j\omega}) = \sum_{n=-\infty}^{+\infty} x(n) \cdot e^{-j\omega n}$

$$\therefore X(e^{j\pi}) = \sum_{n=-\infty}^{+\infty} x(n) \cdot e^{-j\pi n} = \sum_{n=-\infty}^{+\infty} x(n) \cdot (-1)^n$$

$$\begin{aligned} \therefore X(e^{j\pi}) &= -x(-3) + x(-2) + x(-1) + x(0) \\ &\quad - x(1) + x(2) - x(3) + x(4) \\ &\quad - x(5) + x(6) - x(7) \\ &= -1 - 1 + 2 - 1 - 1 + 2 - 1 + 1 \end{aligned}$$

$$\boxed{X(e^{j\pi}) = 2}$$

(c) $\int_{-\pi}^{\pi} X(e^{j\omega}) d\omega$.

$$\Rightarrow X(e^{j\omega}) = \sum_{n=-\infty}^{+\infty} x(n) \cdot e^{-j\omega n}$$

$$\therefore \int_{-\pi}^{\pi} X(e^{j\omega}) \cdot d\omega = \int_{-\pi}^{\pi} \sum_{n=-\infty}^{+\infty} x(n) \cdot [\cos \omega n - j \sin \omega n] d\omega$$

$$\Rightarrow x(n) = \frac{1}{2\pi} \int_{-\pi}^{\pi} X(e^{j\omega}) \cdot e^{j\omega n} d\omega$$

Put $n=0$.

$$\Rightarrow \int_{-\pi}^{+\pi} x(e^{j\omega}) \cdot c(\omega) \cdot d\omega = 2\pi x(0)$$

sol₁ $\int_{-\pi}^{+\pi} x(e^{j\omega}) \cdot d\omega = 2\pi(2) = 4\pi.$

(d) $\int_{-\pi}^{+\pi} x(e^{j\omega}) \cdot e^{j2\omega} \cdot d\omega.$

Sol_n: $x(n) = \frac{1}{2\pi} \int_{-\pi}^{\pi} x(e^{j\omega}) \cdot e^{j\omega n} \cdot d\omega.$

here, $n=2.$

$\therefore \int_{-\pi}^{+\pi} x(e^{j\omega}) \cdot e^{j2\omega} \cdot d\omega = 2\pi x(2) = 0.$

(e) $\int_{-\pi}^{+\pi} |x(e^{j\omega})|^2 \cdot d\omega.$

Sol_n: $\sum_{n=-\infty}^{\infty} |x(n)|^2 = \frac{1}{2\pi} \int_{-\pi}^{\pi} |x(e^{j\omega})|^2 \cdot d\omega.$

$\Rightarrow \int_{-\pi}^{\pi} |x(e^{j\omega})|^2 \cdot d\omega = 2\pi \left[\sum_{n=-\infty}^{\infty} |x(n)|^2 \right].$

$= 2\pi [1+1+4+1+1+4+1+1].$

$= 28\pi.$

(f) $\int_{-\pi}^{\pi} \left| \frac{d}{d\omega} x(e^{j\omega}) \right|^2 \cdot d\omega.$

Soln: $x(n) \leftrightarrow X(e^{j\omega})$

$$nx(n) \leftrightarrow +j \frac{d}{d\omega} X(e^{j\omega})$$

$$\therefore \int_{-\pi}^{+\pi} \left| \frac{d}{d\omega} X(e^{j\omega}) \right|^2 d\omega = 2\pi \sum_{n=-\infty}^{+\infty} |-jn x(n)|^2$$

$$= 2\pi \sum_{n=-\infty}^{+\infty} |nx(n)|^2$$

$$= 2\pi [9 + 0 + 1 + 0 + 1 + 0 + 1 + 64 + 25 + 49]$$

$$= 300\pi$$

(g) $\angle X(e^{j\omega})$

Soln: $\angle X(e^{j\omega}) = \theta(\omega) = -2\omega = -2\omega$

(\because Symm. @ $n=2$).

P 6.1.23

Given $h(n) = [1, 2, 2]$, $f(n)$ is

obtained by convolving $h(n)$ with itself

and $g(n)$ by correlating $h(n)$ with itself.

Which one of the following statements is

TRUE?

(a) $f(n)$ is causal and its maximum value is 9.

(b) $f(n)$ is non-causal.

(c) $g(n)$ is causal and its maximum

value is 9.

(d) $g(n)$ is non causal and maximum value is 9.

Soln: $f(n) = h(n) * h(n)$. ← ~~convolution~~ Convolution

$g(n) = h(n) * h(-n)$. ← Correlation

$\Rightarrow h(n) = [1, 2, 2] \rightarrow 0 \leq n \leq 2$.

$n \rightarrow 0, 1, 2$

$\Rightarrow h(-n) = [1, 2, 2] \rightarrow -2 \leq n \leq 0$.

$n \rightarrow +2, -1, -2$

Limits

$\Rightarrow f(n) = h(n) * h(n) \Rightarrow 0 \leq n \leq 4$. → (C)
 $0 \leq n \leq 2 \quad 0 \leq n \leq 2$

$\Rightarrow g(n) = h(n) * h(-n) \rightarrow -2 \leq n \leq 2$. → (NC)
 $0 \leq n \leq 2 \quad -2 \leq n \leq 0$

Now, $f(n) = h(n) * h(n)$

$f(n) = \{1, 4, 10, 8, 4\}$.

	1	2	2
1	1	2	2
2	2	4	4
2	2	4	4

$\Rightarrow g(n) = h(n) * h(-n)$.

$= \{2, 6, 9, 8, 2\}$.

	1	2	2
2	2	4	4
2	2	4	4
1	1	2	2

So, Ans - (d) $g(n)$ is N.C. and max. value is 9.

PG. 1.14 A continuous time signal $x(t)$ is to be filtered to remove freq. Component in the range $5 \text{ kHz} \leq f \leq 10 \text{ kHz}$. The maximum freq. present in $x(t)$ is 20 kHz . Find the minimum sampling frequency & find freq. response of ideal digital filter that will remove the desired freq. from $x(t)$?

\Rightarrow Soln: $5 \text{ kHz} \leq f \leq 10 \text{ kHz} \leftarrow$ Analog rang.

\Rightarrow $-\pi \leq \omega \leq +\pi \leftarrow$ Digital filter.
 \hookrightarrow Dig. freq.

\Rightarrow here, $f_{\text{max}} = 20 \text{ kHz}$.

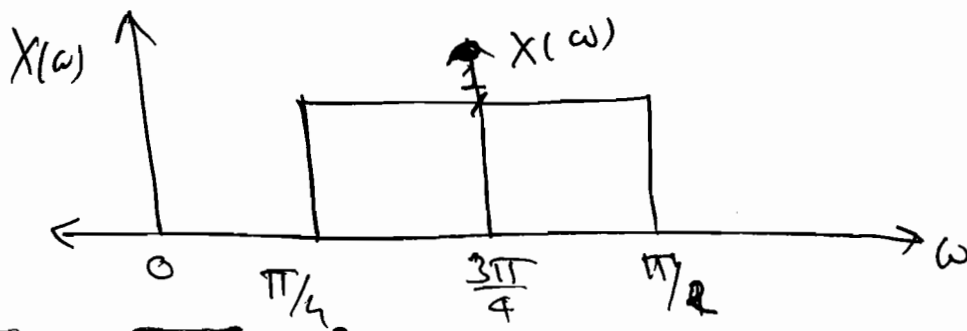
\Rightarrow s.f. $\Rightarrow f_s = 2 f_m = 40 \text{ kHz}$.

*
*
*

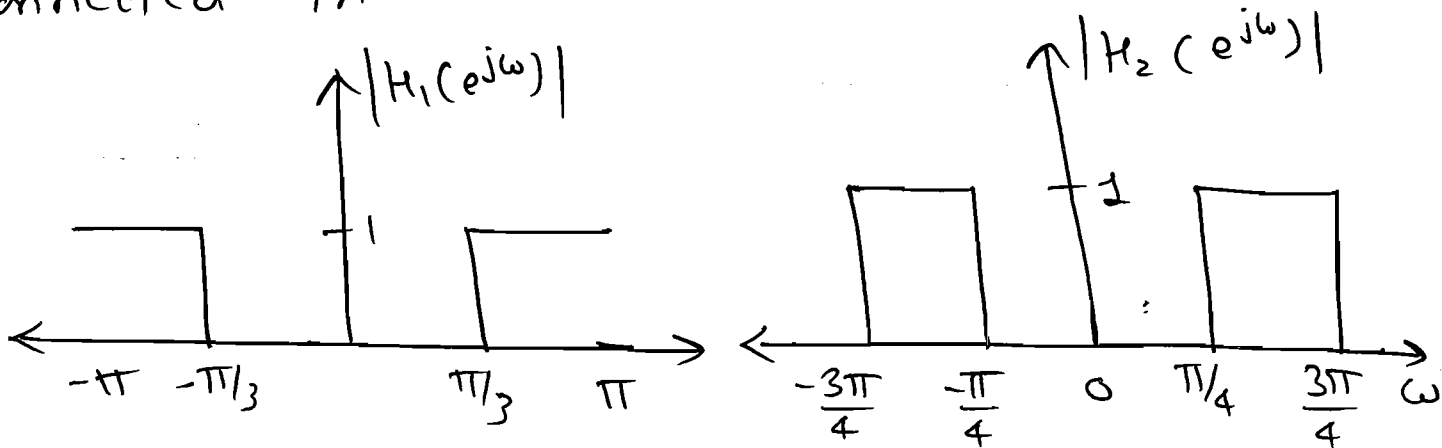
Digital freq. $\omega = \frac{2\pi f}{f_s} \rightarrow$ Analog freq.
 $f_s \rightarrow$ sampling freq.

$$\therefore \frac{2\pi (5\text{K})}{40\text{K}} \leq \omega \leq \frac{2\pi (10\text{K})}{40\text{K}}$$

$$\therefore \boxed{\frac{\pi}{4} \leq \omega \leq \frac{\pi}{2}}$$



P 6.1.25 2 ideal filters freq. response are shown in fig. For an arbitrary input $x(n)$, find the range of freq. that can be present in the o/p $y(n)$, if they are connected in (a) Cascade (b) Parallel.



Soln:

(a) Cascade:

$$|H(e^{j\omega})| = |H_1(e^{j\omega})| \cdot |H_2(e^{j\omega})|$$

so,

$$\boxed{\pi/3 \leq \omega \leq \frac{3\pi}{4}}$$

(b) Parallel.

$$|H(e^{j\omega})| = |H_1(e^{j\omega})| + |H_2(e^{j\omega})|$$

so,

$$\boxed{\omega \geq \frac{\pi}{4}}$$

*

$$e^{-at} * e^{-at} = te^{-at} \longleftrightarrow \frac{1}{(a+j\omega)^2}$$

$$a^n u[n] * a^n u[n] \longleftrightarrow \frac{1}{(1 - a e^{-j\omega})^2}$$

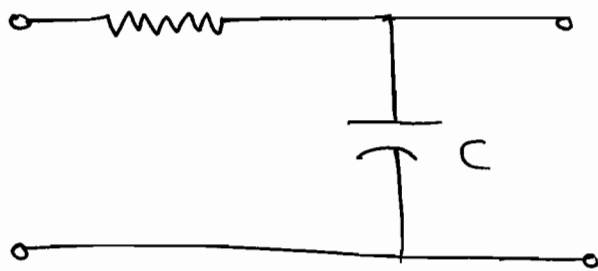
$$= (n+1) a^n u[n]$$

Ch-7 - Z-Transform

⇒ Generation (or) Generalization of DTFT is Z-Transform.

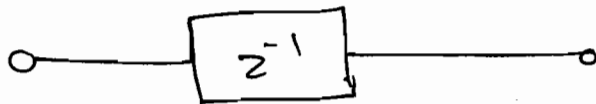
⇒ Discrete version of L.T.

⇒ $R = 1/\omega C \pm 2\% \text{ tolerance}$



$$H(s) = \frac{1}{1 + sCR}$$

⇓



⇒ $s = \sigma + j\omega$
↓
Complex variable

$$z = R e^{j\omega}$$

⇒ In L.T. if i/p $x(t) = e^{st} \Rightarrow$ $y(t) = e^{st} \cdot H(s)$

⇒ In Z.T. $x(n) = z^n$ \rightarrow $\begin{matrix} h(n) \\ \downarrow \\ H(z) \end{matrix}$ \rightarrow O/P $y(n) = z^n \cdot H(z)$

⇒ Z.T. of general D.T. signal $x(n)$ is

$$X(z) = \sum_{n=-\infty}^{+\infty} x(n) \cdot z^{-n}$$

Now $z = r \cdot e^{j\omega}$

$$\therefore X(z \cdot e^{j\omega}) = \sum_{n=-\infty}^{\infty} [x(n) \cdot r^{-n}] e^{-j\omega n}$$

$$\Rightarrow X(z) = \text{F.T.} \{ x(n) \cdot r^{-n} \}$$

if $r = 1$

\Rightarrow

$$X(z) = \text{F.T.} \{ x(n) \}$$

\Rightarrow

$$\boxed{\text{Z.T.} = \text{D.T.} \cdot \text{F.T.}}$$

\mathcal{Z} L.T.

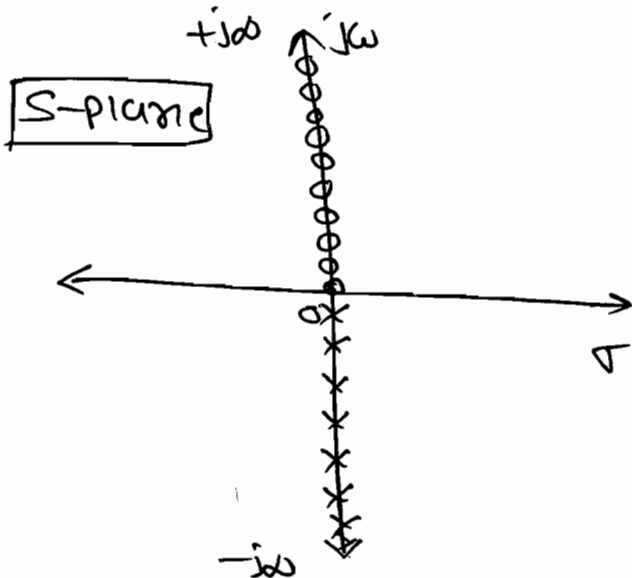
Z.T.

$$X(s) = \int_{-\infty}^{+\infty} x(t) \cdot e^{-st} dt$$

$$X(s) = \text{F.T.} \{ x(t) \cdot e^{-\sigma t} \}$$

if $\sigma = 0 \Rightarrow s = j\omega$

L.T. = C.T.F.T



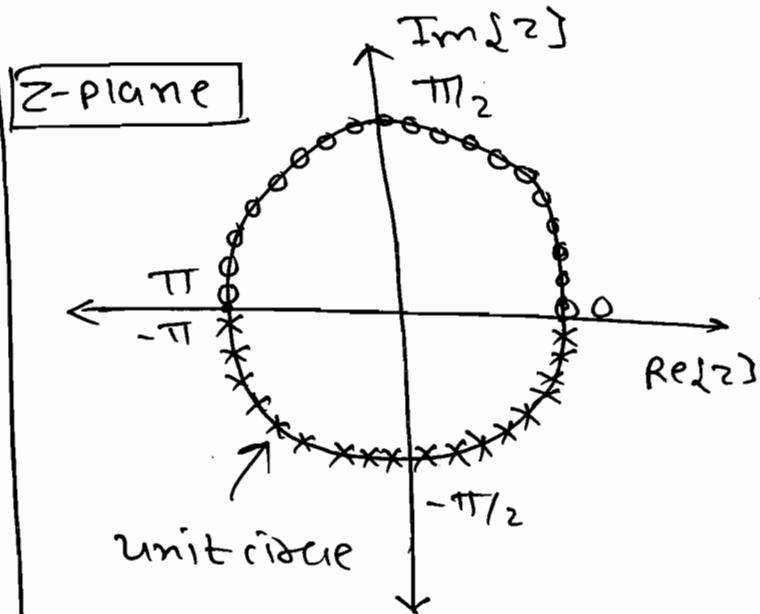
\Rightarrow L.T. Calculated on $j\omega$ axis is C.T.F.T.

$$X(z) = \sum_{n=-\infty}^{\infty} x(n) \cdot z^{-n}$$

$$X(z) = \mathcal{Z} \text{ F.T.} \{ x(n) \cdot r^{-n} \}$$

if $r = 1$

Z.T. = D.T.F.T.



\Rightarrow Z.T. Calculated on unit circle is P.T.F.T.

Note:

\Rightarrow +ve part of the 'jw' axis is corresponds to upper half of the unit circle. (ω varies from 0 to π).

\Rightarrow -ve part of the 'jw' axis is corresponds to lower half of the unit circle (ω varies from 0 to $-\pi$).

$\Rightarrow x(t) = e^{st} \rightarrow \text{Cont}^n$.

$\downarrow t = nT_s$

$x(nT_s) = e^{snT_s} \rightarrow \text{Discrete}$

$\Rightarrow x[n] = (e^{sT_s})^n \Leftrightarrow x[n] = z^n$

\Downarrow

$$z = e^{sT_s}$$

\Rightarrow The range of values of 'z' for which $e^{s(t)}$ is defined

$$\left[\sum_{n=-\infty}^{\infty} |x(n)z^{-n}| < \infty \right] \text{ is R.O.C. of Z.T.}$$